



**परमाणु ऊर्जा शिक्षण संस्था**  
**Atomic Energy Education Society**  
**टर्म-I परीक्षा / Term-I Examination 2024 - 25**

कक्षा / Class : III

अवधि / Duration : 3 Hours

विषय / Subject : ENGLISH

अधिकतम अंक / Maximum Marks : 80

**विद्यार्थी द्वारा भरा जाए / To be filled by the Student**

अद्वितीय परीक्षा क्रमांक / Unique Examination No: \_\_\_\_\_

कक्षा / अनुभाग Class / Sec.: \_\_\_\_\_ दिनांक / Date: \_\_\_\_\_

परीक्षा का दिन / Day of Examination: \_\_\_\_\_

विद्यालय का नाम / Name of the School: \_\_\_\_\_

हस्ताक्षर निरीक्षक ) दिनांक सहित (Invigilator's Sign. (With date): \_\_\_\_\_

**अध्यापकों द्वारा भरा जाए / To be filled by the Teachers**

प्राप्तांक / Marks Obtained  पूर्णांक/ Total Marks

हस्ताक्षर परीक्षक) दिनांक सहित / (Examiner's Sign. (With date): \_\_\_\_\_

हस्ताक्षर जाँचकर्ता) दिनांक सहित / (Cross Checker's Sign.(With date): \_\_\_\_\_

हस्ताक्षर परीक्षा प्रभारी) दिनांक सहित / (Exam I/C Sign. (With date): \_\_\_\_\_

**सामान्य निर्देश / General Instructions :**

- Marks are indicated against each question.
- Read each question carefully and answer neatly.
- Ensure that questions from every section are answered
- On completion of the exam, the student must hand over the answer sheet to the invigilator.

## READING

**1) Read the passage carefully and answer the following questions.**

It was a holiday. The local market was full of people. The toy shop opened at 9 a.m. There were many toys like wooden toys, soft toys, board games, bats and balls and many others. All the toys in the toy shop were waiting to see who would buy them.

“Look there,” shouted the toy kitten. They saw two girls coming towards the shop.

But they passed by just looking at the toys through the windows. “Oh, no!” exclaimed all the toys at once.

After some time, a girl and a little boy stopped at the door of the toy shop. Their father stopped too.

The girl pointed at the board games displayed in the shop. Finally, she chose the game ‘Snakes and Ladders’.

**i) Choose the correct answer and fill in the blanks. (2X1=2M)**

- a. The local market was full of \_\_\_\_\_ (people/ghosts)
- b. All the \_\_\_\_\_ (kites/toys) in the toy shop were waiting to see who would buy them.

**ii) The opposite of “closed” from the passage \_\_\_\_\_. (1X1=1M)**

**iii) The past tense of stop is \_\_\_\_\_. (1X1=1M)**

**iv) Finally which game did the girl choose? (1X1=1M)**

---

---

**2) Read the poem carefully and answer the following questions.**

Out in the garden,  
Each fine day.  
With my ball,  
I like to play.

I bounce my ball,  
I throw my ball.  
I catch my ball,  
On each fine day.

Out in the garden,  
Each fine day.  
With my kite,  
I like to play.

I tug my kite,  
I pull my kite.  
I fly my kite,  
On each fine day.

**i) Fill in the blanks. (2X1=2M)**

- a. I bounce my \_\_\_\_\_ (ball/bat)  
b. I like to \_\_\_\_\_ (travel/play)

**ii) Rhyming word of “say” from the poem \_\_\_\_\_. (1X1=1M)**

**iii) The opposite of “push” from the poem \_\_\_\_\_. (1X1=1M)**

**iv) Where are the children playing? (1X1=1M)**

---

---

**3) Read the passage and answer the following questions. (1x10= 10M)**

Seema is Renu's best friend. She is getting ready to go to Renu's birthday party in the evening. She bought a big book of stories as a birthday gift for Renu. Seema wants to wrap it in pink paper. She knows that pink is Renu's favourite colour. But she can't find pink paper. Seema is sad. Seeing Seema so sad, her mother suggested her to wrap the gift in her pink scarf. Seema was thrilled and happy again.

**Tick (✓) the correct answer:**

1. Who is Renu's best friend?

- a) Seeta                      b) Reema                      c) Rita                      d) Seema

2. What did Seema buy for Renu's birthday?

- a) A toy                      b) Story book                      c) Craft book                      d) Drawing book

3 What did Seema's mother suggest she use to wrap the gift?

- a) A pink scarf                      b) Pink paper                      c) A blue ribbon                      d) A yellow bag

4 How did Seema feel after wrapping the gift?

- a) Sad                      b) Confused                      c) Thrilled and happy                      d) Angry

5) Who is sad?

- a) Seema                      b) Renu                      c) Rita                      d) Gita

6) Select the correct opposite gender for the word Father:

- a) Sister                      b) Uncle                      c) Mother                      d) Brother

7 Renu's favourite colour is \_\_\_\_\_ .

- a) Red                      b) Pink                      c) Yellow                      d) Blue

8 The opposite word for sad is \_\_\_\_\_

- a) Unhappy                      b) Angry                      c) Upset                      d) Happy

9) What is the past tense of buy? \_\_\_\_\_

10) What is the plural form of book? \_\_\_\_\_

**TEXTUAL QUESTIONS (10 MARKS)**

**4) Choose the correct answer. (2X1=2M)**

- i. A rainbow has \_\_\_\_\_ colours.  
five                      six                      seven                      eight
- ii. Meena walked towards the stream near the \_\_\_\_\_ bridge.  
concrete                      bamboo                      iron                      steel

**5) Answer the following questions. (4x2=8M)**

- i. Who were the four friends?

---

---

- ii. What was Meena playing with?

---

---

- iii. How did Moti find Badal?

---

---

- iv. Why did the children want to share the crayons?

---

---

**CREATIVE WRITING (10 MARKS)**

- 6) Write five sentences on the given picture. You can use the following words given in the help box. (1X5=5M)

Parrot, balloon, painting, puppy, joker, football
---



---

---

---

---

---

---

---

---

---

---

**7) Write a few lines about your friend by filling in the blanks. (5M)**

**My Friend**

- i. My friend's name is \_\_\_\_\_.
- ii. He/She \_\_\_\_\_ is a (boy/girl) \_\_\_\_\_.
- iii. He/She is \_\_\_\_\_ years old.
- iv. His/Her favourite colour is \_\_\_\_\_.
- v. He/She likes to play \_\_\_\_\_.

**GRAMMAR (15 MARKS)**

**8) Add “.” or “?” to the following. (3X1=3M)**

- i. How old are you \_\_\_\_\_
- ii. I have a bicycle \_\_\_\_\_
- iii. What is your favourite colour \_\_\_\_\_

**9) Fill in the blanks using “a” or “an”. (3X1=3M)**

- i. \_\_\_\_\_ elephant has four legs.
- ii. I have \_\_\_\_\_ cat.
- iii. She is baking \_\_\_\_\_ cake.

**10) Write plural form of the following words. (3X1=3M)**

- i. bat - \_\_\_\_\_
- ii. mango - \_\_\_\_\_
- iii. doll - \_\_\_\_\_

**11) Choose the correct word from the bracket given below. (2X1=2M)**

i) The notebook is \_\_\_\_\_ (in/on) the table.

ii) I am \_\_\_\_\_ (in/on) the school.

**12) Arrange the following names in alphabetical order. (4X ½ =2M)**

RANJAN

SRUTI

DEEPTI

RITU

**13) Write the past tense of the following words. (2X1=2M)**

i. look - \_\_\_\_\_

ii. help - \_\_\_\_\_

**VOCABULARY (10 MARKS)**

**14) Write the opposite of the following words. (3X1=3M)**

i) love - \_\_\_\_\_

ii) beautiful - \_\_\_\_\_

iii) big - \_\_\_\_\_

**15) Write the rhyming words of the following: (2X1=2M)**

i. pack - \_\_\_\_\_

ii. ball- \_\_\_\_\_

**16) Circle the action words. (2X1=2M)**

i. nice

eat

mountain

ii. play

biscuit


cake



17) Add a word from the help box .

(3X1=3M)

round, big, hot



i. \_\_\_\_\_

ii. \_\_\_\_\_

iii. \_\_\_\_\_

**SPELLINGS (10 MARKS)**

18) Fill in the missing letters.

(4X1=4M)

i. s q \_ \_ a r \_ \_

ii. m \_ \_ r k \_ \_ t

iii. f \_ \_ v o u r \_ \_ t e

iv. s h \_ \_ r \_ \_

19) Unjumble the letters to make meaningful words.

(3X1=3M)

i. krba - \_\_\_\_\_

ii. btoa- \_\_\_\_\_

iii. elmarb - \_\_\_\_\_

20) Circle the correct spellings.

(3X1=3M)

i. neighbor                      neighbour                      neighboor                      neighbor

ii. crayons                      creyons                      craeyons                      creayons

iii. strim                      streem                      stream                      striem

**21. Write the paragraph given below in good handwriting. (5M)**

There was a wolf who got injured while fighting a bear. He wasn't able to get himself food or water. One day, a sheep passed by him. He asked the sheep to get him water, so he had the strength to get solid food. The sheep quickly realised he was the solid food, so he said that he would not get the wolf any water, and went away.

This image shows a full page of blank primary-ruled paper. It features horizontal light blue lines spaced evenly down the page. Vertical red lines are positioned on either side of the page, creating margins. The paper is otherwise completely blank, with no handwriting or other markings.



कुल मुद्रित पृष्ठ संख्या / Total No. of printed pages: 12

## परमाणु ऊर्जा शिक्षण संस्था

Atomic Energy Education Society

टर्म-I परीक्षा / Term-I Examination 2024-25

कक्षा / Class : III

अवधि / Duration : 3 Hours

विषय / Subject : हिंदी

अधिकतम अंक / Maximum Marks : 80

**विद्यार्थी द्वारा भरा जाए / To be filled by the Student**

अद्वितीय परीक्षा क्रमांक / Unique Examination No: \_\_\_\_\_

कक्षा / अनुभाग Class / Sec.: \_\_\_\_\_ दिनांक / Date: \_\_\_\_\_

परीक्षा का दिन / Day of Examination: \_\_\_\_\_

विद्यालय का नाम / Name of the School: \_\_\_\_\_

हस्ताक्षर निरीक्षक (दिनांक सहित) / Invigilator's Sign. (With date): \_\_\_\_\_

**अध्यापकों द्वारा भरा जाए / To be filled by the Teachers**

प्राप्तांक / Marks Obtained  पूर्णांक / Total Marks

हस्ताक्षर परीक्षक (दिनांक सहित) / Examiner's Sign. (With date): \_\_\_\_\_

हस्ताक्षर जाँचकर्ता (दिनांक सहित) / Cross Checker's Sign. (With date): \_\_\_\_\_

हस्ताक्षर परीक्षा प्रभारी (दिनांक सहित) / Exam I/C Sign. (With date): \_\_\_\_\_

सामान्य निर्देश / General Instructions:

- 1) सभी प्रश्न करना अनिवार्य हैं ।
- 2) सभी प्रश्नों के उत्तर निर्देशानुसार लिखिए ।
- 3) प्रश्नों के अंक उनके सामने अंकित हैं ।
- 4) स्वच्छता एवं सुन्दर लेख का विशेष ध्यान रखें ।

## पठित गद्यांश (5 अंक)

**प्रश्न 1. पठित गद्यांश को पढ़कर नीचे दिए गए प्रश्नों के उत्तर लिखिए। (5)**

गर्मियों के दिन थे। सौरभ के चाचा जी ने अपने बगीचे के एक टोकरी आम भेजे। आम बहुत मीठे थे। सौरभ को आम बहुत अच्छे लगे। उसने सोचा-ऐसे ही आम में अपने बगीचे में लगाऊंगा। उसने बगीचे में एक जगह थोड़ी मिट्टी खोदी। वहाँ आम की एक गुठली डाल दी। गुठली पर मिट्टी डालकर उसने थोड़ा पानी छिड़क दिया। वह प्रतिदिन सुबह वहाँ पानी डालता। कुछ दिन बीत गए। आम का पौधा नहीं निकला। उसने पानी डालना बंद कर दिया।

**i) सही (✓) का निशान लगाओ।**

(क) कौन से दिन थे? (1)

सर्दी ( )

बरसात ( )

गर्मी ( )

(ख) सौरभ के चाचा जी ने सौरभ के लिए क्या भेजा? (1)

गुठली ( )

आम ( )

बैंगन ( )

ii) आम खाकर सौरभ ने क्या सोचा? (1)

---

---

iii) उसने गुठली का क्या किया? (1)

---

---

iv) वाक्य बनाओ।

(1)

टोकरी - -----

**प्रश्न 2. पठित गद्यांश को पढ़कर नीचे दिए गए प्रश्नों के उत्तर लिखिए। (5)**

अकबर को इस बात का विश्वास नहीं हुआ। उन्होंने उस व्यक्ति से कहा कि यदि तुम सारी रात पानी में खड़े रहो तो मैं तुम्हें थैली भर मोहरें इनाम में दूँगा। वह मान गया। अगली रात वह व्यक्ति यमुना के ठंडे जल में पूरी रात खड़ा रहा। प्रातः वह बादशाह के दरबार में आया। बादशाह ने आश्चर्य से पूछा, “तुम इतनी सर्दी में सारी रात पानी में कैसे खड़े रहे?”

**प्रश्न - क और ख के सही उत्तर पर (✓) का चिन्ह लगाइए।**

क) राजा अकबर ने उस व्यक्ति को थैली भर क्या देने को कहा? (1)

- i) घास ( )      ii) मोहरें ( )      iii) अनाज ( )      iv) फल ( )

ख) वह व्यक्ति रात भर किस नदी में खड़ा रहा? (1)

- i) गंगा ( )      ii) सतलुज ( )      iii) यमुना ( )      iv) गोदावरी ( )

ग) नीचे दिए गए शब्दों के (उल्टे अर्थ) वाले शब्द गद्यांश में से ढूँढ़कर लिखिए। (2)

अविश्वास x -----      दिन x -----

घ) नीचे लिखे शब्द का समान अर्थ गद्यांश में से चुनकर लिखिए। (1)

पुरस्कार = -----

### अपठित गद्यांश (10 अंक )

**प्रश्न 3 . अपठित गद्यांश को पढ़कर नीचे दिए गए प्रश्नों के उत्तर लिखिए।**

राम और मोहन अच्छे दोस्त थे। एक दिन वे दोनों जंगल के पास से जा रहे थे। तभी रास्ते में उन्हें एक शेर दिखाई दिया । राम तुरंत भाग कर पास के पेड़ पर चढ़ गया । मोहन को पेड़ पर चढ़ना नहीं आता था, पर उसने सुना था कि जंगली जानवर मरे हुए लोगों को नहीं खाते । शेर ने मोहन को सूँघा और सोचा वह मरा हुआ है। शेर वहाँ से चला गया । राम ने मोहन से पूछा, “शेर ने तुम्हारे कान में क्या कहा?” मोहन ने कहा, “शेर ने कहा कि मतलबी दोस्तों से दूर रहो।”

क) दोनों दोस्तों का क्या नाम था? (1)

- i) राम -श्याम ( )      ii) राम -मोहन ( )      iii) मोहन -सोहन ( )

ख) दोनों दोस्तों को रास्ते में कौन मिला? (1)

- i) हाथी ( )      ii) भालू ( )      iii) शेर ( )

ग) मोहन शेर को देखकर कहाँ चढ़ गया? (1)

- i) पेड़ पर ( )      ii) रस्सी पर ( )      iii) झूले पर ( )

घ) नीचे लिखे वाक्यों के सामने सही (✓) या गलत (×) का चिन्ह लगाइए। (2)

i) मोहन को पेड़ पर चढ़ना नहीं आता था। ( )

ii) शेर ने मोहन को सूँघा और उसे खा गया। ( )

ड.) सही विकल्प चुनकर खाली जगह भरो । (2)

i) जंगली जानवर मरे हुए ----- को नहीं खाते । ( फलों / लोगों )

ii) शेर ने कहा कि मतलबी दोस्तों से ----- रहो । ( दूर / पास )

च) नीचे लिखे शब्दों के विलोम शब्द (उल्टे अर्थ वाले) शब्द गद्यांश में से ढूँढ़कर लिखिए। (2)

i) दुश्मन × -----

ii) उतरना × -----

छ) नीचे दिए गए शब्द का समान अर्थ गद्यांश से ढूँढ़कर लिखिए। (1)

वृक्ष = -----

### पाठ्यपुस्तकीय प्रश्न (10 अंक)

**प्रश्न 4. नीचे दिए गए प्रश्नों के उत्तर लिखिए।**

क) बया रानी अपना घर किससे बनाती है? (1)

---

---

ख) बीरबल किसलिए प्रसिद्ध थे? (1)

---

---

ग) गीदड़ को मगरमच्छ की सच्चाई कैसे पता चली ? (2)

---

---

---

घ) 'सीखो' कविता में हमें पेड़ों की झुकी डालियों से क्या सीखने को मिलता है? (2)

---

---

---

ड.) कविता में चींटी को क्या-क्या कहा गया है? (2)

---

---

---

च) 'मित्र को पत्र' पाठ में रूपम और अभिषेक कौन-कौन से खेल खेलते हैं? दो खेलों के नाम लिखो। (2)

---

---


---



रचनात्मक लेखन (10 अंक)

प्रश्न 5 (क) नीचे दिए गए चित्र को ध्यान से देखकर इसके बारे में पाँच वाक्य लिखिए।

(5)



---

---

---

---

---

---

---

---

---

---

ख) किसी एक विषय पर पाँच वाक्य लिखिए ।

(5)

बीरबल / आम का पेड़

---

---

---

---

---

---

व्याकरण (15 अंक )

प्रश्न 6. नीचे दिए गए प्रश्नों के सही उत्तर चुनकर लिखिए ।

क) पेड़ की पत्तियाँ ----- हैं । (हरी / साहसी) (1)

ख) गौरव अपने साथियों में सबसे ----- है । ( मीठा / लंबा ) (1)

ग) उदाहरण देखकर समान तुक वाले शब्द लिखिए । (2)

धूप - सूप

i) दाना - ----- ii) राग - -----

घ) नीचे दिए गए शब्दों को उलट कर लिखिए और नया शब्द बनाइए। (2)

नदी - दीन

i) रीना - ----- ii) खीरा - -----

ड.) नीचे दिए गए एक वचन शब्दों के बहुवचन रूप लिखिए। (2)

i) चूड़ी - \_\_\_\_\_

ii) तिनका - \_\_\_\_\_

च) कोष्ठक में दिए गए सही शब्द को चुनकर खाली जगह पर लिखिए। (1)

अकबर के दरबार \_\_\_\_\_ अनेक विद्वान थे । ( मैं / मैं )

छ) नीचे दिए गए दो नाम वाले शब्दों अर्थात् संज्ञा शब्दों के सामने (✓) का चिन्ह लगाइए। (2)

देखा ( )      भारत ( )      खेलना ( )      अभिषेक ( )

ज) नीचे लिखे शब्दों का प्रयोग करते हुए वाक्य बनाइए। (2)

कठिन :-----

-----

सहायता :-----

-----

झ) नीचे दिए गए वाक्यों में उचित विराम चिन्ह का प्रयोग करो । ( । , ? , ! ) (2)

तुम क्यों हँस रहे हो \_\_\_\_\_

मेरा नाम पूजा है \_\_\_\_\_

### शब्दावली (10 अंक )

प्रश्न 7. नीचे दिए गए प्रश्नों के उत्तर लिखिए। (2)

क) इनमें से कौन से जीव जल और थल दोनों पर ही रहते हैं ? (✓) चिन्ह लगाइए।

गीदड़ ( )      केंचुए ( )      खरगोश ( )      मगरमच्छ ( )      मछली ( )

ख) दूध और पानी से सीखो "मिलना और मिलाना" रेखांकित शब्दों के समान दो शब्द और बनाइए । (2)

-----

ग) नीचे दिए गए शब्दों को ध्यान से पढ़ कर भिन्न शब्द पर सही (✓) का चिन्ह लगाइए। (2)

- i) फूल ( ) दीपक ( ) फल ( ) पेड़ ( )  
ii) कंगारू ( ) घोड़ा ( ) कैचुआ ( ) बिल्ली ( )

घ) शब्द लड़ी बनाइए । (2)

घर > रथ > ----- > -----

ड.) इन्हें क्या कहेंगे ? सही उत्तर चुनकर खाली जगह में लिखिए। (2)

- i) दो पैरों वाला जीव > ( पंचपाद / द्विपाद ) - -----  
ii) चार पैरों वाला जीव > ( चतुर्भुज / चौपाया ) - -----

वर्तनी (10 अंक)

प्रश्न 8 नीचे लिखे प्रश्नों के उत्तर लिखिए।

क) नीचे दिए गए शुद्ध शब्दों पर गोला लगाइए। (2)

- i) सूजभुज शूजभुज सूझबूझ  
ii) दर्शन दरशन दर्शन

ख) नीचे लिखे शब्दों के छूटे हुए अक्षर लिखकर शब्दों को पूरा कीजिए। (2)

- (i) ता \_\_\_\_\_ ब (ii) खि \_\_\_\_\_ डी

ग) (i) शब्दों के क्रम को सही करके शुद्ध वाक्य बनाकर लिखो। (1)

आसमान / चमक/ में/ है / सूरज/ रहा ।

-----

(ii) दिए गए शब्दों के क्रम को बदलकर सही शब्द बनाइए। (2)

(क) य / स/ ता / हा - -----

(ख) वा / र / रि / प - -----

घ) 'त्र' संयुक्त अक्षर किन दो अक्षरों के मेल से बना है ?(✓) का चिन्ह लगाइए। (1)

(i) त् और र ( ) (ii) त् और रा ( )

ड.) नीचे लिखे वाक्यों को शुद्ध करके लिखिए। (2)

i) बया नदियों से पाना लाती है।

-----

ii) अकबर को बात समझ में आ गया।

-----

सुलेख (5 अंक )

**प्रश्न-9** नीचे लिखे अनुच्छेद को सुंदर लेख में पुनः लिखिए।

**(5)**

एक बार बहुत सारी मछलियाँ लहरों में बहती हुई समुद्र के किनारे पर आ गई और तड़पने लगी। एक युवक ने जब यह देखा तो वह उन्हें उठाकर समुद्र में फेंकने लगा। पास में खड़े दूसरे युवक ने कहा, कोई फायदा नहीं है, क्योंकि इतनी सारी मछलियों को बचाना संभव नहीं है। पहले युवक ने कहा, शायद मैं हर मछली की ज़िंदगी नहीं बचा सकता लेकिन उस मछली का जीवन तो बच जाएगा जिसे मैं पानी में डाल रहा हूँ।

[illegible]



**परमाणु ऊर्जा शिक्षण संस्था**  
**Atomic Energy Education Society**  
**टर्म I परीक्षा / Term I Examination 2024-25**

कक्षा / Class : III

अवधि / Duration : 3 घंटे/Hours

विषय / Subject : गणित / Mathematics

अधिकतम अंक / Maximum Marks : 80

**विद्यार्थी द्वारा भरा जाए / To be filled by the Student**

अव्दितीय परीक्षा क्रमांक / Unique Examination No: \_\_\_\_\_

कक्षा/अनुभाग Class/Sec : \_\_\_\_\_ दिनांक / Date : \_\_\_\_\_

परीक्षा का दिन / Day of Examination : \_\_\_\_\_

विद्यालय का नाम / Name of the School : \_\_\_\_\_

हस्ताक्षर निरीक्षक (दिनांक सहित) / Invigilator's Sign (With date) : \_\_\_\_\_

**अध्यापकों द्वारा भरा जाए / To be filled by the Teachers**

प्राप्तांक / Marks Obtained

पूर्णांक / Total Marks

हस्ताक्षर परीक्षक (दिनांक सहित) / Examiner's Sign (With date) : \_\_\_\_\_

हस्ताक्षर जाँचकर्ता (दिनांक सहित) / Cross Checker's Sign (With date) : \_\_\_\_\_

हस्ताक्षर परीक्षा प्रभारी (दिनांक सहित) / Exam I/C Sign (With date) : \_\_\_\_\_

**सामान्य निर्देश / General Instructions :**

This paper consists of :

Section A: --- Knowledge ---20 marks

Section B: --- Understanding ---20 marks

Section C: --- Ability to Compute ---20 marks

Section D: --- Problem Solving Ability ---20 marks

All the questions are compulsory.

**Section -A KNOWLEDGE (20 Marks)**

**I. Choose the correct answer and fill in the blanks.**

**(1 x 6 = 6)**

- i) A rectangle has \_\_\_\_\_ sides . ( 2 , 4 , 3 )
- ii)  $35 + 10 =$  \_\_\_\_\_ ( 45 , 20 , 40 )
- iii) There are \_\_\_\_\_ letters in the name “ ROHAN”. ( 7 , 5 , 8 )
- iv) One century = \_\_\_\_\_ runs (200 , 50 ,100)
- v) One more than 85 is \_\_\_\_\_. (90 , 86 , 80 )
- vi) The shape which is like a solid box with 6 square faces is \_\_\_\_\_.  
(sphere , cylinder , cube )


**II. Do as directed.**

**(2 x 5 =10)**

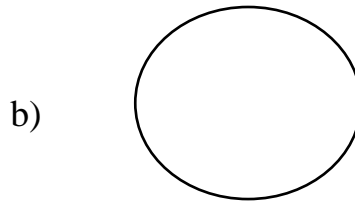
**i) Write the missing numbers.**

- a) 101 , 102 , \_\_\_\_\_ , 104 , 105, \_\_\_\_\_ .
- b) 168 , 169 , \_\_\_\_\_ , 171 , \_\_\_\_\_ , 173.

**ii) What types of lines are used to draw the following shapes ?**



\_\_\_\_\_



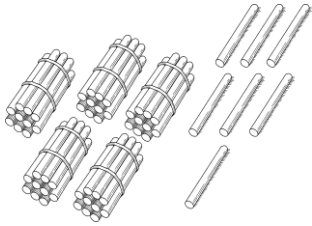

\_\_\_\_\_

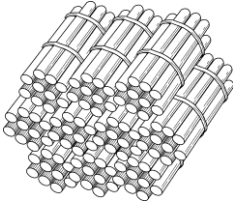

**iii) Write the number names.**

- a) 69 = \_\_\_\_\_
- b) 125 = \_\_\_\_\_



**iv) Count and write the number.**

a)  

b)  

**v) Circle the numbers which are more than 100.**

98    165    73    150    16    215    54    200

**III. Identify and name the following shapes.**

**( 4 x 1 = 4 )**

[ cone    cuboid    cylinder    cube ]

a)  \_\_\_\_\_

b)  \_\_\_\_\_

c)  \_\_\_\_\_

d)  \_\_\_\_\_

**Section B -UNDERSTANDING ( 20 Marks)**

**IV. Choose the correct answer and fill in the blanks.**

**(1 x 6 =6)**

i) Which of the following combinations equals 100 ? \_\_\_\_\_

- a) 30 + 60    b) 40 + 10    c) 50 +20    d) 80 +20

ii) We get the \_\_\_\_\_ shape when we trace a scale.

- a) triangle            b) square            c) rectangle            d) circle

iii) 3 less than 15 is \_\_\_\_\_.

- a) 4                    b) 12                    c) 10                    d) 11

iv) Which of the following name has 7 letters? \_\_\_\_\_

- a) Hardhik            b) Divya                    c) Neha                    d) Bhargavi

v) A \_\_\_\_\_ has no curved surfaces .

- a) sphere            b) cuboid                    c) cylinder                    d) cone

vi)  $15 + \underline{\hspace{1cm}} = 20$

- a) 5                    b) 4                            c)10                            d) 1

**V. Do as directed.**

**(2 x 5 = 10)**

**i) Name two objects that are like circles.**

\_\_\_\_\_

**ii) Write in figures.**

a) Two hundred fifty            -            \_\_\_\_\_

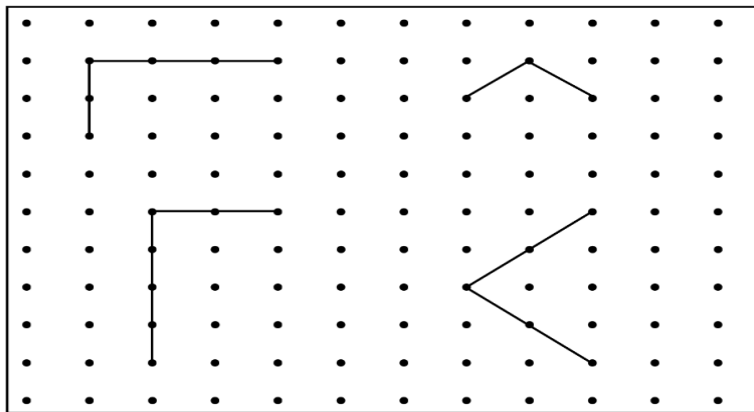
b) One hundred thirty five    -            \_\_\_\_\_

iii) Circle the smallest number in each row.

a)      218              346              179              405

b)      458              263              391              217

iv) Complete these figures to make triangles and rectangles.



v) Write True or False for the given statements.

a) Venkatanarasimharajuvaripeta is the place in India with the longest name.

( \_\_\_\_\_ )

b) 75 is more than 100. ( \_\_\_\_\_ )

**VI. Some names are given below, write their letter count and answer the questions given below.**

**(4 x 1 = 4)**

<b>Name</b>	<b>Letter count</b>
Someshwar	
Anand	
Harshita	
Radhika	

i) Which is the longest name? \_\_\_\_\_

ii) Which is the shortest name? \_\_\_\_\_

**Section C – ABILITY TO COMPUTE (20 Marks)**

**VII. Choose the correct answer and fill in the blanks.**

**(1 x 4 = 4)**

i) 35 and 65 make \_\_\_\_\_ ( 90 , 100)

ii)  $45 - 6 =$  \_\_\_\_\_ (41 , 39)

iii) 150 and \_\_\_\_\_ makes 200. ( 70 , 50)

iv) The number between 235 and 237 is \_\_\_\_\_. ( 236 , 230 )

**VIII. Do as directed.**

**(2 x 6 = 12)**

i) Use the **ginladi** to find the answer.

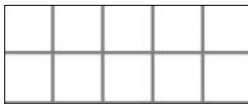
$$35 - 14 = \underline{\hspace{2cm}}$$




ii) My number name has two words. The first word has 6 letters. The second word has 4 letters. I am very near to 100. Who am I?

\_\_\_\_\_



iii) Use the tens frame and solve  $5 + 7 = \underline{\hspace{2cm}}$



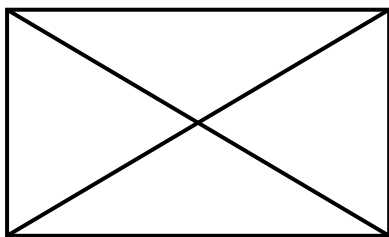
+



=

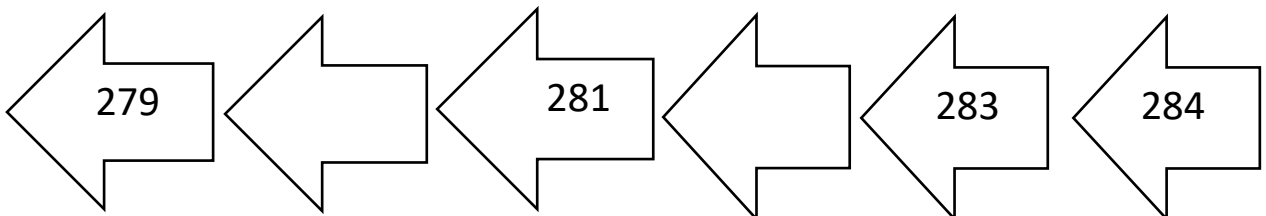


iv) How many triangles are there in the given figure?



\_\_\_\_\_ triangles

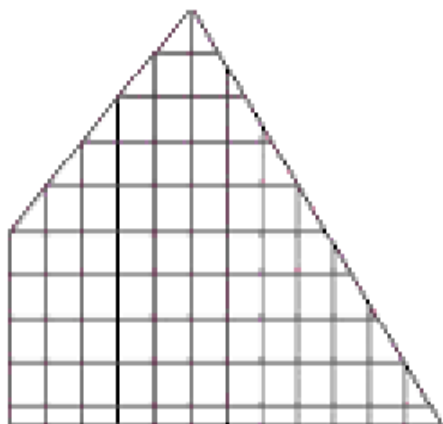
v) a) Fill in the blank arrows with the correct numbers.



b) Complete the pattern.

3 , 6 , 9 , 12 , \_\_\_\_\_ , \_\_\_\_\_

vi) Find the largest rectangle in the given shape. (Use a colour pencil to draw it .)



**IX. In the table given below, identify the bundles and loose sticks and write the corresponding numbers.** ( 4 x 1 = 4)

Bundles and Sticks	Matchstick bundles			Number
	100	10s	1s	
	.....	.....	.....	.....
	.....	.....	.....	.....
	.....	.....	.....	.....
	.....	.....	.....	.....

### Section D – PROBLEM SOLVING ABILITY (20 Marks)

**X. Fill in the blanks.** (1 x 4 = 4)

i) 6 steps after 30 is \_\_\_\_\_. (34,36)

ii) 1 less than 196 is \_\_\_\_\_. (195,197)

iii) The faces of a die have 1 to 6 dots.

The face opposite to the number 3 is \_\_\_\_\_. (6, 4)



iv) 200 and 40 more is \_\_\_\_\_. (140, 240)

**XI. Do as directed.**

**(2 x 6 = 12)**

**i) Arrange the following numbers from smallest to biggest.**

231 , 487 , 98 , 159 , 360

---

**ii) Fill in the boxes with numbers from 1 to 9.**

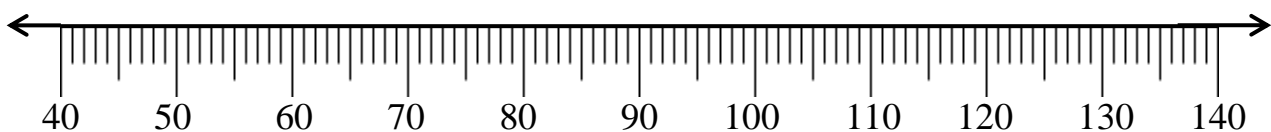
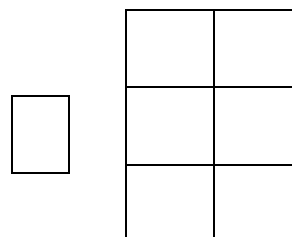
The numbers in each row add up to the number on the right.

The numbers in each column add up to the number given below each column.

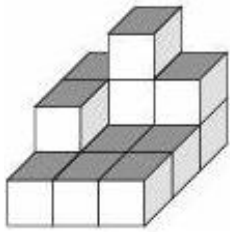
<u>      </u>	2	8	<b>15</b>
3	1	<u>      </u>	<b>10</b>
<u>      </u>	4	<u>      </u>	<b>20</b>
<b>17</b>	<b>7</b>	<b>21</b>	

**iii) In a cricket match at DAV School, Team yellow made 43 runs before lunch and 52 runs after lunch. How many total runs did they make?**

**Use a number line to find the answer.**



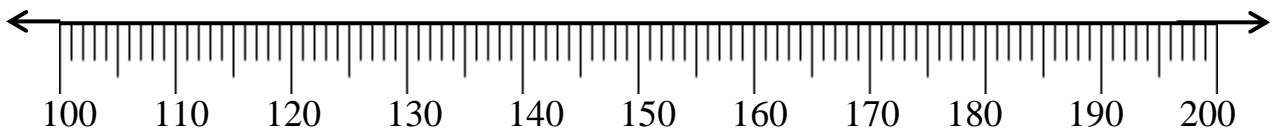
iv) Count the number of cubes in the given figure.



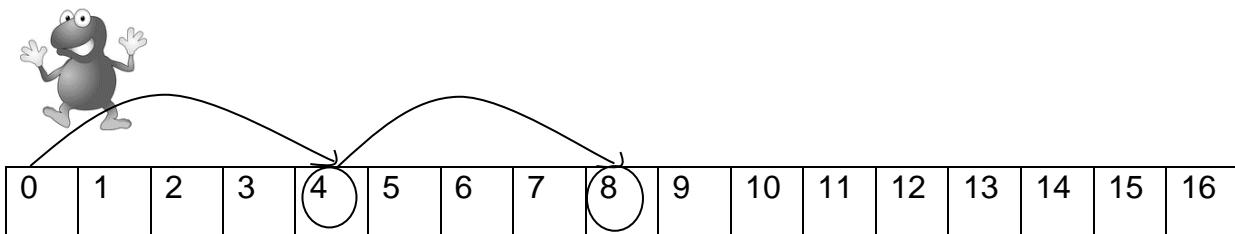
\_\_\_\_\_

v) Mark the following numbers on the number line.

a. 112      135      183      156



vi) Gabru frog jumps 4 steps each time. Which numbers will Gabru touch? Circle them.



**XII. Solve the following.**

**(4 x 1 = 4 )**

Mohan Dada wants to pack small boxes of 10 in a big box of 100.

a) How many boxes of 10 can fit in a box of 100? \_\_\_\_\_

b) How many boxes of 10 can fit in two boxes of 100? \_\_\_\_\_

c) How many boxes of 10 can fit in four boxes of 100? \_\_\_\_\_

d) How many boxes of 10 will he find if he opens a box of 100? \_\_\_\_\_

\*\*\*





**परमाणु ऊर्जा शिक्षण संस्था**  
**Atomic Energy Education Society**

**टर्म -I परीक्षा / Term-I Examination 2024-25**

**कक्षा/Class : III**

**अवधि / Duration : 3 hours**

**विषय/Subject : EVS**

**अधिकतम अंक/Maximum Marks : 80**

**विद्यार्थी द्वारा भरा जाए / To be filled by the Student**

अद्वितीय परीक्षा क्रमांक/Unique Examination No : \_\_\_\_\_

कक्षा / अनुभाग Class /Sec.: \_\_\_\_\_ दिनांक / Date: \_\_\_\_\_

परीक्षा का दिन / Day of Examination: \_\_\_\_\_

विद्यालय का नाम/Name of the School: \_\_\_\_\_

हस्ताक्षर निरीक्षक (दिनांक सहित) /Invigilator's Sign. (With date): \_\_\_\_\_

**अध्यापकों द्वारा भरा जाए / To be filled by the Teachers**

प्राप्तांक / Marks Obtained

पूर्णांक /Total Marks

हस्ताक्षर परीक्षक (दिनांक सहित) / Examiner's Sign.(With date): \_\_\_\_\_

हस्ताक्षर जाँचकर्ता (दिनांक सहित) / Cross Checker's Sign.(With date): \_\_\_\_\_

हस्ताक्षर परीक्षा प्रभारी (दिनांक सहित) / Exam I/C Sign. (With date): \_\_\_\_\_

**सामान्य निर्देश /General Instructions:**

This paper consists of the following sections:

Section A (30 Marks)

Section B (25 Marks)

Section C (25 Marks)

All questions are compulsory.

## SECTION-A (30 Marks)

### I. Choose the correct answer and fill in the blanks. (1 X 5 = 5M)

1. The \_\_\_\_\_ of the plant goes deep down into the soil.  
( stem, leaves, roots )
2. The solid form of water is \_\_\_\_\_. ( water vapour, ice, steam )
3. \_\_\_\_\_ is a special kind of grass, which stays alive longer than just a year . ( Bamboo , paddy, wheat )
4. Which of the following activity does not require water? \_\_\_\_\_  
( cooking , singing, swimming )
5. \_\_\_\_\_ is the biggest flower seen in Mizoram.  
( Lotus, Sunflower, Rafflesia )

### II. Observe the pictures and answer the following questions. (2x5=10M)


1.



a) Name the plant. \_\_\_\_\_

b) List any 2 medicinal uses of this plant.  
\_\_\_\_\_


2.



a) Name the bird. \_\_\_\_\_

b) What does it eat?  
\_\_\_\_\_

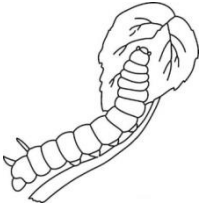
3.



a) Identify the picture and name it. \_\_\_\_\_

b) What is it used for?  
\_\_\_\_\_

4.



a) Name the insect in the picture. \_\_\_\_\_

b) What does it eat?

---

---

5.



a) Name the fruit shown in the figure. \_\_\_\_\_

b) What kind of plant is it? Climber / Creeper?

---

### III. Match the following.

( 1 x 5 = 5M)

1. Parrot

a) Hanging roots

2. Rose plant

b) Imitates people's voice

3. Cow

c) Shrub

4. Money plant

d) Domestic animal

5. Banyan tree

e) Climber

### IV. Circle the odd one.

( 1 X 5 = 5M )

1. Fish

Duck

Monkey

Crocodile

2. River

Pond

Lake

Mountains

3. Tiger

Fox

Goat

Lion

4. Rose

Hibiscus

Tulsi

Grass

5. Pumpkin

Jasmine

Bottle gourd

Grapevine

**V. Arrange the following sentences of the life cycle of butterfly in correct order. (use numbers from 1 to 5) (1 x 5 = 5M)**

- Now, it was a butterfly. ☐
- The caterpillar formed a cocoon. ☐
- The butterfly flew away gently. ☐
- One day, the caterpillar stopped eating. ☐
- It came out of the cocoon. ☐

**SECTION – B (25 Marks)**

**I. Name any two for each of the following. (1 x 5 = 5M)**

1. Sources of water: \_\_\_\_\_ , \_\_\_\_\_
2. Animals that give birth to young ones: \_\_\_\_\_ , \_\_\_\_\_
3. Seeds of shrubs (pulses): \_\_\_\_\_ , \_\_\_\_\_
4. Uninvited animals that live in our home: \_\_\_\_\_ , \_\_\_\_\_
5. Rivers of India: \_\_\_\_\_ , \_\_\_\_\_

**II. Fill in the blanks with the words given in the help box. (1 x 5 = 5M)**

banana   leaves   climbers   nectar   sugar
---

1. \_\_\_\_\_ is produced from the sugarcane stem.
2. The plants which grow with some support are called \_\_\_\_\_.
3. Tailor birds stitch \_\_\_\_\_ of plants to build their nests.
4. The leaves of \_\_\_\_\_ have an even margin.
5. Butterflies collect \_\_\_\_\_ from different flowers.

### III. Answer the following questions.

(2 x 5=10M)

1. Classify the following animals according to their movement.

[Lizard, Frog, Pigeon, Goat ]

Walk	Hop	Crawl	Fly

2. How do animals and plants depend on us?

---

---

3. From where do we get the following things? List them in the table given below. ( cotton milk cheese wood )

Animals	Plants

4. Write one difference between herbs and shrubs. Give 2 examples for each of the following.

Herbs	Shrubs
Examples: 1. 2.	Examples: 1. 2.

5. Write the sound made by the following birds.

Name of the bird	Sound made
Pigeon	
Crow	

#### IV. Who am I?

(1 x 5 = 5M)

**Find the names of the animals given in the crossword with the help of clues given and put a circle ○ around them.**

1. Banana is what I love eating,

I spend my time jumping and leaping.

2. On the walls, webs I weave,

Where insects stick and cannot leave.

3. I remain awake the whole night,

And go to sleep in broad daylight.

4. Croak, croak, croak is my sound,

In water or on land I am found.

5. I appear after rainfall,

Have no feet so I crawl.

x	t	y	a	b	l	s
m	o	n	k	e	y	p
m	r	q	n	x	a	i
d	t	f	r	o	g	d
j	o	w	l	e	k	e
l	i	b	c	h	i	r
m	s	n	a	i	l	n
g	e	f	q	s	w	y

## SECTION – C (25 Marks)

### I. State True or False.

(1 x 5 = 5M)

1. Milk is an animal product. \_\_\_\_\_
2. All plants have same type of leaves. \_\_\_\_\_
3. The leaves of grass are thin and flat. \_\_\_\_\_
4. All living things do not need water to live. \_\_\_\_\_
5. We can know animals by the sounds they make. \_\_\_\_\_

### II. Answer the following.

(2×5=10M)

1. Write the names of four things which have patterns of leaves and flowers on them.

---

---

2. Name four activities for which water is needed.

---

---

3. Which different parts of plants do camel and monkey use for their food?

Camel: \_\_\_\_\_

Monkey: \_\_\_\_\_

4. What is the role of the stem?

---

---

---

5. Write any two uses of plants.

---

---

III. A) Write 3 sentences about soil.

**(3M)**

---

---

---

B) How do animals help plants?

**(2M)**

---

---

---

**IV. Draw and label any 3 parts of a plant.**

**(5M)**