



**परमाणु ऊर्जा शिक्षण संस्था**  
**Atomic Energy Education Society**  
**टर्म-I परीक्षा / Term-I Examination 2024 - 25**

कक्षा/Class : IV

अवधि / Duration : 3 घंटे /Hrs.

विषय/Subject : अंग्रेजी /ENGLISH

अधिकतम अंक / Maximum Marks : 80

**विद्यार्थी द्वारा भरा जाए / To be filled by the Student:**

अद्वितीय परीक्षा क्रमांक /Unique Examination No: \_\_\_\_\_

कक्षा / अनुभाग Class /Sec.:\_\_\_\_\_ दिनांक / Date: \_\_\_\_\_

परीक्षा का दिन /Day of Examination: \_\_\_\_\_

विद्यालय का नाम/Name of the School: \_\_\_\_\_

हस्ताक्षर निरीक्षक (दिनांक सहित) /Invigilator's Sign:\_\_\_\_\_

**अध्यापकों द्वारा भरा जाए / To be filled by the Teachers**

प्राप्तांक / Marks Obtained :-

पूर्णांक /Total Marks:-

हस्ताक्षर परीक्षक ( दिनांक सहित ) / Examiner's Sign. (With date): \_\_\_\_\_

हस्ताक्षर जाँचकर्ता (दिनांक सहित) /Cross Checker's Sign. (With date):\_\_\_\_\_

हस्ताक्षर परीक्षा प्रभारी (दिनांक सहित) / Exam I/C Sign. (With date): \_\_\_\_\_

**सामान्य निर्देश / General Instructions:**

1. Answer all the questions.
2. Read each question carefully and answer neatly.
3. Marks are indicated against each question.
4. Answer sheet should not to be damaged or folded.
5. On completion of the examination, answer sheet must be handed over to the invigilator.

## **SECTION – A READING (20 MARKS)**

### **Seen Passage**

**A) Read the passage carefully and answer the questions given below.**

One day, Nasruddin was chatting with his friends. He began to boast, “No one can match my skill in archery. I string the bow, take aim, and shoot the arrow Wh...o...o...sh. The arrow is sure to hit right on target.” Hearing this, one of his friends immediately brought a bow and some arrows. Giving them to Nasruddin, he said, “Here, Nasruddin ! Take this bow and arrows.” Then pointing towards a target, he said, “Aim at that target and shoot an arrow.” Nasruddin held the bow in his hands, strung it, aimed at the target and shot an arrow. Wh...o...o...o...o... The arrow didn’t hit the target! Instead it fell down somewhere in the middle.

1. What did Nasruddin boast about? (1)

---

2. Who said to whom? (1)

“Here, Nasruddin ! Take this bow and arrows.”

---

3. Find a word from the passage which means the same as : (1)

Informal talk - \_\_\_\_\_

4. Write the past tense of the following: (1)

bring - \_\_\_\_\_

5. Tick the correct answer. (1)

What did Nasruddin's friend do when he started boasting?

Ignored him. (     )

Praised him a lot. (     )

Brought a bow and arrows and asked him to shoot. (     )

**B) Read the passage carefully and answer the questions given below.**

Alice stood up and saw a small door about fifteen inches high. It was too small for her to go through. She saw a glass table with a golden key on it. She tried the little golden key in the lock and to her delight it fitted! Alice opened the door and looked into the loveliest garden she had ever seen! How she longed to be among those beds of bright flowers and those cool fountains! But she could not even get her head through the doorway. “Oh! How I wish, I could become smaller!” she exclaimed loudly.

1. What did Alice find on the glass table? (1)

---

---

2. What did Alice see when she stood up? (1)

---

---

3. Write a suitable one word for the following. (1)

Springs of water - \_\_\_\_\_

4. Complete the sentence with the help of passage. (1)

Alice opened \_\_\_\_\_

---

5. Write a suitable describing word from the passage. (1)

\_\_\_\_\_flowers

**C. Read the passage given below and answer the questions that follow.**

Once upon a time two friends were walking through a forest. Suddenly, they come across a bear. One friend quickly climbed a tree to escape. The other friend was unable to climb so he lay down and pretended to be dead. The bear sniffed the friend on the ground and, thinking he was dead, he walked away. Once the bear was gone, the friend who had climbed down and asked, “What did the bear say to you?” The friend replied, “He showed me that in times of danger, some friends will leave you behind.”

*(pretend- to make believe, escape-to run away, suddenly-at once )*

**1. Tick the correct option.**

(1x 4=4)

a) What did the two friends come across while walking in the forest?

A wolf

A bear

A lion

b) What did the first friend do when he saw the bear?

Climbed a tree

Pretended to be dead

Played dead

c) What did the second friend do when he saw the bear?

Climbed a tree

Hid behind a rock

Pretended to be dead

d) What did the bear do after sniffing the friend?

Attacked him

Walked away

Helped him up

**2. State whether the following sentences are “True” or “False.”**

(1x 3=3)

a) The bear attacked the first friend.\_\_\_\_\_

b) The bear walked away after sniffing.\_\_\_\_\_

c) The friend who could not climb ran away.\_\_\_\_\_

**3. Fill in the blanks with words from the passage.**

(1x3= 3)

a) He lay down and \_\_\_\_\_ to be dead.

b) Word which means ‘to run away’ is \_\_\_\_\_.

c) The opposite of the word ‘enemy’ is \_\_\_\_\_.

## **SECTION-B TEXTUAL QUESTIONS – 10 MARKS**

### **1. Fill in the blanks.**

(1x2=2)

- a) \_\_\_\_\_ is inside you that makes you get up at the same time everyday.
- b) The poet of the poem 'Noses' is \_\_\_\_\_.

### **2. Answer the following incomplete sentences.**

(2x4=8)

- a) Why was the fir tree sad ?

---

---

---

- b) What does the earth do when the day is over ?

---

---

---

- c) In the poem 'Wake up!', name any four creatures which wake up in the morning before the child does?

---

---

- d) What did the birds say to Neha ?

---

---

**SECTION- C CREATIVE WRITING-10 MARKS**

- A. Write a paragraph about Rohit Sharma in 5–6 sentences. You can use the clues given below. (5)**

Indian, eats healthy food, cricket, eight hours practices,  
batsman, runs two kilometres every day

---

---

---

---

---

---

- B. Look at the picture and write a paragraph of five sentences. (5)**



---

---

---

---

---

---

**SECTION-D GRAMMAR -15 MARKS**

**1. Write the rhyming words for-** (1)

near - \_\_\_\_\_

**2. Write the short form of-** (1)

should not - \_\_\_\_\_

**3. Write the full form of-** (1)

won't - \_\_\_\_\_

**4. Underline the describing word in the given sentence.** (1)

They live in a beautiful house.

**5. Fill in the blanks to complete the pattern.** (1)

a. small                      \_\_\_\_\_                      smallest

b. tiny                      tinier                      \_\_\_\_\_

**6. Fill in the blanks with the correct word.** (1)

a. The sun is hiding \_\_\_\_\_ the clouds. ( behind / under )

b. He goes to school \_\_\_\_\_ bus. ( on / by )

**7. Punctuate the given sentence.** (1)

mumbai is the capital City of maharashtra

---

**8. Rewrite the pair of sentence by using 'and' or 'but'.** (1)

Horse is not dangerous. Lion is dangerous.

---

**9. Complete the sentences using 'was' and 'were'.** (1)

a. We \_\_\_\_\_ watching the football match.

b. I \_\_\_\_\_ excited to open my birthday present.

**10. Encircle the silent letters from the given words.** (1)

a. H o n e s t

b. C a l f

**11. Join two words to make one word.** (1)

a. basket + ball = \_\_\_\_\_      b. rain + fall = \_\_\_\_\_

**12. Rewrite the sentence by giving the opposite word of the underlined word. (1)**

The weather is cold.

---

**13. Re-arrange the word to frame the question in the following sentences. (1)**

you going are where

---

**14. Fill in the blanks by adding 'ing' to the word given in the box. (1)**

a. Rajeev is \_\_\_\_\_ (ride) the horse.

b. Children are \_\_\_\_\_ (play) in the park.

**15. Complete the sentence, choosing the right word from the bracket. (1)**

There was only \_\_\_\_\_ girl who \_\_\_\_\_ the prize. (won / one)

### **SECTION- E VOCABULARY- 10 MARKS**

**1. Give one word for the given words: (1x3=3)**

a. To be very inquisitive: \_\_\_\_\_

b. A yellow precious metal: \_\_\_\_\_

c. The person who tells a story: \_\_\_\_\_

**2. Write the antonyms for the words given below by adding 'im' or 'un'. (1x2=2)**

a) pure X \_\_\_\_\_ b) safe X \_\_\_\_\_

**3. Write 'ee' or 'ea' in the given words. (1)**

a) p l\_\_ \_\_s e

b) b \_\_ \_\_ p

**4. Rearrange the words to make a correct sentence. (1)**

can / no / archery / match / my / skill / one / in

---



**5. Write the name of the game where these rules are used:** (2)

a) Goal: \_\_\_\_\_ b) LBW: \_\_\_\_\_

**6. Make meaningful sentence with the help of given word -** (1)

curious-

\_\_\_\_\_

### **SECTION-F SPELLINGS - 10 MARKS**

**1. Circle the correct spelling.** (1x3=3)

a) scamper                      scempar                      csamper

b) truimphantly                      traimphantly                      triumphantly

c) medaow                      meadow                      maedow

**2. Rearrange the letters and make meaningful words.** (1x3=3)

a) n d o w e r - \_\_\_\_\_

b) r e b z e e - \_\_\_\_\_

c) e l e n e d - \_\_\_\_\_

**3. Fill in the missing letters and complete the words.** (1x3=3)

a) c h \_\_ c k \_\_ n

b) p \_\_ l l \_\_ w

c) s n \_\_ g \_\_ l e s

**4. Write a word that means 'happy' using the given clue.** (1)

d\_\_\_\_\_

**SECTION – G HANDWRITING-(5 MARKS)**

**A. Write the given passage below in good handwriting.**

(5)

Discipline means doing what you need to do, even when you don't feel like it. It helps us to stay focused and work hard to achieve our goals. Whether it's completing homework on time, practicing a skill, or following rules discipline is a key. It teaches us self-control and responsibility. This helps you to get better at things and achieve your dreams.

This image shows a single sheet of white paper with horizontal ruling lines. The lines are evenly spaced and run across the width of the page. There are no margins, text, or other markings on the paper.



**परमाणु ऊर्जा शिक्षण संस्था**  
**Atomic Energy Education Society**  
टर्म-I परीक्षा / Term-I Examination 2024-25

कक्षा / Class : IV

विषय / Subject : हिंदी

अवधि / Duration : 3 घंटे

अधिकतम अंक / Maximum Marks : 80

**विद्यार्थी द्वारा भरा जाए / To be filled by the Student**

अद्वितीय परीक्षा क्रमांक / Unique Examination No: \_\_\_\_\_

कक्षा/अनुभाग Class /Sec.: \_\_\_\_\_ दिनांक / Date: \_\_\_\_\_

परीक्षा का दिन / Day of Examination: \_\_\_\_\_

विद्यालय का नाम / Name of the School: \_\_\_\_\_

हस्ताक्षर निरीक्षक (दिनांक सहित) / Invigilator's Sign. (With date): \_\_\_\_\_

**अध्यापकों द्वारा भरा जाए / To be filled by the Teachers**

प्राप्तांक / Marks Obtained

पूर्णांक / Total Marks

हस्ताक्षर परीक्षक (दिनांक सहित) / Examiner's Sign. (With date): \_\_\_\_\_

हस्ताक्षर जाँचकर्ता (दिनांक सहित) / Cross Checker's Sign. (With date): \_\_\_\_\_

हस्ताक्षर परीक्षा प्रभारी (दिनांक सहित) / Exam I/C Sign. (With date): \_\_\_\_\_

**सामान्य निर्देश / General Instructions:**

- 1) सभी प्रश्न करना अनिवार्य हैं ।
- 2) सभी प्रश्नों के उत्तर निर्देशानुसार लिखिए ।
- 3) प्रश्नों के अंक उनके सामने अंकित हैं ।
- 4) स्वच्छता एवं सुन्दर लेख का विशेष ध्यान रखें ।

## पठित गद्यांश (5)

**प्रश्न- 1. निम्नलिखित पठित गद्यांश को पढ़कर प्रश्नों के उत्तर दीजिए।**

गर्मी की छुट्टियाँ थीं। दोपहर के समय दिनेश घर में बैठा कोई कहानी पढ़ रहा था। तभी पेड़ के पत्ते को हिलाती हुई कोई वस्तु धम से घर के पीछे वाले बगीचे में गिरी। दिनेश आवाज़ से पहचान गया कि वह वस्तु क्या हो सकती है। वह एकदम से उठकर बरामदे की चिक सरका कर बगीचे की ओर भागा। “अरे-अरे, बेटा कहाँ जा रहा है? बाहर लू चल रही है।” दिनेश की माँ मशीन चलाते-चलाते एकदम ज़ोर से बोलीं। परंतु दिनेश रुका नहीं। उसने पैरों में चप्पल भी नहीं पहनी। जून का महीना था। धरती तवे की तरह तप रही थी। पर दिनेश को पैरों के जलने की भी चिंता नहीं थी। वह जहाँ से आवाज़ आई थी, उसी ओर भाग चला। सामने की क्यारी में भिंडियों के ऊँचे-ऊँचे पौधे थे। एक ओर सीताफल की घनी बेल फैली हुई थी।

**क. किस समय दिनेश घर में बैठा कहानी पढ़ रहा था? (1)**

-----  
-----

**ख. दिनेश की माँ क्या कर रही थी? (1)**

-----  
-----

**ग. गद्यांश में से विलोम शब्द ढूँढ़कर लिखिए। (1)**

सर्दी X -----

**घ. गद्यांश में से चंद्रबिंदु (ँ) वाला शब्द ढूँढ़कर लिखिए। (1)**

-----

**ङ. गद्यांश में से बहुवचन वाला शब्द ढूँढ़कर लिखिए। (1)**

छुट्टी - -----

**प्रश्न- 2. निम्नलिखित पठित गद्यांश को पढ़कर प्रश्नों के उत्तर दीजिए। (5)**

अकबर के एक खास दरबारी ख्वाजा सरा को अपनी विद्या और बुद्धि पर बहुत अभिमान था। बीरबल को तो वह अपने सामने निरा बालक और मूर्ख समझते थे लेकिन अपने ही मानने से तो कुछ होता नहीं ! दरबार में बीरबल की तूती बोलती और ख्वाजा सरा की बात ऐसी लगती थी जैसे नक्कारखाने में तूती की आवाज़। ख्वाजा सरा की चलती तो वे बीरबल को हिंदुस्तान से निकलवा देते लेकिन निकलवाते कैसे !

**क. अकबर के खास दरबारी कौन थे ? (1)**

---

---

**ख. ख्वाजा सरा को किस पर बहुत अभिमान था ? (1)**

---

---

**ग. गद्यांश में से समान अर्थ वाला शब्द ढूँढ़कर लिखिए। (1)**

बेवकूफ़ = -----

**घ. गद्यांश को देखकर वाक्य पूरा कीजिए। (1)**

ख्वाजा सरा की चलती तो वे बीरबल को ----- से निकलवा देते।

ड. गद्यांश में से विलोम शब्द ढूँढ़कर लिखिए।

(1)

होशियार × -----

### अपठित गद्यांश (10)

**प्रश्न- 3. निम्नलिखित अपठित गद्यांश को पढ़कर प्रश्नों के उत्तर दीजिए।**

आम के पेड़ पर एक सुरीली नाम की चिड़िया रहती थी। उसने खूब सुंदर घोंसला बनाया हुआ था, जिसमें उसके छोटे-छोटे बच्चे साथ में रहते थे। वे बच्चे अभी उड़ना नहीं जानते थे, इसीलिए सुरीली उन सभी को खाना ला कर खिलाती थी। एक दिन जब बरसात तेज़ हो रही थी, तभी सुरीली के बच्चों को ज़ोर से भूख लगने लगी। उसके बच्चे भूख से तड़प रहे थे। सुरीली सोच में पड़ गई, इतनी तेज़ बारिश में खाना कहाँ से लाऊँगी। काफ़ी देर सोचने के बाद सुरीली ने एक लंबी उड़ान भरी और पंडित जी के घर पहुँच गई। पंडित जी ने प्रसाद में मिले चावल- दाल और फलों को आँगन में रख दिए थे। चिड़िया ने उसे देखा और बच्चों के लिए अपने मुँह में ढेर सारा चावल रख लिया। घोंसले में पहुँचकर चिड़िया ने सभी बच्चों को चावल का दाना खिलाया।

**क. चिड़िया किस पेड़ पर रहती थी ?**

(1)

-----  
-----

**ख. चिड़िया का नाम क्या था ?**

(1)

-----  
-----

**ग. चिड़िया ने किसको चावल का दाना खिलाया?**

(1)

-----  
-----

घ. गद्यांश में से **समान अर्थ** वाले शब्द ढूँढ़कर लिखिए। (2)

1. वृक्ष = -----

2. भोजन = -----

ङ. गद्यांश को देखकर **वाक्य** पूरे कीजिए। (2)

1) आम के पेड़ पर एक सुरीली नाम की ----- रहती थी।

2) सुरीली के बच्चों को ज़ोर से ----- लगने लगी।

च. गद्यांश में से **विशेषण** शब्द ढूँढ़कर लिखिए। (1)

-----

छ. गद्यांश में से **नुक्ते वाला** शब्द ढूँढ़कर लिखिए। (1)

**जैसे - ज़ - बाज़ार**

-----

ज. गद्यांश में से **संज्ञा** शब्द ढूँढ़कर लिखिए। (1)

-----

## पाठ्यपुस्तकीय प्रश्न (10)

प्रश्न- 4 नीचे लिखे प्रश्नों के उत्तर लिखिए।

क. राजसभा में सज्जन और विद्वान लोग क्यों नहीं जाते थे ? (2)

---

---

ख. पापा ने जितने काम सोचे उनमें से तुम्हें सबसे दिलचस्प काम कौन- सा लगता है ? क्यों ? (2)

---

---

---

ग. दो समुद्रों के नाम लिखिए। (1)

---

---

घ. दिनेश क्या खोज रहा था? (1)

---

---

ड. जमाल साहब अपने मामूली- से कपड़ों में घूमने क्यों नहीं जाना चाहते होंगे? (2)

---

---



च. तूफ़ान क्या होता है? बादलों को तूफ़ानी क्यों कहा गया है?

(2)

---

---

---

### रचनात्मक लेखन (10)

प्रश्न- 5. नीचे दिए गए चित्र के बारे में पाँच वाक्य लिखो ।

(5)



---

---

---

---

---

---

---

प्रश्न 6. बरसात (बारिश) या नसीरुद्दीन के बारे में पाँच वाक्य लिखिए ।

(5)

---

---

---

---

---

---

---

### व्याकरण (15)

प्रश्न- 7. क. नीचे दिए शब्दों में से संज्ञा शब्द पर ( ○ ) गोला लगाइए।

(1)

चलना

पेंसिल

उसकी

ख. नीचे लिखे शब्दों के लिए विशेषण शब्द लिखिए।

(2)

----- अचकन

----- बादल

ग. नीचे दिए शब्दों में से क्रिया शब्द के आगे सही ( ✓ ) का निशान लगाइए।

(1)

दिल्ली ( )

हँसना ( )

मीठा ( )

घ. नीचे दिए शब्दों में से सर्वनाम शब्द के आगे सही(✓)का निशान लगाइए। (1)

वह ( )

पढ़ना ( )

दयालु ( )

ड. लिंग बदलिए। (2)

रानी - ----- आदमी - -----

च. वचन बदलिए। (2)

किताब - ----- नदी - -----

छ. नीचे लिखे मुहावरे का वाक्य में प्रयोग कीजिए। (1)

कलाई खुलना- \_\_\_\_\_  
\_\_\_\_\_

ज. अनेक शब्दों के लिए एक शब्द लिखिए। (2)

जैसे :- जिस मकान में तीन मंज़िलें हों - तिमंज़िला मकान

- जिस झंडे में तीन रंग हों - -----
- जिस स्कूटर में दो पहिए हों - -----

झ. कौन-कौन सी सब्जियाँ बेल और पौधे पर लगती हैं?

(2)

बेल	पौधा

ज. अधूरे वाक्य को पूरा करो ।

(1)

मैं छोटे बच्चों को मुफ्त में आइसक्रीम दिया करूँगा । ऐसा लगता है कि पापा

-----

### शब्दावली (10)

प्रश्न- 8. क. शब्दों के अर्थ लिखिए।

(2)

□ संसार = -----

□ सहायता = -----

ख. दिए गए शब्दों के विलोम शब्द लिखिए।

(2)

□ मूर्ख x -----

□ सवाल x -----

ग. नीचे लिखे शब्द का तुकबंदी वाला शब्द लिखिए। (1)

जैसे:- बाल - गाल

□ आओ - -----

घ. इन्हें तुम अपने घर में क्या कहकर बुलाओगे? (1)

जैसे:- पापा की माँ - दादी

□ माँ की माँ - -----

ड. पानी बरसने की कोई एक आवाज़ लिखिए। (1)

जैसे:- झर- झर - झर

-----

च. सरकंडे से बनने वाली कोई एक चीज़ का नाम लिखिए। (1)

जैसे:- सूप

-----

छ. बादल के लिए प्रयोग हुए नीचे लिखे शब्द को पूरा कीजिए। (1)

जैसे - शै तानी

तू -----

ज. खेल के अनुसार गेंद का नाम बताइए। (1)

जैसे:- क्रिकेट - किरमिच

फुटबॉल - -----

## वर्तनी (10)

प्रश्न- 9. क. इनमें से शुद्ध वर्तनी वाले शब्द पर गोला(○) लगाइए। (3)

- |         |        |         |
|---------|--------|---------|
| □ कोशस  | कोशिश  | कौसीस   |
| □ आकाश  | आकस    | आकास    |
| □ चकदार | चोकदार | चौकीदार |

ख. अक्षरों को उचित क्रम में लगाकर सार्थक शब्द बनाइए। (3)

□ बा शा द ह - -----

□ अ च न क - -----

□ बा ल द - -----

ग. अशुद्ध शब्द को शुद्ध करके लिखिए। (2)

□ मूलाकात - -----

□ हीसाब - -----

घ. सही शब्द चुनकर नीचे लिखे वाक्यों को शुद्ध करके लिखिए।

(2)

- आसमान में चिड़िया उड़ रहा है।

( रही / रहे )

- मेरे पिताजी बाज़ार गई हैं।

( गया / गए )

### सुलेख (5)

प्रश्न- 10 .सही और साफ़-साफ़ अक्षरों में लिखिए।

समय सबसे कीमती होता है, इसे बर्बाद करना लोगों की मूर्खता है। मनुष्य अपने जीवन में लगभग सभी काम वापस कर सकता है। यदि आपने पैसे खर्च किए हैं तो आप वापस कमा सकते हैं लेकिन आपका बीता हुआ समय आप वापस नहीं ला सकते हैं। दुनिया में सबसे मूल्यवान चीज़ की यदि बात की जाए तो वह है -समय।

---

---

---

---

---

---

---

---

---

---

\*\*\*



**परमाणु ऊर्जा शिक्षण संस्था**  
**Atomic Energy Education Society**  
**टर्म I परीक्षा / Term I Examination 2024-25**

कक्षा / Class : IV

अवधि / Duration : 3 घंटे / Hours

विषय / Subject : गणित / Mathematics

अधिकतम अंक / Maximum Marks : 80

**विद्यार्थी द्वारा भरा जाए / To be filled by the Student**

अद्वितीय परीक्षा क्रमांक / Unique Examination No: \_\_\_\_\_

कक्षा/अनुभाग Class/Sec : \_\_\_\_\_ दिनांक / Date : \_\_\_\_\_

परीक्षा का दिन / Day of Examination : \_\_\_\_\_

विद्यालय का नाम / Name of the School : \_\_\_\_\_

हस्ताक्षर निरीक्षक (दिनांक सहित) / Invigilator's Sign (With date) : \_\_\_\_\_

**अध्यापकों द्वारा भरा जाए / To be filled by the Teachers**

प्राप्तांक / Marks Obtained

पूर्णांक / Total Marks

हस्ताक्षर परीक्षक (दिनांक सहित) / Examiner's Sign (With date) : \_\_\_\_\_

हस्ताक्षर जाँचकर्ता (दिनांक सहित) / Cross Checker's Sign (With date) : \_\_\_\_\_

हस्ताक्षर परीक्षा प्रभारी (दिनांक सहित) / Exam I/C Sign (With date) : \_\_\_\_\_

**सामान्य निर्देश / General Instructions :**

1. All questions are compulsory.
2. The question paper is divided into 4 sections A,B,C and D
3. The question paper consists of Very Short Answer Questions (Each one carries 1 Mark), Short Answer Questions (Each one carries 2 Marks) and Long Answer Questions (Each one carries 4 marks).



**SECTION -A KNOWLEDGE (20 MARKS)**

**I. Choose the correct option and fill in the blanks. (1 x 6 = 6)**


1. One kilometer is \_\_\_\_\_ metres.  
a) 100                      b) 1000                      c) 10
2. All the faces of a brick are \_\_\_\_\_ in shape.  
a) circular                      b) rectangular                      c) square
3. The smallest number using digits 3, 5, 8 and 1 is \_\_\_\_\_.  
a) 3581                      b) 5813                      c) 1358
4. To move from one number to next number an hour hand takes \_\_\_\_\_ minutes.  
a) 60                      b) 5                      c) 30
5. 6 litre is \_\_\_\_\_ ml.  
a) 600                      b) 6000                      c) 60
6. The numbers on the opposite faces of a dice add up to \_\_\_\_\_.  
a) 6                      b) 9                      c) 7

**II. Answer the following questions as directed. (2 x 5= 10 )**


1. Name two places where 24 hour clock is used.

\_\_\_\_\_

2. Draw the Top view and Side view of a FUNNEL.



Top view



Side view

3. Write these dates in numbers.

a) 22 May 2024 \_\_\_\_\_

b) 15 August 2023 \_\_\_\_\_

4. Make all possible 3- digit numbers using 1 , 0 and 4 (use each digit only once).

\_\_\_\_\_


5. Draw a line segment of 5.5 cm and name it as AB.

**III. Do as directed.**

**( 1 x 4 = 4)**

1. Mark the event with dates in correct order in the given Time- line of Ajay.

15 October 2015	Got first tooth
20 April 2015	Ajay was born
30 December 2015	He stood up
10 September 2015	He sat up



**SECTION – B UNDERSTANDING (20 MARKS)**

**I. Choose the correct option and fill in the blank. (1 x 6 = 6)**

1. \_\_\_\_\_ ml + 200 ml = One litre  
a) 500                      b) 800                      c) 700
2. In 1500 metres race people run \_\_\_\_\_ km.  
a) 2.5                      b) 1.5                      c) 5
3. A number becomes double if it is increased by 6. So, that number is \_\_\_\_\_.  
a) 3                      b) 12                      c) 6
4. A brick has \_\_\_\_\_ faces in all.  
a) 6                      b) 8                      c) 12

5. 21- 10- 2012 is a date which falls in the month of \_\_\_\_\_.

- a) April                      b) May                      c) October

6.  is the \_\_\_\_\_ view of a table.

- a) Top                      b) side                      c) front

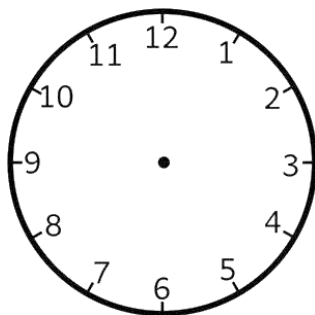
**II. Answer the following questions as directed. (2x 5 = 10 )**

1. Draw a brick showing three of its faces.

2. Write any two numbers which can be divided by 2, 3 and 5 and comes between 1 and 100.

\_\_\_\_\_

3. Draw the hands to show the given time and write the time in the box.



**20 minutes after 6 O' clock**

4. Convert into metres.

a)  $4\frac{1}{2}$  km = \_\_\_\_\_ metre.

b) 6 km = \_\_\_\_\_ metre.

5. List two activities where we use more than one litre of water at a time.

1) \_\_\_\_\_

2) \_\_\_\_\_

**III. Do as directed.****( 1 x 4 = 4 )**

1. Look at the table and answer the following questions.

<b>Name of the ride</b>	<b>Ticket price</b>	<b>Trip Time</b>
Toy Train	Rs. 15	20 minutes
Jumping Car	Rs. 25	15 minutes
Rolling chair	Rs. 40	10 minutes

a) Which ride takes the least money and the most time?

\_\_\_\_\_

b) Which ride makes two trips in half an hour?

\_\_\_\_\_

c) What is the trip time of rolling chair ride?

\_\_\_\_\_

d) A group of children collected money to ride on the rolling chair. They paid Rs 400 in total. How many children went for the rolling chair?

**SECTION – C ABILITY TO COMPUTE (20 MARKS)****I. Match the following.****( 4 x 1 = 4 )**

- |            |          |
|------------|----------|
| a) 5 x 30  | i) 1800  |
| b) 40 x 8  | ii) 600  |
| c) 9 x 200 | iii) 150 |
| d) 10 x 60 | iv) 320  |

**II. Answer the following questions as directed.**

**(2 x 6 = 12)**

1. Write the correct unit ( ml / L ).

- a) Milk packet - 500 \_\_\_\_\_
- b) Cooking oil - 1 \_\_\_\_\_
- c) Eye drop - 10 \_\_\_\_\_
- d) Cough syrup - 100 \_\_\_\_\_

2. Multiply using box method.

12 x 64 = \_\_\_\_\_

×		

3. A child has 1 Litre water bottle. He drank 500 ml water and his brother drank 250 ml water. How much water is left in the bottle?

4. Draw Top view and Front view of a railway track.



Top view of railway track

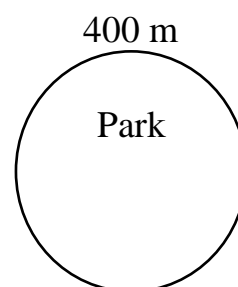


Front view of railway track

5. Neha gave 5 toffees each to six of her friends and four toffees were left with her. How many toffees did Neha have in all?

6. How many rounds of a park must Prakash run to complete 4 Km?

(1 km=1000 m)



**III. Do as directed.**

**( 1 x 4 = 4 )**

1. Ramu's rate list per kilogram.

Items	Rate per Kg
Iron	Rs 24
Brass	Rs 180
Newspaper	Rs 6

Observe the table and find out the cost of the given items.

a) 20 kg iron

b) 16 kg newspaper

## **SECTION – D PROBLEM SOLVING ABILITY (20 MARKS)**

**I. Match the following. ( 4 x 1 = 4 )**

- |  |           |             |
|--|-----------|-------------|
| a) 3 notes of <table border="1" style="display: inline-table; vertical-align: middle;"><tr><td><b>50</b></td></tr></table> | <b>50</b> | i) Rs 40    |
| <b>50</b>  |           |             |
| b) 8 notes of <table border="1" style="display: inline-table; vertical-align: middle;"><tr><td><b>5</b></td></tr></table>  | <b>5</b>  | ii) Rs 140  |
| <b>5</b>   |           |             |
| c) 6 notes of <table border="1" style="display: inline-table; vertical-align: middle;"><tr><td><b>10</b></td></tr></table> | <b>10</b> | iii) Rs 150 |
| <b>10</b>  |           |             |
| d) 7 notes of <table border="1" style="display: inline-table; vertical-align: middle;"><tr><td><b>20</b></td></tr></table> | <b>20</b> | iv) Rs 60   |
| <b>20</b>  |           |             |

**II. Answer the following questions as directed. (2 x 6 = 12 )**

1. Manish has to take 3 injections a day for 4 days. Each injection takes 5ml medicine. How much medicine will he take in all four days?

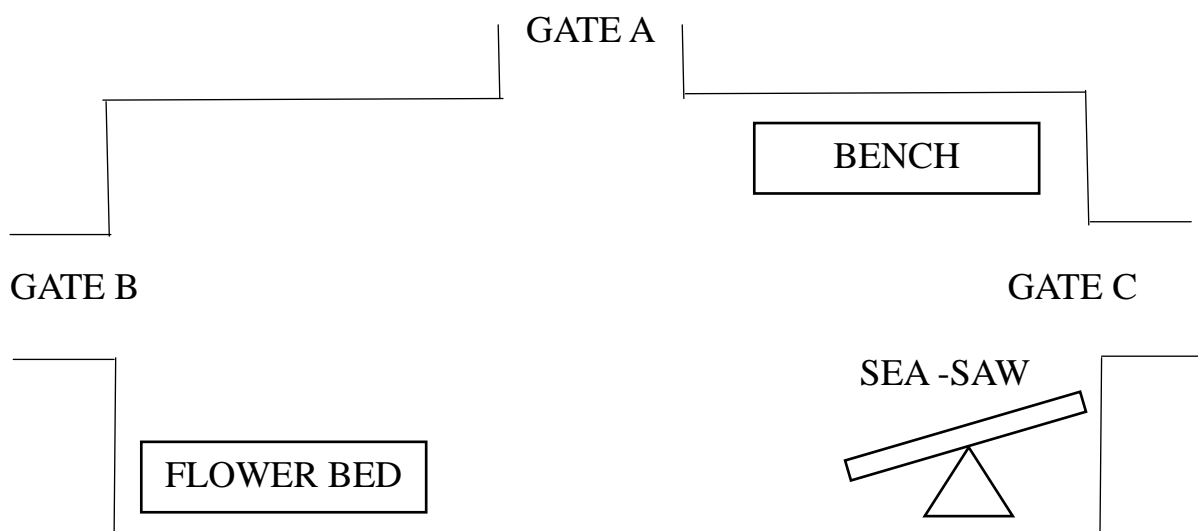
2. Complete the table.

12- hour clock	24-hour clock
1 o'clock in the afternoon	
	21:00 hours
	07:00 hours
12 o'clock at midnight	

3. A mini bus carries 25 children. How many mini buses are needed to carry 250 children?

4. A brick is 20 cm long. How many such bricks will be needed to put in a line to make 2 metre long wall?(Note:1 metre=100 cm)

5. Study the map of a park and answer the following questions.



a) When Gita entered the park, the flower bed was to her right. Which gate did she enter from? \_\_\_\_\_

b) Which gate is nearest to the sea-saw? \_\_\_\_\_



6. Ramesh is going to Virar which is 70 kilometers away. Raju is going to Surat which is 210 km away in the opposite direction. How far is Virar from Surat?

**III. Do as directed.**

**( 1 x 4 = 4 )**

1. See the rate list and answer the questions.

Types of bricks	Cost of one thousand bricks
Old bricks	Rs. 2400
New bricks	Rs. 3000
Bricks from Nagpur	Rs. 1500

- a) How much money will Mr. Anil pay to buy 500 old bricks?
- b) Which types of bricks are the cheapest? \_\_\_\_\_
- c) What is the cost of one thousand new bricks? \_\_\_\_\_
- d) How much money will Mr. Lal pay to buy 3000 bricks from Nagpur?

\*\*\*



**परमाणु ऊर्जा शिक्षण संस्था**  
**Atomic Energy Education Society**

**टर्म -I परीक्षा / Term-I Examination 2024-25**

**कक्षा/Class : IV**

**अवधि / Duration : 3 Hours**

**विषय/Subject : EVS**

**अधिकतम अंक/Maximum Marks : 80**

**विद्यार्थी द्वारा भरा जाए / To be filled by the Student**

अद्वितीय परीक्षा क्रमांक/Unique Examination No : \_\_\_\_\_

कक्षा / अनुभाग Class /Sec.: \_\_\_\_\_ दिनांक / Date: \_\_\_\_\_

परीक्षा का दिन / Day of Examination: \_\_\_\_\_

विद्यालय का नाम/Name of the School: \_\_\_\_\_

हस्ताक्षर निरीक्षक (दिनांक सहित) /Invigilator's Sign. (With date): \_\_\_\_\_

**अध्यापकों द्वारा भरा जाए / To be filled by the Teachers**

प्राप्तांक / Marks Obtained

पूर्णांक /Total Marks

हस्ताक्षर परीक्षक (दिनांक सहित) / Examiner's Sign.(With date): \_\_\_\_\_

हस्ताक्षर जाँचकर्ता (दिनांक सहित) / Cross Checker's Sign.(With date): \_\_\_\_\_

हस्ताक्षर परीक्षा प्रभारी (दिनांक सहित) / Exam I/C Sign. (With date): \_\_\_\_\_

**सामान्य निर्देश / General Instructions**

The paper consists of:

Section A: Observation and Reporting – 30 marks

Section B: Identification and Classification – 25 marks

Section C: Discovery of Facts – 25 marks

All the questions are compulsory.

## SECTION A (30 marks)

### I. Observe the pictures and answer the questions: (2 x 5 = 10 marks)

1.



a) For which sport is this woman famous for?

\_\_\_\_\_

b) Where does she live?

\_\_\_\_\_

2.

a) Name the vehicle.



\_\_\_\_\_

b) In which state is this widely used?

\_\_\_\_\_

3.



a) Name this machine.

\_\_\_\_\_

b) How is it used?

\_\_\_\_\_

4.



a) Identify the person.

\_\_\_\_\_

b) What work does he do?

\_\_\_\_\_

5.

a) Name the picture.

\_\_\_\_\_



b) How is it used?



\_\_\_\_\_

**II. Fill in the blanks:****(1 x 5 = 5 marks)**

1. Gandhidham and Valsad are in \_\_\_\_\_.  
a. Rajasthan                      b. Udupi                      c. Gujarat
2. Dera Gazikhan is in \_\_\_\_\_.  
a. India                      b. Pakistan                      c. Nepal
3. \_\_\_\_\_ district in Uttar Pradesh is famous for 'Itr'.  
a. Kannauj                      b. Muzzafarpur                      c. Ranga Reddy
4. Omana lived in \_\_\_\_\_.  
a. Kozhikode                      b. Ahmedabad                      c. Kottayam
5. Madgaon is in the state of \_\_\_\_\_.  
a. Kerala                      b. Goa                      c. Karnataka

**III. Answer in one word:****(1 x 5 = 5 marks)**

1. The flowers to which honeybees are attracted. \_\_\_\_\_
2. A group of elephants. \_\_\_\_\_
3. The person who gives training to the players in a game. \_\_\_\_\_
4. The person who carries the luggage of passengers. \_\_\_\_\_
5. The people of Khejadli village. \_\_\_\_\_

**IV. Identify the pictures and name them:****(1 x 3 = 3 marks)**

- a) \_\_\_\_\_                      b) \_\_\_\_\_                      c) \_\_\_\_\_

**V. Circle the odd one out:**

**(1/2 x 4 = 2 marks)**

- |              |       |             |           |
|--------------|-------|-------------|-----------|
| 1. snake     | cow   | lizard      | frog      |
| 2. sunflower | rose  | money plant | hibiscus  |
| 3. ants      | wasps | honeybees   | crocodile |
| 4. valley    | river | lakes       | wells     |

**VI. Identify the picture and write four sentences about it:**

**(1 x 5 = 5 marks)**



---

---

---

---

---

---

---

---

---

---

## SECTION B (25 marks)

### I. Name the following: (1 x 6 = 6 marks)

1. A mass of land surrounded by water on all sides. \_\_\_\_\_
2. A large area of hot and sandy land with less rainfall. \_\_\_\_\_
3. The national animal of India. \_\_\_\_\_
4. A flower that can be eaten. \_\_\_\_\_
5. An insect that damages wood by eating it. \_\_\_\_\_
6. A project which tells extraordinary tales of ordinary girls. \_\_\_\_\_

### II. Give reasons: (2 x 5 = 10 marks)

1. Girls were not allowed to play kabaddi in olden days.

---

---

---

---

2. We should clean water before drinking it.

---

---

---

---

3. We cannot survive without plants and animals.

---

---

---

---

4. The route from Goa to Kerala has a total of 2000 bridges and 92 tunnels.

---

---

---

---

5. The worker bees are very important for the hive.

---

---


---

---

**III. Give two points of differences between houses made in villages and houses made in cities. (1 x 4 = 4 marks)**


Houses in Villages (Kuccha House)	Houses in Cities (Pukka House)
<b>1</b>	
<b>2</b>	

**IV. Write five sentences about elephants based on information given in your text: (1 x 5 = 5 marks)**



### SECTION C (25 marks)

I. Read the given railway ticket and answer the questions: (1 x 5 = 5 marks)

		पी.एन.आर.नं. PNR NO.	गाड़ी नं. TRAIN NO.	तारीख DATE	कि.मी. K.M.	वयस्क ADULT	बच्चे CHILD	<b>68250918</b>
<b>820-6449755</b>		<b>9037</b>	<b>24-12-2006</b>	<b>643</b>	<b>2</b>	<b>1</b>	<b>/68250918</b>	
श्रेणी/CLASS <b>2A</b>		JOURNEY CUM RESERVATION TICKET					तह. से आर. RESV. UPTO <b>PRS-NDLS</b>	
<b>2वाता बंदरा टर्मिनस</b> <b>BANDRA TERMINUS</b>		<b>रतलाम जं.</b> <b>RATLAM JN</b>						
कोच COACH	सीट/बर्थ SEAT/BERTH	लिंग SEX	आयु AGE	यात्रा अधिकार पत्र T.AUTHORITY	गिरावट CONC.	आ. शु. R. FEE	स. शु. S. CH.	मु. अ. SF. CH.
A1	21 LB	M	39			75		
A1	23 SL	F	37					
A1	22 UB	F	7					
						वाउचर रु. VOUCHER Rs.	कु. नकद रु. T. CASH Rs.	
						<b>2578</b>	<b>75</b>	
						<b>Rs. TWO FIVE SEVEN EIGHT ONLY</b>		
						<b>I-TICKET/ NO CASH REFUNDS</b>		
(NEW TIME TABLE FROM 01-12-2006) AVADH EXPRESS						BOARDING DT 24-12-2006		
713 27-10-2006 14:36 RCT1 210 VIA BRC								

- The name of the train. \_\_\_\_\_
- PNR number of the ticket. \_\_\_\_\_
- The boarding railway station for the journey. \_\_\_\_\_
- Number of passengers travelling in this ticket. \_\_\_\_\_
- The station in which the passengers will get down. \_\_\_\_\_



**II. Answer the following questions in one or two sentences:**

**(2 x 5 = 10 marks)**

Q1. How does the river get polluted?

Ans. \_\_\_\_\_  
\_\_\_\_\_

Q2. Why is 'Uttarakhand' called the valley of flowers?

Ans. \_\_\_\_\_  
\_\_\_\_\_

Q3. What is a 'Vallam'?

Ans. \_\_\_\_\_  
\_\_\_\_\_

Q4. Why should we be careful while walking on the snow?

Ans. \_\_\_\_\_  
\_\_\_\_\_

Q5. List out any two reasons for the changes in families.

Ans. \_\_\_\_\_  
\_\_\_\_\_

**III. Match the people who help us with the work they do: (1 x 5 = 5 marks)**

<b>A</b>	<b>B</b>
1. Mason	Makes wooden furniture
2. Painter	Works with wires and switches
3. Carpenter	Fits pipes and taps
4. Electrician	Lays bricks to make a wall
5. Plumber	Paints the walls of the house

**IV. Draw a flower, label any two parts and colour it: (2 marks)**

**V. Locate the following states in the given map of India:**

**(1 x 3 = 3 marks)**

1. Gujarat      2. Kerala      3. Ladakh



\*\*\*