



परमाणु ऊर्जा शिक्षण संस्था
Atomic Energy Education Society
टर्म-I परीक्षा / Term-I Examination 2024 - 25

कक्षा/Class : V

अवधि / Duration : 3 घंटे /Hrs.

विषय/Subject : अंग्रेजी /ENGLISH

अधिकतम अंक / Maximum Marks : 80

विद्यार्थी द्वारा भरा जाए / To be filled by the Student:

अद्वितीय परीक्षा क्रमांक /Unique Examination No: _____

कक्षा / अनुभाग Class /Sec.:_____ दिनांक / Date: _____

परीक्षा का दिन /Day of Examination: _____

विद्यालय का नाम/Name of the School: _____

हस्ताक्षर निरीक्षक (दिनांक सहित) /Invigilator's Sign: _____

अध्यापकों द्वारा भरा जाए / To be filled by the Teachers:

प्राप्तांक / Marks Obtained :-

पूर्णांक /Total Marks:-

हस्ताक्षर परीक्षक (दिनांक सहित) / Examiner's Sign. (With date): _____

हस्ताक्षर जाँचकर्ता (दिनांक सहित) /Cross Checker's Sign. (With date): _____

हस्ताक्षर परीक्षा प्रभारी (दिनांक सहित) / Exam I/C Sign. (With date): _____

सामान्य निर्देश / General Instructions: This paper consists of the following

- Section A - Reading (20 marks)
- Section B - Textual Questions (10 marks)
- Section C - Creative Writing (10 marks)
- Section D - Grammar (15 marks)
- Section E - Vocabulary (10 marks)
- Section F - Spellings (10 marks)
- Section G- Handwriting (5 marks)

All are compulsory.

SECTION A - READING (20Marks)

A.1) Read the passage carefully and answer the following questions (5)

In the evening, the geese returned home. They did not notice the net. As they flew into the tree, they were trapped. They struggled hard to get out, but could not. "Help! Help!" cried the geese. "We are caught in the hunter's net. Oh! What shall we do?" "Don't make a fuss now," said the wise old bird. "Long ago I told you to destroy the creeper, but you did not. Now see what has happened. Tomorrow morning the hunter will come back and kill us all." "We were foolish," wept the birds. "We are very sorry we did not listen to you. Please tell us what to do?" "Then listen carefully," replied the wise bird. "When the hunter comes you must all pretend to be dead. Just lie still. The hunter will not want dead birds. He will throw us to the ground. It will then be easy for him to climb down, collect the dead birds, and take them home. When the last of us has been thrown down, we must quickly get up and fly away."

A1.1. Fill in the blank with the correct answer (3 x 1=3)

1) The geese returned home in the _____

- a) morning b) evening c) night d) afternoon

2) To pretend means _____

- a) to flutter and make noise.
b) to act as if something is true.
c) to act as if something is true when it is not.
d) to shout

3) When did the old bird advise the geese to destroy the creeper?

- a) when the creeper was small. b) when the creeper was thick.
c) when the creeper was fully grown. d) none of the above.

A1.2 Write the correct answer and fill in the blank:

(2 x 1=2)

- 1) Singular form of “geese” is _____
- 2) Find the opposite of ‘wise’ from the passage - _____

A2.) Read the passage carefully and answer the following questions (5)

MUNNA: (talking aloud.) Ah! I am lucky. I can pass easily. I need not study so hard. Now I can play games with my friends and fly kites. But I should still be careful that Bhaiya does not see me flying kites.

(One day a kite is flying slowly downwards, Munna starts running in order to grab it. Suddenly, he comes face to face with Bhaiya.)

BHAIYA: (catching hold of MUNNA’s hand) Aren't you ashamed to be playing kites all day long? Don't you realise that now you are in the eighth class and are not studying in a lower class? If you think that I am just one class ahead of you and I can't say anything, you are wrong. I am five years older than you are, and will always be. Understanding doesn’t come only from reading books. Look at Ma and Baba. Ma has never gone to school and Baba has only passed fifth class.

A. 2.1) Fill in the blank with the correct answer

(3 x 1=3)

1. _____ wanted to fly kites.
a) Bhaiya b) Munna c) friends d) nobody
2. Bhaiya was _____ years older than Munna.
a) six b) one c) five d) ten
3. Munna’s mother has _____ gone to school.
a) never b) rarely c) sometimes d) always

A2.2. Write the opposite of the word ‘careless’ from the passage.

_____ (1 x 1 = 1)

A2.3. Find one word from the passage which means

‘quickly and unexpectedly:’ _____ (1 x 1 = 1)

A3. Read the passage carefully and answer the following questions. (10)

Once upon a time, there was a small boy named Rohan who loved playing cricket. One day, while playing with his friends, he found a lost ball and kept it for himself.

As he was going home, he met an old man who asked him about the ball. Rohan lied to him and said it was his own ball. The old man was disappointed and went away.

The next day, Rohan's friend, Akshay, asked him about the ball. Rohan told him the truth that he had found it and kept it. Akshay scolded Rohan and told him that honesty is the best policy.

Rohan felt guilty for lying and decided to return the ball to its original owner. When he found the old man again, he confessed his mistake and returned the ball to him. The old man thanked Rohan and praised him for his honesty.

A.3.1 Fill in the blank with the correct answer (3 x 1= 3)

1. What did Rohan do with the lost ball in the end?

-
- a) He kept it for himself. b) He returned it to its owner.
c) He threw it. d) He gave it to his friend.

2. What did Akshay tell Rohan about honesty? _____

- a) It's not important b) It's only for weak people
c) It's the best policy d) not good.

3. What did the old man do when Rohan returned the ball?

-
- a) He scolded Rohan. b) He praised Rohan for his honesty.
c) He ignored Rohan. d) He did not tell him anything.

A3.2 Write True or False. (2x1=2)

1. Rohan loved to play football. _____
2. The opposite of truth is lie. _____

A3.3 Find a word from the passage which means

(1 x1= 1)

To give back _____

A3.4 Write the answer in one word.

(2 x 1= 2)

a. The past tense of **find** is _____

b. The opposite of **artificial** is _____

A3.5 Answer the following.

(1 x2=2)

a. Why did Rohan return the ball to the old man?

SECTION B -TEXTUAL QUESTIONS (10Marks)

B 1.1) Answer in one or two words

(2 x 1 =2)

1. My Elder Brother is written by _____

2. I follow you wherever there is light. Who am I? _____

B.1.2 Answer the following questions.

(4 x2=8)

1. In which season ice-cream is popular? Name any two flavours of ice-cream.

2. What are 'ingredients'? Name any two ingredients of avial.

3. Name any two things that make you happy. In what way do you show your happiness?

SECTION- C CREATIVE WRITING: (10Marks)

C1.1 Write a letter to your grandfather about your best friend

(5)

[illegible]

C.1.2 Look at the picture given below and write any five sentences about it. (5)



SECTION -D GRAMMAR (15 Marks)

D1.Do as directed:

D.1.1 Choose the correct preposition and fill in the blanks. (2x1=2)

1. The train is going _____ the tunnel. (across/ round/ through / in)
2. His mother cut the vegetables _____ long strips. (to / into / over/ of)

D1.2. Fill in the blanks using for or since.

(2x1=2)

1. I haven't seen him _____ January.
2. We have known each other _____ over twenty years.

D1.3. Choose the correct joining word and fill in the blanks.

(2x1=2)

1. She wore a raincoat _____ it was raining. (and / so / because / but)
2. My brother wrote the letter _____ he forgot to post it. (but/ so / and / because)

D1.4. Fill in the blanks given below with suitable question words.

(2x1=2)

1. _____ is your birthday?
2. _____ is your best friend?

D1.5. Circle the silent letters and write it in the blank.

(2 x1=2)

1. tsunami _____
2. knife _____

D1.6 Write the full form of

(2 x1=2)

1. won't _____
2. can't _____

D1.7 Punctuate

(1 x 1 =1)

1. bhaiya i feel like running away and going back home
-

D1.8 Write a word ending with - ness

(1 x 1 =1)

D1.9. Fill in the blanks with a describing word

(1 x 1 =1)

My mother cooks _____ food.

SECTION E -VOCABULARY (10 Marks)**E.1. Give one word for the following.**

(4 x1=4)

1. completely wet _____.
2. solid base _____.
3. bright flame or fire _____
4. known to you _____

E1.2 Fill in the blanks with the correct option.

(2x1=2)

1. I was _____ (amazed/ shocked/ worried)/ fear) to know that my uncle met with an accident.
2. As our sports teacher _____ (blue/ blew/ blow/ blown) his whistle, we all started running in the playground.

E1.3. Rearrange the words to make meaningful sentence.

(2 x1 =2)

1. he / fell / slipped / suddenly / and / water / the /into
- _____

2. shoots/ curry / made / was / the / bamboo / from
- _____

E.1.4. Write the opposite of the underlined word.

(1x1=1)

Always drink pure water. Never drink _____ water.

E1.5 Frame meaningful sentence using the following word.

(1x1=1)

punctual:_____

SECTION F-SPELLINGS (10 Marks)**F1. Encircle the correct spelling**

(2 x1=2)

- I) unhabited inhabited inhabitid inhabbited
- II) splaash ssplash splash sllash

F1.2 Rearrange the jumbled letters to form meaningful words.

(2 x1=2)

- I) p o o f n t i r t - _____ II) l i o p w l - _____

F1.3 Correct the misspelt words and write them correctly.

(2 x1=2)

- I) a r a n t _____ II) r e c p e _____

F 1.4 Write the correct word by using the clues.

(2 x1=2)

- I) A plan for carrying out a process. s ____ h ____ d ____ l ____
- II) A person who lives next to or near another person - N ____ g h ____ o ____ r

F1.5. Write two compound words (joining two words) as given in the example. (2)

Ex.: out + side = outside. 1. _____ 2. _____

Time is very precious – every day, every hour, every minute, every second is precious. Once it is gone, no one can recover it. So, it is important to understand the value of time. Once we start valuing our time and everyone else's time, there is no going back. You become a responsible person who appreciates and respects everyone's time. There are many ways by which you can waste your time, but there is only one way to save your time – be conscious of your time. So use your time in a proper way.

[illegible]



कुल मुद्रित पृष्ठों की संख्या / Total No. of printed pages: 16

परमाणु ऊर्जा शिक्षण संस्था
Atomic Energy Education Society
टर्म-I परीक्षा / Term-I Examination 2024-25

कक्षा / class : V (पाँचवीं)

अवधि / Duration : 3 घंटे

विषय / Subject : हिन्दी / Hindi

अधिकतम अंक / Maximum Marks : 80

विद्यार्थी द्वारा भरा जाए / To be filled by the Student

अद्वितीय परीक्षा क्रमांक / Unique Examination No: _____

कक्षा / अनुभाग Class / Sec.: _____ दिनांक / Date: _____

परीक्षा का दिन / Day of Examination: _____

विद्यालय का नाम / Name of the School: _____

हस्ताक्षर निरीक्षक (दिनांक सहित) / Invigilator's Sign. (With date): _____

अध्यापकों द्वारा भरा जाए / To be filled by the Teachers

प्राप्तांक / Marks Obtained

पूर्णांक / Total Marks

हस्ताक्षर परीक्षक (दिनांक सहित) / Examiner's Sign. (With date): _____

हस्ताक्षर जाँचकर्ता (दिनांक सहित) / Cross Checker's Sign. (With date): _____

हस्ताक्षर परीक्षा प्रभारी (दिनांक सहित) / Exam I/C Sign. (With date): _____

सामान्य निर्देश / General Instructions :

1. सभी प्रश्न करना अनिवार्य हैं ।
2. सभी प्रश्नों के उत्तर निर्देशानुसार लिखिए।
3. सभी प्रश्नों के अंक उनके समक्ष दिए गए हैं ।
4. स्वच्छता एवं सुंदर लेख का विशेष ध्यान रखें।

(पठन क्षमता पर आधारित प्रश्न - 5 अंक)

प्रश्न 1. निम्नलिखित गद्यांश को पढ़कर नीचे लिखे प्रश्नों के उत्तर लिखिए।

जनवरी माह के मध्य में भारत के लगभग सभी प्रांतों में फ़सलों से जुड़ा कोई - न- कोई त्योहार मनाया जाता है। कोई फ़सलों के तैयार हो जाने पर खुशी बाँटता है तो कुछ लोग इस उम्मीद में खुश होते हैं कि अब पाला कम होगा, सूरज की गर्मी बढ़ने से खेतों में खड़ी फ़सल तेज़ी से बढ़ेगी। सभी प्रांतों और इलाकों का अपना रंग और अपना ढंग नज़र आता है। इस दिन सब लोग अच्छी पैदावार की उम्मीद और फ़सलों के घर आने की खुशी का इज़हार करते हैं। उत्तर प्रदेश, बिहार, मध्य प्रदेश में मकर - संक्रांति या तिल संक्रांत, असम में बीहू, केरल में ओणम, तमिलनाडु में पोंगल, पंजाब में लोहड़ी, झारखंड में सरहुल, गुजरात में पतंग पर्व सभी खेती और फ़सलों से जुड़े त्योहार हैं। इन्हें जनवरी से मध्य अप्रैल तक अलग - अलग समय मनाया जाता है।

झारखंड में सरहुल बड़े जोशो - खरोश के साथ मनाया जाता है। चार दिनों तक इसका जश्न चलता रहता है।

क) किस माह के मध्य में फ़सलों से जुड़े त्योहार मनाए जाते हैं? (1)

ख) केरल में फ़सलों से जुड़े त्योहार को क्या कहते हैं ? (1)

ग) झारखंड में सरहुल कैसे मनाया जाता है?

(1)

घ) नीचे लिखे शब्द का समान अर्थ लिखो ।

(1)

उम्मीद = -----

ङ) नीचे लिखे शब्द का विलोम शब्द लिखो ।

(1)

गर्मी x -----

प्रश्न 2. निम्नलिखित गद्यांश को पढ़कर नीचे लिखे प्रश्नों के उत्तर लिखिए। (5)

लोनपो गार तिब्बत के बत्तीसवें राजा सौनगवसैन गांपो के मंत्री थे। वे अपनी चालाकी और हाज़िरजवाबी के लिए दूर - दूर तक मशहूर थे। कोई उनके सामने टिकता न था। चैन से ज़िंदगी चल रही थी मगर जब से उनका बेटा बड़ा हुआ तो उनके लिए चिंता का विषय बना हुआ था। कारण यह था कि वह बहुत भोला था। होशियारी उसे छूकर भी नहीं गई थी। लोनपो गार ने सोचा, “ मेरा बेटा बहुत सीधा - सादा है। मेरे बाद इसका काम कैसे चलेगा!”

एक दिन लोनपो गार ने अपने बेटे को सौ भेड़ें देते हुए कहा, “ तुम इन्हें लेकर शहर जाओ। मगर इन्हें मारना या बेचना नहीं। इन्हें वापस लाना सौ जौ

के बोरों के साथ। वरना मैं तुम्हें घर में घुसने नहीं दूँगा।” इसके बाद उन्होंने बेटे को शहर की तरफ़ रवाना किया।

क) तिब्बत के बत्तीसवें राजा कौन थे? (1)

ख) लोनपो गार क्यों मशहूर थे? (1)

ग) लोनपो गार ने अपने बेटे को कहाँ भेजा था? (1)

सही विकल्प चुनकर सही(✓) का निशान लगाओ ।

घ) “ चिंता ” शब्द का क्या अर्थ है? (1)

(क) परेशानी () (ख) खुश () (ग) प्रसन्न ()

ड.)“ बेटा ” शब्द का स्त्रीलिंग क्या है? (1)

(क) पुत्र () (ख) बेटी () (ग) रानी ()

(अपठित गद्यांश -10 अंक)

प्रश्न 3. निम्नलिखित अपठित गद्यांश को पढ़कर नीचे लिखे प्रश्नों के उत्तर लिखिए।

जंगल में एक चिड़िया बरगद के पेड़ पर अपने छोटे - छोटे बच्चों के साथ रहती थी। एक दिन एक शिकारी उस जंगल में आया और उसके बच्चों को पकड़ने के लिए पेड़ पर चढ़ने लगा। चिड़िया ने शिकारी से कहा, “अभी ये बच्चे बहुत छोटे हैं, इन्हें मत पकड़ो।” शिकारी चिड़िया की बात पर ध्यान न देते हुए बच्चों को पकड़कर पेड़ से उतारने लगा। बच्चों को अपने से अलग होता देख वह रोने लगी। उसने शिकारी से कहा, “तुम मेरे बच्चों को छोड़ दो, मैं तुम्हें बहुत बड़े खज़ाने का पता बताऊँगी। तुम अमीर हो जाओगे।” चिड़िया की बात से प्रसन्न होकर शिकारी ने बच्चे वापस घोंसले में रख दिए। चिड़िया ने कहा - “कुछ समय पहले एक सेठ ने पेड़ के खोखले में धन छिपाकर रखा है। तुम उसे निकाल लो।” शिकारी ने खुशी से पेड़ के खोखले में हाथ डाला और उसे एक साँप ने डस लिया। लालची शिकारी मारा गया।

क) चिड़िया किस पेड़ पर रहती थी? (1)

ख) चिड़िया के बच्चों को पकड़ने के लिए जंगल में कौन आया? (1)

ग) क्या शिकारी को साँप ने डस लिया? (1)

घ) “अभी ये बच्चे बहुत छोटे हैं, इन्हें मत पकड़ो।” किसने ,किससे कहा? (1)

ङ) शिकारी कैसा था? (1)

सही विकल्प चुनकर सही (✓) का निशान लगाओ।

च) “प्रसन्न” शब्द का क्या अर्थ है? (1)

(क) उदास () (ख) खुश () (ग) दुखी ()

छ) “अमीर” शब्द का विलोम शब्द क्या है? (1)

(क) गरीब () (ख) धनी () (ग) कंजूस ()

ज) नीचे लिखे शब्द का एकवचन शब्द लिखो। (1)

बच्चे - _____

झ) खाली जगह भरो। (1)

चिड़िया की बात से प्रसन्न होकर शिकारी ने बच्चे वापस ----- में रख दिए।

ज) नीचे लिखे वाक्य के सामने सही(✓)या(x)गलत का निशान लगाओ। (1)

(i) सेठ ने अलमारी में धन छिपाकर रखा है। ()

(पाठ्य पुस्तक पर आधारित प्रश्न - 10 अंक)

प्रश्न 4. नीचे दिए गए प्रश्नों के उत्तर लिखिए।

क) डाक सेवक को क्या -क्या करना होता है? (1)

ख) राम,कौशल्या और ताड़का ये तीनों किस प्रसिद्ध कथा के पात्र हैं? (1)

ग) इला की कशीदाकारी में खास बात क्या थी? (2)

घ) तुम मशीन की मदद से पढ़ना चाहोगे या अध्यापक की मदद से ?

दोनों के पढ़ाने में किस - किस तरह की सरलता और कठिनाइयाँ हैं ? (2)

ड) पैदल हरकारों को किस - किस तरह की दिक्कतों का सामना करना पड़ता होगा? (2)

च) जो बच्चा बोल नहीं सकता, वह किस- किस बात की आशंका से 'घबराहट' महसूस कर सकता है ? (2)

(रचनात्मक लेखन पर आधारित प्रश्न-10 अंक)

प्रश्न 5. नीचे दिए गए चित्र को ध्यान से देखिए और चित्र के बारे में एक अनुच्छेद लिखिए। (5)



अगली छुट्टियों में तुम्हें नानी के पास जाना है। वहाँ तुम क्या - क्या करोगे, कैसे वक्त बिताओगे? लिखिए।

“मेरा प्रिय त्योहार” पर एक अनुच्छेद लिखिए ।

[illegible]

(व्याकरण पर आधारित प्रश्न-15 अंक)

प्रश्न 7.क) नीचे दी गई जातिवाचक संज्ञाओं के लिए एक-एक व्यक्तिवाचक

संज्ञा लिखिए। (2)

i) भोजन ----- ii) नदी -----

(ख) नीचे दिए गए शब्दों के आगे उचित विशेषण लिखिए। (2)

i) ----- खिलौना ii) ----- तोता

(ग) नीचे दी गई संज्ञाएँ किन क्रियाओं से बनी हैं? लिखिए। (2)

i) बहाव ----- ii) पड़ाव -----

(घ) नीचे दिए गए शब्दों में से क्रिया शब्द छाँटकर लिखिए। (2)

i) मोहन दौड़ रहा है। -----

ii) माँ कपड़े धो रही हैं। -----

(ङ) नीचे दिए गए वाक्यों को अपने शब्दों में लिखिए। (2)

i) उनकी अपनी चालाकी धरी रह गई।

ii) “जा भाग के देख केरा के पता आइल की ना?”

च) नीचे दिए गए वाक्य किस काल में है? चुनकर लिखिए। (3)

(भूत काल / वर्तमान काल / भविष्यत् काल)

i) मोहिनी फुटबॉल खेल रही है। -----

ii) दिनेश ने राजेश को पत्र लिखा। -----

iii) सरिता कल विदेश जाएगी। -----

छ) मुहावरों का वाक्यों में प्रयोग कीजिए। (2)

i) आँख का तारा - -----

ii) नज़र चुराना - -----

(शब्द भंडार पर आधारित प्रश्न-10 अंक)

प्रश्न 8. क) नीचे दिए गए शब्दों के लिए उचित समान अर्थ वाले शब्द लिखो। (2)

i) सीमित = -----

ii) मौका = -----

ख) सिलाई-कढ़ाई से संबंधित शब्द लिखो । (2)

ग) 'बे' उपसर्ग जोड़कर दो नए शब्द बनाओ। उदा. - बेबस (2)

i) ----- ii) -----

घ) “वाला” प्रत्यय लगाकर दो शब्द लिखिए। (2)

उदा - दूधवाला

i) ----- ii) -----

ङ) विलोम शब्द लिखो। (2)

i) विष x ----- ii) पसंद x -----

(वर्तनी पर आधारित प्रश्न- 10 अंक)

प्रश्न 9.क) नीचे लिखे शब्दों के अक्षरों के क्रम को बदलकर शुद्ध बनाओ। (2)

i) नहोअनी ----- ii) नाशतरा -----

ख) नीचे दिए गए वाक्यों को शुद्ध करके लिखिए। (2)

i) मैंने अपना ग्रहकार्य कर लिया है।

ii) प्रिया खाना माँगता है।

ग) नीचे दिए शब्दों के छूटे हुए अक्षर लिखकर शब्दों को पूरा कीजिए। (3)

i) निरं---र

ii) उ---योगी

iii) भ---भीत

घ) नीचे दिए गए शुद्ध शब्दों पर गोला लगाइए। (3)

i) विस्वाश विशवास विश्वास

ii) प्रदर्शनी प्रदरशनी पदर्शनी

iii) पुसतक पुस्तक पूस्तक

(सुलेख - 5 अंक)

प्रश्न 10. नीचे लिखे अनुच्छेद को सुंदर लेख में दुबारा लिखिए। (5)

अनुशासन सफलता की सीढ़ी है। अनुशासन में रहने से ही व्यक्ति को हर जगह सम्मान मिलता है, इसलिए हमें हमेशा अनुशासन में रहना चाहिए और अपने जीवन में सफल होने के लिए अपने शिक्षक और माता-पिता के आदेशों का पालन करना चाहिए। हमें सुबह जल्दी उठना चाहिए और सभी काम सही समय पर करना चाहिए।

एक अनुशासित व्यक्ति अपने जीवन को बेहतर बनाने में सफल होता है और अपनी सफलता की छाप दूसरों पर छोड़ते हैं। देश की सुरक्षा भी एक अनुशासित सेना द्वारा की जाती है।

[illegible]



परमाणु ऊर्जा शिक्षण संस्था
Atomic Energy Education Society
टर्म I परीक्षा / Term I Examination 2024-25

कक्षा / Class : V

अवधि/Time : 3 घंटे/Hours

विषय / Subject : गणित/Mathematics

अधिकतम अंक/Maximum Marks : 80

विद्यार्थी द्वारा भरा जाए / To be filled by the Student

अव्वितीय परीक्षा क्रमांक / Unique Examination No: _____

कक्षा/अनुभाग Class/Sec : _____ दिनांक / Date : _____

परीक्षा का दिन / Day of Examination : _____

विद्यालय का नाम / Name of the School : _____

हस्ताक्षर निरीक्षक (दिनांक सहित) / Invigilator's Sign (With date) : _____

अध्यापकों द्वारा भरा जाए / To be filled by the Teachers

प्राप्तांक / Marks Obtained

पूर्णांक / Total Marks

हस्ताक्षर परीक्षक (दिनांक सहित) / Examiner's Sign (With date) : _____

हस्ताक्षर जाँचकर्ता (दिनांक सहित) / Cross Checker's Sign (With date) : _____

हस्ताक्षर परीक्षा प्रभारी (दिनांक सहित) / Exam I/C Sign (With date) : _____

सामान्य निर्देश / General Instructions:

1. All questions are compulsory.
2. The question paper is divided into 4 sections A, B, C and D.
3. Each section carries 20 Marks.

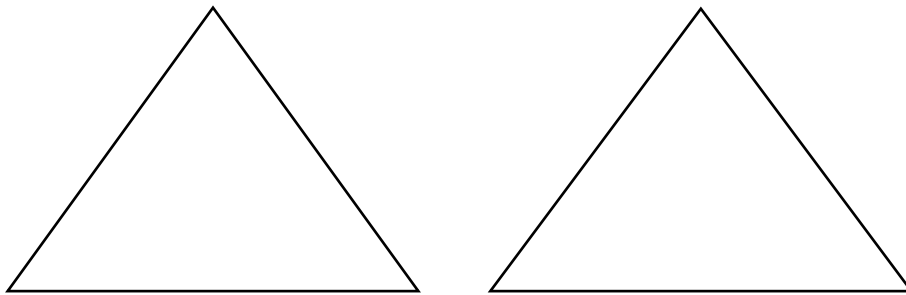
Section –A Knowledge (20 Marks)

A1 Fill in the blanks with correct option. (1X6=6)


- a) The two rays of an angle are called _____.
i) vertices ii) edges iii) arms iv) none of these
- b) One hundred lakh is called a _____.
i) hundred ii) One crore iii) ten lakh iv) thousand
- c) An angle which is equal to 90° is called _____ angle.
i) acute ii) obtuse iii) straight iv) right
- d) Length of the boundary is called _____.
i) area b) arms iii) perimeter iv) none of these
- e) An even prime number is _____.
i) 1 ii) 2 iii) 3 iv) 4
- f) One Rupee is equal to _____ paise.
i) 100 ii) 50 iii) 25 iv) none of these

A2 Do as directed. (2X5=10)

- a) i) Biggest 4 digit number is _____
ii) Smallest 3 digit number is _____
- b) Divide each triangle in three equal parts in two different ways.





c) A name is written by using straight lines –



i) Number of acute angles _____

ii) Number of obtuse angles _____

d) Draw what the following shapes would look like on the given turn.

Shape	Turn	Shape after turn
	On $\frac{1}{4}$ turn	
	On $\frac{1}{2}$ turn	

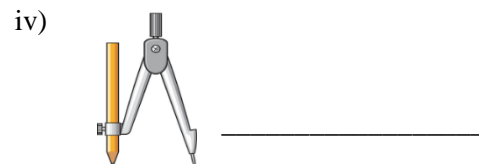
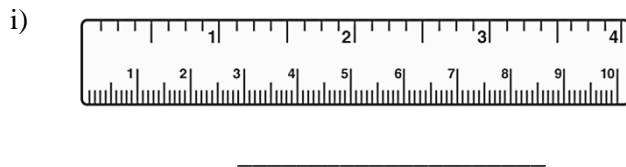
e) Write the numbers –

i) In words 4004607 = _____

ii) In figures - Nine crore forty six thousand one hundred five = _____

A3 Name the following geometric tools.

(1X4=4)



Section –B Understanding (20 Marks)

B1 Choose the correct answer and fill in the blanks.

(1X6=6)

- a) Which of the following number is the factor of 49?
i) 5 ii) 7 iii) 6 iv) 3
- b) _____ is neither a prime number nor a composite number.
i) 6 ii) 5 iii) 1 iv) 0
- c) It is very difficult to sail a log boat in sea when the boat and the wind
i) both are in same direction ii) are in opposite direction
iii) both are calm iv) None of these
- d) Tick the shape in which angle will not be changed when it will be pushed down by the finger.



- e) How many squares of 1 cm side can be arranged along the length of a 5cm long wire?
i) 5 ii) 25 iii) 10 iv) 15
- f) Which of these English words reads the same on half a turn.
i) ZOOM ii) BIN iii) SWIM iv) NOON

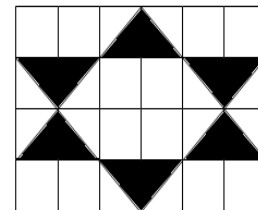
B2 Do as directed.

(2X5=10)


a) Look at the picture. Each square is 1cm square.

i) Find the area of the shaded part. _____

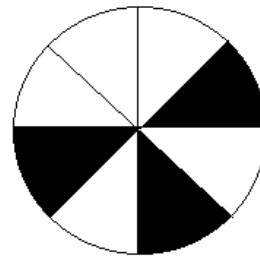
ii) Find the area of the unshaded part of the grid.



b) Write the fraction for the shaded parts.

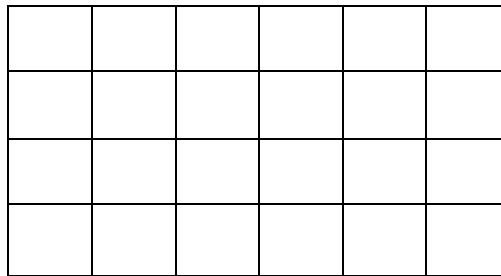


(i)



ii)

c) In the grid given below each square is 1cm square.



(a) Find perimeter of the grid.

(b) Find area of the grid.

d) Fill this square using all the numbers from 51 to 59 so that sum of the numbers in each row and column will be equal.

	55	

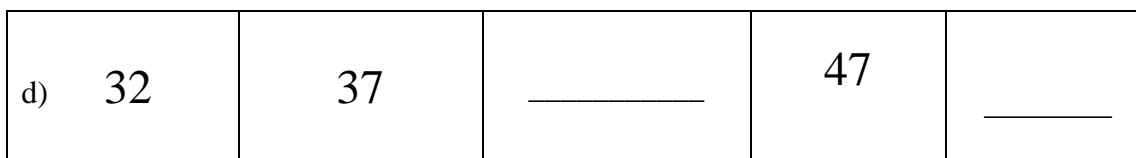
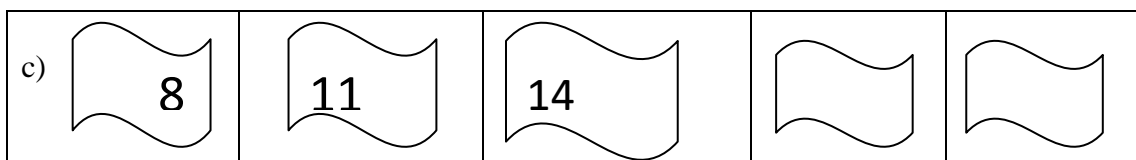
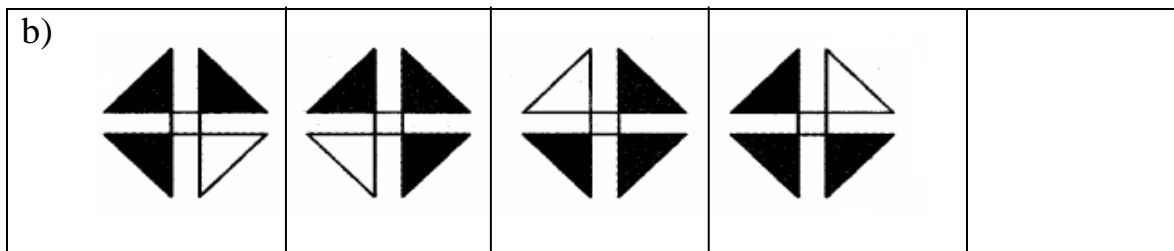
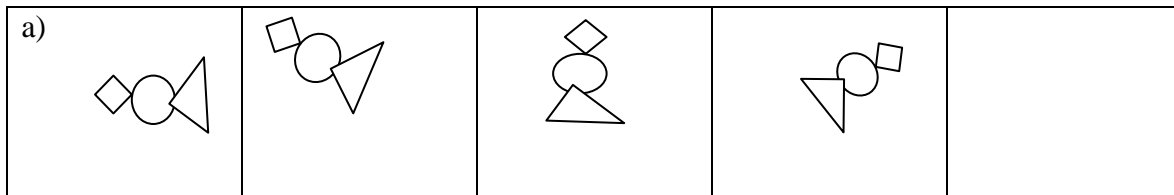
e) Complete the number pattern.

$$\begin{array}{rclcl}
 (9 - 1) & \div & 8 & = & 1 \\
 (98 - 2) & \div & 8 & = & 12 \\
 (987 - 3) & \div & 8 & = & 123 \\
 \underline{\hspace{2cm}} & \div & 8 & = & \underline{\hspace{2cm}} \\
 \underline{\hspace{2cm}} & \div & 8 & = & \underline{\hspace{2cm}}
 \end{array}$$

B3. Look at the pattern.

(1X4=4)

Find the rule and complete the pattern.



Section –C Ability to Compute (20 Marks)

C1. Fill in the blanks.

(1X4=4)

a) Smallest Common Multiple of 3 and 5 is _____.

b) $60000 + 500 + 90 + 6 =$ _____

c) $6705 - \boxed{} + 200 = 200 + \boxed{} - 400$

d) Half of one lakh = _____

C2. Find the following

(2X6=12)

a) i) Write any two factors of given numbers other than 1.

Factors of 15 - _____ , _____

Factors of 39 - _____ , _____

b) Write any two equivalent fractions -

$\frac{3}{7} = \underline{\hspace{1cm}} = \underline{\hspace{1cm}}$
$\frac{2}{5} = \underline{\hspace{1cm}} = \underline{\hspace{1cm}}$

c) i) What will be the weight of 56 men together , if each person weighs 70 kg?

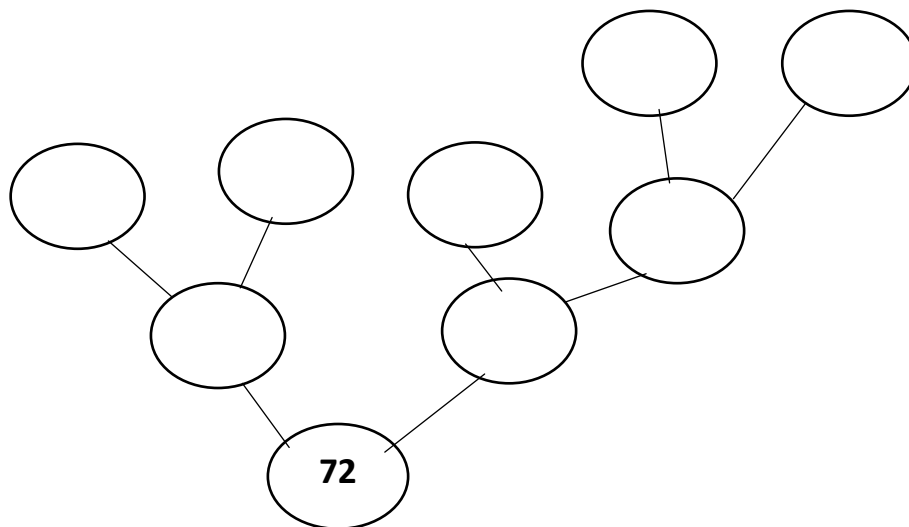
ii) About how much more does the elephant of 5000 kg weigh than these 56 men?

d) Three multiples of 12 (other than 12) - _____

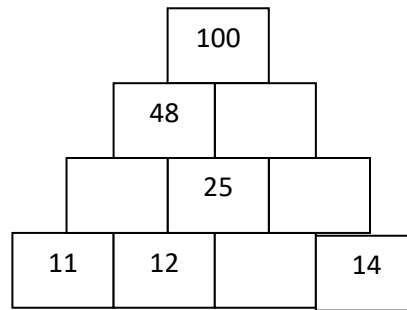
Three multiples of 16 (other than 16) - _____

Find lowest common multiple of 12 and 16 = _____

e) Fill the factor tree.



- f) Fill in the missing numbers.



- C3** Peehu sleeps at 9 pm and wakes up at 5 am. She plays from 6 am to 8 am and again 4 pm to 6 pm. She studies $\frac{1}{4}$ of a day. (1x4=4)

Answer the question –

How many hours does she take for

- a) Sleeping _____ b) Studying _____
- c) Playing _____ d) Other activities _____

Section –D Problem Solving Ability (20 Marks)

- D1** Fill in the blanks. (1X4=4)

- a) $\frac{2}{3}$ of 90° = _____
- b) A bus running at the speed of 50 km per hour will cover _____ km in 2 hours.
- c) Number of _____ necklaces made of 10 beads each can be made from 60 beads.
- d) 4 months is _____ part of a year. (Write fraction)

D2 Solve the following.

(2X6=12)

- a) Basheer has Rs. 100. He spends one – fourth of the money on squid and another three – fourth on prawn. If the cost of squid and prawns per kg is Rs 50 and Rs 150 respectively.

i) How many kilograms of squid did he buy?

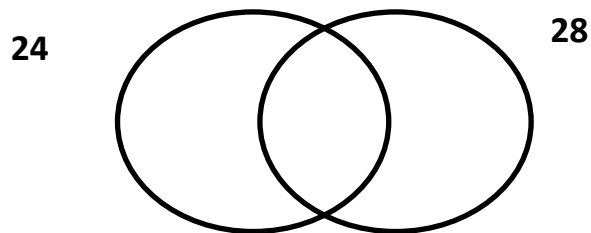
ii) How many kilograms of prawn did he buy?

- b) A bakery bakes 60 cakes on Sunday. $\frac{5}{6}$ of the cakes were sold.

i) How many cakes were sold? _____

ii) How many cakes were left? _____

- c) Write the common factors for the following:



Factors of 24 : _____

Factors of 28 : _____

Common factors: _____

- d) The speed of a motor boat is 20 km/hour. Find the distance covered in three and a half hours ?
- e) Pappu and Gappu took 45 minutes to reach school. If they walked for $\frac{1}{3}$ of the time and went by bus for the remaining time.
- i) How many minutes did they spend in walking?
- ii) How many minutes did they spend in the bus?
- f) A school bus needs 30 minutes to reach the school from Nehru Nagar bus stop.
- i) If it arrives at 7:25 am in the school every day, what is its departure time from the bus stop?
- ii) If the bus runs at the speed of 60 km per hour, then what is the distance between Nehru Nagar bus stop and the school?

D3 In a fish factory, when fresh fish is dried it becomes $\frac{1}{3}$ of its weight. (1x4=4)

Factory buys fresh fish for	Rs 30 per kg.
Factory sells dried fish for	Rs. 120 per kg.

i) If the factory dries 6000 kg fresh fish. How much dried fish will the factory get?

ii) How much money will the factory pay for buying 6000 kg fresh fish?

iii) How much money will the factory get after selling all the dried fish?

iv) How much money will the factory earn?



परमाणु ऊर्जा शिक्षण संस्था

Atomic Energy Education Society

टर्म -I परीक्षा / Term-I Examination 2024-25

कक्षा/Class : V

अवधि/ Duration :3 घंटे/Hrs.

विषय / Subject : EVS

अधिकतम अंक/ Maximum Marks :80

विद्यार्थी द्वारा भरा जाए / To be filled by the Student

अद्वितीय परीक्षा क्रमांक/ Unique Examination No:_____

कक्षा / अनुभाग/Class /Sec.:_____दिनांक/ Date: _____

परीक्षा का दिन/ Day of Examination: _____

विद्यालय का नाम/ Name of the School: _____

हस्ताक्षर निरीक्षक (दिनांक सहित) / Invigilator's Sign. (With date):_____

अध्यापकों द्वारा भरा जाए / To be filled by the Teachers

प्राप्तांक / Marks Obtained

पूर्णांक/ Total Marks

हस्ताक्षर परीक्षक (दिनांक सहित)/ Examiner's Sign. (With date): _____

हस्ताक्षर जाँचकर्ता (दिनांक सहित)/ Cross Checker's Sign. (With date): _____

हस्ताक्षर परीक्षा प्रभारी (दिनांक सहित)/ Exam I/C Sign. (With date): _____

सामान्य निर्देश/General Instructions:

1. There are three sections:

Section A (Observation and Reporting) carries 30 marks

Section B (Identification and Classification) carries 25 marks

Section C (Discovery of Facts) carries 25 marks

2. All questions are compulsory.

SECTION A- OBSERVATION AND REPORTING -(30 Marks)

1. Choose the correct answer and fill in the blanks. (1 × 5 = 5)

- a. Anaemia is caused by the deficiency of _____ in blood. (iron / calcium)
- b. Golconda fort is located in _____. (Lucknow / Hyderabad)
- c. Jim Corbett National Park is in _____. (Assam / Uttarakhand)
- d. _____ are killed for their tusks. (Elephants / Cows)
- e. The Dandi March was carried out in the year _____. (1930/1945)

2. Observe the picture and answer the following. (2 × 5 = 10)

a.

i. What is being given to the patient in the picture?



ii. Why is it given to the patient?

b.

i. What is the name of the plant given in the picture?



ii. Where is it found?

c.



i. Which Lake is shown in the picture?

ii. Who built it?


d.



i. What is the name of the great scientist given in the picture?

ii. What contribution has he made in the field of science?

e.



i. Which musical instrument is shown in the picture?

ii. The musical instrument is made up of which material?

3. Match the following.

(1 × 5 = 5)

- | | |
|-----------------------|---------------------|
| a. George Mestral | Mount Everest |
| b. Tarun Bhagat Sangh | Dandi March |
| c. Dr.Beaumont | Invented Velcro |
| d. Bachhendri Pal | Rajasthan |
| e. Mahatma Gandhi | Secret of Digestion |

4. Fill in the blanks.

(1 × 5 = 5)

- a. Body should be kept at an angle of _____ while climbing a rock.
- b. _____ is the saltiest sea.
- c. Mount Everest is also called as _____ in Nepal.
- d. The outer wall of Golconda Fort has _____ bastions.
- e. Sunita Williams went _____ km away from the earth.

5. Write the process of making Mamidi Tandra?

(5)

SECTION B-IDENTIFICATION AND CLASSIFICATION-(25 MARKS)

6. Answer in one word.

(1 × 5 = 5)

- a. The name of the mosquito which causes malaria-_____
- b. The language spoken by Khondonbi - _____
- c. Height of Mount Everest - _____
- d. Leather bags to carry water - _____
- e. The natural satellite of earth- _____

7. Write 'True' or 'False'.

(1 × 5 = 5)

- a. Tomatoes and green chillies came from South America. (_____)
- b. A group leader should let the group go ahead and keep to the last in mountaineering. (_____)
- c. A soap cake will float in water. (_____)
- d. To overcome the problem of shortage of water directly put a pump in the Jal Board pipeline. (_____)
- e. The medicine for snakebite is available in all government hospitals. (_____)

8. Classify the things given in the box according to their properties.

(1/2×4=2)

needle, oil, sugar, wooden stick

Floats in water	Sinks in water	Dissolve in water	Does not dissolve in water

9. Answer the following questions.

(2× 4= 8)

a. What kind of water arrangements were made for travellers in olden days?

b. Write two responsibilities of a group leader.

c. What are the problems caused due to anaemia in children?

d. What is a museum? What is its importance?

Q10. Write a short note on 'Tiger's super sense'. (At least 5-6 sentences) (5)

SECTION C- DISCOVERY OF FACTS – (25 MARKS)

Q11. Give two examples of each –

(1 × 5= 5)

a. Diseases caused by mosquitoes

b. Mountaineering equipments

c. Festivals related to moon

d. Seeds dispersed by water

e. Methods of preserving food

Q. 12 Give reasons.

(4x2 =8)

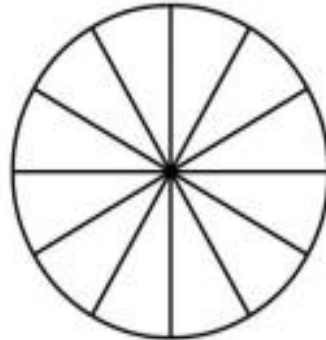
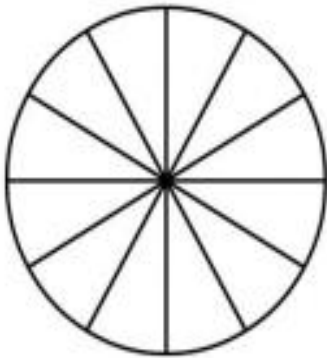
a. The birds move their neck often.

b. Snakes are considered as Kalbeliya's treasure.

c. You cannot taste food properly when you have cold.

d. We see the stars mostly at night.


Q.13 Shade and write the sleeping hours of the following animals. (2)



a. Cat-_____

b. Cow-_____

Q.14 Look at the given report and answer the following questions:(1× 5= 5)

क्लीनिकल विकृति रिपोर्ट CLINICAL PATHOLOGY REPORT केंद्रीय सरकार स्वास्थ्य योजना Central Govt. Health Scheme					
18/08/2007					
नाम/Name	Rajat	आयु/Age	11	स्त्री या पुरुष/Sex	Male
रोग की पहचान/Diagnosis		Fever with Chills and Rigors (ठंड लगकर कंपकंपी के साथ बुखार)			
Malarial Parasite Found in Blood Sample (खून में मलेरिया के जीवाणु पाए गए)					
 Pathologist					

a. What is the name of the patient?

b. What was the diagnosis?

c. What parasite was found in the blood sample?

d. What is the age of patient?

e. During which season is malaria more common?

Q.15 Mark the following states on the map of India.

(1× 5= 5)

(a) Uttarakhand

(b) Rajasthan

(c) Andhra Pradesh

(d) Meghalaya

(e) Gujarat

