

ATOMIC ENERGY CENTRAL SCHOOL NO-2

CONFIDENCE EXAM : 2021-2022

Class : III

Time: 2 Hours

Subject : English

Marks : 50

To be filled by the Student

Name of the Student: _____

Name of the School : _____

Class / Sec : _____ Roll No : _____

Date of Examination : _____

To be filled by the Teacher

Invigilator's Sign- _____

Examiner's Sign:- _____

Marks Obtained:- _____

Checker' Sign:- _____

General Instructions:

1. Marks are indicated against each question.
2. Read each question carefully and answer neatly.
3. Ensure that questions from every section are answered.
4. On completion of the exam, the student must hand over the answer sheet to the invigilator.
5. The student should ensure that the answer sheet is not damaged or folded.

Section A (Reading) -20 Marks

A1. Read the passage carefully and answer the questions.

Once upon a time there was a small hill. A path went up the hill. It went through thick and lovely woods of pine and fir trees. People often walked on it to a holy place.

One day when the sun shown high in the sky, many people were seen climbing up the hill. They were climbing slowly and carefully. A girl also climbed the hill with them.

Her name was Meena. Meena was twelve years old.

i) Fill in the blanks. (1M)

The people were climbing up the hill_____and _____.

ii) How old Meena was ? (1M)

Ans. _____

iii) What went up the hill ? (1M)

Ans. _____

iv) Find the opposite word from the passage. (1M)

young x

v) Find the similar word from the passage. (1M)

pure or blessed - _____

A 2. Read the passage carefully and answer the questions.

A mother tiger and her small tiger cub lived near a river in a shady jungle. When the sky was dark, the mother tiger hunted for deer and pig. But she did not hunt every night. The mother tiger liked to roar a loud.

A.1. What did the mother tiger like to do ? (1M)

Ans: _____

A.2. Who was hunted for deer and pig? (1M)

Ans: _____

A.3. Where did the mother tiger and small tiger cub live ? (1M)

Ans: _____

A.4. Write the correct answer (1/2x2=1M)

i) Young one of tiger is called _____

ii) Second form of '**hunt**' is _____

A.5. Choose the correct answer (1/2x2=1M)

i) Opposite of **dislike** is _____

a. shady b. like c. light d. lovely

ii) Similar word of **close** is _____

a. far b. near c. fast d. very big

A3. Read the passage carefully and answer the questions.

Once a mother duck was hatching her eggs . One by one the eggs cracked and the ducklings came out. The mother duck was very happy and proud. All her young ones were very cute except one. That duckling was very ugly. All other birds of the farm teased him and he felt very sad. He wandered around and lived with wild ducks. Winter arrived. He was freezing from cold. A farmer felt pity on him and took him home. But he was scared by the farmer's dog so he left the house.

Hard words: wander - roam around, freezing – feeling very cold

i) Choose the correct option to fill in the blanks . (1x3=3M)

- a) The eggs_____ and the ducklings came out. (chicks /cracked)
- b) The _____duck was proud of her ducklings.(papa/mother)
- c) All the birds _____ the ugly duckling.(hate/love)

ii) What did the farmer do with the duckling? (1M)

Ans_____

iii) Why did the ugly duckling left the house? (1M)

Ans_____

iv) Complete the sentence based on the passage. (1M)

All the birds in the farm teased the duckling because

v) **Write one word from the passage for** **(1x4=4M)**

a) the meaning of ‘make fun of ’ - _____

b) the opposite of ‘beautiful’ is - _____

c) the baby of a duck - _____

d) the meaning of ‘a feeling of sadness’- _____

Section B (Textual Questions)- 05 Marks

B1. Answer the following questions. **(1x5=5M)**

i) Where was the man going ?

Ans. _____

ii) What did the child decide to do ?

Ans. _____

iii) Where do the trains run?

Ans _____

iv) Why was the child not allowed to do a lot of things ?

Ans _____

v) Why do the boys and girls have the most fun ?

Ans _____

Section C (Creative Writing) -05 Marks

C1. Look at the picture and write five sentences about it. You can use the following words given in the bracket . (5M)

(flower pot , window, toys, study table, books, cupboard, board, stools, photo frame)



Section D (Grammar) - 10 Marks

D 1. Write the correct word (homophones) in the blanks. (1X2=2M)

- i) My house is on the _____ side of the post office. (write/ right)
- ii) _____ likes to eat honey. (bear / bare)

D 2. Fill in the blank with 'a' or 'an'. (1M)

She has _____ umbrella.

D 3. Make a meaningful sentence with the help of given word. (1M)

bring - _____

D 4. Rewrite the following sentences using the short form of the underlined words. (1X2=2M)

- i) We will not go to school today as today is a holiday.

Ans _____

- ii) He is waiting for my friend.

Ans _____

D 5. Write plural for the following words. (1/2x2=1M)

- i) book - _____

- ii) knife - _____

D 6. Use can or cannot to fill in the blanks.

(1/2x2=1M)

i) I _____run faster than a car.

ii) We _____read and write.

D 7. Underline the describing word from the sentence.

(1M)

I saw a beautiful butterfly.

D 8. Add 'ish' to the word given in the bracket to make a new word.

(1M)

My sister is _____(baby)

Section E (Vocabulary)-05 Marks

E 1. Match the words in Column A with the meanings given in the Column B.

(1/2x4=2M)

Column A

Column B

i) naughty

a) lovely

ii) beautiful

b) a very great size

i) pounced

c) disobedient

ii) giant

d) made a sudden attack

E 2. Write the rhyming words for the following.

(1/2x2=1M)

i) going-_____

ii) clap-_____

E 3. Write the antonyms of the following words by adding 'un' or 'in'

(1/2x2=1M)

i) important X _____

ii) active X _____

E 4. Write the word starting with 'GR'. Clue is given.

(1M)

Second form of grow – G _ _ W

SECTION F (SPELLINGS)-05 Marks

F 1. Rearrange the letters in proper order to form a meaningful word. (1x2=2M)

i) A R N O G I R = _____

ii) C L M A E = _____

F 2. Fill in the blanks with correct letter .

(1/2x2=1M)

i) p l _ _ n e

ii) a w a k _ _

F 3. Circle the correct spelling.

(1/2x2=1M)

ponced

pounced

ponecd

pounced

grunt

grtnu

grnut

granty

F 4. Circle the silent letter in the words given below.

(1/2x2=1M)

i) h o u r

ii) l i s t e n

परमाणु ऊर्जा केन्द्रीय विद्यालय क्रमांक 2, रावतभाटा

प्रेक्टिस पेपर

विषय : हिंदी

कक्षा : 3

पूर्णांक : ५०

नाम _____

रोल न. _____

दिनांक _____

प्रश्न : १ पठित गद्यांश को पढ़कर प्रश्नों के उत्तर लिखो | 5

तीन भाई थे | एक दिन सुबह के समय तीनों नए घरों की तलाश में निकल पड़े | गरम – गरम धूप में वे सड़क पर चलते चले गए | थोड़ी देर में आम का एक बड़ा पेड़ आया | उसके नीचे ठंडी छांह थी | तीनों भाई उसके नीचे आराम करने लगे |

पेड़ के पके आम तोड़ – तोड़कर वे मीठा – मीठा रस चूसने लगे | बड़े भाई ने कहा – भाई मुझे तो यही जगह पसंद है।

क) कितने भाई थे?

ख) तीनों भाई किस समय घरों की तलाश में निकले?

ग) तीनों भाइयों ने किस पेड़ के नीचे आराम किया?

घ) बड़े भाई को को कौन – सा पेड़ पसंद आया ?

ड) बहुवचन लिखो –

पेड़ - _____

घर - _____

प्रश्न:२ दिए गए अपठित गद्यांश को पढ़कर प्रश्नों के उत्तर लिखो । 5

एक नन्ही परी थी । वह बहुत ही प्यारी थी । पर उसे उड़ने में बहुत डर लगता था। उसकी दो प्यारी सखियाँ थी । सोना और मोना । एक दिन उन्होंने नन्ही परी से कहा – “ नन्ही परी , आज हम धरती पर घूमने जाएँगे । क्या तुम हमारे साथ चलोगी ?” नन्ही परी डर गई । वह बोली – “ नहीं , नहीं मुझे उड़ने से डर लगता है।” तब सोना और मोना बोली – “हम तुम्हारे साथ हैं । तुम्हें डरने की ज़रूरत नहीं है ।” फिर नन्ही परी सोना और मोना के साथ उड़ने लगी । वह बहुत खुश हुई और उसका डर भी समाप्त हो गया था ।

क)नन्ही परी को किससे डर लगता था?

ख)उसकी कितनी सखियाँ थी?

ग)सोना और मोना कहाँ घूमने जा रही थी?

घ) नन्हें परी किनके साथ उड़ने लगी?

ड) बहुवचन लिखो –

परी - _____ सखी - _____

प्रश्न :३ दोनों बिल्लियों के बीच झगड़े की जड़ क्या थी? 1

प्रश्न:४ सेठ कपड़ा लेने किस दिन आया होगा? 1

प्रश्न: ५ गुरुजी थैली में क्या लिए जा रहे थे? 1

प्रश्न;६ काबुलीवाले को मिर्च देखने के बाद क्या पूछना चाहिए था? 1

प्रश्न:७ काबुलीवाले ने मिर्च को स्वादिष्ट फल क्यों समझ लिया ? 2

प्रश्न: ८ चवन्नी मतलब चार आना | अब बताओ – 2

अठन्नी मतलब _____

दुअन्नी मतलब _____

प्रश्न :९ पिंजडा बिना बाघ के बंद हो गया | कैसे? 2

प्रश्न :१० दिए गए चित्र को देखकर पांच वाक्य लिखो | 5



प्रश्न:११ सही जोड़े मिलाओ।

2

ऊँची

कला

ज़रूर

बिल्कुल

हुनर

बुलंद

कतई

अवश्य

प्रश्न:१२ रंगाई शब्द रंग से बना है। इसी तरह और शब्द बनाओ-

2

साफ़ _____

बुन _____

प्रश्न:१३ बहुवचन लिखो-

2

डोरी - _____ पेड़ - _____

रस्सी - _____ जानवर - _____

प्रश्न:१४ जानवरों को उनकी बोलियों से मिलाओ -

2

जानवर	बोलियाँ
शेर	चिंघाड़ना
कुत्ता	मिमियाना
हाथी	दहाड़ना
बकरी	भौंकना

प्रश्न:१५ विलोम शब्द लिखो-

2

अच्छा - _____ आज़ादी - _____

दिन - _____ पालतू - _____

प्रश्न: १६ बताओ ये सब किसके नाम हैं।

1

क) बाघ , गाय, हाथी, और हिरण : _____

ख) नीम, आम, पीपल और बरगद : _____

प्रश्न: १७ बताओ इसका नाम ये क्यों है?

1

मथनी : _____

प्रश्न: १८ ऐसे कीड़ों (जंतुओं) के नाम लिखो जो डंक मारते हैं।

1

प्रश्न: १९ दिए गए वाक्य के शब्दों को आगे – पीछे करके लिखो।

1

क) उसी खोज में मैं भी निकली।

प्रश्न: २० गुठली वाले और बिना गुठली वाले फलों के नाम लिखो।

1

क) गुठलीवाले फल : _____

ख) बिना गुठलीवाले फल : _____

प्रश्न: २१ नीचे के वाक्यों में कुछ हरी – भरी सब्जियों के नाम छुपे हैं। उन पर गोला

लगाओ –

1

क) अब भागो भी , बारिश होने लगी है।

ख) गोपाल कबुतर उड़ा दो।

प्रश्न: २२ दिए गए शब्दों के अर्थ लिखो-

1

अहाते _____

तलाश _____

प्रश्न: २३ दिए गए शब्दों को शुद्ध करके लिखो-

1

कोसिश _____

आशरम _____

प्रश्न: २४ “उत्तर” शब्द का दो बार अलग – अलग अर्थ में वाक्य प्रयोग करो। 2

क) उत्तर - _____

ख) उत्तर - _____

एक जंगल में एक नदी बहती थी। एक गीदड़ प्रतिदिन नदी पर पानी पीने के लिए जाया करता था । उस नदी में एक घड़ियाल रहता था। एक दिन गीदड़ पानी पी रहा था कि घड़ियाल ने उसकी एक टांग मुँह में पकड़ ली । गीदड़ डर के मारे कांपने लगा ।

ATOMIC ENERGY CENTRAL SCHOOL No.2, RAWATBHATA

SAMPLE PAPER (2021-22)

SUBJECT: MATHS

CLASS: III

DATE: _____

TIME: 2:00HRS

M.O _____

M.M:50

NAME _____ SECTION: _____ Roll No. _____

KNOWLEDGE (12)

Q1. Choose the correct option. (4)

1) Which one will weigh less than 1 kg?

- a) Your school bag
- b) Your weight
- c) Your pencil
- d) A sack of wheat

2) Complete the pattern.

580, 560, 540 _____

- a) 520, 500
- b) 500, 520
- c) 550, 560
- d) 550, 580

3) What do even numbers end with?

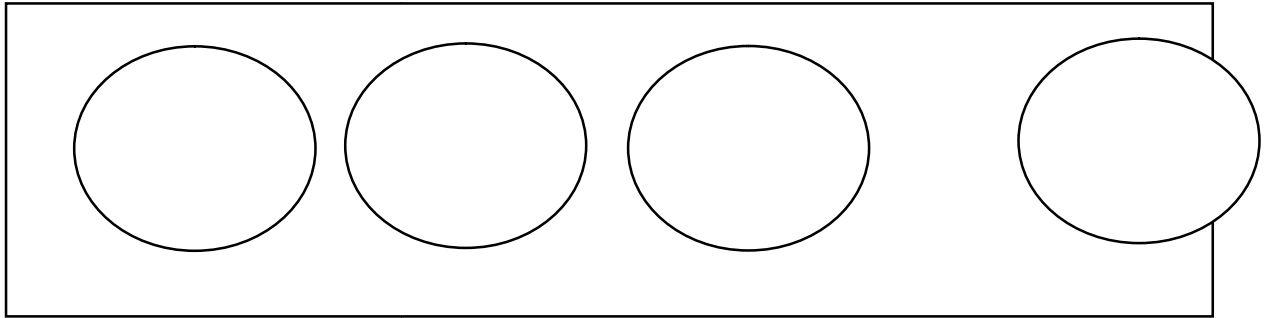
- a) 0, 2, 4, 7, 8
- b) 0, 3, 4, 5, 8
- c) 0, 2, 4, 6, 8
- d) 1, 3, 4, 6, 8

4) How many 25 paise coins make Rs. 1?

- a) 8
- b) 2
- c) 6
- d) 4

Q2. Draw 12 balls. Put them into 4 equal groups.

(2)



Q3. i) Complete the sequence.

(2)



ii) Find the secret message.

B1E2A3U4T5I6F7U8L F10L11O12W13E14R15S

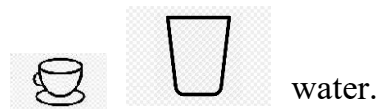
Q4. Write all the odd numbers between 210 to 220.

(2)


Q5. Fill in the blanks using more or less.

(2)

1. The cup has _____ water
but the glass has _____



2. The cooking pot has _____
But the bowl has _____ milk.



UNDERSTANDING (12)

Q1. Do as directed.

(4)

1) 21 cupcakes can be equally divided into _____ (7 / 5) groups.

2) Add

$$\text{Rs } 55.50 + \text{Rs } 13.00 = \underline{\hspace{2cm}}$$

3) Fill in the blank

$$20 \text{ litre} = 5\text{l} + 6\text{l} + \underline{\hspace{1cm}} \text{l} + 4\text{l}$$

4) $37 \times 5 = \underline{\hspace{2cm}}$

Q2. There are 4 shelves in a cupboard. Each shelf has 12 books. How many books are there in the cupboard? (2)

Q3. Hari booked a railway ticket for Rs 62.50. He gave a 100 rupee note. How much money will he get back with the ticket? (2)

Q4. A survey was done to find out the favourite fruit of 20 children of class III. Look at the table and answer the following questions. (4)

Favourite fruit	Number of children
Apple	4
Banana	3
Grapes	6
Mango	5
Pineapple	2

- a) Most favourite fruit _____.
- b) Least favourite fruit _____.
- c) _____ is liked more than _____.
- d) _____ is liked more than _____.

ABILITY TO COMPUTE (13)

Q1. Fill in the blanks. (3)

- 1) $73 \times 11 =$ _____
- 2) $20+20+20+20 =$ _____
- 3) One rail coach has 8 wheels. How many wheels in 6 coaches?

Q2. Use box method to solve the following. (2)

- i) 22×15

Q3. Arjun bought a toy from the shop for Rs. 165. He gave shopkeeper a 500 rupee note.
How much will he get back with the toy? (2)

Q4. Shyam has 40 metres of rope. He distributed it equally among 4 children. (2)

- a) Each child gets _____ metres of rope.
- b) If there is 48 metres of rope, how much will each child get?

Q5. Answer the following questions. (4)

A frog jumps 2 steps at a time.

A squirrel jumps 3 steps at a time.

A rabbit jumps 5 steps at a time.

A horse jumps 15 steps at a time.

A kangaroo jumps 30 steps at a time.

- a) Which number will the horse reach in three jumps?

- b) Who all will meet at the number 20?

- c) How many jumps of the rabbit equal one jump of the horse?

- d) How many jumps of the horse equals two jumps of the kangaroo?

PROBLEM SOLVING ABILITY (13)

Q1. Do as directed.

(3)

1. Tick the one for which you need a bigger bag.

1 kg Sug ☐

1 kg Red chilli pov ☐

2. State true or false.

A glass can hold more juice than a jug. _____

3. Fill in the blank.

500 ml + 500ml + 500ml + 500 ml = _____ litre.

Q2. 12 bottles are required to fill a pot. How many bottles are required to fill 3 such pots? (2)

Q3. How many 5 kg weights are needed to measure 30 kg wheat? (2)

Q4. Fill in the blanks with appropriate measuring unit. (2)

Dal = 500 _____

Sugar = 3 _____

Q5. A train goes from Kota to Delhi. On its way it stops at a few stations. The cost of a rail ticket and the distances from Kota to the different stations it passes is given in the table below. Look at it and answer the questions that follow. (4)

Station	Distance from Kota (in km.)	Fare (in Rs.)
Gangapur	100 km	70.50
Bharatpur	275 km	215.00
Mathura	380 km	310.00
Faridabad	460 km	475.50

a) Find the distance from Gangapur to Bharatpur.

b) Find the distance between Bharatpur to Faridabad.

c) Shikha is going from Kota to Mathura. What is the cost of her ticket?

d) Seema and Meena are going from Kota to Bharatput. What amount will they pay for all the tickets?

ATOMIC ENERGY CENTRAL SCHOOL NO-2 RAWATBHATA

Sample Paper(2021-22)

Sub:EVS

CLASS-III

Time: 2 hours

NAME- _____

Sec-

Roll No- ____

Date: _____

M.M- 50

M.O: _____

OBSERVATION AND REPORTING (18 marks)

1. Choose the correct answer and fill in the blanks. (5marks)

2. _____ is not related to brick. (clay / iron)
3. Braille script is based on _____ points. (three / six)
4. Letters are delivered to our homes by a _____. (postman / electrician)
5. A _____ is a drawing of earth surface or a part of it. (map / globe)

2. Write the names of the games in the given space for riddles. (2 marks)

a. It has no wings, but it can fly

High high up in the sky. _____

b. King, queen, ace and jack,

Fifty two of them make a pack. _____

3. Answer the following (6 marks)

a. Where does Chameli live?

b. What kind of problems do people have in oldage?

c. What does PIN stand for?

4. Write your complete postal address in the box given below. (5 marks)

IDENTIFICATION AND CLASSIFICATION (16 marks)

1. Draw a green circle around the food items obtained from plants and red circle around food items we get from animals. (4marks)

Honey	Turmeric	Milk	Sugarcane
Ginger	Spinach	Cheese	eggs

3. Find the odd one out and write it in the space given. (3 marks)

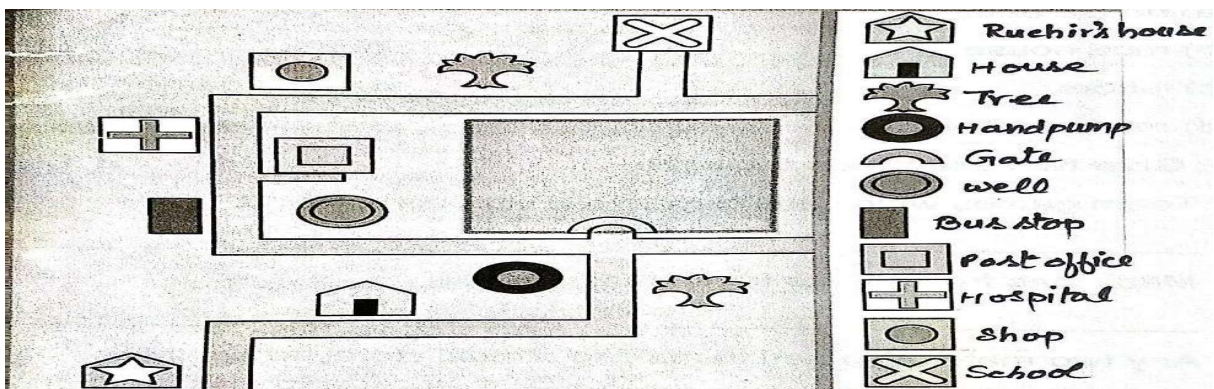
cow	bicycle	horse	Goat	_____
chess	stappoo	banana	Kabaddi	_____

Turban _____

(4 marks)



(5marks)



- a) The handpump is near the _____. (school / house)
- b) There are two _____ in the map.(trees / hospital)
- c) The school is _____ from Ruchira's house. (far / near)
- d) The _____ is between school and hospital. (shop / handpump)
- e) The bus stop is near the _____. (well / school)

DISCOVERY OF FACTS (16marks)

1. In the table given below are names of some pet animals. Complete the table (4marks)

Name of the animal	Why do we keep them
Dog	
Cow	
Hen	
Honeybee	

2. Write T for true and F for false statements (3 marks)

- a. Water left after washing vegetables cannot be used to water plants. ()
- b. One becomes a part of the family by being born in. ()
- c. A dupatta is a long piece of stitched cloth. ()

3. Give reasons (4 marks)

- a. People prefer to make call instead of writing a letter,

- b. Sieve is attached to the mouth of the pipe that is attached to the tanka.

4. Answer the following questions

(5 marks)

1. Name some animals which are kept as pets?

2. What do you do when your pet is-

a. Hungry _____

b. Feeling hot or cold _____

c. Teased by someone _____

d. Hurt _____