

ATOMIC ENERGY CENTRAL SCHOOL NO-2 RAWATBHATA

ENGLISH CLASS-IV (2021-22)

NAME- _____

Sec- Time: 2 hours

Roll No- ____ Date:_____

M.M- 50 M.O:_____

Inv. Sign.

Examiner's sign.

READING (12 MARKS)

A.1.Read the following passage and answer the following questions given below.

(6 Marks)

Everybody called me Raja. It was not my real name, but I liked being called Raja. I lived with my grandfather and grandmother. My mother and father died when I was young, leaving me an orphan. I was left with my grandparents who brought me up. We lived in a big house, but we were a small family. We were four of us – grandfather, grandmother, uncle and I. We had many relatives, but they lived in their own houses. Grandfather was a tall, strong man. He always spoke in a loud voice. He knew everyone in our village. People respected him and came to him for advice and help.

Tick the correct answer:

1. a) An _____ is a child whose parents are both dead.

i) orphan

ii) relative

iii) villager

2. Raja was not the _____ name of the boy.

i) false

ii) real

iii) school

3. Fill in the blanks

a) One word for grandfather and grandmother is _____.

b) The grandfather's voice was _____.

4. Write the past form of **die** - _____

5. Frame a sentence using the word **respected**.

6. Identify and circle the describing word in the following sentence.

We were four of us – grandfather, grandmother, uncle and I.

A.2. Read the following poem and answer the following questions. (6 marks)

My mama said if I'd be good,

She'd send me to the store

She said she'd bake some Gingerbread
If I would sweep the floor.

She said if I would make the bed
And watch the telephones
That she would send me out to get
A chocolate ice cream cone.

And so I did the things she said
And then she made some Gingerbread
Then I went out, just me alone
And got my chocolate ice cream cone.

While coming back I struck my toe
Upon a big old stone
Now need I tell you that I dropped
My chocolate ice cream cone.

A little dog came along
And he took a great big lick
And so I hit that mean old dog
With just a little stick.

Then he bit me where I sat down
And he chased me all over town

So, now I'm lost, I can't find my home
And all because of that chocolate ice cream cone.

Tick the correct answer.

1. The child did all the work for
 - i) watching TV and an ice-cream cone
 - ii) an ice-cream cone and some gingerbread
 - iii) buying a book and some gingerbread
2. The child dropped the ice-cream cone because
 - i) he stumbled over a stone
 - ii) he didn't like the cone
 - iii) he ran all over the town

Answer the following question.

3. What happened to the child when the dog chased him all over the town?

Do as directed.

4. Write one word for 'all by oneself' from the poem. _____
5. Write the antonym of found from the poem? _____
6. Write the full form of I'd. _____

TEXTUAL QUESTION (12 MARKS)

A. Answer the following questions in one two words. (3 marks)

- a) Where did the naughty boy go? _____
- b) When we should not water the plants? _____
- c) What did the boy make with the branches of the tree?

B. Answer the following questions in one or two sentences. (6 marks)

- a) What did the learned Pundit claimed to know?

- b) How was the stump of the tree useful?

- c) Where did the children go to buy books?

- d) What did the carpenter call his puppet?

- e) What kind of a book did the girl buy?

- f) What would the child give the donkey?

C. Who said to whom?

(3 marks)

a) "Come in, come in !."

_____ said to _____.

b) "I'm glad to be a real boy."

_____ said to _____.

c) "In times of difficulty , a person speaks only in his mother tongue."

_____ said to _____.

CREATIVE WRITING (10 MARKS)

A. Write a paragraph on Pinocchio using the words given in the brackets.

(5 marks)

(wood, puppet, naughty, nose grew long, school, real boy)

B. Look at the picture and write a paragraph in your own words. (5 marks)

This image shows a blank sheet of white paper with horizontal ruling lines. The lines are evenly spaced and run across the width of the page. There are no margins, text, or other markings on the paper.

GRAMMAR (6 MARKS)

Do as directed.

- A. Pick out the silent letters from the words given below. (1 marks)

sign - _____ b) often - _____

- B. Fill in the blanks with a / an / the. (1 marks)

Buy her _____ useful gift like _____ apron.

- C. Punctuate the following sentence. (1 marks)

sita where are you looking

- D. Rearrange the following words and make a meaningful sentence. (1 marks)

beggar / me / for / to / the / bread / some / came

- E. Fill in the blanks using any suitable word: (1 marks)

A _____ girl sat up in the bed asking her mother to tell a
_____ story.

- F. Write the full form of - (1 marks)

won't - _____ couldn't - _____

VOCABULARY (5 MARKS)

- A. Make opposites using 'in' or 'dis'. (1 marks)

capable X _____ own X _____

B. Give one word for the following. (1 marks)

i. seed of an oak tree _____

ii. a tool used by a carpenter for smoothening wood

C. Construct a meaningful sentence using the given word. (1 marks)

surprised

D. Fill in the blanks with the correct word. (1 marks)

All relatives and friends congratulated Ashok on the _____

(birth/ berth) of his first _____. (sun / son)

E. Correct the given sentence. (1 marks)

An old stump is good for nothing.

SPELLINGS (5 MARKS)

A. Circle the words with correct spellings. (1 marks)

reindeer raindeer reindear

shelfes shelves shelves

B. Rearrange the jumbled letters to make meaningful words. (1 marks)

o n t g e u - _____

o o k s o p h b - _____

C. Identify the misspelt words and spell them correctly. (1 marks)

alone beests weigty stiff amazed

D. Write the correct word by using the clues.

(1 marks)

to identify someone – r e _ o _ n _ _ e

E. Fill in the letters and complete the words.

(1 marks)

c o u _ _ t i _ _ r s

परमाणु ऊर्जा केंद्रीय विद्यालय # 2, रावतभाटा

आत्मविश्वास परीक्षा प्रश्नपत्र (2021 – 22)

कक्षा- 4

विषय – हिंदी

पूर्णांक – 50

नाम - _____

वर्ग - _____

प्रासांक - _____

अनुक्रमांक - _____

ह० निरी० - _____

ह० परी० - _____

प्रश्न1.

(क) निम्नलिखित अपठित गद्यांश को पढ़कर दिए गए प्रश्नों के उत्तर लिखो। (5)

एक घने जंगल में बहुत हिरन रहते थे। जंगल में हिरनों के कई झुंड थे। सबसे बड़े जंड़ में लगभग पचास हिरन थे। इन हिरनों का सरदार काले रंग का था। उसकी चमकीली लाल – लाल आँखें बहुत सुंदर थीं।

एक दिन जंगल में शिकारियों का दल शिकार करने आया। उन शिकारियों में उस देश का राजकुमार भी था। उन्होंने काले हिरण को देखा। काले हिरन को देखकर राजकुमार ने सोचा इसे जीवित पकड़ना चाहिए। राजकुमार और उसके साथियों ने धोखे से काले हिरन को जाल में फँसा लिया। काले हिरन को जाल में फँसा देखकर सारे हिरन रुक गए। अपने नेता के लिए आत्मसमर्पण करने के लिए तैयार हो गए। हिरनों में एकता और आत्मसमर्पण की भावना को देख कर राजकुमार बहुत खुश हुआ।

1. हिरन कहाँ रहते थे?

2. राजकुमार और उसके साथियों ने जंगल में किसे देखा?

3. काले हिरन को जाल में फँसा देखकर अन्य हिरनों ने क्या किया?

4. हिरनों की किस बात को देखकर राजकुमार बहुत खुश हुआ?

5. वाक्यांश के लिए एक शब्द लिखो।

जो शिकार करता है-

(ख) इस पठित गद्यांश को पढ़ कर दिए गए प्रश्नों के उत्तर लिखो। (5)

धनी बिन्नी को खींच कर ले गया और पास के नींबू के पेड़ से बाँध दिया। फिर बिंदा ने उसे यात्रा के बारे में बताया। गाँधी जी और उनके कुछ साथी गुजरात में पैदल चलते हुए, दांडी नाम की जगह पर समुद्र के पास पहुँचेंगे। गाँवों और शहरों से होते हुए पूरा महीना चलेंगे। दांडी पहुँच कर वे नमक बनाएँगे। “नमक?” धनी चौक कर उठ बैठा, “नमक क्यों बनाएँगे? वह तो किसी भी दुकान से खरीदा जा सकता है।”

1. धनी ने बिन्नी को कहाँ बाँध दिया?

2. बिंदा ने उसे किसके बारे में बताया?

3. गांधीजी और उनके साथी दांडी पहुँच कर क्या करने वाले थे?

4. नमक कहाँ से खरीदा जा सकता है?

5. अर्थ लिखो ।

यात्रा = _____

प्रश्न2. निम्न प्रश्नों के उत्तर लिखो।

(4×1=4)

1. जो लोग देख नहीं सकते वे किस तरह की किताबें पढ़ सकते हैं?

2. मंडी में क्या - क्या बिक रहा था?

3. बिन्नी कौन थी?

4. तुम्हारे घर में खाना पकाने के लिए किस ईंधन का इस्तेमाल किया जाता है?

(व्याकरण पर आधारित - 15 अंक)

प्रश्न3.

क) अर्थ लिखो।

पोथी = _____ गज़ब = _____

ख) लिंग बदलो।

दर्जी = _____ टोकरा = _____

ग) नीचे दिए गए शब्दों में सही जगह पर बिंदु या चंद्रबिंदु लगाओ।

कहा = _____ इतज़ार = _____

घ) बताओ ये क्या गढ़ते हैं?

लुहार = _____ कुम्हार = _____

ड.) उदाहरण के अनुसार निम्न तालिका को आगे बढ़ाओ।

उदाहरण -	भारत	देश
	युमना	_____
	सूरजमुखी	_____

च) ऐसे रंगों के नाम लिखो जो किसी चीज़ के नाम पर पड़े हैं।

उदाहरण -	आसमान	आसमानी
	बैंगन	_____
	बादाम	_____

छ) किसी एक चीज़ का नाम बताओ जिसे फेंटते हैं।

ज) निम्न मुहावरों का वाक्य प्रयोग करो।

★ दिन-रात एक करना - _____

★ एड़ी-चोटी का जोर लगाना - _____

(वर्तनी पर आधारित - 5 अंक)

प्रश्न4.

क) नीचे दिए गए शुद्ध शब्दों पर गोला लगाओ।

नरियल

नारीयल

नारियल

ख) नीचे लिखे शब्दों के अक्षरों के क्रम को बदलकर शुद्ध शब्द बनाओ।

लाटकीच _____ स्यामस _____

ग) निम्न वाक्य को शुद्ध करके लिखो।

बारिश हो रहा है।

(पाठ्य पुस्तक पर आधारित प्रश्न - 6 अंक)

प्रश्न5) निम्न प्रश्नों के उत्तर लिखो।

क) सुनीता को दुकानदार का व्यवहार क्यों बुरा लगा?

ख) हुदहुद को कहीं “हजामिन” चिड़िया और कहीं “पदुबया” के नाम से पुकारा जाता है।क्यों?

ग) नीना चुन्नू और टिंकू से ही दाल क्यों बनवाना चाहती थी?

प्रश्न6. सुलेख लिखो।

(5)

नीचे लिखे अनुच्छेद को सुंदर लेख में लिखो।

माता-पिता का आदर करना सभी बच्चों का कर्तव्य होता है क्योंकि वे स्वयं कष्ट सहकर हमें खुशियाँ प्रदान करते हैं। हमारी छोटी-से-छोटी ज़रूरत का भी ध्यान रखना अपना कर्तव्य समझते हैं। उन्हें अपने बच्चों से सदा यह उम्मीद रहती है कि वे आज्ञाकारी बनें और पढ़-लिख कर जीवन में सफलता प्राप्त करें।हमें सदा अपने माता-पिता को खुश रखना चाहिए।

प्रश्न 7. पाठ्य पुस्तक के आधार पर दिए गए किसी एक विषय पर पाँच वाक्य लिखो। (5)

भीखूभाई या हुदहुद

ATOMIC ENERGY CENTRAL SCHOOL No.2, RAWATBHATA

SAMPLE PAPER (2021-22)

SUBJECT: MATHS

CLASS: IV

DATE:

TIME: 2:00HRS

M.O ____

M.M:50

NAME _____

SECTION: _____

ROLL NO: _____

Section A (12 Marks)

I. Choose the correct answer and fill in the blanks.

(4 x1=4)

a. $\frac{3}{4}$ of 200 rupees = _____ rupees

i) 50

ii) 250

iii) 150

b. A table cloth is 3m long and 1m wide. How much lace is needed to put around it?

i) 4m

ii) 8 m

iii) 3m

c. If the length of the boundary of a square is 32cm. Its side will be _____.

i) 8 cm

ii) 6cm

iii) 7cm

d. A circle has _____ radii.

i) one

ii) two



iii) many

II. Answer the following questions as directed.

(4x2= 8)

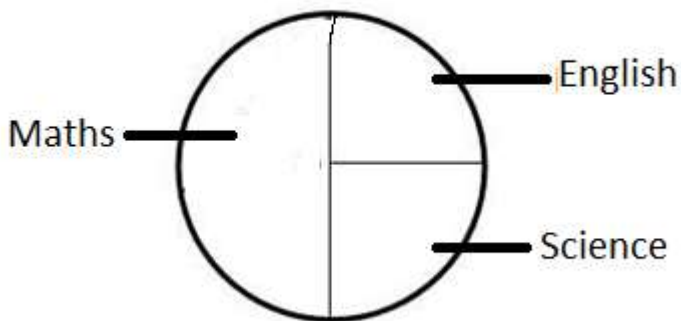
i) Draw a circle of radius 3cm. Draw a chord AB and radius CD in it.

ii) Divide the following rectangles into 4 equal parts in two different ways.



iii) A box has 52 bulbs. One-fourth of them are broken? How many bulbs are not broken?

iv) The chapati chart shows the favourite subjects of a group of 48 children.



a. How many children like Science? ($\frac{1}{4}, \frac{1}{2}, \frac{3}{4}$)

b. Number of children who like Maths is _____

Section B (12 Marks)

I. Fill in the blanks.

(1x4=4)

i) There are _____ quarters in a half.

ii) If  = 4 children then    = _____ children.

iii) If GBO means FAN , MJHIU means _____

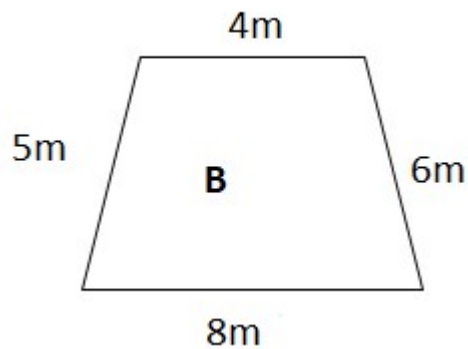
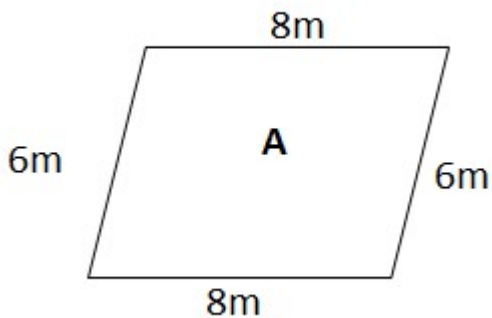
iv) If radius of a circle is 4cm. Its diameter is _____.

II. Do the following.

(2 x 4 = 8)

1. In a playground, 96 children are standing in 6 equal rows. How many children are there in each row?

2. Find out which one has the longer boundary.



Boundary of A _____

Boundary of B = _____

So, _____ has the longer boundary.

III. The table shows the favourite breakfast item of students of class IV.

Breakfast Item	No. of students
Poha	16
Idli	20
Sandwich	12
Upma	8

Draw a smart chart. Use  = 4 children

Number of students

Favourite Breakfast Item

Section C (13 Marks)

I. Choose the correct option and fill in the gaps.

(4 x1= 4)

1. 154 days = _____ weeks. (20 , 22 , 23)
2. Diametre of a circle is always _____ of its radius. (thrice, half, twice)
3. $468 \div 4 =$ _____ (17 . 117, 114)

II. Do the following.



(2 x 3=6)

1. There are 100 mangoes in a basket. $\frac{1}{4}$ of them are ripe and remaining are unripe.

How many mangoes are ripe? _____

How many mangoes are unripe? _____

2. Write the fraction for the shaded part.



3. Frame your question -

Vaani has 36 apples.

She distributed them equally among 9 boys.

Your question: _____

Find the answer: _____

III. Kavita needs stamps of Rs 45 for her parcel. Only stamps of Re 1, Rs 2, Rs 5 and Rs 10 were found in a post office. Use 4 different ways to make Rs 40 using these stamps. **(4)**

i) _____ = Rs 40

ii) _____ = Rs 40

iii) _____ = Rs 40

iv) _____ = Rs 40

Section D (13 Marks)

I. Choose the correct option and fill in the gaps.

(3 x1= 3)

1. To balance the weight of $\frac{3}{4}$ kg we need $\frac{1}{4}$ kg + _____.

2. 3 kg + 50 g = _____ gram.

3. A wire is 10 cm long. If 8 such wires are used to make a square, the side of the square is _____ cm

II. Do as directed.

(2 x 2 =4)

1. Write the numbers from 1 to 9 in such a way that the sum of each side must be 15.

	7	
9		1
	3	

2. Name any two things that we buy from post office.

_____, _____

- III.** A sweet seller made 144 laddoos. If he makes packets of 16 laddoos in each. How many packets will he make? How many packets will he make if he will pack 8 laddoos in each packet? **(4)**

ii) Cost of a packet of laddoos is Rs.66. How much money will Manoj pay for 12 such packets?

ATOMIC ENERGY CENTRAL SCHOOL-2,RAWATBHATA

SAMPLE PAPER(2021-22)

SUBJECT:EVs

CLASS :IV

TIME:2.00HRS

M.O ____

M.M:50

NAME _____

SECTION :_____

ROLL NO:_____

OBSERVATION AND REPORTING (18 MARKS)

I.Choose the correct answer and fill in the blanks. (5)

- 1.Growth of a seed into a plant is _____. (irrigation / germination)
- 2.Basva lived in _____ village of Karnataka . (Belvanika Muzzafarpur)
- 3.Nandita's mama was asked to _____ the house as a big building was to be built there. (Vacate / make)
4. _____ is caused due to drinking contaminated water. (Polio / Cholera)
5. _____ rice is the common variety of sticky rice used in Assam . (bora / pitha)

II. Name the following . (2)

1. Bonfire made of wood and bamboo lit during Bihu festival .

_____.

2. A glass that reflects seven colours .

_____.

III.Give reason. (6)

1. Pochampalli craft is in danger .

2. People in Abu Dhabi wear loose cotton clothes .

3. A squirrel keep gnawing on the things.

IV. Write a short note about (any one) of the following . (5)

Wahida Prism or Chuskit

IDENTIFICATION AND CLASSIFICATION (16 MARKS)

V. Identify the picture . (3)





b)



VI. Fill in the blanks .

(4)

1. To lead a _____ is a big honour in armed forces.
2. _____ (spice) is used in both sweet and salty things.
3. Cooking and eating together in Gurudwara is called _____.
4. _____ is the language spoken in Abu Dhabi.

VII. Answer the following in two sentence.

(4)

a) What is Bhela Ghar?

b) What are the responsibilities of a Medical officer in Naval ship?

VIII . Write two difference between Nandita's village house and mama's house in Mumbai . (5)

DISCOVERY OF FACTS (16 MARKS)

IX. Give two examples of each. (3)

a) Traditional occupations.

Ans : _____

b) Harvest festivals.

Ans : _____

c) Tools used by a farmer .

Ans _____

X. Answer the following in sentences. (4)

1. From where did Maalu's Chittapan come?

2. What is a Mid Day meal programme ?

3. What type of teeth does a cow have ?

4. Who all helped Chuskit to go to school?

XI. Answer the following questions in two sentences . (4)

1. What is a Garam Masala?

2. Write about the given currency note .



a) Country _____

b) Value of note _____

c) Number of languages on note _____

d) Name of the bank on the note: _____

XII. On the outline map of India mark the following states/ union territory.

(5)

1. A place where Chuskit lives : _____

2. Pochampalli weavers are from this state : _____
3. Holgundi area is in this state : _____
4. Bihu is harvest festival of this state : _____
5. Maalu lives in this State: _____

