

Atomic Energy Central School No.2, Rawatbhata

Confidence Examination-2022-23

Class: III
Subject: English

Time: 3Hours
Marks: 80

To be filled by the student

Student's Name: _____

Name of the school: _____

Class/Sec: _____ Roll No. _____ Date of Examination: _____

To be filled by the teacher

Invigilator's Sign: _____

Examiner's Sign : _____

Marks Obtained: _____

General Instructions:

1. Marks for questions are indicated against each.
2. Read each question carefully and answer neatly.
3. Ensure that questions for each section are answered.
4. On completion of the Exam, the student must hand over the answer sheet to the invigilator in the Exam room.
5. The student should ensure that the Answer sheet is not damaged or folded.

Section A (Reading)-20 marks

A1. Read the following passage and answer the following. (5m)

It is early morning. The road is asleep. Everything is quiet. But listen!

The birds are calling softly. “Chirrup, chirrup, chirrup,” say the sparrows.

“Chirrup, chirrup, chirrup.”

“Caw, caw caw,” says the crow. “Caw, caw caw,” “wake up, wake up.”

Here is someone else now. “Tring-a-ling, tring-a-ling.” It is the newspaper vendor.

a) What are the birds doing? (1m)

b) What time is it? (1m)

c) Who is riding the bicycle? (1m)

d) Find the opposites of the following words from the passage. (1×2=2m)

a) awake _____

b) then _____

A2. Read the passage carefully and answer the following questions. (5m)

Mother your baby is silly! She is so very childish! She does not know the difference between the lights in the streets and the bright stars. When we play with pebbles, she thinks they are real food. She even tries to put them into her mouth. When I open a book before her and ask her to learn her A B C, she tears the pages with her hands and roars with joy at nothing. This is your baby’s way of doing her lessons!

a) Add, 'ish' to the given word to make a new word. (1m)

Example- childish

Baby - _____

b) Write the word of opposite meaning from the passage. (2m)

a) Foolish- _____ b) bright. _____

c) Write the word of similar meaning from the passage (1m)

stones - _____

d) Why is the baby childish? Give one reason. (1m)

A3. Read the following passage and answer the following questions. (10m)

Once there lived a dog. He was very hungry. He wandered here and there in search of food. He got a juicy bone from a butcher's shop. He felt very happy. He took the bone and ran away. He reached on a bridge of a river. He saw his own shadow in the water. He thought that there was another dog with a juicy bone in his mouth. His mouth watered and he wanted to snatch that bone from him. He started barking on him and as he opened his mouth, the bone fell down from his mouth into the river.

a) Choose one word from the story and write against the statements. (1m)

One who needs food - _____

b) Choose the words from the story having the opposite meaning of the following words. (2m)

i. Dry - _____ ii) Closed _____

c) Choose the words from the story having the similar meaning of the following word. (1m)

Reflection - _____

d) Choose the correct answer and fill in the blanks. (2m)

- i. The dog got a juicy _____. (Flash, fruit, bone)
- ii. He reached on a _____. (Terrace ,Bridge, building)

e) Write 'Yes' or 'No' against the sentences. (2m)

i) The bridge was on a river. _____

ii) The dog was hungry. _____

f) Why did the dog wander here and there (1m)

g) What did the dog see into the water? (1m)

Section B (Textual Questions)- 10 marks

B1. Choose the correct answer. (1×2=2m)

1) The feet of the camel are

a)Thick and fat b) Thick and padded c) Thin and padded

2) The horse was going to _____

a)Village b) City c) Hill

B2. Answer the following questions. (4×2=8m)

a)Where did the mother tiger and her small tiger live?

b) Why do you think Meena was carrying her brother?

c)Who does the postman brings letters for ?

d) What are the precious loads that trains carry?

Section C (Creative Writing) -10 marks

C1. Write five sentences about camel using the words given below. **(5 m)**

Ship	store	water	hump	leaves	padded
-------------	--------------	--------------	-------------	---------------	---------------

C2. Look at the given picture and write five sentences on it. **(5 m)**



Section-D (Grammar) -15 marks

D1. Choose the correct option and fill in blank : (1X3=3m)

i) _____ is the ship of the desert.

- a) Camel b) Tiger c) Lion d) Kangaroo

ii A _____ mends our shoes.

- a) teacher b) cobbler c) barber d) moo

iii) The rabbit lives in a _____.

- a) sty b) burrow c) herd d) bunch

D2. Write the plurals of the following words. (2m)

- a)Calf _____ b) puppy _____

D3. Rearrange the words to make correct sentences. (1×2=2m)

- a)Makes / a / clown / laugh / people

b)Caught / frog / tiger / cub / the / a night / one

D4) Make a sentence (1m)

Pounce - _____

D5)Underline the silent letters in the following. (2m)

a)Talk _____ b) know _____

D6)Write the full forms of – (2m)

a)We're _____ b)it's _____

D7)Fill in the blanks with can or cannot. (3m)

a) We _____ read and write.

b) A baby _____ crawl.

c) Old people _____ walk fast.

Section E (Vocabulary) - 10 marks

E1.Give another word for the following (2m)

a)Dry grass- _____

b)Travellers in a public vehicle - _____

E2. Add –ful to make new words as shown in the example. (1m)

Eg: play-playful

care- _____

E3. Match the words with their opposites.

(4m)

never

short

tall

happy

hot

always

sad

cold

E4. Make a meaningful word.

(2x1=2m)

i) g i t e r-_____

ii) s e m o u-_____

E5. Write the opposite word of -

(1m)

Friend × _____

Section F (Spellings) - 10 marks

F1. Choose the correct word and fill in the blank.

(2x1=2m)

i) She could not _____ (hear / here) properly

ii) I don't _____ (know / no) him.

F2. Write the words that rhyme with the following-

(2x1=2m)

i) Fine _____ ii) hare _____

F3. Fill in the blanks to make meaningful words

(3x1=3m)

i) V___ll___ge ii) n___ug___ty iii) l___s___ons

F4. Encircle the correct spellings.

(3x1=3m)

a) Astronaut

astrunout

astronaught

b) Newsppaper

newspaper

newzpaper

passengers

(5m)

Rabindranath Tagore, one of the greatest poets, was born on 6th May, 1861 at Calcutta. He first wrote a book of poems called Evening songs. But the books which made Tagore known all over the world as a great poet was Gitanjali. This great poet of India died on the 7th

परमाणु ऊर्जा केंद्रीय विद्यालय #2, रावतभाटा

आत्मविश्वास परीक्षा

कक्षा - तीन

समय : 3 घंटे

विषय - हिंदी

पूर्णांक : 80

विद्यार्थियों के द्वारा भरा जाएगा

नाम - _____

स्कूल का नाम - _____

कक्षा/वर्ग - _____ अनुक्रमांक - _____ दिनांक - _____

शिक्षकों के द्वारा भरा जाएगा

निरीक्षक के हस्ताक्षर - _____

परीक्षक के हस्ताक्षर - _____

प्रासांक: _____

सामान्य निर्देश

1. सभी प्रश्नों के उत्तर दिए गए निर्देशानुसार लिखिए ।
2. सभी प्रश्नों के उत्तर लिखना अनिवार्य है ।
3. सभी प्रश्नों के अंक उनके समक्ष दिए गए हैं ।
4. स्वच्छता एवं सुन्दर लेखन का विशेष ध्यान रखें ।

प्र०1.अपठित गद्यांश को पढ़कर पूछे गए प्रश्नों के उत्तर लिखो।

(10)

शंकर के पास एक हाथी था। शंकर उसे बहुत थोड़ा खिलाता - पिलाता था। लेकिन काम बहुत ज्यादा लेता था। हाथी को एक दिन गुस्सा आ गया और उसने शंकर को अपने पैरों तले दबाकर मार डाला। शंकर की पत्नी रोने लगी और उसने अपने बच्चे को उसके पैरों के पास रख कर कहा, “तुमने इनकी पिता की जान ली है अब इन्हें भी मार डालो।” यह सुनकर हाथी ने उसके बड़े पुत्र को सूँड में लेकर अपनी गर्दन पर बिठा लिया। इसके बाद वह लड़के की आज्ञा मानने लगा। और उसके लिए ही काम करने लगा।

प्र०क. शंकर के पास क्या था ?

प्र०ख. हाथी को गुस्सा क्यों आ गया ?

प्र०ग. गुस्सा आने पर आने पर हाथी ने क्या किया ?

प्र०घ. शंकर की पत्नी ने हाथी से क्या कहा ?

प्र०ड. पत्नी की बात सुनकर हाथी ने क्या किया ?

प्र०च. उल्टे अर्थ वाले शब्द लिखो।

पास _____

थोड़ा _____

प्र०छ. लिंग बदलो ।

पिता _____

लड़का _____

प्र०ज. खाली जगह भरो।

इसके बाद वह लड़के की _____ मानने लगा।

प्र०2. पठित गद्यांश को पढ़कर पूछे गए प्रश्नों के उत्तर लिखो। (5)

अच्छे पेड़ों की क्या कमी है ! नारियल के पेड़ की ही सोचो। नारियल की जटाओं को काटकर मैं मोटी डोरियाँ बना सकता हूँ और डोरियों से मैं मजबूत चटाइयाँ भी बना सकता हूँ। मैं नारियल का पानी पी सकता हूँ। मैं नारियल की गरी खा सकता हूँ और कुछ गरी सुखाकर मैं खोपरा तैयार कर सकता हूँ। खोपरे को पेर कर मैं गोले का तेल निकाल सकता हूँ। गोले का तेल साबुन और कितनी ही चीजें बनाने में काम आता है। नारियल के छिलकों को साफ करके कटोरे और प्याले बना सकता हूँ। ठीक तो है, मेरे लिए तो सब यही सबसे अच्छा पेड़ है मैं तो इसी के नीचे घर बनाऊँगा इसीलिए तीसरे भाई ने नारियल के पेड़ तले अपनी कुटिया बनाई और मजे से रहने लगा।

प्र०क. नारियल की जटाओं को काटकर क्या बना सकते हैं ?

प्र०ख. नारियल से खोपरा कैसे तैयार किया जाता है ?

प्र०ग. नारियल के छिलके को साफ कर के क्या - क्या बना सकते हैं ?

प्र०घ. वचन बदलकर लिखो।

कटोरा _____

छिलका _____

प्र०ड. तीसरे भाई ने अपनी कुटिया कहाँ बनाई ?

प्र०3. दिए गए पठित गयांश को पढ़ कर दिए प्रश्नों के उत्तर लिखो।

(5)

मीरा बहन का जन्म इंग्लैंड में हुआ था । गांधी जी के विचारों का उन पर इतना असर हुआ कि वह अपना घर अपने माता पिता को छोड़कर भारत आ गई और गांधीजी के साथ काम करने लगी ।

आजादी के पाँच साल बाद उन्होंने उत्तर प्रदेश के एक पहाड़ी गाँव, गेंवली में गोपाल आश्रम की स्थापना की । इस उस आश्रम में मीरा बहन का बहुत सारा समय पालतू पशुओं की देखभाल में बीतता था । लेकिन गेंवली गाँव के आसपास के जंगलों में बाघ जैसे खतरनाक जानवर भी रहते थे ।

क. मेरा बहन का जन्म कहाँ हुआ था ?

ख. मीरा बहन किसे छोड़कर भारत आ गई थी ?

ग. मीरा बहन ने किस आश्रम की स्थापना की ?

घ. मीरा बहन का सारा समय कैसे बीतता था ?

ड. विलोम शब्द लिखो ।

पालतू _____

पाठों और कविताओं पर आधारित प्रश्न

प्र०4. नीचे दिए गए प्रश्नों के उत्तर एक वाक्य में लिखो (10)

क. दोनों बिल्लियों के बीच झगड़े की जड़ क्या थी ? (1)

ख. क्या देख कर काबुली वाले के मुँह में पानी आ गया ? (1)

ग. पिंजड़ा बिना बाघ के बंद हो गया । कैसे ? (2)

घ. सारी मिर्चें खाने के बाद काबुलीवाले की क्या हालत हुई होगी ? (2)

ड. अवंति ने कपड़ा अलमारी में बंद कर दिया । क्यों ? (2)

च. लाल – लाल मिर्च को देख कर काबुलीवाले के मुँह में पानी आ गया । तुम्हारे मुँह में किन – किन चीजों को देखकर या सोचकर पानी आ जाता है ? (2)

रचनात्मक प्रश्न

प्र०5. कल्पना व सामान्य ज्ञान पर आधारित प्रश्न का उत्तर लिखो।

पेड़ों के फ़ायदे या पेड़ों की उपयोगिता के बारे में पाँच वाक्य लिखो। (5)

प्र०6. आफंती या साँप के बारे में पाँच वाक्य लिखो।

(5)

प्र०7. व्याकरण पर आधारित प्रश्न

(15)

क. लिखी हुई चीजें क्या हैं ?

उदा० - बाघ , गाय , बकरी , हाथी - जानवर

★ कुर्ता, साड़ी, लहंगा, कमीज़ - _____

★ गेहूँ, बाजरा, चावल, मक्का - _____

ख. उदाहरण के अनुसार शब्द बनाओ ।

उदा० - रंग - रंगाई

बुन - _____ चढ़ - _____

ग. वचन बदलो ।

रोटी - _____ सब्जी - _____

घ. नीचे दिए गए शब्दों के अर्थ लिखो।

प्रशंसा - _____ मंसूबा - _____

ड. नीचे लिखे वाक्यों में सही निशान लगाओ ।

| ! ?

1. तुम्हें यह कहानी कैसी लगी

2. नानी चीख उठी साँप

च. उदाहरण के अनुसार जोड़े के शब्द बनाओ ।

दिन - दीन

बेल - बैल

छ. चवन्नी का मतलब चार आना , अब नीचे दिए गए शब्दों का मतलब बताओ ।

अठन्नी _____

ज. सही शब्द चुन कर मुहावरा पूरा करो ।

★ दीया तले _____

(अँधेरा / रोशनी)

★ हाथ कंगन को _____ क्या ? (पायल / आरसी)

शब्दावली

प्र०8.

(10)

क. कामों के लिए हम कहाँ जाते हैं ?

1. बाल कटवाने _____

2. जूते मरम्मत करवाने _____

ख. सही उत्तर चुनो ।

(रेंकना, दहाड़ना, चिंघाड़ना, मिमियाना)

★ हाथी की आवाज़ को _____ कहते हैं ।

★ बकरी की आवाज़ को _____ कहते हैं ।

ग. नीचे लिखे शब्दों में से घर से संबंधित शब्दों पर घेरा लगाओ ।

जोहड़ नदी सूरज रसोई

घ. नीचे के वाक्य में छुपी हरी - भरी सब्जी का नाम ढूँढ़ कर लिखो ।

गोपाल कबूतर उड़ा दो । _____

मामू लीला मौसी कहाँ है ? _____

ड. कीड़ों(जंतुओं) के नाम लिखो जो डंक मारते हैं ।

वर्तनी

प्र०9.

(10)

क. नीचे दिए गए वाक्य को सही करके लिखो।

सीता पढ़ रहा है ।

बंदर छत में बैठा है ।

ख. सही वर्तनी वाले शब्द पर गोला लगाओ ।

बारिस बारिष बारिश बारीश

आसरम आशर्म आश्रम आशरम

ख. इन वाक्यों को बदलकर लिखो।

1. हमको दो तोल छीमियाँ फ़कत चार आने की ।

2. उसी खोज में मैं भी निकली ।

घ. निम्नलिखित शब्दों के छूटे हुए अक्षर को लिख कर शब्दों को पूरा करो ।

नम _____ ते पा _____ तू

ड.. निम्नलिखित वाक्यों में कुछ शब्द फालतू हैं । उन्हें ढूँढकर अलग करो।

1. एक पीला पका पपीता काट लो । _____

2. बेकार की फ़ालतू बात मत करो। _____

प्र०10. सुलेख लिखो ।

(5)

बात बहुत पुरानी है । तब भी लोग कहानियाँ सुनते और सुनाते थे - राजा-रानी, परियों की कहानी, शेर और गीदड़ की कहानी । माँ-बाप , बच्चे , दादी-नानी को घेर कर बैठ जाते और बार-बार अपनी मनपसंद कहानी सुनते । कहानी सुनाने के कई अलग तरीके थे । कोई आवाज़ बदल-बदल कर सुनाता । कोई आंखें मटकाकर । कोई हाथ के इशारों से बात आगे बढ़ाता । आज भी की लोग पुरानी कहानियों को नाच-गाकर सुनाते हैं।

[illegible]

Total No. of printed pages: 07

Atomic Energy Central School No.2, Rawatbhata

Confidence Examination-2022-23

Class: Time:3Hours

Subject: Marks:80

To be filled by the student

Student's Name: _____

Name of the school: _____

Class/Sec: _____ Roll No. _____ Date of Examination: _____

To be filled by the teacher

Invigilator's Sign: _____

Examiner's Sign : _____

Marks Obtained: _____

(Section A)

1. Fill in the blanks. (10 x 1 = 10)

a) $12 \times 3 =$ _____

b) 24 Z, 25 Y, _____, 27W

c) _____ glasses of water is needed to fill 2 mugs, if one mug can hold 6 glasses

d) _____ children can wear 16 socks.

e) $64 \div 8 =$ _____

f) _____ $\div 6 = 7$

g) If 12 apples weigh 2 Kgs, then _____ apples weigh 1 Kg.

h) $8 \times 9 =$ _____

i) $245 + 23 =$ _____

J) $452 - 324 =$ _____

2. Answer the following

(5 x 2 = 10)

a) Each letter has a number. A is 1, B is 2, etc. If I wanted to write "PLAY GROUND", You will write it as

b) Minku puts her 18 laddoos equally into 3 boxes. How many laddoos will there be in each box?

c) One rail coach has 7 wheels. How many wheels in all in 6 coaches?

d) Add.

Rs 46.50 + Rs 12.25 = _____

e) Subtract

Rs.46.50 - Rs.14.25 = _____


(Section B)

3. Write true or false.

(6 x 1 = 6)

a) Five notes of Rs. 10 make 100 rupees. (_____)

b) If ☆ = 2 toffees then, ☆ ☆ ☆ = 10 toffees (_____)



d) Two dozen bananas are equal to 15 bananas. (_____)

e) 500gr + _____gr = 1Kg

f) Half Kg = _____gr

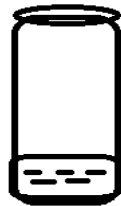
4. Choose the correct answer and fill in the blanks.

(5 x 2 = 10)

a) There are 28 petals in 7 flowers. So there are _____ petals in 1 flower.

b) If ARBECD = RED, then EBFLGUHE = _____

c) Radha poured a glass of water in a jug. It looked like this.



Radha should pour _____ more glasses of water to fill the jug completely.

d) Multiply: 14 x 7 = _____

e) Write the total amount


Rs. 100 + Rs 60 + Re. 1 = _____











5. Suman bought a compass box for Rs.68.50 and a drawing notebook for Rs.26.50. If she gave a Rs.100-rupee note to the shopkeeper how much money would he return to her? (4)

Ans:

(Section C)

6. The grades obtained by students of class III after SA-I are displayed. (1X6=6)

 = 5 students

Grade	No. of students
Excellent	 
Very good	   
Good	
CDB	  

a) _____ grades were obtained by the maximum number of students.

b) Number of children who got 'Good' grade is _____.

c) Number of children who got 'Very good' grade is _____

d) Number of children who got "CDB" grade is _____

e) _____ grade is obtained by the least number of children.

f) The total number of children in class III is(more/ less) than 100. _____

7. Answer the following.

(5X2=10)

a) Write all the odd numbers between 240 to 250.

Ans: _____

b) Complete the pattern.

1 ,5 ,9 ,13 ,____,_____ .

c) Name two containers from your surroundings that hold more than one litre of water.

Ans: 1. _____ 2. _____

d) Ram poured water 8 times with his water bottle to fill a pot. Shyam poured water 4 times with his water bottle to fill the same size pot.

(i) Whose water bottle holds more water? Ram's / Shyam's. _____

(ii) Ram's bottle can hold (twice/half) as much water as Shyam's bottle. _____

e) Pothole A gets filled with 4 mugs of pebbles. Pothole B gets filled with 8 mugs of pebbles. Pothole C gets filled with 12 mugs of pebbles.

(i) Which is the biggest pothole?

(ii) If Pothole A gets filled with 6 jugs of pebbles, then pothole B gets filled with _____ jugs of pebbles.

8. Multiply : 24 x 63 by box method.

(4)

X		

(Section D)

9 .Do as directed.

(1x6=6)

a) 12 big mangoes can balance a pumpkin. How many big mangoes can balance 2 such pumpkins?

Ans. _____

b) Which will require a big bag?

1 Kg. popcorn or 1 Kg. potato _____

c) Which will require a big bag?

1 Kg. cotton or 1 Kg. sugar _____

d) Addition

$$45+23= \underline{\hspace{2cm}}$$

e) $8+8+8+8+8+8= \underline{\hspace{1cm}} \times \underline{\hspace{1cm}} = \underline{\hspace{1cm}}$

f) Subtract $86-32 = \underline{\hspace{2cm}}$

10. Do as directed.

(2X5)

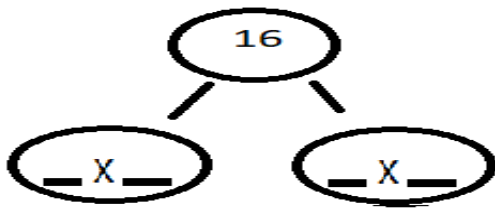
a) Mahesh works 4 hours a day in a factory. He works 6 days a week. How many hours does he work in a week?

b) Write the following names in alphabetical order:

Ashok ,Manoj, Komal , Rohit

1. _____ 2 , _____ 3, _____ 4, _____

c) Complete the multiplication tree.



d) In a theatre there are 25 rows. Each row has 12 chairs. How many chairs are there in the theatre?

e) Observe the following railway timetable of Hyderabad Express and answer the following.

Distance from Mumbai (in km)	Station	Fare in Rs.
36	Kalyan	28
83	Karjat	46
194	Pune	90

(i) Find the cost of 3 tickets from Mumbai to Punet?

Ans: _____

(ii) Find the distance between Kalyan to Pune? Ans:

Ans:- _____

11. A squirrel jumps 2 steps at a time. A rabbit jumps 3 steps at a time. A kangaroo jumps 20 steps at a time. A horse jumps 15 steps at a time.

(i) How many jumps of squirrel is equal to one jumps of Kangaroo. (2)

(ii) Who all will meet at 30? (2)

Atomic Energy Central School No.2, Rawatbhata

Confidence Examination 2022-23

Class: III

Time: 3 Hours

Subject: EVS

Marks: 80

To be filled by the student

Student's Name: _____

Name of the school: _____

Class/Sec: _____ Roll No. _____ Date of Examination: _____

To be filled by the teacher

Invigilator's Sign: _____

Examiner's Sign: _____

Marks obtained: _____

General Instructions

This paper consists of

A: Observation and Reporting ----- 30 marks

B: Identification and classification ----- 25 marks

C: Discovery of Facts ----- 25 marks

Section A: Observation and reporting(30 marks)

1.Fill in the blanks with the help of words given in the brackets.(1x10=10)

- a) Blind people read books in Braille Script by _____.
(smelling/touching)
- b) Lemons are _____ of a plant.
(fruit/root)
- c) The crow got a trowel from a _____. (black smith
/gold smith)
- d) _____ is India's national game.
(Football/ Hockey)
- e) Reena's letter started in _____.
(Delhi/Agartala)
- f) We should feed animals when they are _____.
(hungry/sleeping)
- g) Tara lives with _____ and nana.
(mama/Amma)
- h) _____ enjoys watching television with others.
(Abbu/Habib)
- i) Symbols are used on _____.
(maps/ boards)
- j) _____ are woven to make a cloth.
(Threads/paper)

2.Give two examples of _ (1x5=5)

- a) Wild animal _____
- b) Indoor games _____

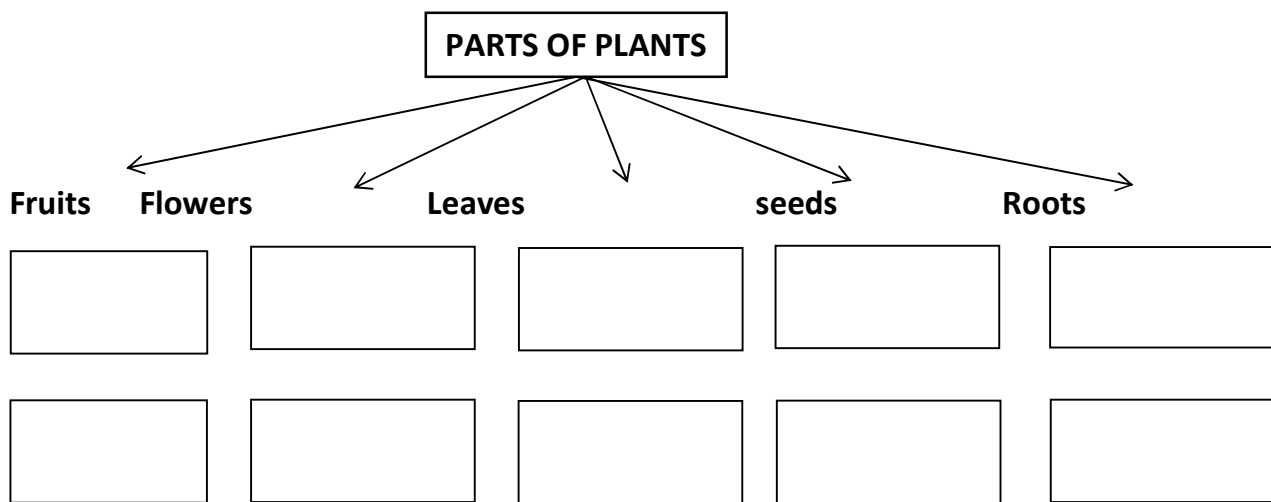
c) Leaves we eat _____

d) Medicinal plant _____

e) Clothes we use _____

3. Complete the boxes using the help box given. (1/2x10=5)

Kachnar flower, ajwain, radish, spinach, mango,
curry leaves, mustard seeds, amla, carrot, cauliflower



4. Answer the following question .

(2x5=10)

a) What are the things that happen in a family?

b) How we can use a Dupatta in many ways?

c) Write any two ways of reusing water.

d) How is a houseboat different from other houses?

e) What are the differences between a letter and a phone call?

Section B: Identification and Classification (25 marks)

5. Identify the pictures and write their names.

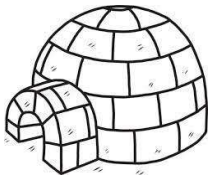
(1x5=5)











6. Match.

(1X5=5)

Animals

Why do we keep them

Dog

We love it

Cow

We get eggs

Rabbit

It gives security

Honey bee

We get milk

Hen

It gives honey

7. Give reason.

(2X3=6)

a) Pots are baked in a kiln.

b) Symbols are used in maps.

c) Houses are made on bamboo pillars in Assam.

8. Arrange and rewrite the steps in correct order.

(1x4=4)

Shape the clay, collect the clay, bake in fire, knead the clay

Step 1. _____

Step 2. _____

Step 3. _____

Step 4. _____

9. Complete the journey of a letter.

(1x5=5)

1. _____

2. Writing address and putting stamp on it

3. _____

4. _____

5. _____

6. Sorting of a letter

7. _____

Section C: Discovery of facts(25 marks)

10. Circle the games that are played using a ball.

(1/2x4=2)

Cricket Stappoo Tennis Marbles
Seven tiles Football Hockey chess

11. State true or false.

(1/2x6=3)

- a) One should share everything with their family._____
- b) Bhupen came from Molan village._____
- c) Water is used for drinking only._____
- d) Hopscotch is also called gilli danda._____
- e) We can send messages faster through telephones than letters._____
- f) Bhanate wanted to eat Phudgudi's egg._____

12.Choose the correct option.

(1x5=5)

1.Seema likes to share all her news to _____.

- a) Ravi bhaiya b)nani c)both d) none of these

2.House boats can be seen in_____.

- a) Kashmir b) Manali c)both d) none of these

3.Totaram lives in _____ for study.

- a) Rawatbhata b)Mumbai c)both d) none of these

4. Clothes are used to _____ our body.

- a) clean b) harm c) cover d) none of these

5. The _____ is used to collect the rain water in Madho's village.

- a) tap b) tanka c) both d) none of these

12. Look at the map and answer the following question by writing LEFT/ RIGHT.



1. The school is _____ to the shop.
2. The well is _____ to the bus stop.
3. The hospital is _____ to the post office.
4. The garden is _____ to the well.

13. Answer the following question

(2x3=6)



a) Write some symbols that you have learnt in mathematics.

b) Name the things that a potter needs to make a pot.

c) Who takes care of Tara? How?

14. Draw any two food items that we can eat uncooked.

(1x2=2)



15. Draw any three garments we wear at home.

(1X3=3)

