

Atomic Energy Central School NO- 2, Rawatbhata

Confidence Exam 2022-23

Class- IV

Time- 3 hours

Subject- English

Marks- 80

To be filled by the student

Student's Name :

Name of the School:

Class/ Sec : Roll No:

Date of Examination:

To be filled by the teacher

Invigilator's Sign:

Examiner's Sign:

Marks obtained:

Checker's Sign:

General Instructions:

- 1- Marks of questions are indicated against each.
- 2- Read each question carefully and answer neatly.
- 3- Ensure that questions for each section are answered.
- 4- Hand over the answer sheet to the invigilator after the completion of the exam.
- 5- The student should ensure that the Answer sheet is not damaged or folded.

READING (20 MARKS)

Read the passage carefully and answer the following questions. (5 marks)

A-Once upon a time, an old carpenter bought a very queer piece of wood. As he used his plane on it, he heard a little laughing voice say, "Stop! You are tickling me." The old man was puzzled by the voice. He said, "This is a strange piece of wood. What shall I do with it? I think I will make a puppet." He set to work, and as the puppet boy took shape, the old man said, "He must have a name. I will call him Pinocchio."

1. What did the carpenter buy? (1)

Ans-

.....

2. Why was the old man puzzled? (1)

Ans-

.....

3. What did he make with that wood? (1)

Ans-

.....

4. Fill in the blanks by choosing the correct option from the brackets. (2)

As he used his (plain/plane) on it, he heard a little

..... (crying/laughing) voice.

B- Read the poem carefully and answer the following questions. (5 marks)

Early in the morning,
Or the evening hour
Are the times to water
Every kind of flower.
Watering at noonday,
When the sun is high
Doesn't help the flowers
Only makes them die.

1. What is the best time to water the plants? (1)

Ans-

.....

2. Fill in the blanks. (3)

a) If we water at all the plants will die.

b) This poem is written by

c) The opposite of high is

3. Give the past tense of: (1)

a) does not-

b) make-

C- Read the passage given below and answer the following questions. (10M)

Peter went to a toy shop with his aunt. On the shelf of the shop, he saw a black and white panda. He asked his aunt to buy him the panda.

The panda had a black patch on one of his eyes. It also had a round nose. Peter loved his panda very much. He named him Piper. Peter was happy to have got Piper home. He took good care of Piper. Peter would carry Piper every place he would go. He would take him to school, art class and to the market.

Piper became Peter's best friend. At school Peter's friends; John, Duke, Roma and Donna also became friends with Piper.

- i) Choose the correct word and fill in the blanks. (4)

1- Peter went to a shop.

a) book b) clothes c) toy

2-He asked his aunt to buy a

a) Fish b) panda c) rabbit

3- Peter's aunt got to buy that panda.

a) agree b) disagree c) angry

4 -The antonym of loved is

a) liked b) hated c) missed

ii) What name did Peter give to his panda? (1)

Ans-

.....

iii) Name two places from the passage where Peter would take his Panda. (1)

a) b)

iv) Write two features of Piper. (2)

a)

b)

v) Who else became friends of Piper at school? Name them. (2)

Ans-

TEXTUAL QUESTIONS (10 Marks)

A) Answer the following questions in one or two words. (2x2=4)

a. Where did the children go to buy books?

Ans-

.....

b. What did the carpenter name the wooden puppet?

Ans-

.....

B) Who said to whom? (1x2=2)

a. In times of difficulty, a person speaks only his mother tongue.

Ans-

b. I am too tired to climb.

Ans-

C) Make sentences. (1x2=2)

a) delicious-
.....

b) plucked-
.....

D) Complete the sentences as per the text. (1x2=2)

a) Cut down my trunk and

b) I am glad to be

CREATIVE WRITING (10 Marks)

A) Describe Hiawatha, his home and friends in five sentences. Use the words given below as clues. (5)

Nokomis, wigwam, birds, secrets, love, animals and languages

.....

.....

.....

.....

.....

.....

.....

.....

.....

.....

.....

.....

.....

.....

.....

.....

B) Write five sentences about the given picture. You may use the
clue words given below. (5)

Birthday, party, ice -creams, enjoy, decoration, children, friends .



[This Photo](#) by Unknown Author is licensed under [CC BY-SA-NC](#)

.....

.....

.....

.....

.....

.....

.....

.....

.....

.....

.....

.....

GRAMMAR (15 Marks)

Do as directed.

1. Complete the following sentences, choosing the right words from the brackets. (1)
 - a) Do you a secret? (no/ know)
 - b) The squirrel has a long (tale/ tail)
2. Write the full form of: - (2)
didn't- won't-
3. Pick out the silent letters from the words given. (2)
Walk- doubt-
4. Fill in the blank with a suitable describing word. (1)
He saw a girl in the class.
5. Use the correct form of the verb. (1)
I four oranges yesterday. (eat)
6. Write plural forms of the given words. (2)
class- knife-
7. Write rhyming words for: - (2)
high- look-
8. Choose the most suitable word from the words given in the bracket and fill in the blanks. (2)
or/ and/ but
a) You want a story book a book of poems?

b) I want both, a red a black pen.

9. Complete the sentence by modifying the word given in the brackets (1)

The baby was sleeping (silent)

10. Punctuate the following sentence. (1)

i will not come to school on Saturday

Ans-

.....

VOCABULARY (10 Marks)

1) Give one word for the following: (4)

a) a room with many books-

b) movable model of a person or an animal moved by strings-
.....

c) home of the beavers-

d) Person who makes and repairs wooden objects-
.....

2) Give synonyms of the words given below: (2)

a. respect-

b. secure-

c. merry-

d. surprised-

3) Arrange the words in proper order and make meaningful sentence. (2)

a) put/ arms/ he/ us/ around/his.

Ans-

b) apples/weak/my/teeth/too/are/for.

Ans-

c) Add -er or r to make new words. (2)

a) fight- b) ride-

SPELLINGS (10 Marks)

1. Place letters in their right order to form the words. (3)
 - a. rroubw-
 - b. hsiwpre-
 - c. oughtrh-

2. Fill in the blanks with letters to get meaningful words. (2)
 - a. s_rp_is_d

 - b. s_uirr_ _ s

3. Circle the correctly spelt words. (3)
 - a. reindeer reindear reindeer

 - b. tongue tonge toneug

 - c. narrater narater narrator

4. Correct these misspelt words and rewrite. (2)
 - a. happyly -

 - b. tomorow-

HANDWRITING (5 Marks)

Re- write the given passage one time neatly between the lines.

Sir Edmund Hillary was the first person to climb Mt. Everest, the world's tallest peak on May 29th, 1953 along with Tenzing Norgay who was a Sherpa. He was 6 feet 5 inches tall. When they reached the peak, Sir Edmund Hillary took a picture of Tenzing .

This image shows a single sheet of white paper with horizontal ruling lines. The lines are evenly spaced and extend across the width of the page. There are no vertical margin lines or other markings present. The paper appears to be a standard notebook page.

```

*****
*****

```


कक्षा हिंदी- तीसरी विषय - समय -3 घंटे पूर्णांक -80

नाम दिनांक ----- अनुक्रमांक ----- वर्ग -----

विद्यालय का नाम -----

ह० निरीक्षक ----- जांचकर्ता०ह ----- परीक्षक ०ह -----

प्राप्तांक

पठित गद्यांश

प्रश्न 1 नीचे लिखे अनुच्छेद को ध्यानपूर्वक पढ़कर दिए गए प्रश्नों के उत्तर दीजिए- 1x10=10

एक दिन भीखूभाई का मन नारियल खाने का हुआ ! ताजा मुलायम, कसा हुआ, शक्कर के साथ ! म्मम्म ! “उसके बारे में सोचते ही भीखूभाई ने अपने होठों को चटकारा ,वाह क्या मीठा मीठा सा स्वाद होगा !”लेकिन एक छोटी सी समस्या थी ! घर में तो एक भी नारियल नहीं था ! “ओहो ! अब मुझे बाजार जाना पड़ेगा,” उन्होंने अपनी पत्नी लाभूबेन से कहा ! लाभूबेन अपने कंधे उचकाकर बोली,” खाना है तो जाना है!“एक दूसरी समस्या और थी !भीखूभाई ने कहा,”पैसे खर्च करने पड़ेंगे”!

1.भीखूभाई का मन क्या खाने का हुआ ?

उत्तर.....

2.वह उस ताजा मुलायम चीज़ को किस के साथ खाना चाहते थे ?

उत्तर.....

3. उसके बारे में सोचते ही भीखूभाई ने क्या किया ?

उत्तर.....

4. पहली समस्या क्या थी ?

उत्तर.....

5. भीखूभाई की पत्नी का क्या नाम था ?

उत्तर.....

6. भीखूभाई की पत्नी ने उनके प्रश्न का क्या उत्तर दिया ?

उत्तर.....

7. दूसरी समस्या क्या थी ?

उत्तर.....

8. विलोम शब्द गद्यांश में से लिखों-

कठोर -.....

9. यह अनुच्छेद किस पाठ से लिया गया है ! पाठ का नाम लिखिए !

उत्तर.....

10. दिए गए गद्यांश में से कोई दो संज्ञा शब्द छाँट कर लिखिए !

उत्तर

अपठित गद्यांश

प्र.2 नीचे लिखे अनुच्छेद को ध्यानपूर्वक पढ़कर दिए गए प्रश्नों के उत्तर दीजिए- 1x10=10

एक राजकुमारी थी। उसका नाम सोनचिरैया था। उसका एक भाई था। दोनों रोज़ाना झील पर खेलने जाते । वहाँ बहुत से मोर रहते थे । सोनचिरैया को मोर बहुत प्यारे लगते थे । वह मोरो को रोज नहलाती , दाना खिलाती और मौज़ कराती । मोर उसके लिए ठुमक-ठुमक नाचते ,टीटू-टीटू गाते और पंख फैला कर अपनी सुंदरता का प्रदर्शन करते !झील तले एक महल था । महल में एक राक्षस रहता था । वह सोनचिरैया को चाहता था । उससे ब्याह करने के सपने देखता था । एक रोज उसने सोनचिरैया से बहुत मिन्नतें कीं, लेकिन वह बोली , ‘भला मैं राक्षस से ब्याह कैसे कर सकती हूँ ?’

1. राजकुमारी का नाम क्या था ?

उत्तर.....

2. भाई-बहन रोज़ाना कहाँ खेलने जाते थे ?

उत्तर.....

3. राजकुमारी के कितने भाई थे ?

उत्तर.....

4. राजकुमारी को कौन प्यारा लगता था ?

उत्तर.....

5. मोर राजकुमारी के लिए क्या करते थे ?

उत्तर.....

6. महल कहाँ था

उत्तर.....

7. महल में कौन रहता था ?

उत्तर.....

8. राक्षस किससे ब्याह करना चाहता था ?

उत्तर.....

9. लिंग बदलो -

राजकुमार - राक्षस.....

10. 'भला मैं राक्षस से ब्याह कैसे कर सकती हूँ ?' यह कथन किसका है ?

उत्तर.....

प्रश्न -3 नीचे लिखे प्रश्नों के उत्तर लिखिए ।

1x5=5

(क) तुम कौन-कौन से खेल खेलते हो? कोई दो खेलों के नाम लिखो।

उत्तर

(ख) पढ़क्कू का नाम पढ़क्कू क्यों पड़ा ?

उत्तर

(ग) हुदहुद को किन दो नामों से जाना जाता है?

उत्तर

(घ) सुनीता किस की सहायता से चलती थी ?

उत्तर

(ङ) गाँधी जी पैदल यात्रा पैर कहाँ गए थे ?

उत्तर

(च) धनी ने गाँधी जी से सुबह के समय बात करना क्यों ठीक समझा ? $2 \times 5 = 10$

.....
.....

(छ) बच्चों ने खाने पीने की चीज़े छीके में क्यों रख दी?

.....
.....

(ज) सुनीता को सब लोग गौर से क्यों देख रहे थे?

.....
.....

(झ) हुदहुद को कहीं 'हजमिन' चिड़िया और कहीं 'पदुबया' के नाम से पुकारते हैं क्यों ?

.....
.....

(ञ) हर बार भीखूभाई कम देना चाहते थे ! क्यों?

.....
.....

प्रश्न 4 व्याकरण पर आधारित प्रश्न

$1 \times 15 = 15$

1 नीचे दिए गए शब्द के समान अर्थ वाले शब्द लिखिए !

मंतिख मुखिया

2 बहुवचन शब्द लिखिए !

पुस्तक बिल्ली

3. विलोम शब्द लिखिए !

आशा धनी

4 लिंग बदलकर लिखिए

मालिन - पति

5 विशेषता बताने वाला शब्द सोचकर लिखिए

..... झंडा बगीचा

6 नीचे लिखे मुहावरे का वाक्य बनाओ ।

पसीना बहाना

.....

7 ये लोग क्या क्या गढ़ते हैं ? लिखिये !

(क) लेखक -.....

(ख) सुनार

8 नीचे दी गई तालिका को आगे बढ़ाओ।

हुदहुद	पक्षी
कोटा
हाथी

9 नीचे लिखे वाक्य को अपने शब्दों में लिखो ।

जहाँ न कोई बात वहाँ भी नई बात गढ़ते थे ।

.....

10 कारक चिह्नों का प्रयोग करो-

छत [के / में / पर] आदमी बैठे हुए थे।

11 किन्हीं दो चीज़ों के नाम लिखो जिन्हें घोलते हैं ?

.....

12 नीचे लिखे वाक्य को सही क्रम में लिखो -

लिए अनमोल है जीवन के पानी ।

उत्तर.....

13 वह व्यक्ति जो घोड़े की सवारी करता है-

उत्तर

14 तुम्हारे घर में कौन - कौन से जीव घुस जाते हैं ?

उत्तर

15 नीचे दिए गए वाक्य में नाम वाले शब्द कौन-सा है लिखो ।

सुनीता बाज़ार जाती है ।

उत्तर

प्रश्न5 क्या तुम अपने आसपास की ऐसी जगह के बारे में सोच सकते हो , जहाँ बहुत शोर होता है | उस जगह के बारे में लिखो | (5)

.....

.....

.....

.....

.....

.....

प्रश्न6 'हुदहुद' पक्षी पर एक अनुच्छेद लिखो | (5)

.....

.....

.....

.....

.....

.....

.....

.....

प्रश्न7 सही शब्द पर गोला लगाओ | 1x2 =2

(क) कार्यालय करयालय (ख) नारियल नारीयल

(ख) अशुद्ध वर्तनी वाले शब्द को सही करके लिखो-

प्रर्थना परकाश

प्रश्न8 निम्नलिखित पंक्तियों को पूरा करो ?

1x4 =4

किसने हमारे कुतरे ?

किसने..... को बिखराया ?

कौन चट कर गया कर

घर - भर में बिखराया?

प्रश्न9 नीचे दिए गए वाक्यों को शुद्ध करके लिखो ।

1x2 = 2

मेरे को विद्यालय जाना है।

पेड़ों पर चिड़िया बैठी है ।.....

प्रश्न10 नीचे दिए गए शब्द का अलग - अलग अर्थ में वाक्य में प्रयोग करो ।

फल.....

फल

प्रश्न11 दिए गए चित्र के बारे में पाँच वाक्य लिखो ।

(5)



.....

.....

.....

Total No. of printed pages:

ATOMIC ENERGY CENTRAL SCHOOL NO.2 RAWATBHATA

Confidence Examination -2022-23

Class – IV

Time: 3 Hours

Subject: Mathematics

Marks: 80

To be filled by the student

Student's Name: _____

Name of the School: _____

Class/Sec. : _____ Roll no. : _____ Date of Examination : _____

To be filled by the Teacher

Invigilator's sign: _____

Examiner's sign: _____

Marks Obtained : _____

General Instructions:

This paper consists of the following Sections:

Section-A (20 Marks)

Section-B (20 Marks)

Section-C (20 Marks)

Section-D (20 Marks)

All questions are compulsory.

Section A - Knowledge (20 Marks)

Q1. Tick the correct answer and fill in the blanks.

(6X1=6)

1) The length of a rectangle can be measured in _____.

- a) kilogram b) litre c) metre d) gram

2) Ramu bought 5 _____ of sugar.

- a) litre b) km c) g d) kg

3) Choose the heaviest one.

- a) bicycle b) tractor c) car d) bike

4) Shelly can arrange 50 jars as-

- a) 5 X 10 b) 2 X 25 c) 1 X 50 d) all of these

5) Decode the given message.

6, 12, 15, 23

- a) FLOW b) GLOW c) CROW d) SLOW

6) Half of Half = _____

- a) half b) quarter c) whole d) none of these

Q2. Do as directed.

(5X2=10)

1) Multiply :-

$$56 \times 21$$

$$78 \times 32$$

2) Divide :-

$$96 \div 8$$

$$110 \div 10$$

3) Colour half the number of shapes.

4) Convert into following -

a) $5 \text{ kg} = \underline{\hspace{2cm}} \text{ g}$

b) $9000 \text{ g} = \underline{\hspace{2cm}} \text{ kg}$

Q3. Solve

(2X2=4)

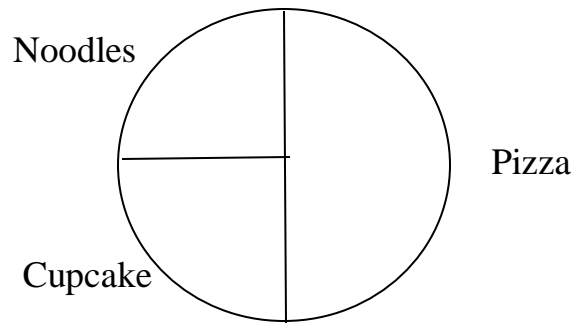
I. Draw the circle of the following radius.

3.5 cm

5 cm

II. Make any two patterns without numbers.

Q. The following chapati chart shows the favourite food items of liked by 28 children in a school. Look at the chapati chart and answer the following questions:-



i. Most children like to eat

_____.

ii. Least food item liked by children

_____.

iii. How many children like Cupcake?

iv. How many children like pizza?

Atomic Energy Central No.2 ,Rawatbhata

Confidence Examination 2022-23

Class:IV

Time :3 Hours

Subject :EVS

Marks :80

To be filled by the student

Student's Name :

Name of the school:

Class/Sec : _____ Roll No. _____ Date of Examination:_____

To be filled by the teacher

Invigilator's Signature : _____

Examiner's Signature : _____

Marks Obtained : _____

General Instructions.

This paper consist of :

Section A: Observation and Reporting -----30 Marks






Section B: Identification and classification ----25 Marks

Section C : Discovery of Facts ----- 25 Marks

Observation and Reporting (30 marks)

1.Observe the picture and fill in the blanks .

(1X5=5)

	<p>This is a picture of a _____.</p> <p>It is used to _____</p> <p>_____.</p>
	<p>This is a picture of a _____</p> <p>It is used to _____</p> <p>_____.</p>
	<p>This is a _____ bird .</p> <p>It makes its nest _____</p> <p>_____.</p>
	<p>This is a picture of _____</p> <p>It is used to _____</p> <p>_____.</p>
	<p>This is a _____</p> <p>It is made during _____.</p>

2.Name the following.

(1x4=4)

a)The traditional dress of woman in Assam.

Ans: _____

b)A bird that makes its nest in the hole of a tree trunk. It can be heard in summer with its' tuktuktuk' sound.

Ans : _____

c)A children's Panchayat in Holgundi area of Karnataka .

Ans: _____

d)The highest court of India.

Ans:_____

3.Give examples .

(1x6=6)

1.Any two spices used to make garam masala.

2.Any two vegetables that are rough to touch .

3.Any two type of roots.

4.Any two diseases caused by drinking contaminated water.


5.Any two ways to clean water .

6. Any two harvest festivals

4. Look at the picture and answer the questions.

(2)

a) Mark the steps of growing crop in a correct order.



b) Mark the given sentences in correct order of the way to Chuskit's school. (2)

1. Then, walk along a lake . ☐
2. After a small climb you reach school. ☐
3. First you have to take the big road. ☐
4. Cross the river near the poplar trees. ☐

5.a) Recently you must have seen a Republic Day Parade . What all things you get to know about ' Parade . Write few sentences about it.

(atleast 4 sentences)

(2)

b) What all things Abdul and his friends did to help Chuskit go to the school?

(2)

Ans : _____

6.Look at the picture and answer the questions.(2)



1.How deep must the roots of this plant be going?

Ans _____

2.How do the roots of the plant will get water?

Ans _____

7.Write the process of making Pochampalli saree.

(1x5=5)

Identification and classification (25 marks)

8.Who am I?(1x2=2)

a) Grind me and powder me to make your food look yellow

I am mixed in oil by granny and applied on the wounds –

I heal all wounds big and small,

That is why I am loved by all.

Ans : I am a _____

b) I am a powdered mixture of all the spices .

Ans. I am _____

9.From the list given below ,put the names of the given fruits or vegetables in the correct column.

.

Potato tomato jackfruit brinjal (1x4=4)

Smooth to touch

Rough to touch

10.Circle the one which does not belong to the group .(1x4=4)

- | | | | |
|------------------|-------------|----------|-----------|
| a) Pongal | Lohri | Diwali | Bihu |
| b) Carrot | grass | radish | beet root |
| c) sugar | wheat flour | turmeric | ghee |
| d) amchur powder | lemon | tamarind | chilli |

**11a)Write all the responsibilities or duties of a medical officer on a naval ship .
(2)**

Ans : _____

11.b) What type of teeth does a cow have? (2)

12. Answer the following .

(4)

a) Write any two functions of roots of a plant.

Ans: _____

_____.

b) Write any four functions of a bird feet.

Ans: _____

_____.

13. Write the difference between Normal school and boarding school.

(2)

Boarding school	Normal school

14. According to the given criteria write the difference between Abu Dhabi and Kerala. (5)

	Abu Dhabi	Kerala
Climate		
Currency		
Language		
Area/landform		
Trees		

Discovery of Facts (25 marks)

15. Name the following .(1x3=3)

a) A glass that reflects seven colours when white light falls on it.

b) A tool used to plough the field and sprinkle the seeds.

c) A tree that has hanging roots.

16. Look at the currency note and answer the questions.(1x3=3)



1. To which country does this note belong ?

2. Write the name of the bank given on the note .

3. Can you find any number on the note other than the value ?

((Write the number)

17. Match the Column A with the beak according to the food a bird eats in Column B (1x4=4)

Column A



Column B

1. To tear and eat meat

2. To eat any kind of food.

3. To make hole in the tree trunk .

4. To suck nectar from the flower.

18. Give reasons.

(2x3=6)


a) It was difficult to take out a grass plant from the ground.

b) Meme-le had tears in his eyes.

c) Spices are added to food.


19. Drawing and labelling .(2x2=4)

a) Draw a picture of a seedling as it looks on the eighth day after sprouting and label the picture.



b) Draw a picture of any bird and label its body parts .

(beak ,tail ,wings ,claws)



20. Write a short note about 'Wahida Prism'.

(2)

21. On the outline map of India Mark the following states.(1x3=3)

1. Pochampalli saree is made by the weavers of this state . _____
2. Chuskit belongs to this state. _____
3. This state is the spice garden of India. _____



