

Atomic Energy Central School – 2, Rawatbhata

Confidence Test-2022-23

Class: V

Time : 3 hours

Subject: English

Marks : 80

To be filled by the Student

Student's Name: _____

Name of the School: _____

Class /Sec.: _____ Roll No.: _____ Date of Examination: _____

To be filled by the Teacher

Invigilator's Sign: _____

Examiner's Sign : _____

Checker's Sign: _____

Marks Obtained: _____

General Instructions:

1. Marks are indicated against each question.
2. Read each question carefully and write the answer neatly.
3. Ensure that questions from each section are answered.
4. On completion of the exam, the student must hand over the answer sheet to the invigilator.
5. The student should ensure that the answer sheet is not damaged or folded.

Section A - Reading (20 Marks)

A1. Read the passage carefully and answer the questions given below.

When a person tells the story of his life in his own words it is called an autobiography.

Gulliver, a sailor, was once caught in the land of Giants. This is how he describes his experience.

On the 16th of June 1730 we discovered land. Our captain sent a dozen men with vessels for water, if any could be found. When we came to land we saw no river or spring nor any inhabitants. I went on to explore. The country was barren and rocky. I turned back to join the crew, only to see them getting into the boat and rowing for life to get to the ship.

Before I could reach them, I observed a huge creature walking after them in the sea as fast as he could. The water of the ocean reached only till his knees! However, the monster was unable to overtake the speeding boat. I turned back quickly and climbed up a steep hill with fields of barley on either side and the corn rising up to forty feet.

A1.1 Answer the following questions.

3M

- i. When did Gulliver and his team discover land?

- ii. What is an autobiography?

- iii. Where was Gulliver caught?

A1.2 Write the correct answer.

2M

- i. Write the past form of **catch** from the passage. _____
- ii. Write the similar word of **a creature that is large, ugly and frightening**.

A.2. Read the following passage and answer the following questions given below.

Long, long ago, in the land of Kangleipak in Manipur, there lived a Ningthou and a Leima. They were loved dearly by the people. The Ningthou and Leima, on their part, never stopped thinking about their meeyam, their people. “Our meeyam should be happy,” they said.

The people were not the only ones who loved their Ningthou and Leima. The birds and animals too loved them. The Ningthou and Leima always said, “Everybody in Kangleipak should live in peace. Not only the people, but the birds, animals and trees.”

Their beloved king and queen had three sons: Sanajaoba, Sanayaima and Sanatomba. Twelve years later, a daughter was born. She was named Sanatombi. She was a lovely child, soft and beautiful inside. She was loved by one and all.

A2.1 Choose the correct answer.

3M

- i. Ningthou and Leima ruled the kingdom of _____ in Manipur.
 - a) Kangleipak
 - b) Khongnang
 - c) Kharagpur
 - d) Khaunpur.
- ii. The king and queen always thought about their _____.
 - a) children
 - b) people
 - c) themselves
 - d) rivers
- iii. The king and queen had _____ sons.
 - a) four
 - b) three
 - c) no
 - d) five

A2.2 Write the correct answer.

2M

- i. Write a word from the passage that ends with –‘ly’. _____
- ii. Write the opposite of **conflict** from the passage. _____

A3. Read the following passage and answer the following questions given below.

What can be said about a girl from a remote village in Manipur? But Mangte Chungneijang Mary Kom of Kanganthei village is different. She is known as the 'queen of the ring' as she won the world women's boxing championship in the 46 kilogram category not once, but thrice.

Life was never easy for Mary Kom. Her father had to support his three daughters and son with the little money he got from farming. She was weak at studies but she was good at sports. She played football and participated in athletics. Inspiration for boxing came to her in the form of Dingko Singh, the great boxer from Manipur.

She received three world titles between 2004 and 2006. She was awarded the prestigious Arjuna award for her contribution to women's boxing in India.

Mary Kom's dream is to win a world title in the Olympics.

A3.1 Choose the correct answer.

4M

- i. Mary Kom belongs to which state?
a) Tripura b) Manipur c) Assam d) Sikkim
- ii. She won the World Women boxing championship in which of the following category?
a) 46 kg b) 56 kg
c) 48 kg d) 50 kg
- iii. Which of the following is incorrect statement about Mary Kom?
a) She is from Manipur. b) She is known as the 'King of the ring'
c) She was weak at studies. d) She was good at sports.
- iv. What is her dream?
a) to win a world title in the Olympics.
b) to win a medal in commonwealth games.
c) to be first in boxing championship
d) to win Arjuna award

A3.2 Answer the following questions.

2M

- i. Who was Mary Kom's inspiration?

- ii. Why was she awarded the Arjuna award?

A3.3 Complete the given sentence.

1M

Mary Kom is known as the _____ of the ring because she is famous
_____ champion.

A3.4 Write True or False.

1M

- Life was easy for Mary Kom. _____

A3.5 Write the correct answer.

2M

- Write the past form of **participate**. _____
- Find one word for the given phrase from the passage.
 - Of great value _____

Section B: Textual questions (10marks)

B.1 Answer the following questions in one or two words. 2×1=2M

- Where did the polar bear live with her family?

- Who is the poet of 'Class Discussion'?

B.2 Answer the following questions.

4×2=8M

- Why did all the children hate Hari?

- Why did the Barber want a lot of food?

- How did the king want to select their future king?

- What did Malu learn to do from her parents?

Section C: Creative Writing (10 marks)

C.1.1 Write a detailed character sketch of Sanatombi with the help of the clues.

5M

(daughter of Ningthou and Leima , five years old, lovely child , soft and beautiful from inside , loved by all , kind hearted , felt the pain of others , made Tunggi Leima , future queen of Kangleipak)

This image shows a blank sheet of white paper with horizontal ruling lines. The lines are evenly spaced and run across the width of the page. There are no margins, text, or other markings on the paper.

C.1.2 Look at the picture and write a paragraph on it in about 75—100 words. You may also use the help box. **5M**



Section D: Grammar (15marks)

D.1Do as directed.

D.1.1 Punctuate the given sentence.

2M

- i. wont you go to school on monday

ii. oh no the bus has gone

D.1.2 Make a sentence with the given word.

2M

i. screamed

ii. barren

D.1.3 Write the full form of

1M

weren't _____ shan't _____

D.1.4 Rearrange the jumble words to make a meaningful sentence.

1M

loved / people / were / dearly / they / the / by

D.1.5 Fill in the blanks with the most appropriate form of words given in the brackets.

2M

- i. Sumit _____ his old classmate in the market yesterday. (meets/ met/ meet)
- ii. Long, long ago, there _____ a goblin named Cruel. (lived/ lives/ live)

D.1.6 Change the word in the brackets suitably and fill in the blanks.

2M

- i. It began to rain _____. (heavy)
- ii. She can do the sum _____. (easy)

D.1.7 Write a suitable describing word in each of the blanks.

2M

- i. Skipping is easy. Jumping is easier than skipping. Walking is the _____ of all.
- ii. The deer is strong. The wolf is stronger than the deer. The tiger is the _____ of them all.

D.1.8 Choose the correct word from the bracket and fill in the blanks.

1M

- i. Please wait with me _____ the bus arrives. (till/ unless)

- ii. Do you like football _____ cricket. (and/ or)

D.1.9 Fill in the blanks choosing suitable group words from the given box. 2M

| | | | |
|-------|---------|------|-------|
| flock | cluster | band | clump |
|-------|---------|------|-------|

- i. The tree was the home of a _____ of birds.
ii. The girl looked up at the _____ of stars.

Section E: Vocabulary (10 marks)

E.1 Write the meanings of the following words. 2M

- i. examine - _____
ii. hoarse - _____

E.2 Write another word for the following. 2M

- i. defect – _____ (fault, alter, correct)
ii. elevator – _____ (underground passage, below, lift)

E.3 Give one word for the following phrases. 2M

- i. wild animal's lying-place - _____
ii. underground passage for people to cross _____

E.4 Write the similar words of the given words. 2M

- i. exhausted - _____
ii. contest - _____

E.5 Write rhyming words for the following. 2M

- i. share, care _____
ii. ground, round, _____

Section F: Spelling (10marks)

F.1 Circle the correct spellings. 3M

- i. a) announecment b) announcement c) anouncement
ii. a) excitement b) exicitement c) excetement

- iii. a) atsonishment b) astnosihment c) astonishment

F.2 Rearrange the jumbled letters to make meaningful words. 3M

- i. abrn (land with no vegetation)- _____
- ii. lepausre (feeling of enjoyment)- _____
- iii. lberst (crab's cousin)- _____

F.3 Correct the spellings given below and rewrite them. 2M

- i. handkrchef - _____
- ii. exclamed - _____

F.4. Arrange the letters in the right order to make meaningful words. 2M

- i. i s u c s n d o i s - _____
- ii. t i a p n e c e - _____

Section G: Handwriting (5marks)

Read the given paragraph carefully and write it in neat handwriting. 5M

Once, there lived a greedy and cunning wolf in a dense forest. One day, while he was having his dinner, a bone got stuck into his throat. He tried hard to take it out, but couldn't succeed in his effort. The wolf began whining with pain. The pain was unbearable. The wolf got worried and began thinking, "The pain will subside in due course. But, what will happen if the bone doesn't come out. I won't be able to eat anything. I will starve to death." The wolf began thinking of a remedy to overcome the problem.

This image shows a full page of white paper with horizontal blue ruling lines. The lines are evenly spaced and run across the width of the page. There is no handwriting or other markings on the paper.

(छपे पृष्ठों की संख्या :12)

परमाणु ऊर्जा केन्द्रीय विद्यालय क्रमांक -२, रावतभाटा

आत्मविश्वास परीक्षा - (2022-23)

कक्षा : 5

समय : 3 घंटे

विषय : हिंदी

पूर्णांक : 80

नाम: -----

विद्यालय का नाम :-----

कक्षा/वर्ग : ----- अनुक्रमांक : -----

दिनांक : -----

निरीक्षक के हस्ताक्षर : -----

परीक्षक के हस्ताक्षर : -----

प्रासांक : -----

जांचकर्ता के हस्ताक्षर: -----

सामान्य निर्देश:-

१. सभी प्रश्नों के उत्तर निर्देशानुसार लिखिए ।
२. सभी प्रश्नों के अंक उनके सामने दिए गए हैं।
३. स्वच्छता एवं सुंदर लेख का विशेष ध्यान रखें।

प्रश्न:१ (क) पठित गद्यांश को पढ़कर नीचे लिखे प्रश्नों के उत्तर लिखो। (5)

बिशन सहमकर पेड़ों की आड़ में छिपकर खड़ा हो गया। बिशन जहाँ खड़ा था, वहीं चुपचाप खड़ा रहा। उसे वहाँ से सीढ़ीनुमा खेत और फलों के बाग साफ दिखाई दे रहे थे। खेतों में काम करते हुए किसान भी दिखाई दे रहे थे। फसल तैयार खड़ी थी। सुबह की हल्की धूप में खेत सुनहरे दिखाई दे रहे थे। बिशन अभी सोच ही रहा था कि गोली किसने और क्यों चलाई होगी कि तभी एक और गोली की आवाज़ आई।

क) बिशन सहमकर कहाँ खड़ा था?

ख) सुबह की हल्की धूप में खेत कैसे दिखाई दे रहे थे?

ग) बिशन को क्या चलने की आवाज़ सुनाई दे रही थी?

घ) समान अर्थ लिखो-

डर कर -----

ड) वचन बदलो-

गोली -----

(ख) पठित गद्यांश को पढ़कर नीचे लिखे प्रश्नों के उत्तर लिखो। (5)

“तुम यह बात मुझे खुश करने के लिए कह रही हो। तुम्हें यकीन नहीं हुआ होगा।”
स्वामीनाथन ने बड़े उत्साह से कहानी शुरू की, “राजम के पिता एक जंगल में डेरा डाले हुए थे। राजम उनके साथ था। अचानक दो शेर उन पर झपटे और एक ने पीछे से हमला करके पिता को गिरा दिया। दूसरे ने राजम का पीछा किया। राजम एक झाड़ी के पीछे छुप गया और वहीं से गोली चलाकर शेर को मार डाला।

क) राजम के पिता ने कहाँ डेरा डाला था?

ख) स्वामीनाथन यह कहानी किसे सुना रहा था?

ग) राजम कहाँ छुप गया ?

घ) विलोम शब्द लिखो।

पीछे -----

ड) अर्थ लिखो।

यकीन -----

प्रश्न:२ अपठित गद्यांश को पढ़कर नीचे लिखे प्रश्नों के उत्तर लिखो। (10)

प्राचीन काल में कांची नामक नगरी में दो भाई रहते थे। उनके नाम थे – प्राणधर और राजधर । ये दोनों भाई लकड़ी के खिलौने बनाने में निपुण थे। फिर भी उनका गुजारा मुश्किल से ही चल पाता था, क्योंकि दोनों भाई बहुत आलसी थे।

एक दिन ये दोनों भाई लकड़ी लेने के लिए जंगल में गए। एकाएक तेज़ बारिश होने लगी। वर्षा से बचने के लिए वे एक गुफा में घुस गए। गुफा के अंदर हल्का – हल्का प्रकाश हो रहा था। दोनों भाई प्रकाश की दिशा में बढ़े, तो उन्हें वहाँ बहुत – से खिलौने रखे दिखाई दिए जो लकड़ी के बने थे ।

क) दोनों भाई किस नगरी में रहते थे?

ख) उन दोनों भाइयों के नाम क्या थे?

ग) वे दोनों किस काम में निपुण थे?

घ) उन दोनों का गुजारा मुश्किल से क्यों चल पा रहा था?

ङ) दोनों भाई लकड़ी लेने कहाँ गए थे?

च) उन्होंने बारिश से बचने के लिए क्या किया?

छ) दोनों भाइयों को गुफा में क्या दिखाई दिए ?

ज) खिलौने किसके बने थे?

झ) विलोम शब्द लिखो-

हल्का _____

अंदर _____

ज) समान अर्थ लिखो-

उजाला _____

प्रश्न:३ दिए गए प्रश्नों के उत्तर लिखो।

क) बिशन कितने साल का था? (1)

ख) तुम जहाँ रहते हो, उसके आस – पास कौन – सी नदी है? (1)

ग) धरती की गुल्लक किन – किन साधनों से भरती है? (2)

घ) तुम्हारी परिचित नदी के किनारे क्या – क्या होता है? (2)

ड) जवाहरलाल, किशन और कुली सभी रस्सी से क्यों बंधे थे? (2)

च) अँधेर नगरी की प्रजा राजा के मरने पर खुश क्यों हुई? (2)

प्रश्न: ४ 'स्वामी' या 'अँधेर नगरी' के बारे में पाँच वाक्य लिखो। (5)

प्रश्न:५ तुम्हें भी अपना कोई खास कपड़ा सबसे अच्छा लगता होगा। उस कपड़े के बारे में बताओ वह तुम्हें सबसे अच्छा क्यों लगता है? (5)

(व्याकरण आधारित प्रश्न – 15)

क) नीचे दिए गए शब्दों के साथ उचित विशेषण लिखो। (1)

_____ बारिश

ख) नीचे लिखे वाक्य में सही शब्द लिखो। (2)

- आँधी के कारण पेड़ से _____ फल गिर रहे हैं।(पटापट / फटाफट)

- आज रहमान ने _____ सफ़ेद कुर्ता पाजामा पहना है।

(चकाचक / झकाझक)

ग) जिस शब्द के नीचे रेखा खिंची है, उसका लिंग पहचानकर लिखो। (2)

- दसवाँ हिस्सा _____
- अपने सारे सामान _____

घ) नीचे लिखे वाक्य में सर्वनाम का सही रूप भरकर वाक्य पूरा करो । (2)

सुधा ने _____ बुआ से पूछा, पापा _____ कितने बड़े हैं। (आप)

ङ) वाक्य पूरा करो। (1)

तुम तो मंगल ग्रह के बारे में ऐसे बता रहे हो, मानो -----

च) नीचे दिए गए मुहावरे का वाक्य में प्रयोग करो। (2)

आँख भर आना - _____

छ) खाली स्थान में सही शब्द लिखो। (2)

- कोको की माँ _____ कल दुकान से एक फूलदान खरीदा था। (को/ने)
- घर _____ लोग उसे अन्नो कहते हैं। (से/के)

ज) नीचे दिए गए वाक्य में क्रिया छाँटो । (1)

मोहन पतंग उड़ा रहा है। -----

झ) नीचे लिखे वाक्यों को पढ़ो। जिन शब्दों के नीचे रेखा खिंची है, उन्हें आजकल कैसे लिखते हैं। (2)

- न जाने की अँधेर हो कौन छन में ! -----
- इसी से गिरी, यह न मोटी घनी थे ! -----

(शब्द भंडार पर आधारित प्रश्न – 10 अंक)

क) विलोम शब्द लिखो। (2)

शाम X _____ ऊँची X _____

ख) नीचे दिए गए शब्दों के अर्थ लिखो। (2)

धेला _____ अमराई _____

ग) नीचे लिखे देशों की मुद्राएँ कौन-सी हैं? (2)

जापान _____ इंग्लैंड _____

घ) नीचे लिखे शब्दों से मिलते – जुलते शब्द लिखो। (2)

धार _____ रोला _____

ड) पानी से संबंधित कोई भी दो नारे लिखो। (2)

(वर्तनी आधारित प्रश्न – 10 अंक)

क) अक्षरों के क्रम बदलकर सही शब्द लिखो। (2)

- ला को ल ह - _____
- ड ल मै - _____

ख) शुद्ध शब्द पर गोला लगाओ । (3)

- महामुर्क महामुर्ख महामूर्ख महामुरक
- दुश्मनी दुसमनी दुस्मनी दुशमनी
- चुनोती चुनौती चुनोति चुनोटी

ग) अशुद्ध शब्दों को शुद्ध करो। (3)

- आसाढ़ _____
- पुलीस _____
- रोटीयां _____

घ) छूटे हुए अक्षर लिखकर शब्दों को पूरा करो। (2)

- फू __ दान
- स _ द्र

(सुलेख - 5 अंक)

समयनिष्ठा विद्यार्थियों का महान गुण होता है क्योंकि यह उन्हें अनुशासन भी सिखाता है। इसके प्रयोग से, विद्यार्थी सभी जगहों पर सही समय पर प्रस्तुत हो सकते हैं। वे स्कूल और घर दोनों में अच्छे से बेहतर प्रदर्शन कर सकते हैं।

एक अनुशासित और समयनिष्ठ विद्यार्थी स्कूल और समाज दोनों में सम्मान, पहचान और सामाजिक स्वीकृति प्राप्त करता है। उनकी अभिभावक व शिक्षकों के द्वारा प्रशंसा की जाती है।

[illegible]

Atomic Energy Central School No.2, Rawatbhata

Confidence Examination-2022-23

Class: V

Subject: Mathematics

Time:3Hours

Marks:80

To be filled by the student

Student's Name: _____

Name of the school: _____ Class/Sec: _____

Roll No. _____

Date of Examination: _____

To be filled by the teacher

Invigilator's Sign: _____

Examiner's Sign : _____

Marks Obtained: _____

General Instructions:

Section A-20 marks

Section B-20 marks

Section C-20 marks




Section D -20 marks

All questions are compulsory.

Section A-Understanding (20 Marks)

Q1. Fill in the blanks.

(10 × 1=10 M)

- a) A cube has _____ faces.
- b) Perimeter of a square = _____ x side
- c) 7 rupees 50 paise = Rs _____
- d) 1 metre and 7 centimeters = _____ m
- e) Length of a rectangle = Area ÷ _____
- f) If  = 5 cars, then   | = _____ cars
- g) One third of 1200 gram = _____ gram.
- h) Volume of a 20cm long, 10 cm wide and 4 cm high box is _____.
- i) A square field has a boundary of 128m. Its side is _____ m.
- j) A cow gives 10 liters of milk in a day. How many liters of milk will it give in the month of March? _____

Q2. Solve

(2 x 5=10)

- a) Distance between two places is 48cm on a map. If 1cm=30km in the map, what will be the actual distance between two places? What will be the distance in metres?

- b) Find the area and perimeter of a square table of side 5metre?

c) Draw tally marks for two different types of trees in a garden.

Mango -12

Neem= 15

| Tree | Tally Mark |
|-------|------------|
| Mango | |
| Neem | |

d) What should we look for to check if a 100-rupee note is real or fake? (any two ways)

e) Divide 5928 by 13 and check your answer by multiplication.

Section B-Understanding (20 Marks)

Q1. Choose the correct answer and fill in the gaps. (1x6=6M)

a) The volume of a cube of side 4cm is _____

i) 64 cube cm ii) 64 sq cm iii) 64 sq m iv) 64cm

b) There were 8 tigers in a jungle in the beginning. They grow 10 times every year.

The number of tigers in the third year would be _____

- i) 80 ii) 8000 iii) 240 iv) 160
- c) A banana costs Rs 4.50, cost of 4 bananas would be
- i) Rs 16.50 ii) Rs 18.50 iii) Rs 18.00 iv) Rs 20
- d) _____ part of a rupee is 10 paise.
- i) $\frac{1}{10}$ ii) $\frac{1}{100}$ iii) $\frac{3}{4}$ iv) $\frac{1}{2}$
- e) The area of a square is 81sq cm. Its side is _____
- i) 9m ii) 9cm iii) 8cm iv) 8 m
- f) 40 metre 5centimeter = _____ metre
- i) 405 ii) 40.5 iii) 40.005 iv) 40.05

Q2. Do as directed.

(5x2=10M)

- a) Aruna sells 1 litre of milk for Rs 55 in a day. How much money will she earn in a year?
- b) If the volume of a cube is 1 cube cm. If 30 such cubes are fit along the length, 10 cubes along the width and 6 such layers are made. Find the volume of the new shape.
- c) If one red ball weighs 25g ,one blue ball weighs 20 g and one yellow ball weighs 12g. Find the total weight of 10 red balls, 5 blue balls and 11 yellow balls.

d) Weight of a 10-rupee coin is 7g. What is the weight of a sack with

i) 2300 coins = _____ kg _____ g

ii) 4000 coins = _____ kg _____ g

e) There are 25 laddoos in 1 kg. How many laddoos will be there in 16 kg?

Q3. A pizza delivery driver paid attention to how many pizzas he delivered over the past 4 days. (4 M)



Find out from the bar chart-

a) How many pizzas were delivered on Thursday? _____

b) On which day did he deliver least number of pizzas? _____

- c) On Saturday he delivered _____ pizzas.
- d) How many pizzas did he deliver in four days?

Section C-Ability to Compute (20 Marks)

Q1. Fill in the blanks.


(6x1=6M)

- a. $48\text{kg}250\text{g} = \underline{\hspace{2cm}} \text{kg}$
- b. If side of a square is increased by 3 times then its area will increase by _____ times.
- c. $200 \text{ cm} \times \underline{\hspace{1cm}} = 1 \text{ metre}$
- d. $24 \text{ hours} = \underline{\hspace{2cm}} \text{ minutes}$
- e. $9\text{metre}5\text{cm} = \underline{\hspace{2cm}} \text{ metres}$
- f. $\text{Rupee } \frac{3}{4} = \underline{\hspace{1cm}} \text{ paise}$


Q2. Do as directed.

(5x2=10M)

- a. This is a grid with 100 squares. Colour 0.1 of this grid red, 0.05 in blue, 0.2 in green, 0.04 in yellow.



b. How many 1cm cubes are needed to make this model? Find its volume.



c. Find 243×172

d. The perimeter of a carpet is 16m and breadth is 3m. Find its area.

e. 576 soaps are to be packed in boxes. If there are 24 boxes, how many soaps will be kept in one box?

Q3. The list given below shows cost of different items at a stationary shop. (4 marks)

| Item | Price per item (in Rs) |
|----------|------------------------|
| Pen | 35.50 |
| Notebook | 45.25 |
| Eraser | 5.75 |
| Glue | 15 |

i) How much is the cost of half dozen erasers?

ii) Radhika has a 100 rupee note. How many pens can she buy? How much money is left?

iii) Find the cost of 4 notebooks.

Section D -Problem Solving Ability (20 Marks)

Q1. Tick the correct answer. (6x1=6 M)

- The area of a square is equal to the area of a rectangle of length 9cm and breadth 4cm. The side of square is –
a. 36cm b. 16cm c. 9cm d. 6cm
- Monica is going from Gujarat to Manipur. She is going in _____ direction
a. East b. West c. North d. South
- If 10 five- rupee coins weigh 45g. 1000 five-rupee coins will weigh-
a. 405g b. 450g c. 45000 g d. 4500g

4. One UAE Dirham is equal to 10.80 Indian rupees. 50 UAE Dirham is equal to

- a. Rs5.40 b. Rs5400 c. Rs 540 d. Rs450

5. $348.5 \div 10 =$ _____

- a. 3485 b. 3.4850 c. 34.85 d. 0.3485

6. The fencing of a square garden is 24m in length. How long is one side of the garden?

- a. 4cm b. 6 cm c. 12cm d. 8cm

Q2. Do the following.

(5x2=10M)

a) A rectangular pitcher is 8cm wide, 22cm long and 40 cm high. How much water can be put in the pitcher?

b) Anupam wants to tile his room floor with marble tiles. Each side of the tile is 12cm. his room is 240cm long and 180cm wide. How many tiles will he need?

c) A tank is full of 600L of water. How much water will be filled in 20 tanks? If 25 buckets can be filled with one tank of water, how many buckets in all can be filled with the water in 20 tanks?

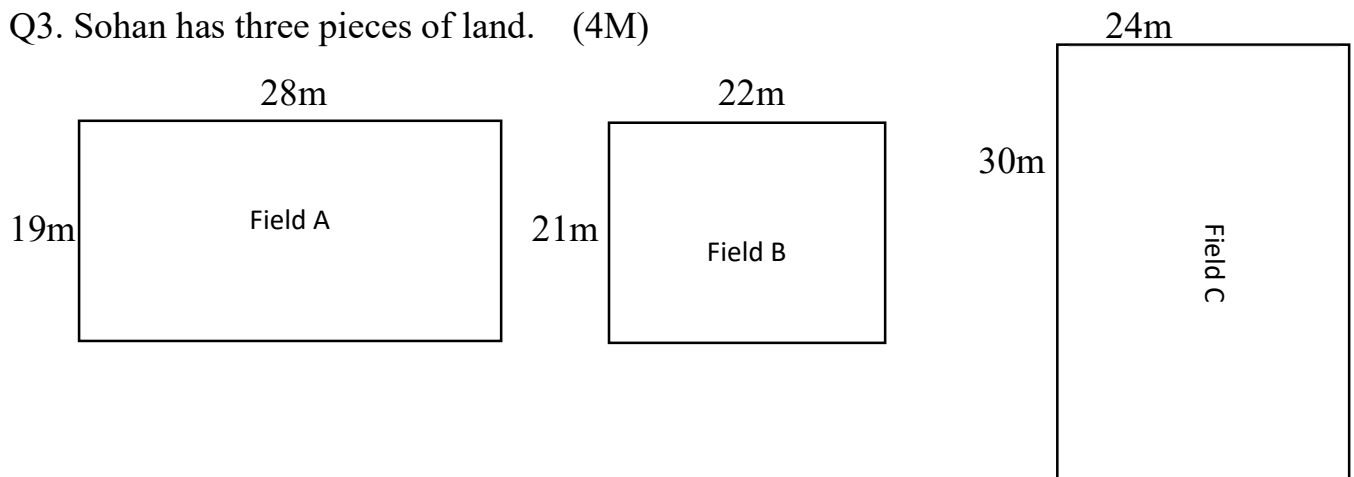
d) Which will have a bigger area - a rectangle 45cm long and 20 cm wide or a square of side 25cm , by how much?

e) Weight of a 20-rupee coin is 8g. How many coins are there in a sack of 20-rupee coins if it weighs:

a. 16 kg?

b. 8 kg 208 g?

Q3. Sohan has three pieces of land. (4M)



- a. Find the area of all the three fields.
- b. He bought field B at the rate of Rs 85 rupees for a square metre. Find the total cost of field B.

Atomic Energy Central School No.2,Rawatbhata

Confidence Examination-2022-23

Class: V

Time:-3 Hours

Subject: EVS

Max.Marks:-80

To be filled by the student

Student's Name: _____

Name of the school: _____

Class/Sec: _____ Roll No. _____ Date of Examination: _____

To be filled by the teacher

Invigilator's Sign: _____

Examiner's Sign : _____

Marks Obtained: _____

General Instructions:

- All the questions are compulsory to solve.
- Read the question carefully and write the answers.
- Marks are shown in bracket.

Section –A (Observation and Reporting – 30 Marks)

A1.1 Tick (✓) the correct answer.

(5 × 1 =5)

(a) _____ is a natural calamity which occurs due to lack of rain.

(i) earthquake (ii) drought (iii) famine (iv) flood

(b) _____ and _____ are Changpas only treasure.

(i) Goats, sheep (ii) Car, money (iii) Dab, map (iv) Ice, water

(c) Where is Nagpada ?

i) Nagpur ii) Mumbai iii) Chennai iv) Delhi

(d) _____ is a kind of stew.

(i) Millet (ii) Puranpoli (iii) Undhiya (iv) Gourd

(e) Gaurav Jani started his journey by _____

i). Motorcycle ii) Bicycle iii) Scooter iv) Car

A.1.2. Write True or False for the following statements.

(1×5=5)

a. Girls and boys should not be treated equally. ()

b. Mukadam is an agent of sugarcane factories. ()

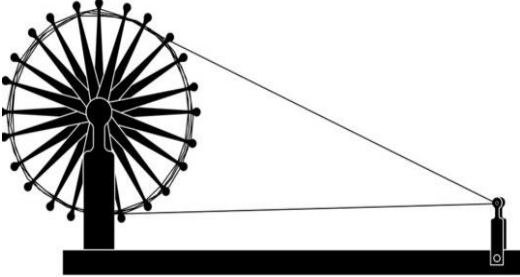




c. Rebo is a conical tent. ()

d. A brother and a sister can not be twins. ()

e. Polio affects our legs. ()

A1.3. Identify the pictures and write their names.

(5x1=5)

| | Picture | Name |
|---|---|-------|
| A |  | <hr/> |
| B |  | <hr/> |
| C |  | <hr/> |
| D |  | <hr/> |
| E |  | <hr/> |

A.1.4 Answer the following questions. (At least two sentences) (2x 5=10)

a. Why did Jatrya shift to Mumbai ?

Ans _____

b. What is Rebo ? Describe.

Ans _____

c. Why prices of petrol and diesel are going up?

Ans _____

d. What did Damjibhai do to protect seeds from insects?

Ans _____

e. What do you mean by one tin of land?

Ans _____

A.1.5 Write five sentences about Bhaskarbhai's Farm. (5)

Ans _____

Section B-Identification and classification- 25 marks

B.2.1. Choose the correct answer and fill in the blanks. (1x5=5)

a. Suryamani belongs to _____community. (Changpa/Kuduk)

b. The main crop in Mizoram is _____(wheat / rice)

c. The distance between Mumbai and Delhi is _____km.(1400/900)

d. The highest award in the fields of sports in India is _____

_____award.

(Major Dhyan chand Khel Ratan Award / Param Veer Chakra Award)

e. Dr.Zakir Hussain was our former _____.

(President / Prime Minister).

B.2.2. Give any two examples of each.

(2x2=4)

a. Two things which the village people make the fire to cook food.

_____ , _____

b. Fossil fuels.

_____ , _____

B.2.3. Answer the following questions.(At least two sentences) (2x3=6)

a. What is 'Girl Star Project' ?

Ans _____

b. What is Right to Forest Act 2007?

Ans _____

c. Mian Balisthiye begin to tremble with fear ?

Ans _____

B.2.4. Circle the odd one.

(5 x 1=5)

- | | | | |
|---------------|------------|----------|--------|
| a. wheat | jowar | maize | cotton |
| b. basketball | chess | football | hockey |
| c. cowdung | dry leaves | urea | ash |
| d. CNG | wood | kerosene | LPG |
| e. cereals | pulses | milk | spices |

B.2.5. Write any five differences between Sinduri village and Khedi village.

(5)

| <u>Khedi village</u> | <u>Sinduri village</u> |
|----------------------|------------------------|
| 1. | |
| 2. | |
| 3. | |
| 4. | |
| 5. | |

Section- C Discovery of Facts- 25 marks

C.3.1 Name the person or things for the given statements. (5x1=5)

a. A person who writes news for magazine or newspaper. _____

b. A place where sheeps and goats are kept. _____

c. Afsana's coach _____

d. A book that contains rules to govern the country. _____

e. A place where petroleum is sent to clean and separate _____

C.3.2 Answer the following questions. (At least two sentences) (5x2=10)

a. What jobs did Sidya do to earn money?

Ans _____

b. Why houses on the mountains have sloping roofs?

Ans _____

c. The woodcutter was blowing on his hands. Why?

Ans _____

d. Girls were not encouraged to play in earlier time. Why?

Ans _____

e. Forests are called collective banks.

Ans _____

C.3.3 Write short note on-

Importance of playing sports and games .(At least five sentences) (5)

Ans _____

C.3.4 Locate the following states in the given map of India. (1x5=5)

- a. Orissa
- b. Haryana
- c. Mizoram
- d. Andhra Pradesh
- e. Maharashtra

