

# Atomic Energy Central School No.2, Rawatbhata

## English Worksheet

Class-II                      Sec:- \_\_\_\_\_

Date:- \_\_/\_\_/2022


Name: \_\_\_\_\_ Roll No.

Invigilators sign. \_\_\_\_\_ Examiners Sign. \_\_\_\_\_


**1. Identify the pictures and write their names.**




\_\_\_\_\_



\_\_\_\_\_



\_\_\_\_\_



\_\_\_\_\_

**2. Encircle the correct spellings :**

a. rinkles                  wrinkles                  wrinkl                  rinklless

b. megic                  mageec                  magic                  mejik

**3. Underline the silent letter in the following words:**

a. h a l f

b. k n o w

c. d o u b t

#### 4.Fill in the blanks.

- 1.You smile at one,he \_\_\_\_\_at you .( smiles / small )
- 2.One cannot find smile's \_\_\_\_\_hiding place.( beak / secret )
- 3.A smile can \_\_\_\_\_up your face.( wrinkle / sing )
- 4.Smile is a \_\_\_\_\_thing.( funny / simple )

#### 5.Rearrange the letters to make a word . One has been done for you.

ENO - ONE

HATNKUFL - \_\_\_\_\_ RETE-\_\_\_\_\_

GHIRT - \_\_\_\_\_ AIRES - \_\_\_\_\_

#### 6.Guess the word.

- 1.A singing bird- \_\_\_\_\_
- 2.An animal with black and white stripes\_\_\_\_\_

#### 7.Match the words in column 'A' with their opposites in column 'B'.

##### Column A

- 1) hard
- 2) first
- 3) cold
- 4) down

##### Column B

- a) up
- b) hot
- c) last
- d) soft

**8. Answer the following questions.**

a) Why smile is a funny thing ?

Ans. \_\_\_\_\_

b)What happens when you smile at someone ?

Ans-\_\_\_\_\_

c) What did the wind do to get the Man's coat off ?

Ans-\_\_\_\_\_

**9. Join the two words to make one word. One has been done for you.**

peace + full = peaceful

play + full =

colour + full =

c a r e + f u l l =

## hope + full =

परमाणु ऊर्जा केंद्रीय विद्यालय # 2, रावतभाटा

Cyclic Test - 2 (जुलाई माह)

कक्षा 2

विषय-हिंदी

नाम - \_\_\_\_\_ वर्ग - \_\_\_\_\_ दिनांक - 03/08/22

अनुक्रमांक - \_\_\_\_\_ ह० निरी० - \_\_\_\_\_

---

प्र०1. नीचे लिखे शब्दों के अर्थ लिखो।

शरीर \_\_\_\_\_ फायदा \_\_\_\_\_

प्र०2. बताओ इनमें से कौन अधिक बलवान है ? तुम्हें ऐसा क्यों लगता है?

हाथी या शेर ?

मुझे लगता है कि \_\_\_\_\_ अधिक बलवान है।

क्योंकि \_\_\_\_\_

प्र०3. किन – किन चीजों की नोक होती है ?

\_\_\_\_\_

प्र०4. नीचे लिखे शब्द में से तुम कोई चार शब्द बनाओ -

ताजमहल

_____	_____
_____	_____

प्र०5. उदाहरण के अनुसार तुम भी नीचे दिए शब्दों को बदल कर लिखो।

* एक कछुआ	तीन कछुए
एक कपड़ा	दो _____
एक पौधा	आठ _____
एक संतरा	दस _____
एक खंभा	चार _____

प्र०6. बताओ ऐसे कौन – कौन चलता है ?

रेंग – रेंग कर - \_\_\_\_\_

छलाँग लगा कर - \_\_\_\_\_

प्र०7. नीचे लिखी चीजों में से कौन – कौन सी चीजें पानी में फेंकने से मुलायम हो जाएँगी ? सही जगह पर लिखो।

कागज़, लकड़ी, बिस्किट, गिलास, पापड़, मोम

मुलायम हो जाएँगी

मुलायम नहीं होंगी

---

---

---

---

---

---

प्र०8. बताओ , तेंदुए ने क्या मूर्खता की ?

---

---

प्र०9. वाक्य बनाओ ।

सूझा - \_\_\_\_\_

X-----X-----X-----X-----X-----X

**Atomic Energy Central School No-2 Rawatbhata**

**Cyclic Test –II (2022 -2023 )**

**Class - II      Subject : Mathematics      Time:1 Hour**

**Name ----- Section ----- Roll No -----**


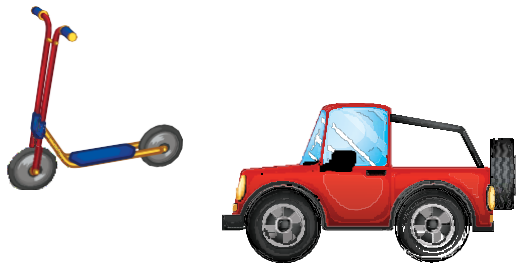

**Signature of Invigilator ----- Signature of Examiner -----**

---

**1. Tick the lighter object.**



2 Circle the heavier object.



3

Fill in the blanks :

(a) A pencil is ..... than a notebook. (lighter/heavier)

(b) A table is ..... than a eraser. (heavier/lighter)

(c) A ..... is heavier than a dog. (cow/rat)

(d ) A duster is ..... than a chalk stick. (lighter/heavier)

(e ) A school bag is ..... than a water bottle. (lighter/heavier)



4

Write the names of two things that are :

**Lighter than a notebook**

(a) -----

(b) -----

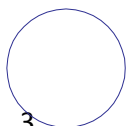
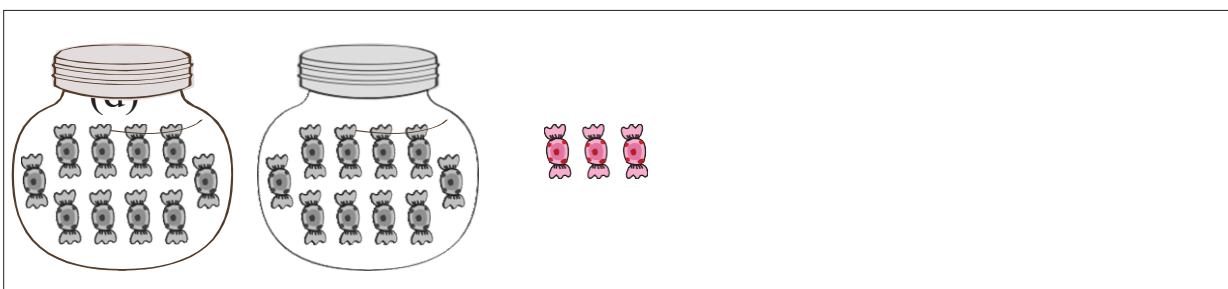

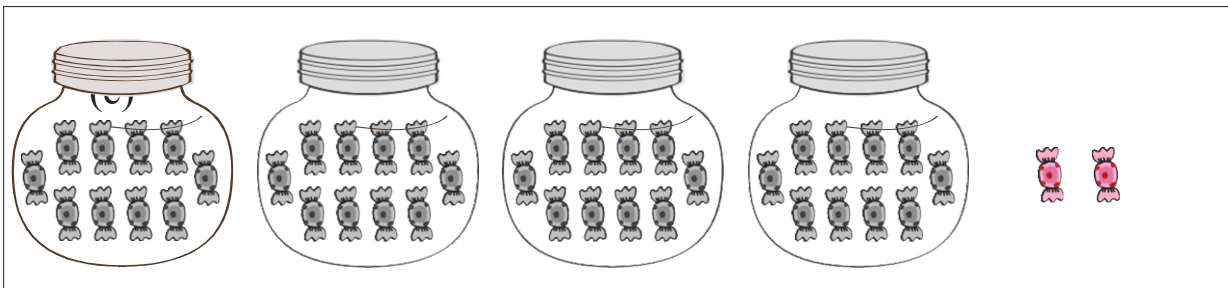

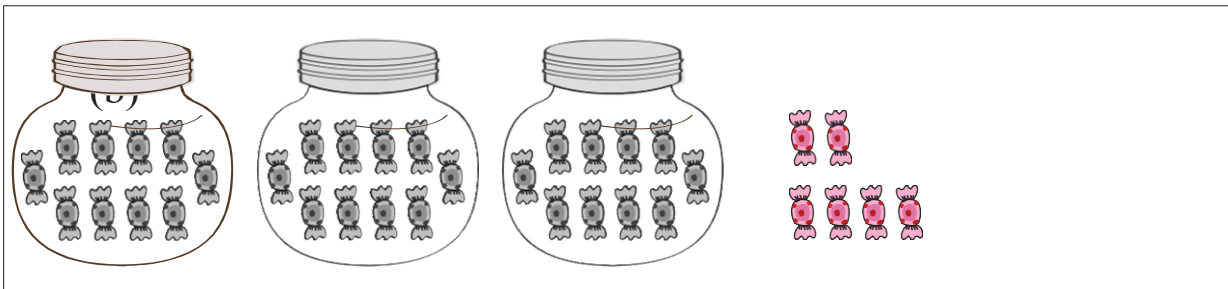

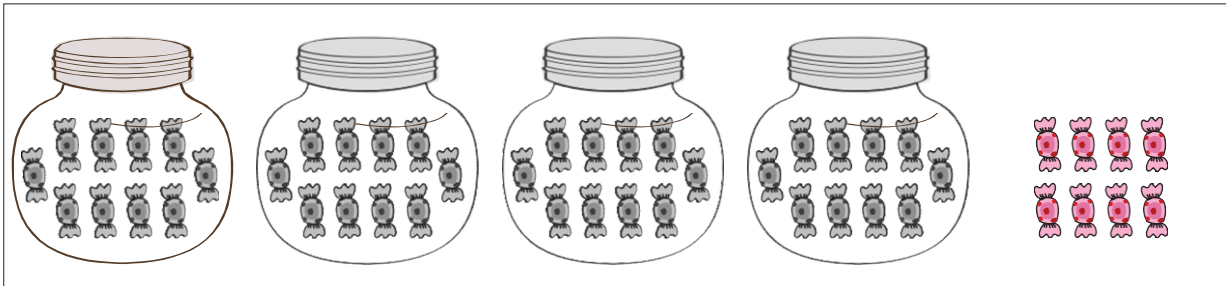
**Heavier than a notebook**

(a) -----

(b) -----.

5

There are 10 candies in each jar. How many candies are there in all?



6

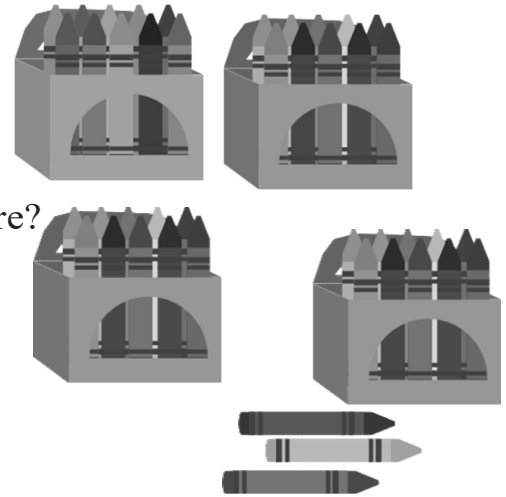
One night at home, Chinu counted his crayons.

(a) How many crayons are there in all ?

.....

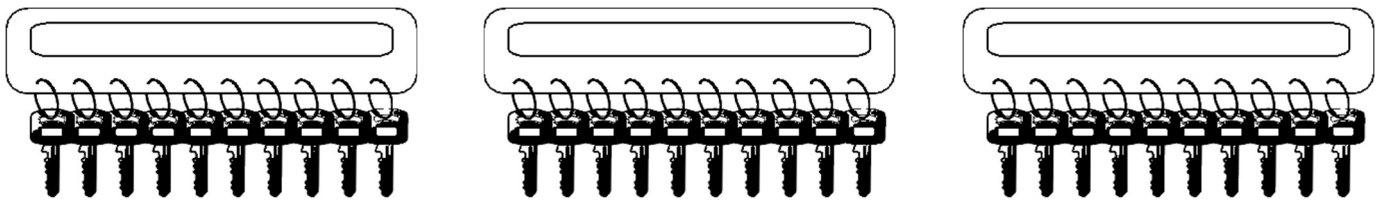
(b) How many boxes of 10 crayons are there?

.....



7

Answer the following questions :




(a) There are ..... bunches of keys

(b) Each bunch consists of ..... keys.

(c) How many loose keys are there ? .....

(d) How many keys are there in all ? .....







8

Count by tens and fill the missing numbers.



9. Circle the heavier thing in each picture.



**Atomic Energy Central School No-2, Rawatbhata**  
**Cycle Test 2- (2022 -23)**  
**Subject- EVS      Class- II      Time – 1 hour**

Name- ..... Section- ..... Roll No- .....

Sign. of Invigilator: \_\_\_\_\_

Sign. of Examiner \_\_\_\_\_

---

**1. Fill in the blanks.**

- a) We are a \_\_\_\_\_ when we are born. ( **babies** / **adult** )
- b) We wear \_\_\_\_\_ clothes during summers. ( **Cotton** / **woolen** )
- c) We get silk from the \_\_\_\_\_ of silkworms. ( **cocoon** / **tail** )
- d) \_\_\_\_\_ is an energy giving food. ( **rice** / **egg** )

**2. True or False.**

- a) Police do not have their uniforms. \_\_\_\_\_
- b) Silk clothes need more maintenance. \_\_\_\_\_
- c) We should drink 8 to 10 glasses of water every day. \_\_\_\_\_
- d) Fruits and vegetables contain roughage. \_\_\_\_\_
- e) Light cotton clothes do not absorb body heat. \_\_\_\_\_

**3. Answer the questions in one sentence.**

- a) Write a good eating habit?
-

b) Why do we need food?

---

c) Name any two people who wear uniform at work?

---

**4. Draw two Vegetables.**

--	--

**5. Match the following.**

Rainy season	eggs
Uniform	gumboots
Non vegetarian food	soldiers

**6. Give two examples of clothes you would wear**

a) In summer \_\_\_\_\_

b) On your birthday \_\_\_\_\_

**7. Complete the following sentences.**

1. Water breaks down \_\_\_\_\_

2. Water helps to maintain \_\_\_\_\_