

Atomic Energy Central School No.2 Rawatbhata

English Worksheet

Class-I **Sec**_____



Name of Student : _____ Date: _____

Q.1 How many kinds of creatures are there in the poem?

Q.2 Name the chicks in the story.

Q.3 Who liked yellow things?

Q.4 Look at the picture and write their name.

Q.5 Write rhyming words.

Cat _____

Big _____

Sad _____

Bee _____

Q.6 Write opposite.

Hot x _____

Come x _____

Day x _____

Sad x _____

परमाणु ऊर्जा केन्द्रीय विद्यालय # २ रावतभाटा

अभ्यास पत्रक - 3 (2022- 20 23)

कक्षा – प्रथम विषय – हिंदी

नाम ----- वर्ग----- अनुक्रमांक ----

हस्ताक्षर निरीक्षक ----- हस्ताक्षर परीक्षक -----

प्रश्न 1 सही पर (✓) या गलत पर (×) का निशान लगाओ -

- 1.रेलगाड़ी में गार्ड टिकट देखते हैं । ☐
- 2.रेलगाड़ी का इंजन भारी - भरकम होता है । ☐
- 3.रसोईघर की खिडकी मुन्ना - मुन्नी खोल रहे थे । ☐
- 4.कविता में घर पर बिल्ली का राज था । ☐
5. रेल में टिकट लेकर सफ़र करना चाहिए ☐

प्रश्न 2 अलग शब्द पर गोला लगाओ ।

(क) सेब चीकू केला आलू

(ख) पटरी डिब्बे टिकट बाज़ार

(ग) शेर भालू चीता चिड़िया

(घ) नीम पीपल बरगद दाल

प्रश्न 3 रसोईघर कविता में जो शब्द जोड़े में आए हैं, उन्हें मिलाओ

चकला	सब्ज़ी
चाकू	बेलन
प्याज़	मूली
गाजर	टमाटर

प्रश्न 4 सामान तुक वाले शब्दों लिखो ।

सोई -----
मटका -----
पत्तीले -----
उतरो -----

प्रश्न 5 खाली जगह भरो

(क) मैं चाकू हूँ । मैं सब्ज़ी ----- हूँ ।

(ख) हम ----- हैं । हम ----- बेलते हैं ।

प्रश्न 6 किससे क्या काटोगे ?

कैंची से	चाकू से
-----	-----
-----	-----

प्रश्न 7 नीचे दिए गए वर्णों से शब्द बनाओ ।

च ----- -----

भ ----- -----

र ----- -----

प्रश्न 8 चित्रों को नाम लिखो ।











Atomic Energy Central School No-2 Rawatbhata

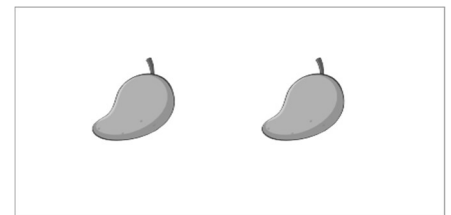
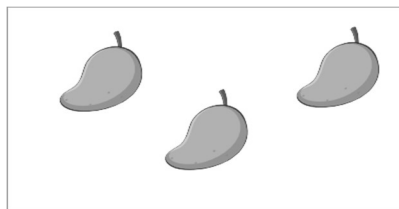
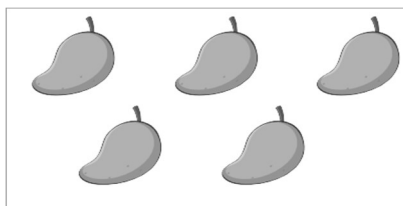
Cyclic Test –III (2022 -2023)

Class - I Subject : Mathematics Time:1 Hour

Name ----- Section ----- Roll No -----

Signature of Invigilator ----- Signature of Examiner -----

Q1. Fill in the boxes.






5

—

3

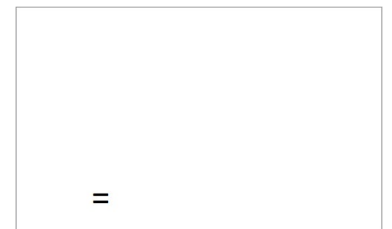


=

2



—

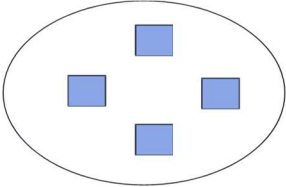
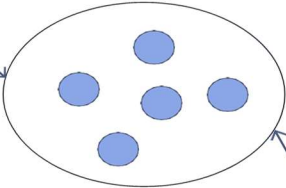
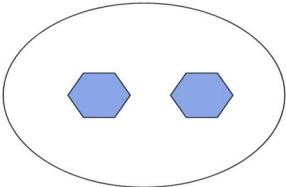
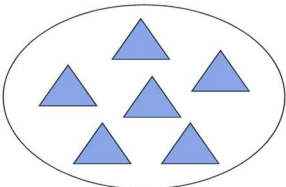
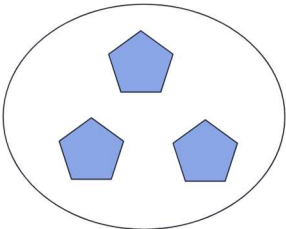

=




—

=


Q2. Subtract and Match.

(a) $8 - 3$		(i) $5 - 3$
(b) $7 - 1$		(ii) $7 - 3$
(c) $5 - 1$		(iii) $4 - 1$
(d) $9 - 2$		(iv) $7 - 2$
(a) $4 - 2$		(v) $7 - 0$
(vi) $6 - 3$		$9 - 3$

Q3. What comes between ?

a.      

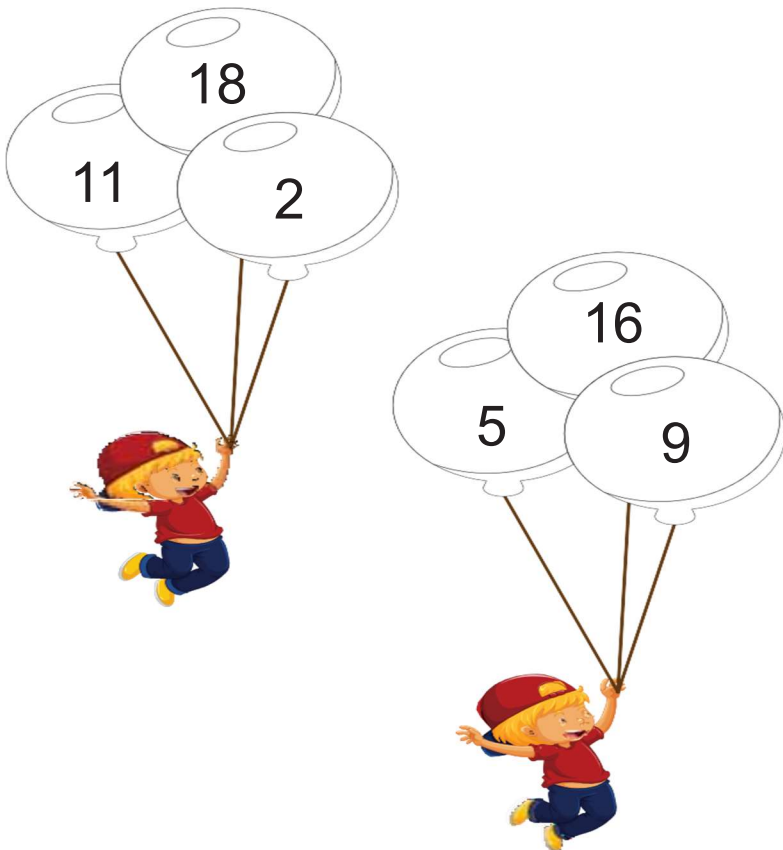
Q4. What comes after?

a.   b.  

Q5. What comes before?

a.   b.  

Q6. Colour the biggest number balloon with red and smallest number balloon with green.



Q7. Fill in the boxes.

a. $12 + 5 =$ _____

b. $14 + 2 =$ _____

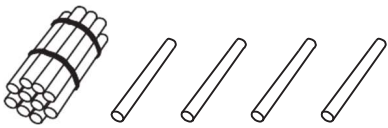
c. $16 + 0 =$ _____

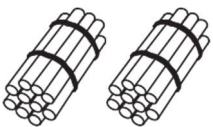
d. $13 + 5 =$ _____

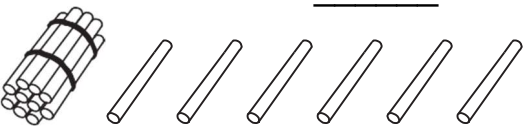
e. $11 + 7 =$ _____

Q8. Rahim has 6 apples and Rehman has 4 apples. How many apples are there altogether?

Q9. Write the number.

a.  = _____

b.  = _____

c.  = _____

CLASS I

WORKSHEET -3 (SEPTEMBER)

SUB:EVS

NAME _____

CLASS : I

SEC: A

ROLL NO. _____

1.Choose the correct Answer and fill in the blanks.

Sad happy angry crying surprised











2. Name our five sense organs .

Ans _____ to see.

_____ to hear.

_____ to smell.

_____ to feel .

_____ to taste.

3. Look at the picture and tick () the thing which you can smell. Cross (X)

The thing you cannot smell.



4. Fill in the blanks with suitable word.

a) We should brush our teeth _____ a day . (once / twice)

b) We should _____ hands before eating.

(wash /not wash)

c) We should take bath with _____ and water everyday .

(soap /towel)

d) We should oil our _____ regularly . (hands /hair)

f) We should not eat _____ food . (healthy /junk)

5.Match the body part with the right object.

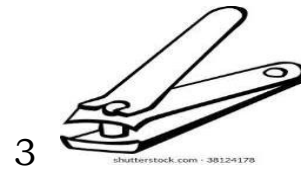
1.hair



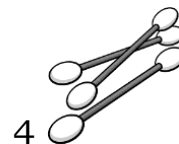
2. ear



3. hands



4. teeth



5. nails

