

Atomic Energy Central School No.2 Rawatbhata ✓

English Worksheet – CYCLE 4 (2022-23)

Class-I

Sec _____

Name of Student : _____ Date: _____

Invigilator's sign: _____ Checker's Sign: _____

Q.1 What did the child see?

Q.2 What did Mittu see on the tree?

Q.3 How did the merry-go-round go?

Q.4 Write rhyming words.

Sat _____

Nice _____

Tree _____

Moon _____

Q.5 Choose a letter from the box and complete the words below.

a	e	i	o	u
---	---	---	---	---

s__t

s__n

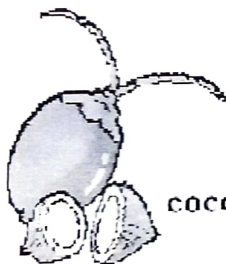
f__n

b__g

Q.6 Match the fruit and vegetables to the tree they grow on.



banana



coconut



apple



coconut
tree



apple
tree



banana
tree

परमाणु ऊर्जा केन्द्रीय विद्यालय # २ रावतभाटा

अभ्यास पत्रक (अक्टूबर 2022-2023)

कक्षा -1 विषय - हिंदी

नाम ----- वर्ग ----- अनुक्रमांक -----

प्रश्न-1 तुम इन चीजों से क्या-क्या करोगे ?

१- रुमाल - ----- , -----

२- पेंसिल - ----- -----

३- फुटा - ----- -----

प्रश्न-2 इन जानवरों में कौन-कौन उछल-कूद करता है और कौन - कौन नहीं?

शेर बिल्ली गाय बंदर हाथी गिलहरी

उछल - कूद करते हैं	उछल - कूद नहीं करते हैं

प्रश्न-3 तुम इन चीजों को किससे साफ करोगे ?

१- कागज - -----

२- बर्तन - -----

३- पत्ते - -----

५- दांत - -----

प्रश्न-4 इनको खूब रगड़ोगे तो क्या होगा ?

१- कागज = -----

२- बर्तन = -----

३- जूते = -----

४- स्वेटर = -----

प्रश्न-5 सामान तुक वाले शब्दों को मिलाओ ।

पगड़ी

कट्टी

हट्टी

रगड़ी

तर

मैल

फैल

पर

प्रश्न-6 पतंग कट कर कहाँ गिर सकती है ?

उ -----

प्रश्न-7 सही वर्ण लिखकर शब्द पूरे करो ।



ख ---- श

गि --- री

प्रश्न-8 पतंग का चित्र बनाओ ।

Atomic Energy Central School No.2, Rawatbhata

Cyclic Test -4 (2022-23)

Class: I

Subject: Mathematics

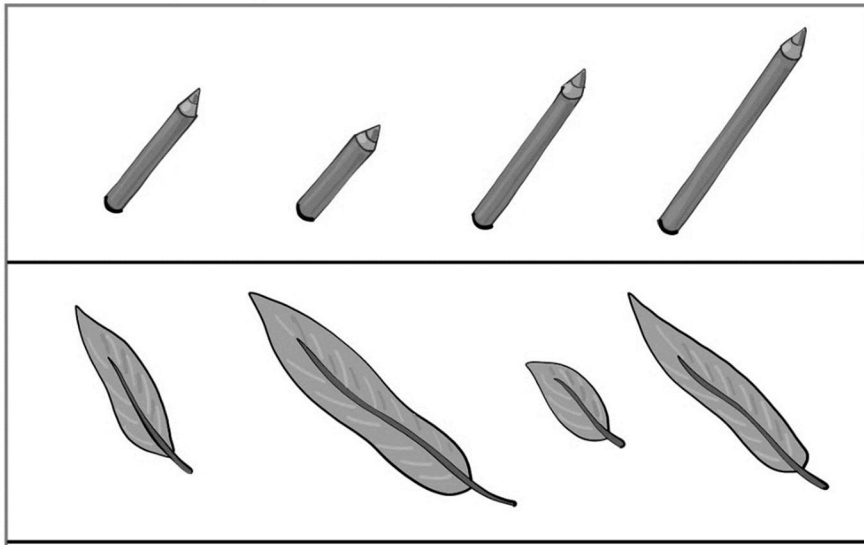
Time: 1:00 hr

Name of the student: _____ Sec: _____ Roll No. _____

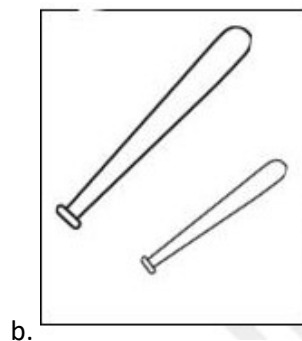
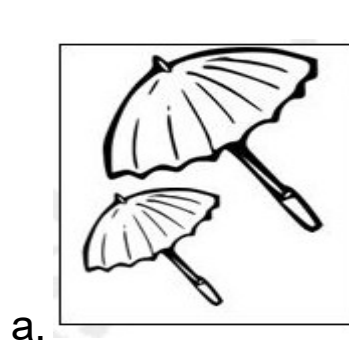
Sign. of Invigilator: _____ Date: _____

Sign. of Examiner: _____

Q1. Circle the longest object.



Q2. Colour the shorter object.



Q3. Number the activities in right order.












Q4. Tick the activity that will take longer.

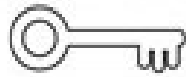
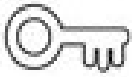


()

()

Q5. Colour the shorter.

a.



b.



Q6. Tick () the thicker object.



a.

()



()



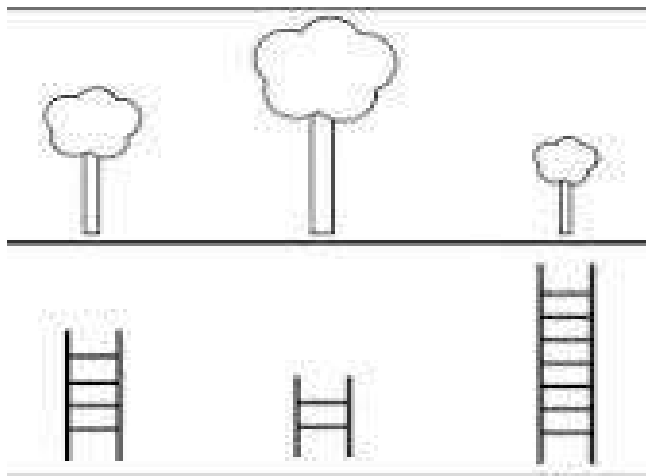
b.

()



()

Q7. Colour the tallest.



Q8. Tick the activity that you do in the morning.



Going to school



Dinner

Q9. Tick the activities that you do in the evening.



Q10. Tick the thinner.

☐☐☐☐☐☐

ATOMIC ENERGY CENTRAL SCHOOL NO.2 RAWATBHATA






CLASS- I EVS

CYCLE TEST-4 2022-23

NAME- _____ SEC.- _____ Roll No.






Instructions- Read all the questions carefully and write the answers.

Q. Match the name of the persons/things with the correct pictures.

		Pilot
		Doctor
		School Uniform
		Police Man
		Fire Fighter

Q. In which season do we wear these clothes ?

Write 'S' for summer, 'W' for winter and 'R' for the rainy seasons.

Q. Answer the following questions :

1. Why are clothes important to us?

Ans _____

2. Why do we wear cotton clothes ?

Ans _____

3. What kind of boots do we wear in rainy season ?

Ans _____

4. What do we wear to school ?

Ans _____

Q. Mark (✓) for a correct statement and (X) for an incorrect statement:

1.Cotton clothes keep us warm.

☐

2.People who do the same kind of work wear uniforms.

☐

3.Cotton is made from cotton plants.

☐

4.Do not overeat.

☐

5.Too much junk food is bad for health .

☐

6.Drink only two glasses of water daily .

☐

Q. Fill in the blanks with the help of given words in the help box.

1.A food we eat in the morning is called _____.(lunch/breakfast)

2.A food we eat at night is called _____. (dinner/lunch)

3.Milk is called _____ food. (complete/incomplete)

4.Fruits and vegetables are called _____ food. (protective/complete)

Q. Identify the pictures and write its name.

