

**ATOMIC ENERGY CENTRAL SCHOOL NO.2 , RAWATBHATA**

**Subject: English**

**CYCLE TEST -6**

**Name : \_\_\_\_\_ Roll No. \_\_\_\_\_**

**Class II Section : \_\_\_\_\_ Date : \_\_\_\_\_**

**Examiner's sign : \_\_\_\_\_ Checker's sign : \_\_\_\_\_**

Q.1 Encircle the correctly spelled words.

1.Darw Dwar Draw

2.Erase Esare Eeras

3.Pazlue Puzzle Pezzalu

4.Court Corte Cuotr

5.Misintre Minister Minstre

Q.2 Fill in the blanks with the help of the given words.

( away, pia pia , music , play , piano )

I am the \_\_\_\_\_ man.

I come from far \_\_\_\_\_

And I can \_\_\_\_\_

I play the \_\_\_\_\_

\_\_\_\_\_ piano

Q.3 Choose the correct option.

i) A \_\_\_\_\_ sing song.(singer/farmer)

ii) A \_\_\_\_\_ flies a plan.(soldier/pilot )

iii) An \_\_\_\_\_ acts in films.(worker/ actor)

Q.4 Make new words.

- a. News + Paper = \_\_\_\_\_
- b. Class + Room = \_\_\_\_\_
- c. Water + Bottle= \_\_\_\_\_
- d. Lunch + Box= \_\_\_\_\_

Q.5 Match

Short	Lighter
Dark	Shorter
Fast	Brighter
Light	Faster
Bright	Darker

Q. 6 Answer the following questions.

i) Where does the music man come from?

---

---

ii) What did Akbar order one day?

---

---

Q.7 Write plurals.

- a) Tomato \_\_\_\_\_
- b) Glass \_\_\_\_\_
- c) Brush \_\_\_\_\_
- d) Bag \_\_\_\_\_

परमाणु ऊर्जा केंद्रीय विद्यालय-2, रावतभाटा

Cyclic Test

कक्षा - 2

विषय - हिंदी

दिनांक- -----

नाम - -----

वर्ग - -----

ह० निरी० - -----

ह० परी० - -----

प्र०1. जिन चीजों को गिन सकते हो उनके आगे हाँ, जिन्हें नहीं गिन सकते हो, उनके आगे नहीं लिखो।

कंबल के खाने

-----

आसमान के तारे

-----

सिर के बाल

-----

कमीज के बटन

-----

प्र०2. बताओ ये सब किसके नाम हैं ?

★ कोलकाता ,दिल्ली ,भोपाल

-----

★ भेड़ ,बकरी, हाथी

-----

प्र०3. किन वर्णों से शुरू होने वाले दो- दो शब्द लिखो।

ज

ज़

-----

-----

-----

-----

प्र०4.किन चीजों के आर-पार देखा जा सकता है?

-----

प्र०5. तुम्हारे घर के आस-पास कौन-कौन से जानवर या पक्षी नज़र आते हैं ?

-----

-----

प्र०6. नीचे लिखे वाक्य को बदल कर लिखो।

1. कितने हैं कंबल में खाने?

-----

2. फूलों से बनाओ होली के रंग।

-----

प्र०7.नीचे बने खानों में सही गाड़ियों के नाम लिखो।

दो पहिए

चार पहिए

-----

-----

प्र०8. निम्न प्रश्नों के उत्तर लिखो।

क. बस के अगले हिस्से से घर - घर की आवाज़ क्यों आ रही थी?

-----

-----

-----

ख. तुम बाज़ार से क्या क्या लेने जाते हो?

---

---

---

Atomic Energy Central School No.2, Rawatbhata

Cyclic Test -6 (2022-23)

Class: II

Subject: Mathematics

Time: 1:00 hr

Name of the student: \_\_\_\_\_ Sec: \_\_\_\_\_ Roll No. \_\_\_\_\_

Sign. of Invigilator: \_\_\_\_\_ Date: \_\_\_\_\_

Sign. of Examiner: \_\_\_\_\_

Q1. Add

a.  $\begin{array}{r} 4 \ 6 \\ + 3 \ 7 \\ \hline \\ \hline \end{array}$

b.  $\begin{array}{r} 7 \ 8 \\ + 1 \ 4 \\ \hline \\ \hline \end{array}$

c.  $\begin{array}{r} 5 \ 7 \\ + 2 \ 7 \\ \hline \\ \hline \end{array}$

d.  $\begin{array}{r} 3 \ 9 \\ + 1 \ 5 \\ \hline \\ \hline \end{array}$

Q2. Subtract

a.  $\begin{array}{r} 9 \ 2 \\ - 4 \ 8 \\ \hline \\ \hline \end{array}$

b.  $\begin{array}{r} 4 \ 6 \\ - 2 \ 7 \\ \hline \\ \hline \end{array}$

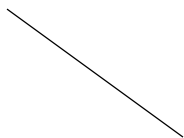
c.  $\begin{array}{r} 3 \ 2 \\ - 1 \ 4 \\ \hline \\ \hline \end{array}$

d.  $\begin{array}{r} 4 \ 1 \\ - 1 \ 9 \\ \hline \\ \hline \end{array}$


Q3. Match the lines with their names.

\_\_\_\_\_

Slanting line



Curved line



Sleeping line

Q4. Do the following.

- a. Monu bought biscuits for 22 rupees and an ice cream for 18 rupees. How much money will he pay in all?

	2	2
+	1	8
	—	—


Monu paid \_\_\_\_\_ rupees in all.

- b. Vaani has 65 rupees. She spent 47 rupees in a fair. How much money is left with her?

	6	5
—	4	7
	—	—

\_\_\_\_\_ rupees are left with Vaani.

Q5. Classify the objects as standing , sleeping, slanting and curved .



\_\_\_\_\_

\_\_\_\_\_

\_\_\_\_\_

\_\_\_\_\_



Q6. Circle the letters which are made up of only curved lines.

A      C      E      P      O

Q7. Circle the letters which are made up of only with straight lines.

L      M      B      U      D      F      Z

Q8. Manisha has 16 pencils. Sonu has 27 pencils. How many pencils are there in all?

Q9. Nishant has 32 marbles. Sushant has 14 marbles. How many more marbles does Nishant have?

Q10. Write numbers from 0 to 9 by using straight lines only.

CYCLIC TEST- 6 (2022-23)

CLASS II

Sub: EVS

Name:..... Sec:..... Invigilator's sign: .....

---

Q-1 Fill in the blanks with correct words.

- a) ..... delivers the letters. (nurse/ postman)
- b) The teacher in a school sits in a ..... (ground/ staff room)
- c) A lion is a ..... animal. (domestic / wild)
- d) Gita is the holy book of ..... (Sikhs / Hindus)
- e) The ..... defends their country. (soldiers / doctors)

Q-2 Match the following.

- |                                   |            |
|-----------------------------------|------------|
| a) Our national animal            | bullocks   |
| b) Pull carts                     | tiger      |
| c) Carry loads                    | amphibians |
| d) Lives in coop                  | donkey     |
| e) Live both on land and in water | hen        |

Q-3 Write True/ False

- a) Insects have four legs. ....
- b) Actors perform in plays and movies. ....
- c) Muslims go to temple to worship. ....
- d) We learn many new things at school. ....
- e) Land animals are called aquatic animals. ....

Q-4 Answer the questions in one word or one sentence.

a) Name one domestic animal.

.....

b) Who shows funny tricks and makes us laugh?

.....

c) Which is the holy book of Christians?

.....

d) Where does a horse live?

.....

e) How do sheep help us?

.....

Q-5 Who am I ?

a) I am tall and have a very long neck. I am a .....

b) I am small. I make honey and I can fly. I am a .....

c) I design the buildings like homes, schools, malls and others. I  
am a .....

d) I am in the school. I am a room with many books. I am a  
.....

e) I have a shop of medicines. I sell medicines. I am a  
.....

f) Draw

1) A bird

2) An animal

\*\*\*\*\*

