

ATOMIC ENERGY CENTRAL SCHOOL-2 ,RAWATBHATA

CYCLIC TEST-7 (2022-23)

CLASS – II

SUBJECT : ENGLISH

TIME: 1:00 HOUR

NAME : _____ SEC: _____ ROLL NO. _____

SIGN. OF INVIGILATOR: _____ DATE: _____

SIGN. OF EXAMINER: _____

Q1. Answer the following questions.

1. What does the little girl want her granny to do?

2. What did the old women gave Tara?

3. Why did Goopu, Doopu and Furry want to go to Mumbai?

Q2. Fill in the blanks using **a, an or the.**

- Once there was _____ beautiful garden.
- _____ garden had _____ apple tree.
- In the garden , lived _____ big giant.
- _____ giant did not like children to play in _____ garden.

Q3. Make four new words using letters from the word
GRANDPARANTS.

1. _____
2. _____
3. _____
4. _____

Q4. Write the missing letter to complete the words .

Po__idge

M_g_c

V_ll_ge

M_th_r

Q5. Match with the opposite gender.

Mother

Queen

Lion

Grandmother

King

Aunt

Grandfather

Father

Uncle

Woman

Man

Lioness

Q6. Complete the following poem with suitable words.

gentle , please , put , hair , cushion , sit , rub , knees, breeze , little

Granny Granny

_____ comb my _____.

You _____ me to _____ on a _____

Between your _____;

You _____ a _____ coconut oil,

Parting _____ as a _____

Q7. Circle the correct spelling.

World

Wold

Wrold

Musiactn

Musician

Musican

Froest

Forest

Fesort

Hengyr

Hnrugy

Hungry

Q8. Rewrite the following sentences.

Once there was a little girl named Tara. She lived with her mother.

They were very poor. One day she went to the forest.

परमाणु ऊर्जा केंद्रीय विद्यालय # 2, रावतभाटा

Cyclic Test -7

समय - 1 घण्टा

विषय -हिंदी

कक्षा - 2

दिनांक - 14/02/23

नाम - -----

वर्ग - -----

ह० निरी० - -----

प्र०1.नीचे दिए गए शब्दों के आगे चार - चार शब्द लिखे हैं । इन चारों शब्दों में से अलग शब्द पर गोला लगाओ।

बारिश - पानी , गीला , बादल , पटना

घर - दरवाज़ा , खिड़की , साबुन , दीवार

सूरज - धरती , धूप , पसीना , गरमी

प्र०2.कविता में धूप का रंग गोरा बताया गया है। तुम्हें धूप का रंग कैसा लगता है?

प्र०3.कोहरा किस मौसम में छा जाता है?

प्र०4. नीचे लिखे वर्णों से बने शब्द लिखो।

फ़ - -----

फ - -----

प्र०5. नीचे लिखे शब्दों के समान तुकवाले शब्द लिखो।

रात ----- आना -----

गोरी ----- यहाँ -----

प्र०6. दिए गए शब्दों के वचन बदल कर वाक्यों को पूरा करो।

1. इस कमरे में दो ----- हैं। (खिड़की)
2. ----- मैदान में खेल रही हैं। (लड़की)
3. गोविंद तेजी से ----- चढ़ रहा था। (सीढ़ी)
4. गंदी जगह पर ----- भिनभिनाती रहती हैं। (मक्खी)

प्र०7. दर्जी चूहे की किस बात से डर गया ?

प्र०8. अगर पेड़ – पौधे न हो तो क्या होगा?

प्र०9. धूप से बचने के लिए तुम क्या करते हो? तीन वाक्य लिखो।

प्र०10. सुलेख लिखो।

हमें माता - पिता का आदर करना चाहिए।

ATOMIC ENERGY CENTRAL SCHOOL-2 ,RAWATBHATA

CYCLIC TEST-7 (2022-23)

CLASS – II SUBJECT : MATHEMATICS TIME: 1:00 HOUR

NAME : _____ SEC: _____ ROLL NO. _____

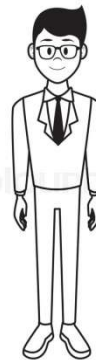
SIGN. OF INVIGILATOR: _____ DATE: _____

SIGN. OF EXAMINER: _____

Q 1. Tick the one having longest footsteps.



shutterstock.com · 133891712



Q 2. Fill in the blanks with correct option.

- a) We use _____ (footspan/finger) to measure table.
- b) _____ (Monkey/Turtle) will take more time to reach the food.
- c) Footspan of a _____ (camel/cat) is longer.
- d) _____ (Finger/Footspan) is used to measure eraser.
- e) Your ear is (4/10) fingers long.

Q 3. Shreya collects the money and writes in her diary. Help Shreya to find out how much money is left at the end of the month.

May 1 — collected Rs.60

May 4 — spent Rs. 45 for water bottle

May 15— collected Rs. 35

May 20 — spent Rs. 28 for a hair band

Total money collected—

Total money spent —

Money left at the end of May —

Q 4. Solve.

1. There are 18 girls and 25 boys in a classroom. Find the total numbers of students.

There are _____ students in a classroom





2. There are 29 rabbits and 36 tortoises in a zoo. Find out how many more tortoise are there.

There are _____ more tortoise

Q 5. Solve.

5 4	6 0	9 9	4 6	7 8	3 9
<u>-2 8</u>	<u>-1 8</u>	<u>-5 0</u>	<u>+3 4</u>	<u>+1 7</u>	<u>+4 5</u>

Q 6. Answer the following questions with the help of the table given.

Toys	No. of toys
	20
	32
	16
	48

a) Draw the toy which is most in number.

b) Draw the toy which is least in number.

c) How many more car is required to make it 50



- a) Draw a kite 4 fingers away from the book.
- b) Draw a hut 2 fingers away from the tree.
- c) Draw a ball 1 finger away from the book.

Atomic Energy Central School No.2, Rawatbhata

Cycle test -7

Class: II

Subject: EVS

Name:_____ Roll no:_____ Invigilators sign:_____

1. Fill in the blanks

- a) _____ need a runway to takeoff and land (aeroplane / boat)
- b) Money plant is a _____ (climber / tree)
- c) A small body of water is called _____(pond / sea)
- d) _____ is the fastest means of transport (Air / Water)
- e) Plants help in making the air _____ (clean / dirty)
- f) Neem is a _____(climber / tree)
- g) _____ is known as the ship of the desert. (Camel / Horse)
- h) _____ contains seeds in them. (Fruit / Roots)
- i) Earth is called _____ planet. (blue / green)
- j) _____ prepares food for the plant. (Leaves / Roots)

2. Give one example

- a) Herbs _____
- b) Land vehicles _____
- c) Aquatic plant _____
- d) Fast moving water transport_____
- e) Roots we eat _____

3. Circle the odd one

- a) Donkey Elephant Dog
- b) Bullock cart Tonga Car
- c) Rose Jasmine Radish

4. Match the following

- | | |
|-----------|----------------|
| Spice | Mustard |
| Oil | Turmeric |
| Medicine. | Land transport |
| Scooter. | Tulsi |

5. Tick the correct answer

- a) The flower of **rose** / **jasmine** is used to make perfume.
- b) **CNG** / **petrol** helps to control air pollution.
- c) A small body of water is called **lake** / **Ocean**

6. Write true / false

- a) A big channel of flowing water is called a river. _____
- b) Fruits do not contain seeds _____
- c) Our earth is round in shape. _____

7. Answer the following

a) Name two things we get from plants?

b) Name different modes of transport?

c) What do astronauts use to travel in space?

Draw:

A plant

A vehicle

--	--

