

**Atomic Energy Central School No.2 Rawatbhata**

**English (Cycle -8) , Session 2022-23**

**Class-I                      Sec\_\_\_\_\_**

Name of Student : \_\_\_\_\_ Date: \_\_\_\_\_

Invigilator's Sign: \_\_\_\_\_ Checker's Sign: \_\_\_\_\_

Q.1 What is the colour of the sky?

---

Q.2 How many colours are there in a rainbow?

---

Q.3 What are the colours of the rainbow?

1. \_\_\_\_\_ 5. \_\_\_\_\_

2. \_\_\_\_\_ 6. \_\_\_\_\_

3. \_\_\_\_\_ 7. \_\_\_\_\_

4. \_\_\_\_\_

Q.4 Who is the Flying –man?

---

Q.5 Who was Appu?

---

Q.6 Where was Kalu's shop?

---

---

Q. 7 Write opposite.

1. Dry X \_\_\_\_\_

2. Happy X \_\_\_\_\_

3. Near X \_\_\_\_\_

4. Up X \_\_\_\_\_

5. Fast X \_\_\_\_\_

Q.8 Fill in the blanks.


1. My name is \_\_\_\_\_.

2. I am \_\_\_\_ years old.

3. I study in class \_\_\_\_\_.

4. My school name is \_\_\_\_\_.

Q.9 Circle the odd one out.



Q.10 Match the following.

- |                                    |              |
|------------------------------------|--------------|
| 1. A person who sails a ship       | a) a tailor  |
| 2. A person who makes clothes      | b) a postman |
| 3. A person who works in school    | c) a sailor  |
| 4. A person who bring letters      | d) a pilot   |
| 5. A person who flies an aeroplane | e) a teacher |

Q.11 Draw a kite and colour in it.

Q.12 Draw an umbrella.

परमाणु ऊर्जा केन्द्रीय विद्यालय # २ रावतभाटा

अभ्यास पत्रक -8 ( 2022- 20 23)

कक्षा – प्रथम विषय – हिंदी

नाम ----- वर्ग----- अनुक्रमांक ----

हस्ताक्षर निरीक्षक ----- हस्ताक्षर परीक्षक -----

प्रश्न1 शब्द पूरे करो ।

टमाट..... ति.....ली किता..... गु.....ब अदर.....

प्रश्न2- चाँद पर जाते समय हलीम को रास्ते में क्या –क्या दिखा होगा ?

१- ..... २- ..... ३- ..... ४- .....

प्रश्न3 - तुम्हें कब-कब डर लगता है ?

१- ..... २- .....

प्रश्न4 चूहे की कितनी पूँछ थी ?

.....

प्रश्न5- चूहे की पूँछ किसने काटी ?

उ- .....

प्रश्न6 तुम कहाँ जाना चाहते हो और कैसे जाना चाहोगे ?

कहाँ

कैसे

१- .....

१- .....

प्रश्न7 -ऊँट की गर्दन खूब-खूब लंबी होती तो -

.....

.....

प्रश्न8- नीचे दिए गए शब्दों को उनके अर्थ से मिलाओ ।

हौदा

पहाड़

पगगड़

शरीर

पर्वत

पगड़ी

देह

सवारी के लिए

प्रश्न9 हाथी के बारे में चार वाक्य लिखो ?

१.....

२.....

३.....

४.....

प्रश्न 10- चाँद और सूरज का चित्र बनाओ ।

.....

.....

Atomic Energy Central School No.2, Rawatbhata

Cyclic Test -8

Class-I

Sub: Mathematics

Time : 1 Hour

Name : \_\_\_\_\_ Roll No. \_\_\_\_\_ Date: \_\_\_\_\_

Sign: of invigilator \_\_\_\_\_ Sign. of Examiner: \_\_\_\_\_

Q1. How many tens and ones are there?



| Tens | Ones |
|------|------|
|      |      |



| Tens | Ones |
|------|------|
|      |      |



| Tens | Ones |
|------|------|
|      |      |



| Tens | Ones |
|------|------|
|      |      |



| Tens | Ones |
|------|------|
|      |      |



| Tens | Ones |
|------|------|
|      |      |

Q2. Draw bundles and ones for the given numbers.

a.46

|        |        |
|--------|--------|
| 4 tens | 6 ones |
|--------|--------|









b. 38

|        |        |
|--------|--------|
| 3 tens | 8 ones |
|--------|--------|

Q3. Write the missing numbers.

|    |    |    |    |    |    |    |    |    |     |
|----|----|----|----|----|----|----|----|----|-----|
| 51 |    | 53 |    | 55 |    | 57 |    | 59 | 60  |
| 61 | 62 |    | 64 |    | 66 |    | 68 |    | 70  |
| 71 |    | 73 |    | 75 |    | 77 |    |    | 80  |
| 81 |    |    | 84 |    | 86 |    | 88 |    | 90  |
| 91 |    | 93 |    | 95 |    | 97 |    |    | 100 |

Q4. Match the notes and coins with their values.

|       |   |          |
|-------|---|----------|
| (i)   |  | 1. ₹ 100 |
| (ii)  |  | 2. ₹ 5   |
| (iii) |  | 3. 50p   |
| (iv)  |  | 4. ₹ 500 |
| (v)   |  | 5. ₹ 10  |
| (vi)  |  | 6. ₹ 50  |

Q5. Make the given amount using different combination of coins.



4 rupees –

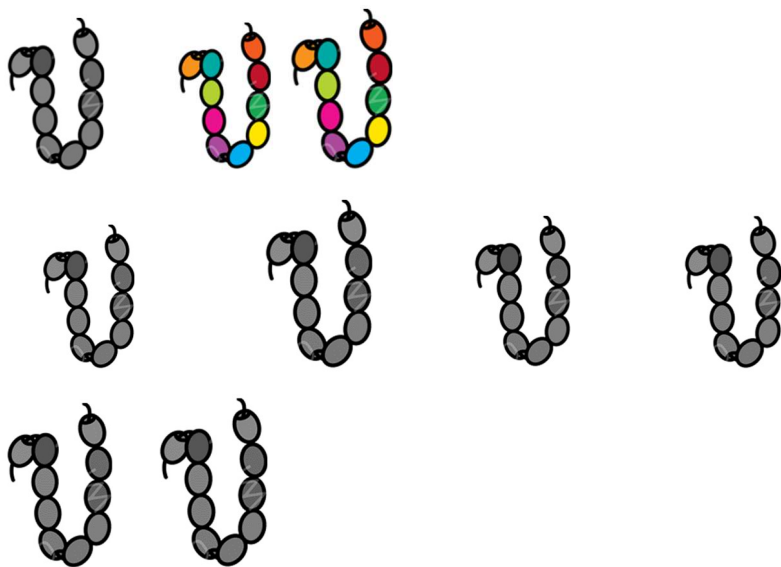
4 rupees-

6 rupees-

7 rupees-

7 rupees-

Q6. How many beads?



Q7. Write the number name.

|    |  |
|----|--|
| 45 |  |
| 26 |  |
| 38 |  |
| 54 |  |
| 68 |  |
| 76 |  |
| 81 |  |
| 99 |  |

Q8. Circle the biggest number.

|    |    |    |    |    |
|----|----|----|----|----|
| 43 | 66 | 59 | 23 | 40 |
| 10 | 13 | 26 | 33 | 43 |
| 30 | 20 | 50 | 10 | 40 |
| 63 | 81 | 56 | 97 | 70 |
| 10 | 12 | 20 | 24 | 19 |
| 62 | 74 | 41 | 59 | 53 |

**ATOMIC ENERGY CENTRAL SCHOOL NO.2 RAWATBHATA**

**CLASS- I EVS**

**CYCLE TEST-8 2022-23**

**NAME-\_\_\_\_\_ SEC.- \_\_\_\_\_ Roll No.**

**Q.1.Choose the correct word to fill in the blanks.**

- 1.Boats travel in \_\_\_\_\_.(air/water)
- 2.\_\_\_\_\_ is a means of air transport. (Aeroplane /Car)
- 3.At night, we see \_\_\_\_\_in the sky.(Sun/Moon)
- 4.We use \_\_\_\_\_to travel from one place to another.(vehicle/air)
- 5.\_\_\_\_\_is a type of land transport.(Car/Ship)

**Q.2.Write 'YES' or 'NO' for the following.**

- 1.Do you see stars at night ?\_\_\_\_\_
- 2.Is there only one Sun ?\_\_\_\_\_
- 3.Do you see moon during the day ?\_\_\_\_\_
- 4.Does sky change its colour ?\_\_\_\_\_
- 5 Do we see rainbow everyday ?\_\_\_\_\_

**Q. Answer the following questions.**

1. In which direction does the Sun rise ?

Ans. \_\_\_\_\_

2. In which direction does the sun set ?

Ans. \_\_\_\_\_

3. What is the shape of the earth ?

Ans. \_\_\_\_\_

4. From where do the rivers flow ?

Ans. \_\_\_\_\_

5. What is the Earth covered with?

Ans. \_\_\_\_\_

**Q. Write two ways to protect our Earth and keep it beautiful.**

Ans. 1 \_\_\_\_\_

2 \_\_\_\_\_


**Q. Give two examples of each.**

1. Air transport: \_\_\_\_\_ and \_\_\_\_\_


2. Water transport : \_\_\_\_\_ and \_\_\_\_\_

3. Land transport : \_\_\_\_\_ and \_\_\_\_\_

**Q. Identify the picture and write its name.**



**Q. Write the four main directions in the box.**



**Q.Colour the rainbow.**

