

ATOMIC ENERGY CENTRAL SCHOOL NO-2, RAWATBHATA

PERIODIC TEST-1 (2022-23)

Subject: ENGLISH

Class-IV Section: _____ Date- _____

Name of the student: _____ Roll No- _____

Invigilator's Sign: _____ Time- 90 Minutes

Examiner's Sign: _____ MM: 40 MO: _____

Section -A Knowledge (18marks)

A.1-Choose the correct word and fill in the blanks. (1x3=3)

a) What time did Neha's clock ring every morning?

- 1) 4 o' clock 2) 9 o' clock 3) 6 o' clock 4) 5 o' clock

b) The gold leaves of the fir tree were _____ by someone.

- 1) Eaten 2) stolen 3) hidden 4) seen

c) Shooting with a bow and borrow is called _____

- 1) Archery 2) basketball 3) tug of war 4) kho-kho

A.2-Write one word for the given sentences. (1X2=2)

1) The goal intended to be hit-_____ (bow/target)

2) A piece of land covered with grass _____ (island/meadow)

A.3-Who am I? (1)

1) I have needle like leaves and no nests for birds-

Ans) _____

A.4-Answer the following question in one word. (1)

One who plays the magic tricks is called a

A.5-Write True/ False (1)

Aileen Fisher has written the poem 'Noses'-

A.6-Who said to whom? (1)

This wasn't my aim.

Ans. _____ said to _____

A.7-Short answer questions.

Give the answer in one sentence. (1x3)

a) What did Nasruddin boast about?

Ans-

b) Do you like to play and run?

Ans-

c)Who are already awake in the poem Wake up?

Ans-

A.8-Frame two questions using 'Why'. (1x2=2)

1- _____

2- _____

A.9- Fill in the gaps with ee/ea (½ x2=1)

a) f _ _ t

b) t _ _ ch

A.10- Rearrange the letters to make meaningful words.

(1x2=2)

a) wodwin - _____

b) mrala- _____

A.11- Rewrite by changing the underlined word to opposite. (1)

a) The old man is wise.

Ans- _____

Section B Understanding (12 marks)

Read the passage and answer the questions followed by that.

Penguins are among the most popular of all birds. They only live in and around the South Pole in the continent of Antarctica. There are 17 different kinds of penguins and none of them can fly. The largest penguin is called the Emperor Penguin and the smallest kind of penguin is the Little Blue Penguin.

Penguins spend as much as 75% of their time underwater, searching for food in the ocean. When they are in the water, they dive and flap their wings. They are great swimmers and have thick layers of fat to protect them from the bitter cold.

B.1-Tick the correct answer. (1x2=2)

Q-1 Penguins only live in and around _____

- a) The North Pole
- b) Antarctica
- c) The South Pole and the continent
- d) Asia

Q.2- The largest penguin is called the _____

- a) Macaroni
- b) Little Blue
- c) Emperor
- d) Shinnu

B.2-Choose the correct answer. (½ x4=2)

1) Penguins spend _____ time underwater. (75%/35%)

2) There are _____ different kinds of penguins. (50/17)

3) The smallest penguin is called the _____ penguin. (Tiniest/
Little Blue)

4) Penguins search their food in the _____
(ocean/ wells)

B.3- Find two describing words from the passage and write.
(½ x 2=1)

a) _____ b) _____

Read the poem carefully and answer the questions.

I live in a town, in a street,

It's crowded with traffic, and feet.

There are buses and motors, and trams,

I wish there were meadows and lambs.

The houses all wait in a row,

There is smoke everywhere that I go.

I don't like the noises I hear,

I wish there were woods very near.

There is only one thing that I love,

And that is the sky far above.

There is plenty of room in the blue.

For castles of clouds and me too!

B.4-Tick the correct answer. (1x2=2)

1) The town in which the child lives is _____ with traffic.

- a) Crowded
- b) Deserted
- c) Silent
- d) Less populated

2) In the town the child wishes for _____.

- a) Classmates
- b) Airport
- c) Meadows and lambs
- d) Buses and trams

B.5- Write two pairs of Rhyming words from this poem.

($\frac{1}{2} \times 4 = 2$)

- a) _____ - _____
- b) _____ - _____

B.6- What is the one thing the child loves about his/her place?

(1)

Ans _____

B.7- Number the sentences in correct order. ($\frac{1}{2} \times 4 = 2$)

- A) The Fir tree had needle like leaves.
- B) The Fir tree had gold leaves.
- C) The Fir tree had green leaves.
- D) The Fir tree had glass leaves.

Ans.1 _____

2 _____

3 _____

4 _____

Section C Application 10 Marks

C.1- Do as directed.

Look at the word in the middle and write four things related to it.
(1/2 x 4=2)

Clock

C.2- Circle the odd one. (1/2 x 4=2)

a) bow arrow archery golf

b) meet tease feet sleep

c) lucky heavy gate early

d) in behind nicely under

C.3- Correct the sentences and rewrite. (1x2=2)

a) My toys was broken.

Ans.

b) Shetty was a doctor.

Ans. _____

C.4- Make meaningful sentences using the words given below. (1x2=2)

a)needle_____

b)country- _____

C.5- Combine the pairs of sentences using the words given below. (1x2=2)

and, but

a) Mohan plays hockey. He also plays basketball.

Ans._____

b) Everyone has gone to sleep. I want to read my book.

Ans._____

परमाणु ऊर्जा केन्द्रीय विद्यालय क्रमांक – 2, रावतभाटा

सामयिक परीक्षा – 1 (2022 – 2023)

विषय हिन्दी कक्षा – चौथी

समय – 1घंटा 30 मिनट

पूर्णांक 40

नाम —————

वर्ग ———

अनुक्रमोंक ———

ह0 निरीक्षक ———

ह0 परीक्षक ———

ह0 जाँचकर्ता ———

वाचन

1 x 5 =5

प्रश्न १ निम्नलिखित गद्यांश को ध्यानपूर्वक पढ़कर नीचे लिखे प्रश्नों के उत्तर दीजिए।

गर्मी की छुट्टियाँ थीं। दोपहर के समय दिनेश घर में बैठा कोई कहानी पढ़ रहा था। तभी पेड़ के पत्तों को हिलाती हुई कोई वस्तु धम से घर के पीछे वाले बगीचे में गिरी। दिनेश आवाज़ से पहचान गया कि वह वस्तु क्या हो सकती है। वह एकदम से उठकर बरामदे की चिक सरका कर बगीचे की ओर भागा।

“ अरे बेटा, बेटा कहाँ जा रहे हो? बाहर लू चल रही थी।” दिनेश कि माँ मशीन चलाते-चलाते एकदम ज़ोर से बोली।

(क) कौन - सी छुट्टियाँ चल रही थी?

.....

(ख) वस्तु कहाँ गिरी थी ?

.....

(ग) बाहर क्या चल रही थी ?

.....

(घ) दिनेश की माँ क्या चला रही थी ?

.....

(ङ) समान अर्थवाला शब्द लिखो - वस्तु -----
विलोम शब्द लिखो - गर्मी -----

प्रश्नर निम्नलिखित गद्यांश को ध्यानपूर्वक पढ़कर नीचे लिखे प्रश्नों के उत्तर दीजिए।
1x5=5

भारत विविधताओं का देश है। यहाँ अनेक ऋतुएं देखने को मिलती हैं। यहाँ बारी बारी से छः ऋतुओं का चक्र चलता रहता है, गर्मी, वर्षा, शरद, हेमंत, शिशिर और बसंत। प्रत्येक ऋतु का समय लगभग दो महीने का होता है। यहाँ एक ही समय पर देश के विभिन्न भागों में अनेक ऋतुओं के दर्शन होते हैं। एक ओर जहाँ चेरापूंजी में संसार की सबसे अधिक वर्षा होती है, तो दूसरी ओर राजस्थान के रेगिस्तानी भूमि पर कहीं-कहीं साल में एकबार भी वर्षा नहीं होती है।

(क) भारत में कितनी ऋतुओं का चक्र चलता है ?

.....

(ख) संसार की सबसे अधिक वर्षा भारत में किस स्थान पर होती है ?

.....

(ग) प्रत्येक ऋतु कितने महीने की होती है?

.....

(घ) साल में एक बार भी वर्षा कहाँ पर नहीं होती है ?

.....

(ड) छः ऋतुओं के नाम लिखो।

.....

पाठ्य पुस्तक पर आधारित प्रश्न

प्रश्न३ निम्नलिखित प्रश्नों के उत्तर लिखो ।

(क) साल के किन-किन महीनों में ज़्यादा बादल छाते हैं ? (1)

.....

.....

(ख) दिनेश को यह बात कैसे पता चली कि गेंद दीपक की हो ही नहीं सकती ? (2)

.....

.....

.....

(ग) जमाल साहब अपने मामूली से कपड़ों में घूमने क्यों नहीं जाना चाहते होंगे?

(2)

.....

.....

प्र.1 वाक्य में से सर्वनाम शब्द छाँटकर लिखो ।

“बड़े होकर तुम क्या बनना चाहते हो?”

प्र.2 नीचे लिखे शब्द का समानार्थक शब्द लिखो ।

कोशिश

प्र.3 मुहावरे का अर्थ लिखो -

ईद का चाँद होना

प्र.4 विलोम शब्द लिखो ।

असली

प्र.5 वाक्य के लिए एक शब्द लिखो ।

जिस जगह पर चार राहें मिलती हैं

प्र.6 वाक्य में से विशेषण छाँटकर लिखो ।

मोहन के पास एक लाल किताब है ।

प्र.7 क्रिया शब्द को छाँटकर लिखो ।

दिनेश कहानी की किताब पढ़ रहा था ।

प्र.8 बहुवचन बनाओ ।

सब्जी.....

प्र.9 वाक्य बनाओ

सजा

सज़ा

प्र.10 लिंग बदलो |

अभिनेता

रचनात्मक लेखन पर आधारित प्रश्न

1X5 =5

बीरबल के बारे में पांच वाक्य लिखिए |

उत्तर.....

.....

.....

.....

.....

.....

वर्तनी पर आधारित प्रश्न

1X5 =5

1. सही शब्द पर गोला लगाओ-

स्वागत

सवागत

स्वगत

2.अशुद्ध शब्द को सही करके लिखो-

इमानदारी

3.नीचे दिए गए अधूरे शब्दों को पूरा करो ।

तू शै

4.उपयुक्त शब्द पर चंद्रबिंदु लगाओ ।

चादनी धधा पकज

5.दिए गए वाक्य को सही करके दुबारा लिखो -

मेरे को आम खाना पसंद है।

सुलेख

(5)

एक कहावत है कि यदि एक पुरुष शिक्षित होता है, तो परिवार शिक्षित होता है ।

किन्तु जब एक नारी शिक्षित होती है, तो परिवार ही नहीं अपितु एक पीढ़ी

शिक्षित और सजग हो जाती है । यह सत्य है कि एक महिला को पढ़ने से रोक

दिया जाता है, तो इससे राष्ट्रीय विकास रुक जाता है।इसलिए हमें नारी को शिक्षित

करना बहुत जरूरी है ।

.....

.....

.....

.....

.....

.....

.....

.....

ATOMIC ENERGY CENTRAL SCHOOL NO.2 RAWATBHATA

Periodic Test – 1 (2022-23)

Subject: Mathematics

Class – IV

Section: _____

Date: 25/07/2022

Name of the student: _____

Roll No: _____

Invigilator's sign: _____

Time: 90 minutes

Examiner's sign: _____

MM: 40 MO: _____

CONCEPT KNOWLEDGE (10)


Q1. Multiple choice questions.

4


- 1) One hour is equal to _____ minutes.
a) 50 b) 66 c) 60 d) 6
- 2) 2 km is equal to _____ metres.
a) 200 b) 20 c) 2000 d) 2200
- 3) Each minibus can take _____ students.
a) 40 b) 44 c) 30 d) 35
- 4) There are _____ hands in a clock.
a) two b) four c) one d) three

Q2. Show the following times in the clock.

2



5:15



11:45

Q3. Add the following.

2

50 metres 35 centimetres
+ 25 metres 40 centimetres

33 metres 20centimetres
+ 12 metres 16 centimetres

Q4. Draw two jaali patterns.

2

UNDERSTANDING (10)

Q5. Fill in the blanks.

2

a) Write the name of the month here. 10/11/2009

 b) 650 m + _____ m = 1 kilometre

Q6. Following are given some dates. Arrange them in a calendar order.

2

15 April 2009

10 December 2009

7 June 2009

25 March 2009

a) _____

b) _____

c) _____

d) _____

Q7. Using a ruler, draw lines of following measurements.

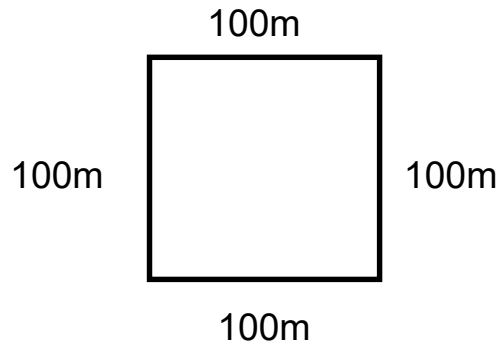
2

a) 5.5 cm

b) 7.4 cm

Q8. 5 students run around a playground, which is as shown below.

4



Number of rounds completed by each student are as follows:

Name of student	Number of rounds
Chirag	1
Sahil	4
Reena	3
Komal	3
Priyal	2

a) What is the total boundary of the playground?

b) What is the total distance ran by Sahil?

c) How much distance more has Priyal ran as compared to Chirag?

d) What is the total distance ran by Komal and Reena?

ABILITY TO COMPUTE (10)

Q9. Fill in the blanks.

2

a) One Lakh = _____ hundred.

b) In a 6000 metre race people run _____ km.

Q10. A tower is made using 1000 bricks. If the cost of each brick is Rs 6, find out the cost of 1000 bricks.

2

Q11. Dhanu has the longest jump of 3 metres 40 centimetres. Gurjeet is second. His jump is 20 cm less than Dhanu's. Gopi comes third. His jump is only 5 cm less than Gurjeet's jump.

2

How long are Gurjeet's and Gopi's jumps?

Q12. There are different kinds of boats. Each has a different ticket price, and also different trip times.

4

Name of the boat	Ticket-price	Trip-time
Double-decker	Rs 30	45 minutes
Paddle-boat	Rs 15	30 minutes
Motor-boat	Rs 25	20 minutes
Boat with oars	Rs 15	45 minutes

a) Ravi and Monu first went in the Paddle-boat, and then took Motor-boat. How much did they pay for both the boats?

b) Which boat takes less than half an hour to complete a trip?

c) Which boat makes two trips in 40 minutes?

d) One group of children went for Paddle-boat trip. They paid Rs 300 in total. How many children went for Paddle-boat?

PROBLEM SOLVING ABILITY (10)

Q13. Answer the following.

2

a) $2 \times 5 \times 7 = \underline{\hspace{2cm}}$

b) The sum of 8 and 37 is .

Q14. Cost of 500 bricks is Rs 150. What is the cost of 2000 bricks?

2

Q15. The cost of 1 liter petrol is Rs 80. What is the cost of 4 liters of petrol?

2

Q16. Draw the hands to show the given time-

a) 30 minutes after 9 o' clock



b) 15 minutes after 12 o'clock



c) 20 minutes after 4 o'clock



d) 10 minutes after 6 o' clock



ATOMIC ENERGY CENTRAL SCHOOL NO.2, RAWATBHATA

Periodic Test -1 (2022-23)

Subject : EVS

CLASS -IV Section : _____ Date : 26/07/2022

Name of the student : _____ Roll no: _____

Invigilator's sign: _____ Time – 90 mins

Examiner's sign : _____ MM: 40 MO:_____

KNOWLEDGE (16 marks)

I .Choose the correct answer and fill in the blanks. (5)

1.Animals that are no more on the earth are called _____
animals . (extinct /endangered)

2. Animals have pattern on their body due to _____
on their body . (ear / hair)

3.Khejadi tree is mostly found in _____ areas .
(desert / coastal)

4.Rearing of honey bees is called _____.
(sericulture / apiculture)

5. A _____ elephant live in a herd till it is 14 -15 years old.
(male / female)

II. Identify the picture and write one sentence about it (3)







shutterstock.com • 717232090

III. Write answer in one sentence .

(5)

a) What is a pulley?

_____.

b) What is a Vallam ?

_____.

c) Where did Amrita live ?

_____.

d) When do honey bees lay eggs ?

_____.

e) What was Anita's dream?

_____.

IV . Write three sentences about any one of the following .(3)

Khejadi tree


or

Elephant herd

UNDERSTANDING (14Marks)

V. Match the following.

(5)



VI. Name the following.

(5)

1.Honeybees are attracted to flowers of this tree.

2. Animals that have ears on either side of head .

3. Insects that live together in groups .

4 A place where pulley is used .

5 .Animals that lay eggs .

VII.Answer the following in atleast two sentences . (4)

a) What type of animals give birth to the babies ?

_____.

b) What do you think about RTE act 2009 ?

Application (10 MARKS)

VIII. Circle the odd one out . (3)

- | | | | |
|----------------|---------|-----------|-------|
| a) Mazzafarpur | Bochaha | Khejadli | Bihar |
| b) Lizard | cow | crocodile | frog |
| c) Vallam | trolley | pulley | jugad |

IX .Give reason. (3)

1.Bamboo bridge is used in Assam .

2.It is difficult to walk on snow .

**X. On the outline map of India mark the following states/
Union territory. (4)**

1. Assam

2. Bihar

3. Rajasthan

4) Ladakh

