

**ATOMIC ENERGY CENTRAL SCHOOL No.-2, RAWATBHATA**

**Periodic Test – 1 (2022-23)**

**Subject: ENGLISH**

**Class – V**

**Section: \_\_\_\_\_**

**Date: \_\_\_\_\_**

**Name of the student: \_\_\_\_\_ Roll No: \_\_\_\_\_**

**Invigilator's sign: \_\_\_\_\_ Time – 90 Minutes**

**Examiner's sign: \_\_\_\_\_ MM: 40 MO: \_\_\_\_\_**

---

**SECTION A : KNOWLEDGE (10 MARKS)**

A.1. Fill in the blanks. (2 Marks)

a) The hunter was able to climb the tree with the help of a \_\_\_\_\_.

i) creeper

ii) rope

iii) ladder

b) Robinson was amazed to see a \_\_\_\_\_.

i) cave

ii) footprint

iii) castle

A.2. Write another word for. (2 Marks)

1) survey - \_\_\_\_\_ (narration, elocution ,examine)

2) occupied - \_\_\_\_\_ (inhabited, savaged, investigated)

A.3. Answer in one word/phrase. (2 Marks)

1) What was the name of Rip's dog? \_\_\_\_\_

2) What is the ice-cream cart compared to in the poem? \_\_\_\_\_

A.4. Answer the following questions.

(2 Marks)

1. Why did the Maharaja go into the kitchen in the afternoon?

---

---

2. Why do you think your shadow jumps into bed before you can?

---

---

A.5. Long answer question.

(2 Marks)

Write four sentences about ‘the wise old goose’.

---

---

---

---

### **SECTION B : UNDERSTANDING (20 MARKS )**

B.1. Read the story and answer the following questions.

“Oh! Where am I?” I exclaimed. Then I remembered everything. I was a 13 year old boy and my name was Rajesh. When I was testing my rocket, I had mistakenly pressed the ‘Launch’ button and with my dog, Cookie I got launched up by my rocket and now I was somewhere in the solar system. My rocket was in fine condition. But... where was my fluffy young dog? I looked around.

Then I searched for my dog and what I saw was unbelievable. Cookie was wearing a spacesuit and was floating outside the rocket and having great fun.

I called him aloud. “Cookie, come back at once!” But he gave no response. I thought he was ignoring me. I wondered how a dog could ignore his master! But it was my foolishness to think. I got to know later that he was not able to hear anything.

A little later, I stepped outside the rocket wearing my spacesuit. I must say it was very difficult to wear it. I was amazed at how my dog must have worn it. Anyway I went out and brought my dog back. I was sure that Cookie was angry with me but I didn’t let him have his way.

1. Answer the following questions. (2 Marks)

a) How old was Rajesh?

---

b) What was Cookie doing?

---

2. Find words that describe the following. (1Mark)

a) The rocket was in a \_\_\_\_\_ condition.

b) Cookie was a \_\_\_\_\_ dog.

3. Find one word for.

(2 Marks)

1. refuse to pay attention to - \_\_\_\_\_

2. Start or set in motion - \_\_\_\_\_

3. Surprised - \_\_\_\_\_

4. A garment designed to allow an astronaut to survive in space - \_\_\_\_\_

B.2. Read the poem.

What a bird thought

I lived first in a little house,  
And lived there very well;  
The world to me was small and round  
And made of pale-blue shell.

I lived next in a little nest,  
Nor needed any other;  
I thought the world was made of straw,  
And covered by my mother.

One day I fluttered from the nest,  
To see what I could find.  
I said, "The world is made of leaves;  
I have been very blind."

At last I flew beyond the tree,  
And saw the sky so blue;  
Now, how the world is really made  
I cannot tell – can you?

1 Write rhyming words from the poem: (1 Mark)

a) Well - \_\_\_\_\_

b) Find - \_\_\_\_\_

2 Find words that mean the following. (2 Marks)

a) Light in colour or shade - \_\_\_\_\_

b) Fly unsteadily by flapping wings - \_\_\_\_\_

3 Answer the following questions. (2 Marks)

1. What do you think was really the first ‘pale – blue’ house of the bird?

---

---

2. What did the bird see when he came out of the nest the first time?

---

---

B.3. Sudha wrote down the recipe for making an ice - cream but she wrote it in the wrong order. Help her to put it in the correct order. Use the words given in the box.

(5 Marks)

First, Then, Next, After that, Finally
--

- Put some fluffy whipped cream on top of the cone.
- Start by placing one scoop of your favorite ice cream into a cone.
- Pour some crushed chocolate on the ice cream.
- Add a second scoop of a different ice cream flavor to the cone.
- Plop a bright, red cherry at the very top.

1. \_\_\_\_\_
2. \_\_\_\_\_
3. \_\_\_\_\_
4. \_\_\_\_\_
5. \_\_\_\_\_
6. Your ice-cream is now ready to eat.

B.2. Complete this conversation between Yuvraj and Ranjit.

(5 Marks)

Saturday	Would	Ranjit	good	Definitely
----------	-------	--------	------	------------

Yuvraj: Hello, can I speak to Ranjit please?

Ranjit: This is Ranjit.

Yuvraj: Hi, \_\_\_\_\_. This is Yuvraj. How are you?

Ranjit: I'm good. I was wondering if you were free this \_\_\_\_\_?

Yuvraj: Yes, I am. \_\_\_\_\_ you like to do something?

Ranjit: Yes, I was thinking of going to the new Amusement park.

Yuvraj: \_\_\_\_\_! When should we meet?

Ranjit: How about at the gates of the park at about 10:00 am.

Yuvraj: Sounds \_\_\_\_\_! See you there!

### **SECTION C : APPLICATION ( 10 MARKS )**

C.3. Do as directed. (10 Marks)

1. Fill in the blanks:-

a) The class-monitor yelled, "friends, listen to me \_\_\_\_\_. (care/ carefully)

b) The baby woke up \_\_\_\_\_ and cried, "Mumma!"

(sudden/suddenly)

2. Circle the proper noun in the given sentence –

a) She is planning to climb Mt. Everest.

b) Salman Khan is a famous actor.

3. Rearrange the sentences –

a) was afraid I now.

---

b) footprint to someone this belonged.

---

4. Add 'er' in the given words –

a) Tasty - \_\_\_\_\_

b) clean - \_\_\_\_\_

5. Write the full form for given contractions –

a) shan't - \_\_\_\_\_

b) aren't - \_\_\_\_\_

6. Underline the adjectives in following sentences.

a) My mother gave me a beautiful frock.

b) Pt. Jawahar Lal Nehru was the most famous prime minister of India.

7. Fill in the blanks with the correct answer.

a) The doctor is \_\_\_\_\_ duty. (on/in)

b) The train is going \_\_\_\_\_ the tunnel. (through/across)

8. Write the comparative and superlative degree of –

a) huge - \_\_\_\_\_ , \_\_\_\_\_

b) beautiful - \_\_\_\_\_ , \_\_\_\_\_

9. Fill in the blanks given below with question words:

a) \_\_\_\_\_ do you live?

b) \_\_\_\_\_ is your father?

10. Join the given sentences by using the given joining words.(but, or, because)

a) She wants to play chess with me. I don't like that game.

\_\_\_\_\_

b) We may go to Shimla. We may go to Darjeeling.

\_\_\_\_\_



ATOMIC ENERGY CENTRAL SCHOOL NO.2, RAWATBHATA

Periodic Test – 1(2022 -23)

Subject : Hindi

Class : V

Section: \_\_\_\_\_

Date:22/7/2022

Name of the student: \_\_\_\_\_

Roll No. \_\_\_\_\_

Invigilator's sign: \_\_\_\_\_

Time – 90 Minutes

Examiner's sign: \_\_\_\_\_

MM: 40 MO: \_\_\_\_\_

1 . अपठित गद्यांश को पढ़कर उत्तर लिखो। (5)

एक मुसाफिर कहीं जा रहा था। अपनी प्यास बुझाने वह कल - कल बहती नदी के पास पहुंचा । पानी पीने के बाद उसने नदी से पूछा "हे नदी! तुम इतनी छोटी हो , किंतु तुम्हारा जल कितना शीतल और मीठा है । वह सागर इतना विशाल है, परंतु उसका जल खारा है। इसका कारण क्या है?" आगे बहती नदी बोली -"मेरे पास फुरसत नहीं है । यह बात सागर से ही जाकर पूछो ।" गरजते हुए विशाल सागर के पास जाकर मुसाफिर ने वही प्रश्न पूछा। सागर ने कहा - "नदी दिन- रात दौड़ लगाती है । अपना जल दूसरों को देती है, अपने पास कुछ नहीं रखती। मैं जमा करता हूं, देता कुछ नहीं। इस कारण मेरा पानी खारा है।

क) नदी के पास प्यास बुझाने कौन आया?

-----

ख) मीठा और शीतल जल किसका होता है?

-----

ग) नदी अपना सब कुछ किसको देती है?

-----

घ) गद्यांश से "पानी" का समनार्थी शब्द ढूँढकर लिखो ।

-----

ङ) विलोम शब्द लिखो।

दिन -----

2. पठित गद्यांश को पढ़कर उत्तर लिखो।

(5)

झारखण्ड में सरहुल बड़े जोशों - खरोश के साथ मनाया जाता है।

चार दिनों तक इसका जश्न चलता रहता है।

अलग-अलग जनजातियाँ इसे अलग-अलग समय में मनाती हैं।

संथाल लोग फरवरी - मार्च में, तो औराँव लोग इसे मार्च- अप्रैल में मनाते हैं। आदिवासी आमतौर पर प्रकृति की पूजा करते हैं । सरहुल

के दिन विशेष रूप से 'साल' के पेड़ की पूजा की जाती है । यही

समय है जब साल के पेड़ों में फूल आते हैं और मौसम बहुत ही खुशनुमा हो जाता है । स्त्री -पुरुष दोनों ही ढोल - मंजीरे लेकर रात भर नाचते- गाते हैं ।

क) सरहुल का त्योहार कहाँ मनाया जाता है ?

---

---

ख) सरहुल का जश्न कितने दिनों तक चलता है?

---

---

ग) आदिवासी किसकी पूजा करते हैं?

---

---

घ)साल के पेड़ की पूजा किस - दिन की जाती है?

---

---

ङ) स्त्री- पुरुष दोनों क्या लेकर रात भर नाचते-गाते हैं?

---

---

3. दिए गए प्रश्नों के उत्तर लिखो । (3)

१. मंत्री ने अपने बेटे को शहर क्यों भेजा?

---

---

---

२. 'खिचड़ी' का क्या अर्थ है ?

---

---

---

३. राम, कौशल्या और ताड़का किस प्रसिद्ध कथा के पात्र हैं ?

---

---

---

4. चार अनाजों के नाम लिखो। (2)

-----

-----

5. तुम्हें रामचन्द्र जी के बारे में कौन-कौन सी बातें अच्छी लगीं? कोई भी दो बातें लिखो। (2)

-----

-----

-----

-----

6. फ़सल के त्योहार पर 'तिल' का बहुत महत्त्व होता है। तिल का किन-किन रूपों में इस्तेमाल किया जाता है? (2)

-----

-----

-----

-----

7. नीचे लिखी संज्ञाएँ किन क्रियाओं से बनी हैं – (2)

चुनाव = \_\_\_\_\_

लगाव = \_\_\_\_\_

8: नीचे दी गई संज्ञाओं का वर्गीकरण दी गई दो प्रकार की संज्ञाओं में करो - (2)

लेह            धातु            शेरवानी            भोजन

तांबा            खिचड़ी            शहर            वेशभूषा

व्यक्तिवाचक	जातिवाचक

9. नंदू को बोलने वाली गुड़िया चाहिए। इस वाक्य से क्रिया शब्द छांटकर लिखो। (1)

\_\_\_\_\_

10: दिए गए वाक्यों को अपने शब्दों में लिखो। (2)

क) "आज ई लोग के उठे के नइखे का?"

-----

ख) चैन से जिंदगी चल रही थी।

-----

11 : केशव के बारे में दो वाक्य लिखो। (2)

-----

-----

-----

-----

12 : शुद्ध शब्द पर गोला लगाओ। (2)

नक्कसी    नकाशी    नक्काशी    नकासी

तिब्बत    तिबत    तीबत    तीब्बत

13 : समान तुक वाले शब्द लिखो। (1)

साड़ी \_\_\_\_\_

रेल \_\_\_\_\_

14: दिए गए शब्दों के अर्थ लिखो- (2)

यकीन \_\_\_\_\_

फ़नकार \_\_\_\_\_

15: नीचे दिए गए भाव कविता की जिन पंक्तियों में आये हैं, उन्हें लिखो:

क) खिलौनेवाला साड़ी नहीं बेचता है। (2)

-----

-----

16: 'खिलौनेवाला कविता' में खिलौनेवाला बहुत सारे खिलौने बेचता है।  
उनमें से कोई भी दो खिलौनों के चित्र बनाओ। (2)

--	--

17: सुलेख लिखो। (3)



तिब्बत की हवा में नमी बहुत कम है। इस वजह से यहां बरसात और बर्फबारी कम होती है। खुश्क मौसम में पेड़-पौधे बहुत नहीं होते हैं। तिब्बत का पूर्वी भाग ही ऐसा है जहां घने जंगल पाए जाते हैं।

-----

-----

-----

-----

-----

Periodic Test – 1 (2022-23)

Subject: Mathematics

Class – V

Section: \_\_\_\_\_

Date: 23/07/2022

Name of the student: \_\_\_\_\_

Roll No: \_\_\_\_\_

Invigilator's sign: \_\_\_\_\_

Time – 90 Minutes

Examiner's sign: \_\_\_\_\_

MM: 40 MO: \_\_\_\_\_

---

Section A (10 Marks)

Q1. Fill in the blanks.

(6 M)

- a. 1 crore = \_\_\_\_\_ lakh.
- b. Perimeter of a rectangle = \_\_\_\_\_ x (Length + Breadth)
- c. We use a protractor to measure an \_\_\_\_\_
- d.  $\frac{1}{5}$  of 600 rupees = \_\_\_\_\_ rupees.
- e. If a boat covers 6 km in a hour, how much distance will it cover in 3 and a half hour. \_\_\_\_\_ km
- f. An angle which is more than 90 and less than 180 is called an \_\_\_\_\_ angle.

Q2. Do the following.

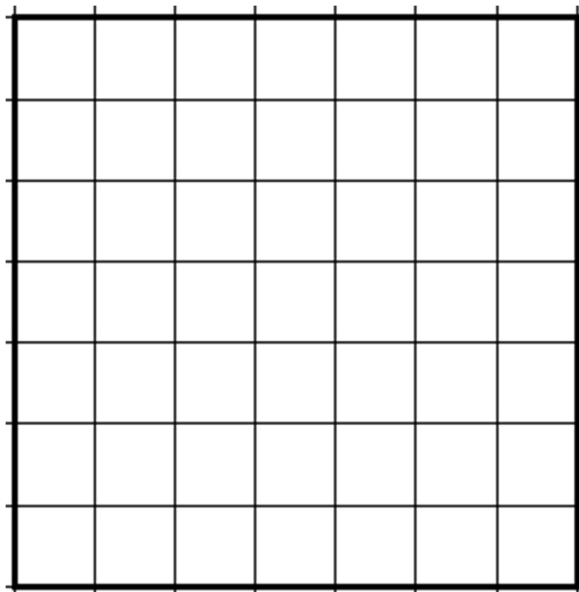
(4 M)

- a. Draw the following angles.

70°

135°

- b. Draw a rectangle of area 15 square centimeter.



### Section B (10 Marks)

Q1. Choose the correct answer and fill in the blanks. (4 marks)

- a. A rectangle has all \_\_\_\_\_ angles.
- b. At 2: 30 the hands of the clock makes \_\_\_\_\_ angle.
- c. Area of a square of side 6cm is \_\_\_\_\_ square cm.
- d. Cost of 1kg prawns is Rs180. Find the cost of  $\frac{1}{5}$  kg of prawns. \_\_\_\_\_

Q2. Draw a shape using 5 square of 1 cm each and write its area and perimeter. (3 M)

Q3. What type of angle is formed at these times? Also write the time (3 M)



\_\_\_\_\_



\_\_\_\_\_



\_\_\_\_\_

### Section C (10 marks)


Q1. Fill in the blanks.

(3 M)

- At 7: 20 O'clock the minute hand makes an \_\_\_\_\_ angle with the hour hand. (Acute / Obtuse)
- A ground is 80metre long and 60 metre wide, its area is \_\_\_\_\_ square metre. (4800/ 4080)
- A car travels 465 km in 5 hours. Its speed is \_\_\_\_\_ km/hour. (95 / 93)

Q2. Rakesh took a loan of Rs 79000 to buy a motor cycle. He paid back Rs.7200 per month for 1 year. How much money did he pay back after 1 year?  
How much money did he pay back as interest? (3 M)

Q3. Here is a rectangle of area 24 sq.cm. Draw two straight lines in this rectangle to divide it into one rectangle and two equal triangles. (4marks)



a) What is the area of the small rectangle?

b) What is the area of each triangle?

### Section D (10 Marks)

Q1. Fill in the gaps.

(3 M)


a. If 1 dozen = 12, then  $\frac{2}{3}$  of a dozen = \_\_\_\_\_

b. Area of a \_\_\_\_\_ = Length x Breadth

c.  $\frac{3}{6}$  is same as —

Q2. Solve.

a Draw the hands of the clock when they make an angle which is more than right angle. Also write the time. (2M)



b) Sangita sold the prawns for Rs 180 per kg. (2M)

Seema sold 20 kg kingfish for Rs. 1600.

i) Sangita has sold 5 kg prawns today. How much money did she get for that?

ii) At what price Seema sold per kg kingfish?










c) Mohan Lal divided his field into 9 equal parts and grew different fruits on it. (3 M)

i) What part of the field does he grow orange?

.....

ii) On what area of the field does he grow mangoes?

.....

iii) Which two fruits cover the field of  $\frac{2}{9}$  of the field?

.....

TOTAL PAGES : - 5

ATOMIC ENERGY CENTRAL SCHOOL NO-2 RAWATBHATA

PERIODIC TEST 1 – ( 2022-23 )

SUBJECT-EVS

CLASS –V

SECTION-\_\_\_\_\_

DATE-25/07/2022

Name of the Student-\_\_\_\_\_ Roll No-\_\_\_\_\_

Invigilator's Sign-\_\_\_\_\_ Time-90 Minutes

Examiner's Sign-\_\_\_\_\_ M.M-40 M.O.\_\_\_\_\_

**OBSERVATION & REPORTING - (10 Marks)**

Q.1 Choose the correct option from the following: - (4)

a) Which sense organ tells you that cactus is sharp?

- i) Ear      ii) Nose      iii) Skin      iv) Tongue

b) Ants move in a line because of their sense of \_\_\_\_\_

- i) sight      ii) smell      iii) taste      iv) touch

c) Which among the following is bitter in taste?

- i) Bitter gourd      ii) Salt      iii) Jaggery      iv) Tomato

d) How many weeks are required to prepare the 'Mamidi Tandra'?

- i) 4 weeks      ii) 6 weeks      iii) 9 weeks      iv) 10 weeks

Q.2 Answer the following questions (At least in two sentences.) (6)

a) What is the main function of the tongue? What are the four types of tastes?

---

---

---

---

---

b) Why did people in Rajasthan not face water shortages in earlier times?

---

---

---

---

---

c) Draw a pitcher plant. Where can we find pitcher plant in India?

	<hr/>
	<hr/>
	<hr/>
	<hr/>
	<hr/>
	<hr/>
	<hr/>
	<hr/>
	<hr/>
	<hr/>

Q.3 Choose the correct option and fill in the blanks. (4)

a) Kalbeliya dance is similar to the dance of \_\_\_\_\_.

i) tiger      ii) snakes      iii) monkeys      iv) Barat Party in a marriage

b) \_\_\_\_\_ stays good for a whole year.

i) Pickle      ii) Curd      iii) Tomato      iv) Chapatti



c) Potatoes and tomatoes came from\_\_\_\_\_

i) India                      ii) China                      iii) South America                      iv) Europe

d) The process of breaking down of food in stomach is called \_\_\_\_\_.

i) saliva                      ii) junk food                      iii) spoil                      iv) digestion

Q.4 Give two examples of each:- (1)

a) Poisonous snakes-

\_\_\_\_\_

b) Animals which are killed for their skin-

\_\_\_\_\_

Q.5 Write the names of the states in which the following wildlife sanctuaries or national park located. (1)

a) Jim Corbett national park- \_\_\_\_\_

b) Ghana bird sanctuary- \_\_\_\_\_

Q.6 Give reasons for the followings. (4)

a) As you walked softly near a sleeping dog, its ears shot up at once.

\_\_\_\_\_  
\_\_\_\_\_  
\_\_\_\_\_

b) Seeds kept in air-tight container do not sprout.

\_\_\_\_\_  
\_\_\_\_\_  
\_\_\_\_\_  
\_\_\_\_\_

Q.7 Write any five ways in which you can save water.

(5)

---

---

---

---

---

---

---

**DISCOVERY OF FACTS– (15 Marks)**

Q.8 Answer the following questions (At least in two sentences.) (10)

a) Why are lizards not seen during winter?

---

---

---

---

b) How could snake charmers help people in village where doctors and hospitals were far away?

---

---

---

---

c) Who was Dr. Beaumont? What did he find out about digestion?

---

---

---

---

d) Name the things that are needed to make Mamidi Tandra?

---

---

---

---

e) Why do farmers leave space while sowing seeds?

---

---

---

---

Q.9 What is the process of digestion ? Explain.

(5)

Draw the path of the food through your body.

---

---

---

---

---

---

