

ATOMIC ENERGY CENTRAL SCHOOL No.2, RAWATBHATA

PERIODIC TEST 1 (2021-22)

SUBJECT: ENGLISH

CLASS – IV

DATE: 24-07-2021

TIME: 1:30HRS

M.O ____

M.M:40

NAME _____

SECTION: _____

ROLL NO: _____

Reading- 10 marks

Q.1.A. Read the passage carefully and answer the following questions :

“I wish I had gold leaves as goats do not eat gold leaves.” When the little fir tree woke up the next morning it was surprised to see gold leaves. “How happy I am !” it said. A man came along and stole the leaves. “I wish I had glass leaves instead .Men do not steal glass leaves.” The next day its glass leaves shone in the bright sun. “how happy I am !”it said. At night the wind blew whoo...oo...oo. All the glass leaves broke.

A.1. Who stole the gold leaves ?

(1M)

Ans _____

A.2.The opposite of ‘dull’ is _____

(1M)

A.3. Write true or false

(2 x1= 2M)

1) Goats do not eat gold leaves. _____

2) Next morning , its wish was not granted. _____

A.4.Look at the pattern and fill in the blanks.

(1x1=1 M)

grant-granted

a. surprise - _____

B. Read the unseen passage carefully and answer the following questions :

Once a mother duck was hatching her eggs. One by one the eggs cracked and the ducklings came out. The mother duck was very happy and proud. All her young ones were very cute except one. That duckling was very ugly. All other birds of the farm teased him and he felt very sad. He wandered around and lived with wild ducks. Winter arrived. He was freezing from cold. A farmer felt pity on him and took him home. But he was scared by

Hard words:

(wander- roam around,freezing-feeling very cold)

B.1 Choose the correct answers . (1 x1=1M)

a) One of the duckling was _____. (ugly/ small)

B.2. Write true or false. (1x1=1M)

a) The mother duck was proud of her ducklings. _____

B.3. Who was hatching the eggs? (1M)

B.4. Write one word from the passage for (2 x1 =2M)

a) the baby of a duck - _____

b) the opposite of beautiful - _____

Textual questions 5 Marks

Q.2. Answer the following questions in one word . (2x1= 2M)

A. Who said these words.

i) Ma, who woke me today ? _____

ii) Thank you, you have been kind to me. _____

B. Answer the following questions. (3x1=3M)

a. What are the birds doing?

b. What does Neha wish to do ?

c. Why the nose is very important for us ?

Creative writing 5 Marks

Q3. Write five sentences on the given picture. You can use the following words given in the help box.

Swinging reading playing drawing watching trees beautiful



Grammar 8 Marks

Q4. Write the words that rhyme with the given words.

(2x1=2M)

shout- _____ sheep - _____

Q.5 Write the plural form of the following words.

(1x1 =1M)

bird- _____

Q6. Write opposites of the following words

(2x1=2M)

start- _____

fast- _____

Q 7. Find the error in the sentence and correct the following sentences. (1x1=1M)

a. the alarm Clock rings at eight in the morning.

Q 8. Look at the pattern and fill in the blanks.

(2x1 =2M)

do-doing

sing - _____ stick- _____

Vocabulary 5 marks

Q.9. Match the words with their meanings.

(1 x 2 =2 M)

Column A

Column B

a. window sill

a glass which reflects a clear image

b. mirror

a bottom part of a window

Q.10. Write the opposite of the given words.

(1 x2 =2M)

a. true x _____

b. fair X _____

Q11. Circle the odd one out.

(1x 1=1M)

a. eyes , ears , nose , teeth , skin , tongue (clue-sensory organs)

Spellings 5 Marks

Q12. Rearrange the letters and make meaningful words.

(1X2=2M)

a. MRIRRO-_____ b. GIACIMNA-_____

Q13. Fill in the blanks with the letters to make correct words.

(2X1=2M)

a. A__ARM

b. G__LDEN

(1/2 X2 = 1M)

परमाणु ऊर्जा केंद्रीय विद्यालय # २ , रावतभाटा

सामयिक परीक्षा - १ (२०२०-२१)

कक्षा - ४

विषय - हिन्दी

दिनांक: 20-07-2021

समय - ९० मिनट

पूर्णांक ४०

प्राप्तांक - -----

नाम - ----- वर्ग - -----

अनुक्रमांक - -----

प्रश्न १. नीचे दिए गए अपठित गद्यांश को पढ़ो और दिए गए प्रश्नों के उत्तर लिखो ।

सोहन एक छोटा लड़का है । वह प्रतिदिन आम के पेड़ के नीचे बैठकर अपना पाठ याद करता है । सोहन के पिता को एक परेशानी थी । आम के पेड़ पर जब फल लगते तो बच्चे पत्थर मारकर आम तोड़ने की कोशिश करते थे । इससे तंग आकर सोहन के पिताजी ने आम का पेड़ कटवाने का निश्चय कर लिया। एक दिन पेड़ काटनेवाले कुल्हाड़ी लेकर आ गए। सोहन ने पेड़ काटने से मना कर दिया ।उसने कहा, “मैं इस पेड़ को कटने नहीं दूँगा ।” यह मेरा दोस्त है । पेड़ सारी ज़हरीली गैस लेकर हमें शुद्ध हवा देते हैं । यह हमें ठंडी छाया देते और मीठे फल देते हैं।

१. सोहन प्रतिदिन कहाँ बैठकर अपना पाठ याद करता था ? (१)

२. सोहन के पिताजी ने पेड़ कटवाने का फैसला क्यों किया ? (१)

३. पेड़ों से हमें क्या लाभ है ?

(१)

४. लिंग बदलो ।

(१)

लड़का ----- पिता -----

५. उल्टे अर्थवाले शब्द लिखो ।

(१)

ठंडी ----- शुद्ध -----

प्रश्न २. निम्न गद्यांश को पढ़ो और नीचे लिखे प्रश्नों के उत्तर लिखो ।

शुरू - शुरू में पापा चौकीदार बनना चाहते थे उन्हें यह सोचना बहुत अच्छा लगता था कि जब सारा शहर सोता है , चौकीदार जागता है । उन्हें यह सोचना भी अच्छा लगता था कि जब हर कोई सोया हुआ हो , वह खूब शोर मचा सकते हैं । उन्हें पक्का यकीन था कि वे बड़े होकर चौकीदार ही बनेंगे ।

लेकिन एक दिन अपने चटकदार हरे ठेले को लिए आइसक्रीम वाला आ गया । भई वाह ! पापा आइसक्रीम वाला बनेंगे । वह ठेले को लेकर घूम भी सकते हैं और जितनी मन चाहे उतनी आइसक्रीम भी खा सकते हैं ।

१. शुरू - शुरू में पापा क्या बनना चाहते थे ?

(१)

२. पापा को क्या सोचना बहुत अच्छा लगता था ? (१)

३. आइसक्रीम वाले का ठेला किस रंग का था ? (१)

४. उल्टे अर्थवाले शब्द लिखो । (१)

शहर ----- दिन -----

५. निम्न वाक्य में से सर्वनाम शब्दों को चुनकर खाली जगह में लिखो । (१)

उन्हें पक्का यकीन था कि बड़े होकर चौकीदार ही बनेंगे ।

प्रश्न ३. उदाहरण देखकर लिखो कैसा - कौन ? (२)

	कैसा	कौन
उदा०	सूरज - सी	चमकीली
	चंदा - सा	थाली
	जोकर - सा	

प्रश्न ४. नीचे लिखे प्रश्नों के उत्तर लिखो।

१. दिनेश की माँ कौन - सी मशीन चला रही होंगी ? (२)

२. दीपक बार - बार गेंद को अपनी क्यों बता रहा था ? (२)

३. पापा ने जितने काम सोचे तुम्हें उनमें से सबसे दिलचस्प काम कौन - सा लगा ?
और क्यों ? (२)

४. साल की किन - किन महीनों में ज़्यादा बादल छाते हैं ? (२)

प्रश्न ५. १×१५ = १५

१. कविता के अनुसार अधूरे शब्दों को पूरा करो -

म ----- तू -----

२. इन शब्दों के समान अर्थ लिखो ।

अभिमान = ----- संसार = -----

३. सरकंडे से बननेवाली किन्हीं दो चीज़ों के नाम लिखो ।

४. जिस इमारत में तीन मंज़िलें हों उसे तिमंजिली इमारत कहते हैं ।

बताओ, इन्हें क्या कहेंगे ?

जिस स्कूटर में दो पहिए हों - -----

जिस झंडे में तीन रंग हों - -----

५. पापा के पापा को दादा कहते हैं । इन्हें तुम अपने घर में क्या कहकर बुलाओगे ?

पापा की माँ - ----- माँ की बहन - -----

६. सीताफल की बेल होती है और भिंडी का पौधा । बताओ और कौन - कौन सी सब्जियाँ

बेल और पौधे पर लगती हैं ?

बेल - -----

पौधा - -----

प्रश्न ६. मान लो तुम्हारा खिलौना कहीं खो गया है । तुमने अपने साथियों को घर पर बुलाया

है ताकि सब उसे मिलकर खोज लें ।

तुम अपने खिलौने की पहचान के लिए अपने साथियों को कौन कौन सी बातें बताओगे ?

(५)

ATOMIC ENERGY CENTRAL SCHOOL No.2, RAWATBHATA

PERIODIC TEST-1 (2021-22)

SUBJECT: MATHS

CLASS: IV

DATE: 26-07-2021

TIME: 1:30HRS

M.O ____

M.M:40

NAME _____

SECTION: _____

ROLL NO: _____

Section A: 10 Marks

Q.1. Fill in the blanks. (1x4=4)

- a) 1km = _____ m
- b) A brick has _____ faces.
- c) 1 lakh = _____ thousands
- d) 900cm = _____ m

Q.2. Do as directed. (2 x3 =6)

- a) Draw a brick showing its three faces.

- b) Draw a line segment of 6.5 cm.

- c) Madan bought three thousand bricks. The cost of one thousand bricks is Rs 1500. How much did he pay for it?

Section B: 10 Marks

Q1. Tick the correct answer. (1×4=4)

i) One bus can carry 35 students. How many students can 3 buses carry?

- a) 70 b) 140 c) 105 d) 150

ii) 30 centimetres less than 1 metre = _____ centimeters.

- a) 80 b) 70 c) 99 d) 90

iii) A brick has _____ edges.

- a) 8 b) 10 c) 12 d) 16

iv) 2 kilometres and 50 metre = _____ metres.

- a) 2005 b) 2050 c) 2500 d) 250

Q2. An ant climbs 2 cm in 1 minute but slips down 1 cm. How much time will it take to climb 3 cm? (2)

Q3. Given below are the ticket price and trip time of different boats - (4)

Name of the boat	Ticket Price	Trip Time
Paddle boat	Rs 45	30 Minutes
Motor boat	Rs 75	20 Minutes

i) What is the ticket price of 5 persons for paddle boat?

ii) How much total money will you pay for two trips of paddle boat and a trip of motor boat?

Section C: 10 Marks

Q1. Do the following.

(1×4=4)

a. Look at the clock and write the time.



b. Write which date this stand for?

12/ 9/ 21 - _____

c) A number becomes double if it is increased by 7. What is the number?

d) There are 5 sections in class V with following number of students:

42, 37, 32, 34, 31

The total number of students is _____.

Q.2. Solve the problems.

(2×3=6)

a) Make any four 3 digit numbers by using 4, 5 and 8?

b) The world record of high jump is 2m 55cm. Tarun jumps 2 m 36 cm.
How many centimeters does Tarun short from the world record?


c) How much time did the minute hand take to move from



to



_____ minutes



to



_____ minutes

Section D : (10 marks)

Q1. Choose the correct options:

(4×1=4)

1. A brick is _____ in shape. (rectangular/ square)
2. 180 days after 10/02/21 will be _____ (August 2021 / July 2021)
3. Which pair adds to make more than 500? _____ (401 and 89 or 361 and 142)
4. _____ weeks make 28 days. (4/3)

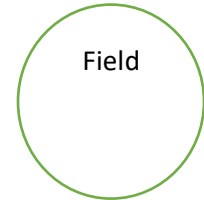
Q2. I gave 6 toffees each to five of my friends and 3 toffees were left with me. How many toffees did I have? (2)

Q3. Solve the following:

(2×2=4)

- i) How many rounds must Bhanu run around the field to complete 2km?

500m



- ii) One day he got tired after running 7 rounds.

So, the distance ran by him was _____ Km and _____ m.

* _ _ _ _ _ * _ _ _ _ _ * _ _ _ _ _ *

ATOMIC ENERGY CENTRAL SCHOOL-2,RAWATBHATA

PERIODIC TEST-1 (2021-22)

SUBJECT:EVS

CLASS :IV

DATE: 22-07-2021

TIME:1.30HRS

M.O ____

M.M:40

NAME _____ SECTION : _____ ROLL NO: _____

OBSERVATION AND REPORTING (16 MARKS)

I .Choose the correct answer and fill in the blanks. (5)

- a) An _____ ride on other animals to eat insects.(egret / buffalo)
- b) Community that live in Khejadli village of Rajasthan who have great respect for trees and animals are _____
(Jugad / Bishnois / Khejadlis)
- c) Animals that have hair on their body _____
(give birth to the babies /lay eggs)
- d) A group of elephants is called _____ (heard /herd)
- e) An adult animal can eat more than _____ of leaves and twigs in a day . (100kg / 1000kg)

II Name the following .


(2)

- a) A special type of vehicle used in Gujarat made up of waste material

- b) An endangered animal

II. Identify the picture and write one sentence about it .(4)





III. Write five sentences about

Elephant herd or Khejadi tree (any one) (5)

IDENTIFICATION AND CLASSIFICATION (12 MARKS)

IV. Match the following.


(3)

1.



a. tiger

2



b.zebra

3



c. leopard

V. Write true (√) or false (X).

(2)

1 . Animals whose ears we cannot see they lay eggs . ()

2 .Male elephants leave the herd when they are 5 years old. ()

VI . Give two examples of each. (3)

a) Animals / bird that ride on other animals .

b) Animals that have ears like leaves .

c) Animals that lay eggs.

c) Answer the following in sentences.

(4)

i) What do elders of Khejadli Village used to say?

Ans:_____

ii) Why do we see patterns on the body of animals ?

Ans: _____

DISCOVERY OF FACTS (12 MARKS)

VI. Give reason.

(4)

1. It is difficult to walk on snow.

2. Bamboo bridges are used in Assam.

VII. Write two differences between Bamboo bridge and cement bridge.

(2)

VII . On the outline map of India mark the following states/ union territory.

(6)

1. A state where Amrita lived : _____
2. A state where paths are rocky and uneven : _____
3. A state where trolley is used : _____
4. Vallam is used in this state : _____
5. Trolleys are used to cross wide rivers here: _____
6. A special vehicle made of waste material 'Jugad' is found in this state : _____

