

ATOMIC ENERGY CENTRAL SCHOOL No.-2, RAWATBHATA
Periodic Test – III (2021-22)

Subject : ENGLISH

Class – IV

Section : _____

Date: _____

Name of the student : _____

Roll No: _____

MO : ____

Invigilator's sign: _____

Examiner's sign: _____

MM : 40

1. (A) Read the following passage carefully and answer the questions given below. [5marks]

Penguins are a group of aquatic, flightless birds living mostly in Antarctica. They have flippers for movement in water. Most penguins feed on fish, squid and other forms of sea life caught while swimming underwater. They spend half of their life on land and half in the oceans. Emperor penguins are the largest living species and the blue or fairy penguins are the smallest species. Most of the penguin species live in large colonies. Penguins are not afraid of human beings. This is probably because penguins have no land enemy in Antarctica. Instead, they are at a risk in sea from sharks or leopard seal.

a) Penguins feed on _____.

- i. grass
- ii. cockroaches and spiders
- iii. fish, squid and sea creatures

b) Penguins live in a _____.

- i. herd
- ii. colony
- iii. school

c) Why are penguins not afraid of the human beings?

_____.

d) Write another word for 'afraid' from the passage.

e) Make sentence of your own using the following word.

caught-

(B) Read the following poem carefully and answer the questions given below. [5marks]

“Come in, come in!”
Said the library door;
I opened it wide
And saw books galore!
Tall skinny books
Up high on the shelves;
Little fat books
That stood by themselves.
I opened one up
And sat down to look;
The pictures told stories!
What a wonderful book!

a) A _____ is a place where books are kept.

- i) bus stop ii) library iii) temple

b) The word ‘_____’ means in great numbers.

- i) galore ii) wonderful iii) little


c) What did the library door say?

_____.

d) Write two pair of rhyming words from the poem.

2. Write a paragraph on the picture given below.

[5 Marks]



3. Write five sentences on Hiawatha.

[5 Marks]

4. Punctuate and rewrite the given sentence. [1 Mark]

the tailor went to the market mr singh

5. Fill in the blank with a suitable describing word. [1 Mark]

I saw an _____ quarrel in the market.

6. Choose the correct word and fill in the blanks. [2 Marks]

Students have to _____ the _____ answers in their notebook. (right/write)

7. Circle the silent letters in the words given below. [1 Mark]

a) k n i f e

b) h o n o u r

8. Write rhyming words for the words given below. [1 Mark]

a) high - _____

b) boots - _____

9. Give one word for the following: [2 Marks]

a) a conical tent used by Red Indians

b) home of the rabbits

c) a person's native language

d) Poet of the poem ' A Watering Rhyme' is _____

10. Place the letters in correct order to form meaningful words. You can

use the clues given in the brackets.

[2 Marks]

i) BISIHCUS _____ (a flower)

ii) DINHI _____ (a language)

iii) BRCHAN _____ (part of a tree)

iv) OCRN _____ (donkeys like to eat)

11. Fill in the blanks with a/an/the. [2 Marks]

I saw _____ moon _____ hour ago.

12.State 'T' for true and 'F' for false. [2 Marks]

- i. Hiawatha lived with his grandfather. ()
- ii. The boy made a boat with the trunk of the tree. ()
- iii. The grandfather gave money to the children to buy some new clothes. ()
- iv. The child would give some hay and corn to the donkey. ()

13. Answer the following questions. [6 Marks]

a) How was the stump of the tree useful?

b) What is the best time to water the plants?

e) Who came to Akbar's court?

परमाणु ऊर्जा केंद्रीय विद्यालय #2, रावतभाटा

सामयिक परीक्षा - 2

कक्षा - 4(चौथी) विषय - हिंदी समय - 1 ½ घण्टा पूर्णांक - 40

नाम - _____ वर्ग - _____ अनु० क्र० - _____ दिनांक - _____

निरीक्षक के हस्ताक्षर - _____ परीक्षक के हस्ताक्षर - _____

प्राप्तांक - _____

प्रश्न - 1. नीचे दिए गए गद्यांश को पढ़कर पूछे गए प्रश्नों के उत्तर लिखो । (5)

धनी और उसके माता-पिता बड़ी खास जगह में रहते थे - अहमदाबाद के पास, महात्मा गाँधी के साबरमती आश्रम में । गांधीजी की तरह वे सब भी भारत की स्वतंत्रता के लिए लड़ रहे थे । जब वे आश्रम में ठहरते तो चरखों पर खादी का सूत कातते, भजन गाते और गांधीजी की बातें सुनते ।

(क) धनी और उसके माता-पिता कौन सी खास जगह पर रहते थे?

(ख) गांधीजी के आश्रम का क्या नाम था ?

(ग) गांधीजी और अन्य लोग क्या कर रहे थे ?

(घ) आश्रम में लोग क्या-क्या काम करते थे ?

(ङ) अर्थ लिखो

स्वतंत्रता = _____

प्रश्न - 2. नीचे लिखे प्रश्नों के उत्तर एक वाक्य में लिखो ।

(5)

(क) मिट्टी से बने चूल्हे में निम्न में से किस ईंधन का इस्तेमाल किया जाता है ?

केरोसिन एल.पी.जी लकड़ी उपले

(ख) पढ़क्कू क्या पढ़ते थे ?

(ग) धनी बिन्नी की देखभाल कैसे करता था ?

(क) बताओ किन-किन चीज़ों को -

कुतरा जा सकता है

बिखराया जा सकता है

1. _____

1. _____

2. _____

2. _____

(ख) नीचे लिखे शब्दों में सही जगह पर (ं) या (ँ) लगाओ ।

पसद

गाव

(ग) नीचे लिखी चीज़ों की विशेषता बताने वाले शब्द लिखो ।

_____ हलवा

_____ पेड़

(घ) तुम अपने साथियों के साथ कौन-कौन से खेल खेलते हो? उनके नाम लिखो ।

(ङ) बताओ, ये लोग क्या गढ़ते हैं ?

सुनार - _____

ठठेरा - _____

(च) शब्दों के समान अर्थ लिखो ।

ग़ज़ब - _____ छल - _____

(छ) किन्हीं दो-दो चीज़ों के नाम बताओ जिन्हें -

बिलोते हैं - _____

घोलते हैं - _____

(ज) चूहे के अलावा कौन-कौन जीव तुम्हारे घर में घुस जाते हैं?

प्रश्न - 4. नीचे लिखे गए वाक्य को अपने तरीके से लिखो । (1)

सिखा बैल को रखा इसने निश्चय कोई ढब है ।

प्रश्न - 5. निम्न मुहावरे का वाक्य में इस्तेमाल करो । (1)

पसीना बहाना -

प्रश्न - 6. कविता की पंक्तियाँ पूरी करो । (2)

कभी कुतर जाता है _____

कभी कुतर _____ है जाता

कभी _____ पर बन आती

अनजाने _____ गिर जाता ।

प्रश्न - 7. निम्न प्रश्नों के उत्तर लिखो ।

(6)

(क) अगर कबाड़ी तुम्हारे घर का कबाड़ न खरीदे तो क्या होगा ?

(ख) धनी ने गांधीजी से सुबह के समय बात करना क्यों ठीक समझा होगा ?

(ग) बच्चों ने खाने-पीने की चीज़ें छिंके में क्यों रखी ?

प्रश्न - 8. गांधीजी के बारे में पांच वाक्य लिखो ।

(5)

प्रश्न - 9. सुलेख लिखो ।

(5)

सड़क पार करते समय सुनीता को फ़रीदा फिर नज़र आयी । इस बार फ़रीदा ने कोई सवाल नहीं पूछा । अमित झट से सुनीता की पहिया कुर्सी के पीछे चढ़ गया । फिर दोनों पहिया कुर्सी पर सवार हो कर तेज़ी से सड़क पर आगे बढ़े । फ़रीदा भी उनके साथ-साथ दौड़ी । इस बार भी लोगों ने उन्हें घूरा परन्तु अब सुनीता को उनकी कोई परवाह नहीं थी ।

ATOMIC ENERGY CENTRAL SCHOOL No.-2, RAWATBHATA

Periodic Test – 2 (2021-22)

Subject: Mathematics Class – IV Time: 90 min Date: _____

Name of the student: _____ Roll No: _____ Sec: _____

MO : _____

Invigilator's sign: _____ Examiner's sign: _____ MM: 40

KNOWLEDGE (10)

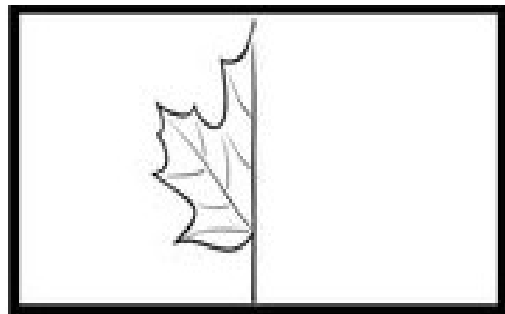
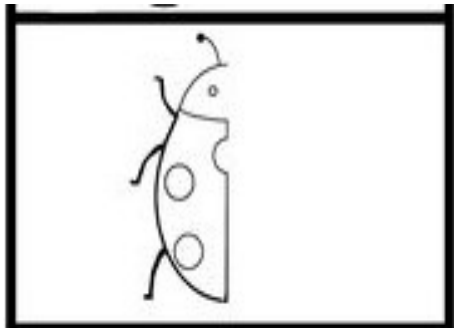
Q1. Fill in the blanks.

6

- 1) Radius is _____ (half/double) of diameter.
- 2) 17 is half of _____.
- 3) $\frac{3}{4}$ metre = _____ cm.
- 4) There are _____ (two/four) halves in a whole.
- 5) 24 legs mean _____ chickens.
- 6) 111, 121, 131, _____

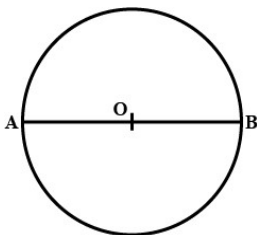
Q2. Make the other half.

2



Q3. Name the parts of the circle.

2



O = _____

AB = _____

UNDERSTANDING (10)

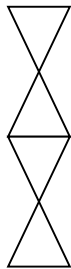
Q4. If **YES** is 25 5 19 then what is the meaning of given secret message? 3

i) MOON


ii) ADDITION

iii) FRIENDS

Q5. Colour the given part of the shape. 2



$\frac{1}{2}$



$\frac{3}{4}$

Q6. Draw circles of 3 cm and 4.5 cm from the common centre. 2

Q7. Continue the pattern.

3

- i. 121, 141, 161, _____, _____, _____
- ii. A, AB, ABC, _____, _____, _____
- iii. 10Z, 20Y, 30X, _____, _____, _____

ABILITY TO COMPUTE (10)

Q8. Starting from 0, a rabbit jumps 4 steps at a time.

4

1) In how many jumps does he reach 28?

2) He reaches _____ after taking 5 jumps.

3) He needs _____ jumps to reach 36.

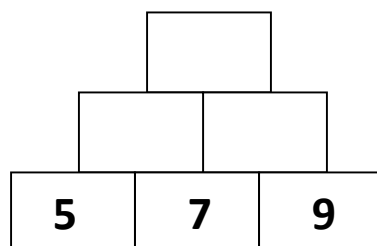
4) He reaches _____ after taking 10 jumps.

Q9. Jenny has 36 stickers. She wants to distribute these equally among 4 children. How many stickers does each child get?

2

Q10. Complete the number tower.

2



Q11. From 22 boys in a school, $\frac{1}{2}$ went for swimming. How many children are left in the class?

2

PROBLEM SOLVING ABILITY (10)

Q12. Rahul wants change for Rs 600.

3

How many notes will he get if he wants in return-

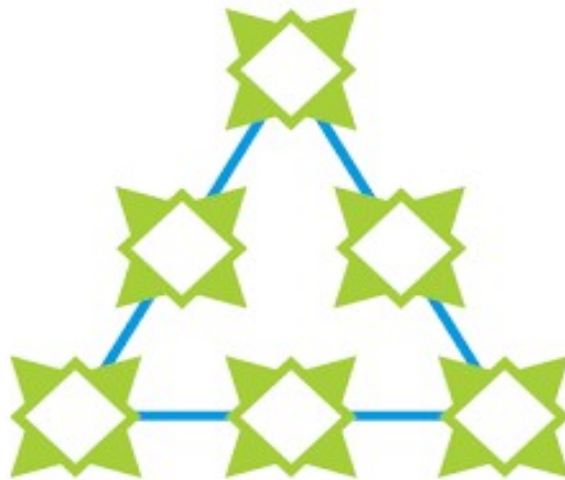
a) All 100 rupees notes?

b) All 50 rupees notes?

c) All 10 rupees notes?

Q13. Use numbers 1-6 and the rule that the numbers on each line add up to 11.

3



Q14. Frame your questions.

2

i) There are 9 boxes of bangles.

Each box has 4 bangles in it.

Q15. Divide

2

i) $48 \div 4$

ii) $110 \div 10$

ATOMIC ENERGY CENTRAL SCHOOL No.-2, RAWATBHATA

Periodic Test – 2 (2021-22)

Subject : EVS

Time: 90 min

Class – IV

Section : _____

Date:

Name of the student : _____ Roll No: _____ MO : ____

Invigilator's sign: _____ Examiner's sign: _____ MM : 40

KNOWLEDGE

1. Choose the correct answer and fill in the blanks. (5)

- a) Basva's father was a _____. (farmer /vegetable seller/shopkeeper)
- b) Squirrels keep _____ on the things to prevent their teeth from becoming too long. (snipping /gnawing / chewing)
- c) _____ is caused by drinking contaminated or dirty water . (polio / fever / diarrhoea)
- d) Nandita came to _____ for her mother's treatment . (Holgundi / Mumbai /Delhi)
- e) A pea plant has a _____ stem . (Hard /stiff /delicate)

2. Identify the picture (2)





3. Match the following .(3)

Khunti

cut dried leaves

Illige

plough the field

Kurige

to soften and loosen the soil

4. Draw and name any two kind of roots.(4)

--	--

5. Write a short note about any one of the following.(4)

Bihu

or

Desert Oak tree

UNDERSTANDING

6.Match the following.

(5)

1) Coppersmith :

a) twigs, dry leaves, bits of tree
trunk

2) Pigeon :

b) high upon the tree

3) Crow :

c) diarrhoea and vomiting

4) Sunbird :

d) hole in the tree trunk

5) Dirty water causes:

e) anywhere in the house

6. Write the full form of **ORS**.

(1)

Ans : _____

7. Answer the following.

a) How do you know that onion crop is ready to be taken out? (1.5)

b) Write two tests of birds. (2)

c) What will happen if you drink dirty or contaminated water? (1)

d) What is the law against cutting trees? (1.5)

APPLICATION

9. Give example of any two: (3)

a) Occasions when we eat together.

Ans: _____

b) Ways to clean water

Ans _____

c) Ingredients of KadhaPrasad .

Ans _____

10. Write one word for: (2)

a) Unwanted plants that grow on their own .

b) Children's Panchayat in Holgundi area of Karnataka .

Ans : _____

11. Complete the sentence . (2)

a) Vaishali's father sprinkle water on vegetables to _____

_____.

b) Nandita's mama ji was worried because _____

_____.

12. On the outline map of India locate the following states. (3)

Assam Karnataka Maharashtra

