

ATOMIC ENERGY CENTRAL SCHOOL NO-2, RAWATBHATA

PERIODIC TEST-2 (2022-23)

Subject: ENGLISH

Class-IV Section: _____ Date- _____

Name of the student: _____ Roll No- _____

Invigilator's Sign: _____ Time- 90 Minutes

Examiner's Sign: _____ MM: 40 MO: _____

Section -A Knowledge (18marks)

A.1-Choose the correct word and fill in the blanks. (1x3=3)

- a) The giving tree had
1) bananas 2) apples 3) cherries 4) grapes
- b) Watering at noonday makes the flowers
1) rest 2) awake 3) die 4) asleep
- c) Rhyming word for roots in the poem is
1) puts 2) shoots 3) loots 4) boots

A.2-Write one word for the given sentences. (1X2=2)

- 1) A conical tent- _____ (wigwam/boat)
- 2) An expert in study- _____ (courtier/scholar)

A.3-Who am I? (1)

- 1) I narrate (tell) something like stories-

Ans) _____

A.4-Answer the following question in one word. (1)

Q-What did the boy make with the branches of the tree?

A.5-Write True/ False (1)

Reading books is a good habit- _____

A.6-Who said to whom? (1)

I am sorry, friend but I have nothing left to give you.

Ans. _____ said to _____

A.7-Short answer questions.

Give the answer in one sentence. (1x3)

a) What did the library door say?

Ans- _____

b) What did the boy make with the trunk of the tree?

Ans- _____

c)When should we not water the plants?

Ans- _____

A.8-Frame questions for the answers given below. (1x2=2)

1- The tree helped the boy by giving him a lot of things. (How)

Q- _____

2- A scholar came to Akbar's court. (Who)

Q- _____

A.9- Fill in the gaps and make words. ($\frac{1}{2}$ x2=1)

a) t_ng_e

b) th_ _ sty

A.10- Rearrange the letters to make meaningful words.

(1x2=2)

a) wyelar- _____

b) ctklie- _____

A.11- Rewrite by changing the underlined word to opposite. (1)

a) I want to buy things and have fun.

Ans- _____

Section B Understanding (12 marks)

Read the passage and answer the questions followed by that.

Morning walk is very important for a healthy life. It refreshes the mind and the body. It prepares us for the day's work. One can also see the birds chirping on the trees. It is the only time when the roads are not crowded. The dew drops on the green grass and leaves of plants look like

shining pearls. One should go for morning walk every day to keep the body fit. It helps to improve mental health also. It boosts our brain health. It makes people stay connected as they meet every morning during walk. Morning walk reduces the risk of diabetes. It improves the balance of our body.

B.1-Tick the correct answer. (1x2=2)

Q-1 _____ is important for a healthy life.

- a) Evening walk
- b) Fast food
- c) Morning walk
- d) Sleep of 10 hours

Q.2- The noise created by birds is called _____

- a) melody
- b) singing
- c) disturbance
- d) chirping

B.2-Choose the correct answer. ($\frac{1}{2} \times 4 = 2$)

1)The drops on the green grass look like _____ (pearls/lights)

2) The roads are not crowded during _____

(afternoon/ morning)

3) Morning walk improves our _____ (heart health/ brain health)

4) There is low risk of _____ if someone goes for morning walk regularly. (Heart attack/ diabetes)

(ocean/ wells)

B.3- Find two describing words from the passage and write.

($\frac{1}{2} \times 2 = 1$)

a) _____

b) _____

Read the poem carefully and answer the questions.

The first day of school

I have got a brand -new lunchbox

My shoes are shiny clean,

I have got a cool new book bag

And a pencil box that's green.

But I don't know my teacher.

Or where my desk will be.

I don't know if I'll like the kids,

Or if they will play with me.

I peep inside my classroom,

I stand there for a while,

My teacher is tall and kind of loud

But has a great big smile

And best of all, she's got my

Favourite book upon the shelf!

I kiss my mother at the door

And walk in by myself.

Tick the correct answer. (1x2= 2)

1) The child's shoes are

- a) clean
- b) dirty
- c) comfortable
- d) fancy

2) Opposite of short is

- a) tiny
- b) little
- c) tall
- d) big

B.5- Write two pairs of Rhyming words from this poem.

($\frac{1}{2} \times 4 = 2$)

a) _____ - _____

b) _____ - _____

B.6- Why is the child so curious in the above poem? (1)

Ans _____

B.7- Number the sentences in correct order. ($\frac{1}{2} \times 4 = 2$)

A) Place the plant in the hole.

B) Dig a hole.

C) Cover the roots with soil.

D) Water it every day.

Ans.1 _____

2 _____

3 _____

4 _____

Section C Application 10 Marks

C.1- Do as directed.

Look at the word in the middle and write four things related to it.

(1/2 x 4=2)

_____	_____
_____	_____

trees

C.2- Circle the odd one.

(1/2 x 4=2)

- | | | | |
|------------|----------|-------|----------|
| a) jasmine | marigold | pansy | lotus |
| b) clients | king | queen | courtier |
| c) burrows | lodges | tent | nests |
| d) hour | often | walk | grow |

C.3- Correct the sentences and rewrite.

(1x2=2)

a) The stump of the tree was not useful.

Ans. _____

b) We see many sweets in the library.

Ans. _____

C.4- Make meaningful sentences using the words given below.

(1x2=2)

a) picked- _____

b) quiet _____

C.5- Combine the pairs of sentences using the words given below.
(1x2=2)

Or, and

a) Do you want a story book? Do you want a picture book?

Ans. _____

b) I want Black Beauty. I want Panchatantra.

Ans. _____

ATOMIC ENERGY CENTRAL SCHOOL NO.2, RAWATBHATA

Periodic Test – 2 (2022 -23)

Subject: Hindi

Class: IV Section: _____

Date: _____

Name of the student: _____ Roll No. _____

Invigilator's sign: _____

Time – 90 Minutes

Examiner's sign: _____

MM: 40 MO: _____

प्रश्न १ निम्नलिखित अपठित गद्यांश को ध्यानपूर्वक पढ़कर नीचे लिखे प्रश्नों के उत्तर दीजिए। 1 x 5 = 5

जवाहरलाल नेहरू का जन्म 14 नवम्बर 1889 को इलाहाबाद में हुआ था । वे कानून शास्त्र के ज्ञाता थे । मोतीलाल नेहरू उनके पिता थे। उनकी माता का नाम स्वरूप रानी नेहरू था । जवाहरलाल जिज्ञासा और कौतूहल से धार्मिक रस्मों और त्योहारों को देखा करते थे । बच्चों के प्रिय चाचा नेहरू का जन्मदिवस हर वर्ष 14 नवम्बर को बाल दिवस के रूप में मनाया जाता है। सन् 1947 में भारत को आजादी मिलने पर वे स्वतंत्र भारत के पहले प्रधानमन्त्री बने ।

(क) जवाहर लाल नेहरू का जन्म कब हुआ ?

उत्तर-

.....

ख) जवाहरलाल नेहरू के पिताजी का नाम क्या था ?

उत्तर-

.....

ग) जिज्ञासा और कौतूहल से धार्मिक रस्मों और त्योहारों को कौन देखा करते थे ?

उत्तर-

.....
घ) चाचा नेहरु का जन्मदिवस किस दिवस के रूप में मनाया जाता है ?

उत्तर-

.....
ड) स्वतंत्र भारत के प्रथम प्रधानमन्त्री कौन बने ?

उत्तर-

.....
प्रश्न १ निम्नलिखित पठित गद्यांश को ध्यानपूर्वक पढ़कर नीचे लिखे प्रश्नों के

उत्तर दीजिए।

1 x 5 =5

अगले दिन जैसे ही सूरज निकला, धनी बिस्तर छोड़कर गाँधी जी को ढूँढने निकला। वे गौशाला में गायों को देख रहे थे। फिर वह सब्जी के बगीचे में मटर बंदगोभी देखते हुए बिंदा से बात करने लगे। धनी और बिन्नी लगातार उनके पीछे - पीछे चल रहे थे। अंत में गाँधी जी अपनी झोंपड़ी की ओर चले बरामदे में चरखे के पास बैठ कर उन्होंने धनी को पुकारा, “यहाँ आओ, बेटा!”

(क) धनी किसे ढूँढ रहा था?

(ख) बगीचे में कौन- कौन सी सब्जी लगी हुई थी?

(ग) गाँधी जी क्या चलाते थे?

(घ) विलोम शब्द लिखो ।

छोड़ना ----- अंत -----

(ड) वचन बदलो ।

सब्जी ----- झोंपड़ी -----

पाठ्य पुस्तक पर आधारित प्रश्न

प्रश्न३ निम्नलिखित प्रश्नों के उत्तर लिखो ।

(क) 'कौन' कविता के कवि का नाम लिखो । (1)

.....

(ख) धनी बिन्नी की देखभाल कैसे करता था? (2)

.....

.....

(ग) बच्चों ने खाने - पीने की चीज़ें छींके में क्यों रख दी ? (2)

.....

.....

व्याकरण पर आधारित प्रश्न

(क) शब्दों के अर्थ लिखो । 1x10=10

मंतिख ----- स्वतंत्रता -----

(ख) कौन- कौन से जीव तुम्हारे घर में घुस आते हैं ?

(ग) निम्नलिखित शब्दों में सही जगह पर ° या ~ लगाओ ।

ठडा मागी

(घ) नीचे लिखे वाक्य में से विशेषण शब्द को लिखिए ।

राधा मीठा हलवा खाती है ।

उत्तर -----

(ड) वाक्यांश के लिये एक शब्द लिखिए -:

वह स्थान जहाँ खाना पकाया जाता है -----

(च) समान तुक वाले शब्द बनाओ -

धाता -माया -

(छ) नीचे लिखे मुहावरे का वाक्यों में प्रयोग करो।

पसीना बहाना -----

(ज) बताओ ये लोग क्या गढ़ते हैं?

सुनार ----- कवि -----

(झ) नीचे लिखे वाक्य को अपने शब्दों में लिखो ।

मगर बूँद भर तेल साँझ तक भी क्या तुम पाओगे ?

(ञ) लिंग बदलो ।

लड़का चूहा -----.

प्रश्न4 निम्नलिखित पंक्तियाँ पूरी करो ।

(2)

कुतर -कुतर कर ----- सारे

रद्दी से ----- को भर जाता ।

कौन ----- है जो कूड़ा

----- भर का घर भर जाता ।

प्रश्न5 शुद्ध रूप लिखिये आशरम-

----- सत्यग्रह ----- (2)

प्रश्न6 वाक्य को सही कर के दुबारा लिखो।

(1)

राम , मोहन और सोहन जा रहा है।

.....

प्रश्न 7 गाँधी जी के बारे में चार वाक्य लिखिए ।

(4)

उत्तर.....

.....

.....

.....

.....


.....

प्रश्न8 दिए गए चित्र के बारे में तीन वाक्य लिखो और रंग भरों | (3)

.....

.....

.....



प्रश्न9 दिए गए अनुच्छेद को सुन्दर तथा स्पष्ट अक्षरों में लिखो।

(3)

हुदहुद एक बहुत ही सुंदर पक्षी है |संसार के विख्यात पक्षियों में से एक है हुदहुद | यह अपनी सुंदरता के लिए तो मशहूर है,पर इसे पालतू नहीं बनाया जा सकता और न ही इसकी बोली में मिठास है।

.....

.....

.....

.....

.....

.....

ATOMIC ENERGY CENTRAL SCHOOL NO.2 RAWATBHATA

Periodic Test – 2 (2022-23)

Subject: Mathematics

Class – IV

Section: _____

Date: _____

Name of the student: _____

Roll No: _____

Invigilator's sign: _____

Time: 90 minutes

Examiner's sign: _____

MM: 40 MO: _____

CONCEPT KNOWLEDGE (10)

Q1. Multiple choice questions.

4

1) A circle has _____ centre.

a) many

b) two

c) one

d) infinite

2) $\frac{3}{4}$ means _____ parts out of 4.

a) 4

b) 3

c) 2

d) 1

3) Sheela can make the table of 8 with the tables of _____ and 5.

a) 4

b) 1

c) 3

d) 2

4) A sack of rice can be measured in _____.

a) litre

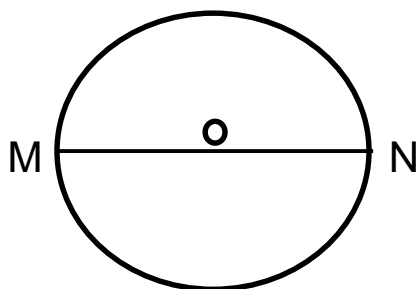
b) mililitre

c) gram

d) kilogram

Q2. Name the parts of the following circle.

2





O = _____

MN = _____

Q3. Colour $\frac{1}{4}$ of these shapes.

2



Q4. Complete the pattern.

2

A11 BC12 DEF13 GHIJ14 _____
101 201 301 401 _____

UNDERSTANDING (10)

Q5. Fill in the blanks.

2

- a) 12 legs mean 3 cats. 16 legs mean _____ cats. (4,6)
- b) Radius is _____ of the diameter. (half, double)


Q6. What part of the whole is shaded?

2



Q7. Fill the stars. Use numbers 1-9 and the rule that the numbers on each line add up to 15.

2



Q8. Rahul lives near the sea. He thought of making necklaces for his five friends. He looked for sea-shells the whole day. He collected 100 sea- shells by evening. Now he had many different colourful and shiny shells. He took 19 shells for one necklace. How many necklaces can Rahul make? (2+1+1=4)

a) At last, Rahul is left with how many sea-shells?

Ans- _____

b) Are the shells enough for making necklaces for all his friends?

Ans- _____

ABILITY TO COMPUTE (10)

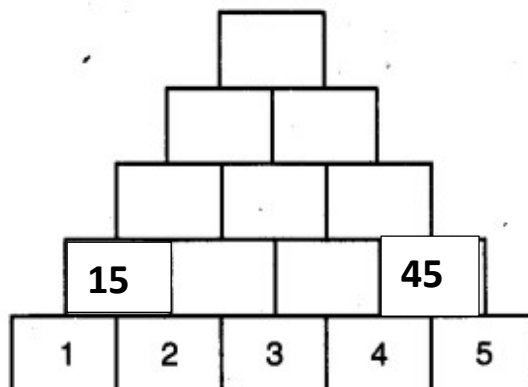
Q8. Answer the following. 2

a) If the radius of the circle is 11 cm then its diameter will be _____ cm.

b) When we add $\frac{1}{2}$ and $\frac{1}{4}$ we get _____.

Q9. a) $84 \div 2 =$ b) $232 \div 2 =$ 2

Q10. Complete the number tower. 2



Q11. Look at the table and answer the following questions.

4

Postal items	Postal rates (in Rs.)
Single post card	0.50
Inland letter	2.50
Letter weighing-	
i) 20 grams or less	5.00
ii) For every additional 20 grams	3.00
Parcel weighing-	
i) 50 grams or less	5.00
ii) For every additional 50grams	4.00

- a) Shalu wants to send a parcel of the Hindi textbook to her friend Reena in Kolkata. The book weighs 250 g. See the table to find out the cost of posting the book?
- b) How much will you have to pay for stamps on a letter weighing 70 grams?
- c) Mayank bought four inland letters. Find out the total amount he had paid?
- d) How much will shikha have to pay for a parcel weighing 350 grams?

PROBLEM SOLVING ABILITY (10)

Q12. Answer the following.

2

a) $110 \div 10 =$ _____

b) $\frac{1}{4}$ of 1 one litre = _____.

Q13. The cost of 1 kg Radish is Rs 16. Kapil bought $\frac{1}{4}$ kg of radish and gave Rs 10 the shopkeeper. How much money will the shopkeeper return to Kapil?

2

Q14. Manpreet put 216 pens into packets. Each packet can hold 9 pens. How many packets will she need to hold all the pens?

2

Q15. If A is 1, B is 2, C is 3 and so on then decode the following words-

4

➤ 12, 9, 2, 18, 1, 18, 25 = _____

➤ 8, 5, 1, 12, 20, 8 = _____

➤ 16, 12, 1, 25, 7, 18, 15, 21, 14, 4 = _____

➤ 13, 1, 20, 8, 19 = _____

ATOMIC ENERGY CENTRAL SCHOOL-2 ,RAWATBHATA

PERIODIC TEST -2(2022-23)

SUBJECT :EVS

Class: IV

Section :_____

Date: _____

Name of the student:_____

Roll no:____

Invigilator's sign: _____

Time :1.30hrs

Examiner's sign: _____

MM:40 M.O: ____

KNOWLEDGE (16 MARKS)

I. Choose the correct answer and fill in the blanks. (5)

1.Basva lived in _____ village of Karnataka .

(Khedi / Belvanika)

2.Khunti is an _____ rod used to dig the soil .(iron /wooden)

3.Squirrels keep _____ on the things to keep their teeth

from growing to long .(jumping /gnawing)

4. _____ is caused due to drinking contaminated water .

(Polio / diarrhoea)

5. Desert Oak tree is found in _____ (Australia / England)

II. Identify the picture and write one sentence about it.

(3)







III. Write answer in one sentence.

(3)

Q1. What did Raziya madam read in the newspaper?

Q2. Why did Nandita come to Mumbai ?

Q3. Why do birds make nest ?

IV. Write a short note about (any one) of the following . (3)

Desert oak tree or Bihu

V. Draw any two type of roots and name them. (2)

•	•
---	---

UNDERSTANDING(14 MARKS)

VI. Observe the pictures related to a festival and fill in the blanks.

(3)



a) People are celebrating _____ festival. (Bihu / Holi /Lohri)

b) During the festival people make house of bamboo and grass which is called_____. (Hut / Bhela Ghar / House boat)

c) People light _____ while celebrating festival. (Mezi/paper/plant)

VII. Match the following .

(3)

1. It is used to dig the soil and
loosen it .

a) illige

2.Used to sprinkle seeds in field.

b) Kurige

3.Used to cut dried leaves from
the top of onion.

c)Khunti

VIII .Name the following .

(4)

1. Unwanted plants that grow on their own in the fields

2. First day of Bihu festival

3. Children's Panchayat in Holgundi area of Karnataka.

4. A bird that stitch together two leaves to make nest.

IX Answer the following .

(4)

a) What is the law against cutting trees?

b) Write any four uses of a bird beak

APPLICATION (10 MARKS)

X. Circle the odd one out.

(2)

Trees

bench

human being

birds

Bhela ghar

mezi

chowpati

uruka

XI. Give reasons.

(3)

1.The woman outside the water park was angry.

2.Nandita's mama was worried.

X. Answer the following in atleast two sentences.

(2)

1. When do you know that onions are ready to be taken out?

Ans _____

2.**Why** did babuji sprinkle water on the vegetables?

Ans _____

XII. On the outline map of India mark the following states/ union territory. (3)

Karnataka Assam Maharashtra

