

Total no of printed pages:10

ATOMIC ENERGY CENTRAL SCHOOLS, RAWATBHATA

TERM-I EXAMINATION (2021-22)

Class: III

Time: 2 hours

Subject: English

Marks: 50

To be filled by the student

Student's Name. : _____

Name of the school: _____

Class /Sec: _____ Roll number: _____

Date of Examination: _____

To be filled by the teacher

Invigilator's Sign: _____

Examiner's Sign: _____

Marks Obtained: _____

Checker' Sign: _____

Q.1. Read the passages given below and answer the following questions.

A. There was great joy in Nina's house. Nina's aunt was getting married. Nina, her father, mother and little brother were all going to Delhi for a wedding. Everyone was happy, except Nina. Her mother took her to the market to buy a new dress.

"What colour would you like?" Mother asked.

"I don't want a new dress, Mother," said Nina.

"Salwar- kameez then?" Nina shook her head.

"What about those lovely white shoes you saw last week?"

"I don't want those, either. Thank you, Mother."

A.1. Choose the correct answer. (1M)

Nina's mother took her to the _____ to buy a new dress.

(garden/ school/ market)

A.2. Who said these words. (1M)

"What about those lovely white shoes you saw last week?"

A.3. Give one word from the passage which gives the meaning of – (1M)

Very beautiful - _____

A.4. Write the antonym of 'sell' from the passage. _____ (1M)

A.5. Where was Nina's family going? (1M)

B. There are a great many million fish in the seas, but this story is about just one of them, and a very small one at that. Now this little fish had everything in the seas to make him contented, but he was not happy. You will laugh when I tell you why he was not. He was unhappy because he was so very small.

“It is very hard to be such a little mite of a fish!” he would say, over and over again. “If I were only larger, how much happier I could be.” And he said it so many times that I think he believed it.

B.1. Why was the little fish unhappy? (1M)

B.2. How many fish are there in the sea? (1M)

B.3. State ‘true’ or ‘false’. (1M)

The story is about big fish. (_____)

B.4. Give one word from the passage which gives the meaning of- (1M)

happy and satisfied- _____

B.5. Write the synonym of ‘little’ from the passage _____ (1M)

C. Once upon a time, there lived four cows in the forest. Every day, they used to graze together in a particular place. One day a lion passed that way and saw the four cows. The lion went near the cows. When the cows saw the lion coming near to them, all of them fought together against the lion.

The lion ran away. After some days, the cows quarreled with each other and began to graze in different directions and all alone.

This was noticed by the lion. The lion thought that its turn had come and came there. The lion killed all the four cows one by one.

Moral: Unity is strength.

(New words:- quarrel - an angry argument, kill- to make something die)

C.1. How many cows were lived in the forest? (1M)

C.2. Who went near the cows? (1M)

C.3 Give a suitable title to the story? (1M)

C.4. Look at the pattern and fill in the blanks.

(2x1=2M)

Kill-killed

a. live - _____ b. pass - _____

C.5. Write the opposites of the given words from the passage:

(2x1=2M)

a. go X _____

b. same X _____

C.6. Choose the correct answer.

(1M)

The lion _____ all the four cows one by one. (hate / attract/ killed)

C.7. Write 'ing' form of the word given in the bracket and complete the sentence.

(1M)

The cows saw the lion _____ (come) near to them.

C.8. Write one word for the following.

(1M)

an angry argument - _____

TEXTUAL QUESTIONS 5 MARKS

Q.2 Read the following poem/stanza and answer the questions given below:

A. “Little by little,” an acorn said.
As it slowly sank in its mossy bed;
“I am improving every day,
Hidden deep in the earth away .”
Little by little each day it grew,
Little by little it sipped the dew.

A.1. Write the word that rhymes with the given word. (1M)

grew - _____

A. 2.What things does a seed need to grow? (1M)

A.3.What is oak tree fruit called? (1M)

A.4. State ‘true’ or ‘false’. (1M)

The acorn grew slowly. (_____)

A.5. Circle the describing word in the sentence given below. (1M)

Little acorn sipped the dew.

CREATIVE WRITING 5 MARKS

Q.3. Using the words given in the help box, write five sentences on the picture given below:

watching, drawing, swinging, playing, reading



GRAMMAR 10 MARKS

Q.4. Look at the pattern and fill in the blanks.

(1M)

large – larger

short - _____

Q 5. Rearrange the words to make correct sentence.

(1M)

planted / old / seeds / man / some /tump /the.

Q.6. Write the given word as per the example given below.

(1M)

do not – don't

are not - _____

Q.7. Make a sentence with using given word.

(1M)

curly - _____

Q.8. Write any suitable describing words for the given pictures.

(2 x 1 = 2M)



a. A _____ cat .

b. A _____ man.



Q.9. Add-ly to the following words and write new words in the space given. (2x1=2M)

a. quick- _____

b. sudden- _____

Q.10. Write plurals for the following words.

(2x1=2M)

a. carrot - _____

b. leaf - _____

VOCABULARY – 5 MARKS

Q.11. Write one word for the following sentence.

(1M)

A meal eaten in the middle of the day.

Q.12. Match the following words with their meanings.

(2x 1 = 2M)

a. awake

one who looks after a garden

b. gardener

not asleep

very large in size

Q. 13. Circle the odd one out.

(1M)

peacock , parrot , lizard , crow , woodpecker

Q.14. Choose the correct word and fill in the blanks .

(1M)

Birds make their _____ . (food / nest)

SPELLING – 5 MARKS

Q.15. Rearrange the letters to make meaningful word. (1M)

ACEPSE _____

Q16. Fill in the blank to make meaningful word. (1M)

MI__HTY

Q.17. Circle the correct spelling. (1M)

bettles beetles batell betelee

Q.18. Correct the given wrong spelling and write. (1M)

wrigle _____

Q.19. Write a word that rhyme with the following. (1M)

think - _____

Total No of printed pages: 08

ATOMIC ENERGY CENTRAL SCHOOLS, RAWATBHATA**TERM –I EXAMINATION (2021-22)****Class: III****Time: 2 Hours****Subject: Hindi****Marks: 50**

To be filled by the student

Student's name: _____

Name of the School: _____

Class/Sec: _____

Roll number: _____

Date of Examination: _____

To be filled by the teacher

Invigilator's Sign: _____

Examiner's Sign: _____

Marks Obtained: _____

Checker's Sign: _____

प्र1- नीचे दिए गए पठित गद्यांश को पढ़कर दिए प्रश्नों के उत्तर लिखो – (5)

एक बुढ़िया थी |उसका एक पोता था | दादी रोज उसे तरह-तरह की कहानियाँ सुनाती थी |पोता रोज सोने से पहले दादी से कहानी सुनता | एक दिन मूसलाधार बारिश हुई |सारा गाँव बारिश से परेशान था| बुढ़िया की झोंपड़ी में जगह-जगह से पानी टपक रहा था , टिपटिप –टिपटिप | इस बात से बेखबर पोता दादी की गोद में लेटा हुआ कहानी सुनने के लिए मचल रहा था | बुढ़िया खीझकर बोली – अरे बचवा, का कहानी सुनाएँ?

1- दादी रोज पोते को क्या सुनाती थी ?

उ- -----

2- बुढ़िया की झोंपड़ी में से क्या टपक रहा था ?

उ- -----

3- सारा गाँव किससे परेशान था ?

उ- -----

4- वाक्य बनाओ –

झोंपड़ी - -----

5- वाक्य पूरा करो –

पोता दादी की गोद में लेटा ----- रहा था |

प्र2- नीचे दिए गए अपठित गद्यांश को पढ़कर प्रश्नों के उत्तर दो -

(5)

एक तालाब के किनारे एक बरगद का पेड़ था। उस पर बहुत-से बंदर रहा करते थे। एक दिन आकाश में चाँद निकला हुआ था। उसकी छाया पानी में दिख रही थी। बंदरों ने सोचा-चाँद पानी में गिर गया है। इसे निकालना चाहिए। उनकी बात सुनकर एक बूढ़े बंदर ने उन्हें चाँद पानी में से निकालने के लिए मना किया परन्तु उन्होंने उसका कहना नहीं माना। पहले एक बंदर डाल से लटक गया। फिर दूसरे बंदर ने पहले बंदर की पूँछ पकड़ ली। इस तरह एक-दूसरे की पूँछ पकड़ते-पकड़ते वे तालाब के पानी में पहुँच गए। नीचे वाले बंदर ने जैसे ही पानी में हाथ दिया, वैसे ही पेड़ की डाली टूट गयी। सब बंदर पानी में डूब कर मर गए।

1. बंदर कहाँ रहते थे?

उ.-----

2. बंदरों ने पानी में चाँद की छाया देख कर क्या सोचा?

उ.-----

3. बूढ़े बंदर ने उन्हें किस बात के लिए मना किया?

उ.-----

4. वाक्य पूरा करो

सब बंदर ----- में डूब कर मर गए।

5. विलोम शब्द लिखो - पकड़ना x -----

प्र3/ क) - बूढ़ी अम्मा को कौन तंग करता था?

(4x1=4)

उ- -----

ख)- दादा घर में कैसे धौंस जमाते होंगे ?

उ- -----

ग)- शेर किसान से क्या लेने गया था?

उ- -----

घ) लिखो , कौन किस पर अकड़ जमाता होगा ?

उ- जंगल में -----

च)- खूटे से क्या-क्या बाँधा जाता है ?

(3x2=6)

उ- -----

छ)- तुम क्या-क्या काम करते हुए ऊब जाते हो?

उ- -----

ज)- कुछ खेलों के नाम लिखो जिनमें दो टोलियाँ खेलती हों ?

उ- -----

प्र4- शेर या कक्कू में से किसी एक के बारे में पाँच वाक्य लिखो -

(5)

प्र5/ क)- लिंग बदलो-

(1x10=10)

उदा- मोर - मोरनी

राजा - -----

शेर - -----

ख) वचन बदलो - एक टोली - चार टोलियाँ

एक तितली - पाँच ----- एक घोड़ा - सात -----

ग) शेखीवाज़ मक्खी कहानी के हिसाब से बताओ कौन क्या ?

घमंडी - -----

आलसी - -----

घ) ये आवाज़ कब सुनाई देती है ?

खर्र - खर्र - -----

च) सफाई के काम से जुड़े शब्द - -----

छ) ज (नुक्तेवाले) से बनने वाले शब्द

ज) विलोम शब्द लिखो -

रात x -----

सुबह x -----

झ) नीचे दिए गए शब्दों को सही करके लिखो-

मरीयल = -----

बारीश = -----

ट) शब्द का अर्थ लिखो-

तरकीब = -----

तनिक = -----

ठ) नीचे दिए गए शब्दों में से नाम वाला शब्द छाँटकर लिखो -

पानी भरना , उठाना , आसमान, झाड़ना

प्र6/क) - इनके पास तुमने किसे उड़ते - मँडराते देखा है ?

(5x1=5)

मिठाइयों पर - -----

ख) शेर और घोड़े में अंतर -

शेर घोड़ा
खाना -----

ग) कौन किससे परेशान था-

पंडित- ----- धोबी - -----

घ) समान तुक वाले शब्द लिखो -

जाओ - ----- कक्कू - -----

च) वाक्य को अपने शब्दों में लिखो -

1- पत्नी की बात धोबी को जँच गई ।

प्र7/ क) - नीचे लिखे वाक्य को शुद्ध करके लिखो -

(5X1=5)

1- किसान डरता-डरता शेर को पास गई ।

ख) कविता की पंक्तियाँ पूरी करो -

मन करता है ----- बनकर ,

----- में दौड़ लगाऊँ ।

ग) सही शब्द चुनकर वाक्य को पूरा करो।

1- शेर ----- बहुत मुश्किल से नींद आई थी। (कि/को/की)

घ) दिए गए मुहावरे से वाक्य बनाइए -

आग बबूला होना - -----

ड) पाठशाला में तुम्हें क्या करने को कहा जाता है और क्या करने के लिए मना

किया जाता है ?

करो

मत करो

1- -----

प्र8- नीचे लिखे अनुच्छेद का सुलेख लिखो।

(5)

एक पेड़ की छाया में दो व्यक्ति बैठे हुए आपस में बातचीत कर रहे थे। उनमें से एक ने कहा,
- ये पेड़ ना होते, तो हमारा जीवित रहना भी मुश्किल हो जाता। पेड़ ही हमें फल- फूल
,सब्जी, छाया, जड़ी-बूटियाँ और पशुओं को खाने के लिए हरा-हरा चारा और पत्तियाँ देते हैं
,परन्तु मनुष्य अपने स्वार्थ के लिए इन्हें काट देता है। दूसरे व्यक्ति ने ज़ोर देकर कहा कि अब हम
लोगों को गलत काम करने से रोकेंगे। पेड़ हैं, तो हम भी हैं।

ATOMIC ENERGY CENTRAL SCHOOLS, RAWATBHATA

TERM -I EXAMINATION (2021-22)

Class: III

Time: 2 Hours

Subject: Maths

Marks: 50

To be filled by the student

Student's name: _____

Name of the School: _____

Class/Sec: _____

Roll number: _____

Date of Examination: _____

To be filled by the teacher

Invigilator's Sign: _____

Examiner's Sign: _____

Marks Obtained: _____

Checker's Sign: _____

I. Answer the following.

(4×1=4)



1. The image is----- view of stairs.

2. Find missing numbers.

50, 100, 150, _____, _____

3. $36 - \underline{\quad} = 24$

4. How many months does a year have?

Ans: _____ months.

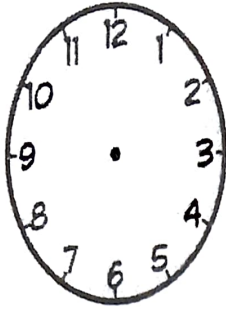
II. Do as directed.

(2×2=4)

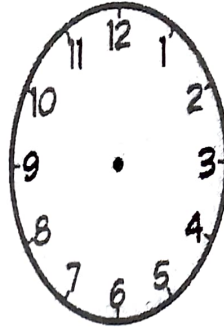
1. Check your answer yourself.

$$\begin{array}{r} 384 \\ - 243 \\ \hline \\ \hline \end{array}$$

2. Show the hands on the clock for the given time.



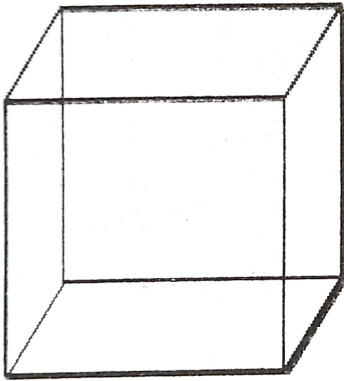
6:30



5:15

3. Observe the figure and answer the following?

($1 \times 4 = 4$)




- a) Name the figure _____
- b) How many corners does it have? _____
- c) How many edges does it have? _____
- d) How many faces does it have? _____

UNDERSTANDING

I. Answer the following.

(4×1=4)

1. Mirror half of  is

2. 1 hour = _____ minutes.

3. What number is missing from the series?

80 75 70 _____ 60 55

4. Length of a sari can be measured in _____.

II. Do as directed.

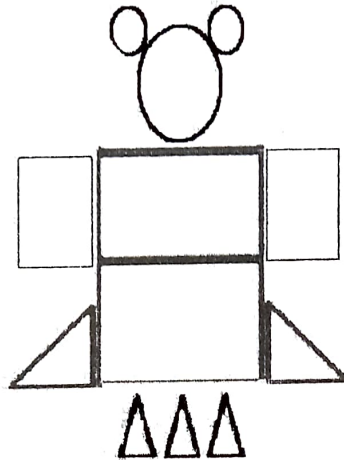
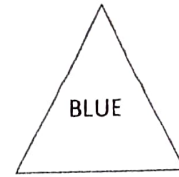
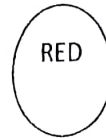

1 Tick the [✓] correct answers.

(1×4=4)

Content	Minutes	Hours	Days
To take your breakfast			
To sleep at night			
A seed to grow			
To be in school			

2. Colour the following shape as per given below.

(4)



ABILITY TO COMPUTE

I. Solve and answer the following.

(4 × 2 = 8)

$$\begin{array}{r} 2 \ 4 \ 5 \\ + 1 \ 0 \ 4 \\ \hline \end{array}$$

a) _____

$$\begin{array}{r} 6 \ 5 \ 8 \\ + 2 \ 3 \ 1 \\ \hline \end{array}$$

b) _____

$$\begin{array}{r} 5 \ 9 \ 5 \\ - 2 \ 8 \ 3 \\ \hline \end{array}$$

c) _____

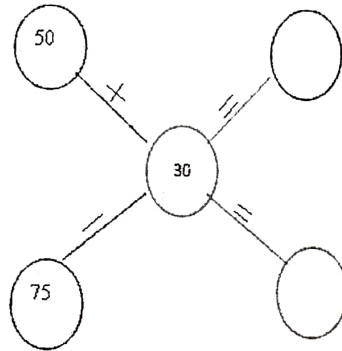
$$\begin{array}{r} 9 \ 6 \ 8 \\ - 7 \ 2 \ 3 \\ \hline \end{array}$$

d) _____

II. Do as directed.

1. Complete the following circles.

(2×1=2)



2. Work out any three different ways to write the numbers.

(3×1=3)

$$62 = 58 + 4$$

i) $62 = \underline{\quad} + \underline{\quad}$ ii) $62 = \underline{\quad} + \underline{\quad}$ iii) $62 = \underline{\quad} + \underline{\quad}$

PROBLEM SOLVING ABILITY

1. Answer the following.

(3×1=3)

1. Circle the odd one out.

9 19 29 39 89 59

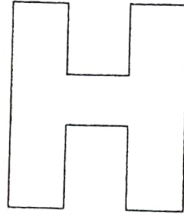
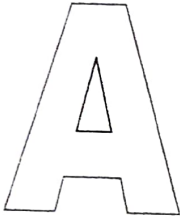
2. I have 3 vertices, 3 sides. Now say who am I _____.

3. The distance from Mumbai to Delhi is about 1400 _____. (Km / M / Cm)

II. Do as directed.

(2)

1. Using dotted lines divide the following alphabets into two similar halves.



2. Geeta had Rs.368/- in her purse she brought a bag for Rs.123/-. How much money will be left in her purse? (2)
3. Sahithi brought a shirt for Rs.125/- and trousers for Rs.165/-. How much money did she spend altogether? (2)

III. Observe the given calendar and answer the following questions. (4)

September 2011

Sun	Mon	Tue	Wed	Thru	Fri	Sat
				1	2	3
4	5	6	7	8	9	10
11	12	13	14	15	16	17
18	19	20	21	22	23	24
25	26	27	28	29	30	

- a. On which day does the month end _____
- b. What day is it on 13th September _____
- c. How many Fridays are there in this month _____
- d. What is the date on Second Saturday _____

All the Best.

ATOMIC ENERGY CENTRAL SCHOOLS, RAWATBHATA
TERM –I EXAMINATION (2021-22)

Class : III

Time: 2 Hours

Subject : EVS

Marks: 50

To be filled by the student

Student's name: _____

Name of the School: _____

Class/Sec: _____

Roll number: _____

Date of Examination: _____

To be filled by the teacher

Invigilator's Sign: _____

Examiner's Sign: _____

Marks Obtained: _____

Checker's Sign: _____

SECTION-A: Observation and Reporting 18 Marks

A.1. Look at the pictures given below. Name the animals that live in your house.

(1/2x1= 1)



A.1.2. State 'T' for true statement or 'F' for false statement:

(1x4=4)

- i. Creepers are the plants which need support to stand erect. ()
- ii. Our eyes also express our feelings. ()
- iii. Banana trees were dropping. ()
- iv. Heavy rains causes drought. ()

A.1.3 Choose the correct options.

(1x2=2)

i. Chhotu set on / in a _____ to have tea.

- (a) bark of tree (b) ground
- (c) pipe (d) balcony

ii. Which of the following is not a source of water?

- (a) rivers (b) lakes
- (c) ponds (d) valley

A.2 (i) Arrange the animals in the order of their size – smallest to largest.

cow, elephant, dog, rat

(1/2x4=2)

A.2. (ii) Rearrange the process of making lemon water (lemonade). (1/2x4=2)

(i) Strain it. ()

(ii) Mix sugar in water. ()

(iii) Lemon water is ready. ()

(iv) Add lemon juice. ()

A.2. (iii) Colour the food that we get from the plants Green and the food that we get from the animals Red. (1/2x4=2)

Spinach ☐

Cheese ☐

Egg ☐

Rice ☐

A.3. Name the picture and write a sentence about each. (1x5=5)



(i)

Name - _____

What does it eat? Where do you see it?



(ii)

Name - _____

When do we see it?



(iii)

Name - _____

What is it used for?



(iv)

Name - _____

What mode of travel is it?



(v)

Name - _____

Who uses it?

SECTION-B: Identification and Classification (16 Marks)

B.1. Complete the sentences using the correct option from the bracket. (1x7=7)

(i) _____ is the most useful vehicle for the people of village. (Bus / Tractor)

(ii) Chhotu made the _____ his home. (pipe / boat)

(iii) The _____ can imitate our voice. (koel / parrot)

(iv) Balbir got a _____ at the tea shop. (magazine / newspaper)

(v) A _____ is a bird that eats dead animals. (vulture / pigeon)

(vi) The elder members of _____ family were dhobis.

(Anwari's / Surekha's)

(vii) We can get water in our house by opening a _____. (door / tap)

B.2 Circle the odd one.

(1/2x4=2)

(i) fish duck monkey crocodile

(ii) bucket towel jug bed sheet

(iii) pond lake river sea

(iv) mint marigold basil fennel

B.3 Match the following.

(1/2x4=2)

- | | | | |
|-------------|---|---|-----------------------|
| i. Mausijji | : | : | gaseous form of water |
| ii. Blind | : | : | maternal aunt |
| iii. Steam | : | : | electricity |
| iv. Oven | : | : | one who cannot see |

B.4. Answer the following questions in one or two sentences.

(1x5=5)

i. How do you store drinking water in your home?

ii. Name four means of transport used for carrying goods.

iii. How do feathers help birds?

iv. Which is our first school?

v. In which part of the house do you spend most of your time?

SECTION-C: Discovery of facts (16 Marks)

C.1. Name any two examples of each: - (1x7=7)

- i. Utensils used in your kitchen: - _____
- ii. Name food items eaten raw: - _____
- iii. Name methods of cooking: - _____
- iv. Name fuels used for cooking: - _____
- v. Name buildings in your neighbourhood:- _____
- vi. Metals used to make utensils: - _____
- vii. Birds that eat seeds: - _____

C.2. Answer the following question in two sentences. (2x1=2)

- i. When do we see a rainbow in the sky?

C.2. (ii) Using the clues given below, find who am I and write it in the given space.

(1/2x4=2)

B	I	C	Y	C	L	E
O	R	A	C	T	O	R
R	C	R	W	Y	C	W
R	A	I	N	Z	L	U
O	O	I	B	J	E	N
I	N	Y	N	G	A	C
S	K	K	S	O	W	L
E	E	Q	S	O	T	E
E	A	G	L	E	T	X

- i. I'm a two wheeler, driven by humans. I'm a _____
- ii. I'm your father's brother. I'm your _____
- iii. I'm the main source of water. I' m _____
- iv. I catch and eat all the mice. My name is _____

C.3. Draw a picture of a plant and also label its five parts. (1x5=5)

