

ATOMIC ENERGY CENTRAL SCHOOLS, RAWATBHATA
TERM –I EXAMINATION (2021-22)

Class: IV

Time: 2 Hours

Subject: English

Marks: 50

To be filled by the student

Student's name: _____

Name of the School: _____

Class/Sec: _____

Roll number: _____

Date of Examination: _____

To be filled by the teacher

Invigilator's Sign: _____

Examiner's Sign: _____

Marks Obtained: _____

Checker's Sign: _____

SECTION A: READING (12 MARKS)

A1. Read the passage carefully and answer the following questions:-

It was a very pleasant day. A cool breeze was blowing. Rahul and Rishika were quite excited. Their mother was taking them to an amusement park. She had already kept a five-hundred rupee note to pay for the joy-rides. But when she opened her purse to take out something, the note just flew away. Both the children ran after it but they could not find it. "Sorry dear", said their mother. "We have to cancel the programme. I don't have more money today." "It is all right, Ma," said the children though they were disappointed. "Since we are not going out, let us clean and decorate the house," Rishika suggested. "I'll bring some flowers and put them in the flower-vase," said Rahul. As he went out to pick some roses, there lay the five-hundred rupee note stuck among the roses. He shouted with joy to see the note.

A1.1 Tick (✓) the correct answer.

A1.1.1 Why were children excited?

1M

- a) They were excited because they got a five-hundred rupees note.
- b) They were excited because programme was cancelled.
- c) They were happy because they lost their money.
- d) They were excited because they were going to amusement park.

A1.1.2 What happened to the note?

1M

- a) The note was torn.
- b) The note was burnt.
- c) The note flew away.
- d) The note got stuck inside the purse.

A1.1.3. Where was the note found?

1M

- a) The note was found stuck among the roses.
- b) The note was found in the purse.
- c) The note was found in the amusement park.
- d) The note was found on the joy rides.

A1.2. Fill in the blanks by choosing the correct options.

2M

- i. The ~~girl~~^{boy} went into the garden to bring _____.
- a) marigolds
 - b) roses
 - c) petunias
 - d) pansies
- ii. _____ suggested to decorate the house.
- a) Mother
 - b) Rahul
 - c) Rishika
 - d) Grandmother

A.1.3. Find the opposite word of dirty from the passage. _____ 1M

A2. Read the poem carefully and answer the following questions:-

I live in a town, in a street,
It's crowded with traffic, and feet.
There are buses and motors, and trams,
I wish there were meadows and lambs.
The houses all wait in a row,
There is smoke everywhere that I go.
I don't like the noises I hear,
I wish there were woods(forest) very near.
There is only one thing that I love,
And that is the sky far above.
There is plenty of room in the blue,
For castles of clouds and me too!

B1.2. Who agreed to help Helen?

Ans _____

B1.3. What do you think birds say to each other in the morning?

Ans _____

B1.4 What is inside us that makes us get up at the same time every day?

Ans _____

B1.5. Write one question that the little boy asks in the poem, 'Why'.

Ans _____

B1.6. Why does the poet feel that nose is a funny thing?

Ans _____

B1.7.Name four things that sink.

Ans _____

B1.8. While listening to the story, what did Alice see?

Ans _____

B1.9.What happens when the day is over?

Ans _____

B1.10. Why was the little fir tree sad?

Ans _____

B2. Who said these words and to whom? 2M

B2.1. “There is a clock inside you which tells you when to eat, when to sleep and when to wake up.”

Ans _____

B2.2. “No one can match my skill in archery.”

Ans _____

SECTION- C: CREATIVE WRITING (10MARKS)

C1. Write five sentences about your favourite sport. 5M

C2. Write five sentences about the picture given below. You may use the clues given in the box.

5M

sitting	climbing	playing	children
running	reading	riding	enjoying



SECTION D: GRAMMAR (6MARKS)

D1. DOASDIRECTED:

1M

D1.1. Complete the following sentences by choosing the right words from the brackets.

- i. The golden _____ was very _____ to him. (dear/ deer)
ii. Tanmay's _____ likes to play in the _____. (sun/ son)

D1.2. Make a new word by joining the following words.

1/2M

- break + fast - _____

D1.3. Fill in the blanks using 'was' or 'were'

1/2M

- Men _____ ploughing the field.

D1.4. Write the correct words in the gaps.

1M

- i. good _____ best
- a. gooder b. more good
- c. better d. more better
- ii. heavy heavier _____
- a. most heavy b. heaviest
- c. heavyer d. heavyest

D1.5. Complete the sentences using 'and' or 'but'

1M

- i. The cows, ducks _____ chicken are meeting for a morning meal.
- ii. Reeta wanted to play with her brother _____ her brother wanted to watch T.V.

D1.6. Write the correct plural form of:-

1M

D1.6.1.leaf-_____

- a. leafs b. leaves
c. more leaves d. leafy

D1.6.2.child - _____

- a. many child b. more children
c. childrens d. children

D1.7. Write full forms of the following:-

1M

i. won't - _____ ii. didn't - _____

SECTION E: VOCABULARY (5MARKS)

E.1. Give one word for the following:-

1M

E.1.1 to run with quick light steps-

E1.2. to speak in low voice-

E.2. Write the opposites of the words below by adding un- or im-

1M

E2.1. polite x _____

E2.2. safe x _____

E3. Encircle the correct meanings of the following words:-

1M

E3.1. dearly

a. expensive

b. important

c. with great affection

d. dislike

E3.2. cease

a. start

b. stop

c. peace

d. fear

E4. Replace the underlined words with a word from the bubble and re-write the sentence.

1M

target, amazement

E4.1. She looked at the golden key in great surprise.

Ans _____

E4.2. In no time he hit the object he aimed at.

Ans _____

E.5. Write the name of the games where these terms are used.

1M

E5.1. googly - _____

E5.2. free kick - _____

SECTION F: SPELLING(5 MARKS)

F.1 Some letters are missing in each word. Write the missing letters:-

1M

F.1.1. p r _____ t y

F1.2. s t r _____ t

F.2. Encircle the correct spelling.

1M

F.2.1. giggle gigel geeggle gicle

F.2.2. niddle needel needil needle

F.3. Tick (✓) the correct spelling from the following options.

1M

a. curiocity

b. disapeared

c. triumphantly

d. targit

F.4. Unjumble the letters in order to make meaningful words:

1M

F.4.1. opeppd (to jump) - _____

F.4.2. cherry (a sport) - _____

F.5. Choose the correct words and write in the gaps.

1M

F5.1. The bees are _____ .

a. bussing

b. buzing

c. buszing

d. buzzing

F5.2. Miss Sullivan was _____ but kind.

a. strikt

b. stirect

c. strict

d. sitrct

ATOMIC ENERGY CENTRAL SCHOOLS, RAWATBHATA

TERM – I EXAMINATION (2021-22)

Class: IV

Time: 2 hours

Subject: Hindi

Marks: 50

To be filled by the student

Student's Name: _____

Name of the school: _____

Class/Sec: _____ Roll number: _____

Date of Examination: _____

To be filled by the teacher

Invigilator's Sign: _____

Examiner's Sign: _____

Marks Obtained: _____

Checker's Sign: _____

प्र०१) नीचे दिए गए गद्यांशों को पढ़कर पूछे गए प्रश्नों के उत्तर लिखो।

क) अपठित गद्यांश

(१×५=५)

मानव एक गरीब लड़का था। शनिवार को उसके दोस्त साहिल का जन्मदिन था। साहिल ने मानव को जन्मदिन मनाने के लिए अपने घर बुलाया। मानव बहुत उदास था क्योंकि उसके पास उपहार देने के लिए कुछ भी नहीं था। तब ही अचानक उसे याद आया कि उसके पास एक नई किताब थी जो उसके पापा ने उसे लाकर दी थी। उसमें मनोरंजक कहानियाँ थीं। मानव ने साहिल को वह किताब उपहार में दी। साहिल को मानव का उपहार बहुत पसंद आया।

१. मानव के दोस्त का क्या नाम था ?

२. साहिल ने मानव को अपने घर क्यों बुलाया था ?

३. मानव क्यों उदास था ?

४. मानव ने साहिल को उपहार में क्या दिया ?

५. साहित्य को मानव का उपहार कैसा लगा ?

ख) पठित गद्यांश

(१×५=५)

गर्मी की छुट्टियाँ थीं। दोपहर के समय दिनेश घर में बैठा कोई कहानी पढ़ रहा था। तभी पेड़ के पत्तों को हिलाती हुई कोई वस्तु धम्म से घर के पीछे वाले बगीचे में गिरी। दिनेश आवाज़ से पहचान गया कि वह वस्तु क्या हो सकती है। वह एकदम से उठकर बरामदे की चिक सरकाकर बगीचे की ओर भागा।

“अरे अरे बेटा, कहाँ जा रहा है? बाहर लू चल रही है।” दिनेश की माँ मशीन चलाते – चलाते एकदम ज़ोर से बोली। परन्तु दिनेश रुका नहीं। उसने पैरों में चप्पल भी नहीं पहनी।

वह जहाँ से आवाज़ आई थी उसी ओर भाग चला।

१. दिनेश क्या कर रहा था ?

२. दिनेश को क्या सुनाई दिया ?

३. दिनेश बगीचे की ओर क्यों भागा ?

४. दिनेश की माँ क्या कर रही थीं ?

५. वचन बदलकर लिखो ।

कहानी - -----

प्र०२) निम्न प्रश्नों के उत्तर दो ।

(१×४=४)

क) किन- किन महीनों में ज़्यादा बादल छाते हैं ?

ख) कौन बूँदों और लहरों से लड़ते हुए आगे बढ़ रही थी ?

ग) ख्वाजा सरा का बस चलता तो वे किसे हिंदुस्तान से बाहर निकलवा देते ?

घ) नसीरुद्दीन की अचकन कैसी थी ?

प्र०३)

क) निम्न शब्दों के अर्थ लिखो। (१×२=२)

अभिमान = -----

संसार = -----

ख) कविता “मन के भोले भाले बादल” के अनुसार निम्न शब्दों को पूरा करो। (१×२=२)

म -----

जि -----

ग) जिस इमारत में तीन मंजिलें हों, उसे तिमंजिली इमारत कहते हैं। (१×२=२)

बताओ , इन्हें क्या कहेंगे ?

जिस स्कूटर में दो पहिए हों - -----

जिस झंडे में तीन रंग हों - -----

घ) नीचे दिए गए वाक्य में से विशेषण शब्द छाँट कर लिखो।

(१)

बगीचे में सुंदर फूल खिले हैं।

ड) सरकंडे से बनने वाली किन्हीं दो चीज़ों के नाम लिखो।

(१×२=२)

च) पापा के पापा को दादा कहते हैं। इन्हें तुम अपने घर में क्या कहकर बुलाओगे? (१×२=२)

पापा के बड़े भाई -----

माँ की बहन -----

छ) सीताफल की बेल होती है और भिंडी का पौधा। बताओ, कौन-कौन सी

(१×४=४)

सब्जियाँ बेल और पौधे पर लगती हैं।

बेल - -----

पौधा - -----

प्र०४) नीचे दिए गए वाक्य को अपने तरीके से लिखो।

(१)

हिसाब देखकर मंत्री का चेहरा फीका पड़ गया।

प्र०५) सही शब्द चुनकर उसपर (✓) का निशान लगाओ।

(१×२=२)

• चौंकिदार चौकीदार चौकीदार

• संयाशी संन्यासी सन्यासी

प्र०६) नीचे दिए गए शब्दों से वाक्य बनाओ।

(१×२=२)

सचमुच -

सजा -

प्र०७) निम्न प्रश्नों के पूरे उत्तर लिखो।

(२×३=६)

क) राजसभा में सज्जन और विद्वान लोग क्यों नहीं जाते थे?

.....

.....

.....

ख) नसीरुद्दीन हमेशा अपनी अचकन के बारे में क्यों बताते होंगे ?

ग) अगर तुम रेल से सफ़र करोगे तो तुम्हें प्लेटफॉर्म और रेलगाड़ी में कौन-कौन लोग नज़र आएँगे ?

प्र०८) मान लो तुम्हारा कोई खिलौना घर में ही कहीं खो गया है। तुमने अपने

साथियों को घर पर बुलाया है ताकि सब मिलकर उसे खोज लें।

तुम अपने खिलौने की पहचान के लिए अपने साथियों को कौन-कौन सी बातें बताओगे।

लिखो। (७५ से १०० शब्द)

(५)

Handwriting practice lines consisting of 12 horizontal dashed lines.

प्र०९) सुलेख लिखो।

पुस्तकों का महत्त्व तथा मूल्य रत्नों से भी अधिक है, क्योंकि रत्न बाहरी चमक-दमक दिखलाते हैं, जबकि पुस्तकें मनुष्य के हृदय को उज्ज्वल बनाती हैं। अच्छी पुस्तकें मनुष्य पशु से देवता बनाती हैं। वह उसे पथ - भ्रष्ट होने से बचाती हैं। श्रेष्ठ पुस्तकें मनुष्य, समाज राष्ट्र का मार्ग-दर्शन करती हैं। पुस्तकों का हमारे मन-मस्तिष्क पर स्थाई प्रभाव पड़ता है।

ATOMIC ENERGY CENTRAL SCHOOLS, RAWATBHATA

TERM –I EXAMINATION (2021-22)

Class: IV

Time: 2 Hours

Subject: Maths

Marks: 50

To be filled by the student

Student's name: _____

Name of the School: _____

Class/Sec: _____

Roll number: _____

Date of Examination: _____

To be filled by the teacher

Invigilator's Sign: _____

Examiner's Sign: _____

Marks Obtained: _____

Checker's Sign: _____

(KNOWLEDGE 12 MARKS)

Q. 1 Do as directed.

(1 x 4 = 4 marks)

a) 1 kilogram = _____ gram

b) Write the given number in words.

11,284 - _____

c) Make the biggest three digit numbers using 2, 9 and 5

d) Write the given numbers in ascending order

8849, 8498, 8984, 8289, 4898 _____

Q.2 a) Write the given dates in words.

(2 x 4 = 8 marks)

07/10/10 - _____

12/12/12 - _____

b) Write the following dates in figure.

13 December 2009 - _____

22 May 2005 - _____

c) Convert into metre -

8 kilometer - _____ metre

$\frac{1}{2}$ kilometer - _____ metre

d) Write the sum of the numbers.

10000 + 2000 + 800 + 40 + 9 = _____

$$50000 + 5000 + 500 + 50 + 5 = \underline{\hspace{2cm}}$$

(UNDERSTANDING BASIC CONCEPT 12 MARKS)

Q.3 Do as directed.

(1 x 4 = 4 marks)

- a) Write any two numbers which can be divided by 4, 5 and comes between 15 and 45.

- b) One lakh = _____ (1000 / 100000)

vo points on the

- c) A brick has _____ edges.

- d) Draw a line segment of 3.5 cm.

Q.4 Do as directed.

(2 x 2 = 4 marks)

- a) Complete the table.

Time	12 hour clock	24 hour clock
2 O'clock in the afternoon		
11 O'clock at night		

b) Write the appropriate unit in the table.

ITEMS	WEIGHT	UNIT(m, L, kg)
RICE	3	
SAREE	6	

(4 marks)

Q.5 Multiply the following by using box method.

$$45 \times 24$$

(ABILITY TO COMPUTE 13 MARKS)

Q.6. Read the problem and solve

(1 x 3= 3 marks)

i) The rate of 1 kg sugar is Rs 30. What will be cost of 5 kg sugar?

ii) Amit has 1L water bottle. He drank 500ml water and his brother drank 250 ml water. How much water is left in the bottle?

- iii) Rocky jumped 2 m 50 cm in the high jump competition. How many centimeter more does he need to reach 3m?

Q.7 Solve the problems

(2 x 3 = 6 marks)

BISCUIT PACKET

Mfg date: 01 JAN 05

Exp date: 01 JULY 05

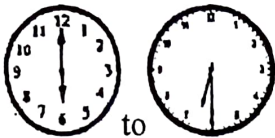
a)

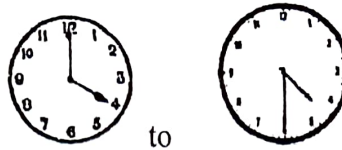
i) Would it be safe to eat the biscuits in February 06 ? _____

ii) The biscuit packet will not be safe to eat after _____ months.

b) Draw the top and front view of the railway track.

c) How long will it take the minute hand to move from





Q.8 Observe the table. Arrange the activities in order according to the date and write again. (4 marks)

1	5 January 2006	She stood up
2	15 April 2005	Muniya was born
3	15 October 2005	She started crawling
4	10 December 2005	She sat up
5	5 October 2005	She got her first tooth
6	20 January 2006	She started walking

1	15 April 2005	Muniya was born
2		
3		
4		
5		
6	20 January 2006	She started walking

(PROBLEMSOLVING ABILITY 13 MARKS)

Q.9 Fill in the blanks and say how much it is? (1 x 3 = 3 marks)

a) 6 notes of

Rs. 100

 = _____

b) 10 notes of

Rs.

 = Rs 200

c) 5 notes of

Rs.

 = Rs 50

Q.10 Solve the followings. (2 x 3 = 6 marks)

a) Sangita buys one kilogram plastic for Rs.20. She sells it for Rs.25.

i) How much money does she earn by selling 1kg plastic? _____

ii) How much money does she earn by selling 21kg plastic? _____

b) Raju bought 500 old bricks and 2000 new bricks.

If the cost of the 1000 old bricks—Rs.600 and the cost of 1000 new bricks is Rs.1000. How much ~~money~~ did he pay?

c) Each bus takes about 10 minutes to refill. There were 5 buses to refill.

Each bus takes 2 minutes extra to refill. How many hours did they take in all to refill?

Q.11 The rate list of Gopal's shop for 1 kg is given below.

(4 marks)

	Items	Rate list
1	Iron	Rs. 84
2	Brass	Rs. 25
3	Waste Paper	Rs. 2.50

Observe the table and find out the cost of the given items.

i) 15 kg iron

ii) 10 kg Waste Paper

Total No of printed pages: 06

ATOMIC ENERGY CENTRAL SCHOOLS, RAWATBHATA**TERM –I EXAMINATION (2021-22)****Class: IV****Time: 2 Hours****Subject: EVS****Marks: 50**

To be filled by the student

Student's name: _____

Name of the School: _____

Class/Sec: _____

Roll number: _____

Date of Examination: _____

To be filled by the teacher

Invigilator's Sign: _____

Examiner's Sign: _____

Marks Obtained: _____

Checker's Sign: _____

Section A: Observation and Reporting (18 Marks)

Q1. Tick (✓) the correct answer.

[7X1=7]

A)  is used in

a) Rajasthan

b) Tamil Nadu

c) Ladakh

B)  is used in

a) Kerala

b) Gujarat

c) Telangana

C)  is called

a) Group

b) School

c) Herd

D)  lives in


a) Forest

b) Streets

c) Water

E) We get honey from

a) 

b) 

c) 

F) Which is a cement bridge?


a) 

b) 

G) Jwala, Leela and Heera were players of



a)



b)

Q2. Write answers in one or two sentences.

[3X2=6]

A) What is a ferry?

B) Why there was an excitement in Nimmi's family?

C) Name four things which can be dissolved in water.

Q3. What is Jugad? Why is it called Jugad?

[1X5=5]

Section B: Identification and Classification (16 Marks)

Q4. Choose the correct answer and fill in the blanks. [7X1=7]

A) Chetandas was shifted from _____. [Pakistan / Nepal]

B) _____ is caused by drinking dirty water. [Diarrhoea / Fever]

C) Valley of flowers is in _____. [Uttarakhand / Bihar]

D) _____ is famous for its scents. [Madhubani / Kannauj]

E) The river starts from _____. [sea / mountain]

F) At the age of _____ years girl's marriage is allowed. [21 / 18]

G) There are _____ players in a Kabaddi team. [7 / 5]

Q5. Write answers in one or two sentences. [2X2=4]

A) What type of game is Kabaddi?

B) Every child has a right to free education up to class 8th. What do you think about it?

Q6. What information can we get from a railway ticket? [1X5=5]

Section C: Discovery of Facts (16 Marks)

Q7. Write TRUE or FALSE.

[7X1=7]

- A) Queen Bee lays eggs in beehive. _____
- B) Omana's family was going to Ahmedabad. _____
- C) There was so much noise at level crossing. _____
- D) Elephants sleep for 9 hours daily. _____
- E) Bishnoi is a community of people around Khejadli village. _____
- F) Karnam Malleshwari is a weight lifter. _____
- G) Stone powder is soluble in water. _____

Q8. Write answers in one or two sentences.

[2X2=4]

A) Write any two information we can get from a railway time table.

B) What was written in the letter, which Tsering's father has received from his office?

Q9. Locate the following in the map.

[1X5=5]

- | | |
|---------------|-----------------|
| 1.) Karnataka | 2.) Uttarakhand |
| 3.) Ladakh | 4.) Rajasthan |
| 5.) Kerala | |

