

Atomic Energy Education Society

Half Yearly examination (2022-23)

Subject: English

Class – III

Time: 3 hrs

Subject: English

Marks:80

To be filled by student

Students name: _____

Name of the school: _____

Class/ sec: _____ **Roll No:** _____ **Date of Examination:**21.09.22

To be filled by the teacher

Invigilator's sign: _____

Examiner's sign: _____

Marks Obtained: _____

KNOWLEDGE (35 marks)

Q1.A. Choose the correct options and write in the given blank.

(5)

a) We say _____ while going back to home. (Good day / Goodbye / Hello / Welcome)

b) _____ needs to be pulled out from the earth. (Tomato / Peas / Beans / Turnip)

c) The birds live in _____. (hole / house / water / nest)

d) _____ are thin weak branches of a tree. (twigs / stem / root / shoot)

e) _____ sang sweet songs in the magic garden. (fairies / children)

Q.1.B. Match the animals with their sounds.

(5)

Animals	Sounds they make
Duck	Hiss
Bee	Buzz
Donkey	Quack
Cat	Meau
snake	Bray

Q.2.A Give one word for following

(3)

a) A hard protective layer- _____ (shell / blanket)

b) A place for purchase or sale of things- _____ (market / playground)

c) Someone who takes care of a garden- _____ (gardener / teacher)

Q.2.B) Rearrange the letters to make meaningful words

(3)

a) PLOEEP _____

b) WOLBE _____

c) CUNLH _____

Q.2.C Write true or false.

(3)

1) Nina does not want to leave the baby sparrows alone. _____

2) Fairies wore dresses made of flowers. _____

3) Robin and Jay think that people are not funny. _____

Q.3.A Answer the following questions.

(4)

a) Why was Sonu chasing the butterfly ?

b) Where did the child find the sea shell?

Q.3.B. Answer the following questions in one word .

(4)

Who said these words.

i) “ Mother, I don’t want to go to the wedding .” _____

ii) I want to pull the enormous turnip. _____

Q.3.C) Rearrange the words to make meaningful sentence.

(2)

Nina's Aunt / married / getting / was

Q.4.A.(I) List the three things that people can't do.

(3)

II) Choose the correct adjective from the box and fill in the blanks.

(3)

Fat	happy	black	tall	beautiful
------------	--------------	--------------	-------------	------------------



i) A _____ girl.



ii) A _____ boy.



iii) A _____ board

Understanding (25marks)

Q.1) Read the unseen passage and answer the following questions.

(8)

Dr Rajendra Prasad was a simple man. He was born on 3rd December 1884. He was our first President. He was of the belief that it was wrong on the part of anyone to multiply his needs. His motto was simple living and high thinking. He was a great believer in industries because he thought that they were the means to national prosperity.

Fill in the blanks.

a) Dr Rajendra Prasad was a _____ man. (simple / fat)

b) He was born on 3rd _____ 1884. (December / January)

- c) It was wrong on the part of anyone to multiply his _____. (**Wealth** / **needs**)
- d) He was a great believer in _____. (**agriculture** / **industries**)
- e) He was our first _____. (**President** / **Prime Minister**)
- f) Write the words from the passage which means the same as
- i) Easy to understand- _____ (**simple** / **Complicated**)
- ii) Something you accept as true- _____ (**Belief** / **dream**)
- g) Write the opposite of **Dying** _____ (**Living** / **faint**)

Q.2.A Number the sentences in correct order

(4)

1. Finally I dress up and go to school. ()
2. Then I brush my teeth and have a bath. ()
3. First of all I get out of bed. ()
4. After this I eat my breakfast. ()

Q.2.B Answer the questions after reading the poem.

(4)

He always comes on market days

And holds balloons- a lovely bunch-

And in the market square he stays

And never seems to think of lunch.

And some are big and some are small

All tied together with a string

And if there is a wind at all

They tug and tug like anything.

i)Who comes on market days?

ii)Where does he stay?

iii)What does he sell?

iv)What does he use to tie the balloons?

Q.3.A) Write 4 sentences on the given picture using the words given in the help box. (4)

Cake	balloons	birthday	gifts	wishing	singing
-------------	-----------------	-----------------	--------------	----------------	----------------



Q.3.B) Complete the following story with the help of clues given in the box. (5)

stones	Plan	drink	little	water
--------	------	-------	--------	-------

Once Upon a time there was a crow. He was very thirsty. He flew here and there in search of _____. He saw a pot in the garden. There was _____ water in it. He could not _____ it. He thought of a _____. He put some _____ into it. The water rose up. He drank it and flew away.

Application (20marks)

Q.1.A Use can or cannot to complete the sentences. (3m)

a) A butterfly _____ fly.

b) A snake _____ walk.

c) A dog _____ run.

Q.1.B. Circle the odd one out.

(3m)

a. cow apple horse goat

b. turnip sunflower potato carrot

c. pineapple rice apple gauva

Q.2.A. Make two words from the single word given.

(4)

a) Everywhere=_____+_____

b) Sunlight=_____+_____

c) Outside=_____+_____

d) Moonlight=_____+_____

Q.2.B Add ‘-ful’ or ‘-ish’ or ‘ly’ to make words and fill in the blanks.

(3)

a) A rose is a _____ flower. (beauty)

b) The rangoli is very _____. (colour)

c) Ram drives car very _____. (slow)

Q.3.A Pick the Rhyming words and write them in the given space

(3)

Drink	ring	sunny	beat	sink	seat	king
--------------	-------------	--------------	-------------	-------------	-------------	-------------

i) Think _____, _____

ii) Sing _____, _____

iii) eat _____, _____

Q.3.B Make four sentences on birds using the words given in the help box.

(4)

Nest	water	chirp	fly	sky	wings
-------------	--------------	--------------	------------	------------	--------------

परमाणु ऊर्जा केन्द्रीय विद्यालय, रावतभाटा

अर्द्धवार्षिक परीक्षा (सत्र-1) 2022-2023

पृष्ठों की संख्या -10

कक्षा - तीसरी विषय - हिंदी समय - 3 घंटे पूर्णांक - 80

नाम ----- वर्ग ----- अनुक्रमांक ----- दिनांक 23.9.22

विद्यालय का नाम -----

ह० निरीक्षक ----- ह० परीक्षक ----- ह० जांचकर्ता -----

प्राप्तांक

प्रश्न[1] पठित गद्यांश को पढ़कर नीचे लिखे प्रश्नों के उत्तर लिखो। 1x10 =10

पंडित जी लगे फिर पानी उलीचने। धोबी वहाँ से चल दिया। चलते - चलते वह एक वह एक तालाब के पास पहुँचा। तालाब के किनारे ऊँची - ऊँची घास उग रही थी। धोबी घास में गधे को ढूँढ़ने लगा। किस्मत का मारा बेचारा बाघ टिपटिपवा के डर से वहीं घास में छिपा बैठा था। धोबी को लगा कि बाघ ही उसका गधा है। उसने आव देखा न ताव और लगा बाघ पर मोटा लट्ठ बरसाने। बेचारा बाघ इस अचानक हमले से घबरा गया।

(क) पंडित जी क्या कर रहे थे ?

(ख) धोबी चलते - चलते कहाँ पहुँच गया ?

(ग) बाघ किससे डर रहा था ?

(घ) धोबी ने किसे अपना गधा समझ लिया ?

(ङ) बाघ किससे घबरा गया ?

(च) गद्यांश में से ढूँढ़कर नाम वाला शब्द लिखो -

(छ) गद्यांश में से ढूँढ़कर काम वाला शब्द लिखो -

(ज) अर्थ लिखो -

आव देखा न ताव -----

(झ) शुद्ध रूप लिखो -

किसमत -----

(ञ) लिंग बदलो - धोबी -----

प्रश्न [2] अपठित गद्यांश को पढ़कर नीचे लिखे प्रश्नों के उत्तर लिखो। 1x10=10

मोर हमारे देश का राष्ट्रीय पक्षी है। यह किसानों का भला करने वाला है। यह खेती को नुकसान पहुँचाने वाले कीड़ों को अपना भोजन बनाता है। यह साँप का शत्रु और बादलों का मित्र है। आकाश में बादलों को देखकर यह प्रसन्नता से झूम उठता है और नाचने लगता है। इसके आधे चन्द्रमा के आकार से सुशोभित पंख बहुत सुंदर लगते हैं। इसके पैर बहुत सुंदर नहीं होते इसलिए ऐसा कहा जाता है कि नाचते-नाचते जब इसकी नज़र अपने पैरों पर पड़ती है तब वह दुखी होकर नाचना बंद कर देता है। लोग इसके पंख से पंखा बनाते हैं। कृष्ण के सर पर भी मोर का मुकुट हटा है। भारत सरकार ने मोर के चित्र का टिकट भी जारी किया है।

(क) हमारा राष्ट्रीय पक्षी कौन है?

(ख) मोर का शत्रु कौन है ?

(ग) मोर बादलों को देखकर क्या करता है ?

(घ) किसके सर पर मोर का मुकुट है ?

(ङ) मोर के पंखों का आकार कैसा होता है? पर गोला लगाओ ।

पूरा चन्द्रमा

आधे चन्द्रमा

काला चन्द्रमा

(च) सही ✓ या गलत × का निशान लगाओ ।

मोर के पंख सुंदर होते हैं। ()

(छ) ऊपर दिए गए गद्यांश से शब्द चुनकर वाक्य पूरा करो ।

भारत सरकार ने मोर के चित्र का ----- भी जरी किया है ।

(ज) उलटे अर्थवाले शब्द लिखो ।

दिन ----- बहुत -----

(झ) ' आकाश ' शब्द के अर्थ पर गोला लगाओ ।

आसमान बादल सूरज

(ञ) शब्दों के अर्थ लिखो ।

मित्र ----- शत्रु -----

प्रश्न [3] नीचे दिए गए प्रश्नों के उत्तर एक वाक्य में लिखो । (वस्तुनिष्ठ) 1x5 = 5

(क) शेर किसान से क्या लेने गया था ?

(ख) बूढ़ी अम्मा किससे परेशान थी ?

(ग) जंगल में कौन अकड़ जमाता है?

(घ) कक्कू का मतलब क्या होता है ?

(ङ) दो टोलियों में खेले जाने वाले खेलों के नाम लिखो ।

प्रश्न[4] पाठों और कविताओं पर आधारित नीचे लिखे प्रश्नों के उत्तर लिखो।

(लघु प्रश्न)

2x 5 = 10

(क) शेखीबाज़ मक्खी कहानी में तुम्हें कौन सबसे अच्छा लगा और क्यों ?

(ख) चाँद वाली अम्मा झाड़ू क्यों नहीं छोड़ना चाहती थीं ?

(ग) बैल की जान कैसे बच गई ?

(घ) शेर ने भेड़िए की पूँछ से अपनी पूँछ क्यों बाँध ली ?

(ङ) तुम्हें किन - किन बातों पर अक्सर टोका जाता है ?

प्रश्न[5] पाठ्य पुस्तक से व्याकरण पर आधारित प्रश्न।

क. वचन बदलो। जैसे - तितली - तितलियाँ (2)

कहानी ----- सब्ज़ी -----

ख. लिंग बदलो। जैसे - मोर - मोरनी (2)

पति ----- राक्षस -----

ग. विलोम शब्द लिखो। (2)

खुश ----- बहादुर -----

घ. समान अर्थवाले शब्द लिखो। (2)

स्नान ----- हमला -----

ड. नीचे लिखे शब्दों को वर्णमाला क्रमानुसार लिखो । (2)

साबुन पतंग

च. नीचे लिखे वाक्य को अपने शब्दों में लिखो

आज एक राक्षसी से पला पड़ गया । (1)

छ. नीचे लिखे वाक्य में से नाम वाला शब्द छाँटकर लिखो । (1)

मुझे आम खाना पसंद है ।

नामवाला शब्द -----

ज. समान तुक वाला शब्द लिखो । (1)

बोली -----

झ. नीचे लिखे वाक्य में से काम वाला शब्द छाँटकर लिखो। (1)

मम्मी चाय बनाती है ।

कामवाला शब्द -----

ञ. ज और ज़ पर नुक्ते वाला शब्द लिखो। (1)

ज ----- ज़ -----

प्रश्न 6 टिपटिपवा कहानी एक ऐसे दिन की है जब मूसलाधार बारिश हो रही थी।

अगर मूसलाधार बारिश की बजाय बूँदा - बाँदी होती तो क्या होता ? (5)

प्रश्न 7 दिए गए चित्र के बारे में पाँच वाक्य लिखो ।

(5)



प्रश्न 8 चाँद वाली अम्मा या बित्तो के बारे में एक अनुच्छेद लिखो। (5)

प्रश्न 9 शब्दों के शुद्ध रूप लिखो । (2)

प्रनाम ----- परेसान -----

प्रश्न 10 कविता की पंक्तियाँ पूरी करो । (4)

नहीं ----- से कहता कोई

----- यहाँ पर मत फैलाओ ,

कोई नहीं ----- से कहता

उठा ----- को ले जाओ ।

प्रश्न 11 नीचे लिखे वाक्यों को शुद्ध करके लिखो। (2)

१ घड़े पर पानी है।

२ मेरी स्कूल बड़ा है ।

प्रश्न 12 नीचे लिखे मुहावरे व शब्द का वाक्यों में प्रयोग करो । (2)

होश-हवास गुम होना -----

वरना -----

प्रश्न 13 नीचे लिखे अनुच्छेद का सुलेख लिखो (5)

परोपकार मानव का सबसे बड़ा धर्म है । स्वार्थ के दायरे से निकलकर व्यक्ति जब दूसरों की भलाई के विषय में सोचता है, दूसरों के लिये कार्य करता है । इसी को परोपकार कहते हैं । भगवान सबसे बड़ा परोपकारी है जिसने हमारे कल्याण के लिये संसार का निर्माण किया । प्रकृति का प्रत्येक अंश परोपकार की शिक्षा देता प्रतीत होता है । सूर्य और चाँद हमें जीवन प्रकाश देते हैं ।

Atomic Energy Central School No.2, Rawatbhata

Half Yearly Examination-2022-23

Class:III

Time:3 Hrs

Subject: Mathematics

Marks:80

Student's Name: _____

Class/Sec: _____ Roll No. _____ Date of Examination: 16-09-2022

To be filled by the teacher

Invigilator's Sign: _____

Examiner's Sign: _____

Marks Obtained: _____

1. Answer the following :-

(1 X8=8)

a) Find missing numbers :- 50, 60, 70,,,

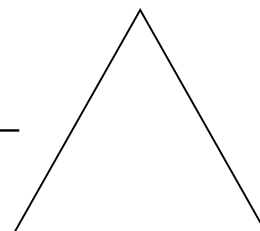
b) $36 - 24 = \dots\dots\dots$

c) How many months does a year have ? _____

d) Observe the figure and answer the questions :-

i) How many corners does it have ? _____

ii) Name of the figure _____



e) 1 hour = _____ minutes.

f) 1 kilometre = _____ metre.

g) Write in numbers :-

One hundred sixty one _____

Two hundred twenty seven _____

h) Write in words:-

145 _____

569 _____

2. Do as directed

(1X7=7)

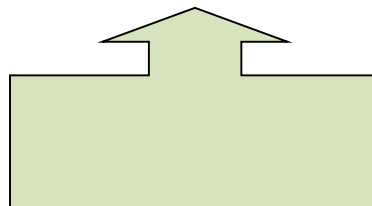
A. On the grid given below , draw the following :-

a) A boat


b) A flower



B. Make a dotted line to divide the picture in two mirror halves:



C. Write the time that each clock is showing:



.....



.....

D. Circle the greatest number: 923 , 465 , 647

Circle the smallest number: 501 , 510 , 150

E. Complete the calendar :-

August 2017

SUN	_____	TUE	_____	THRU	_____	SAT
		1	2	3	4	5
6	_____	_____	9	10	11	12
13	14	_____	16	17	_____	19
20	_____	22	_____	24	25	26
27	28	_____	30	31		


F. Match the following.

(a) Ball



have straight edge

(b) Box



have curved edge

G. Which of these will be in centimeters and which will be in meters :-

a) Width of a computer screen _____

b) Length of a bus _____

3. Answer the following

(1X6=6)

I. 11 more than 31 is _____

II. 11 less than 66 is _____

III. 23 less than 89 is _____

IV. 10 and 40 more is _____

V. 4 and 37 more is _____

VI. 100 more than 250 is _____

4. Match the following :-

(1/2x4=2)

A

Length of an earthworm

Height of a child

Length of a sari

Distance from home to school

B

2 kilometres

5 metres

10 centimetre

1 metre

5. Look at the table of Aman's Family and answer the questions: (1/2x4=2)

S. No.	Family Members	Age (in years)
1	FATHER	42
2	MOTHER	39
3	SISTER	13
4	AMAN	9

1. Who is the youngest in Aman's Family: _____

2. Who is the oldest in Aman's Family: _____

3. What is the difference of their ages= _____ -- _____ = _____

6.Solve the following :-

(2x6=12)

a) $345 + 634$

b) $684 + 232$

c) $363 + 456$

d) $756 -- 567$

e) $427 - 248$

f) $590 - 276$







7. Match with numbers.

(3)

- (a) I have 9 in my name and am very close to 90 : 100
- (b) I am equal to six notes of 10 : 89
- (c) Half Century : 60

8. Look at the table below and fill in the blanks.

(4)

	Children	Number of postal stamps collected by them	
	Reeta	42	
	Ganga	74	
	Indu	45	
	Ravi	24	
	Sita	83	

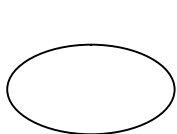
- (a)..... collected the most stamps.
- (b)Reeta will collect more stamps to be equal to Indu.
- (c)If Ganga gets 6 more stamps, she will havestamps.
- (d)How many children have more than 50 stamps?.....

9. Observe the given calendar and answer the following questions. (5)

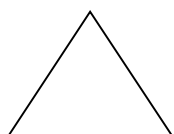
SEPTEMBER 2022						
SUN	MON	TUE	WED	THRU	FRI	SAT
				1	2	3
4	5	6	7	8	9	10
11	12	13	14	15	16	17
18	19	20	21	22	23	24
25	26	27	28	29	30	

- i) On which day does the month end ? _____
- ii) Write the number of days in the month. _____
- iii) What day is it on 13th September ? _____
- iv) How many Fridays are there in the month ? _____
- v) What is the date on second Saturday ? _____

10. Tick ($\sqrt{\quad}$) the shapes which are made up of straight line only and put the cross (X) on others. (2)



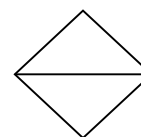
()



()



()



()

11. Do as directed

(4 X2=8)

a. Fill in the blanks :-

- a) There are _____ hours in a day.
- b) There are _____ days in a week.
- c) There are _____ minutes in one hour.
- d) There are _____ months in a year.

b. Ram cooked Chapati's in 35 minutes. Then he made dal in 15 Minute. How much time did he take to cook both things?

c. Shalu found 360 shells . Suman found 265 shells. How many shells did they find in all ?

d. Geeta had 368 in her purse She bought a book for Rs 123 . How much money is left in her purse ?

12. Given below are some festivals we celebrate during the year. Look at the calendar to find the answer of following questions:- (4)

Name of the festival	Date	Name of the festival	Date
Diwali	21 October	Pongal	14 Januray
Raksha bandhan	9 August	Gandhi Jayanti	2 October
Onam	5 September	Christmas day	25 December
Bihu	14 April	Milad-UI-Nabi	11 April

(a) Which festival comes in the beginning of the year?

(b) On which date we celebrate Christmas day ?

(c) Which festival comes on 25 December ?

(d) On which date we celebrate Gandhi Jayanti ? _____

13. Observe the pattern and fill in the blanks . (2)

450, 455, 460, _____, _____

550, 548, 546, _____, _____

14 . Fill in the blanks. (4)


a. 20 less than 45 is _____

b. 10 more than 36 is _____

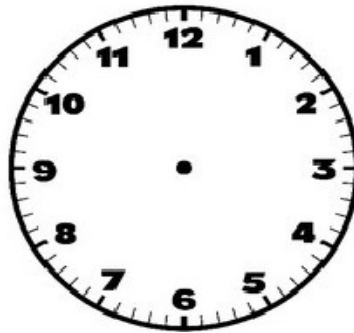
c. The sum of 6 and 74 is _____

d. Reducing 69 by 44 is _____

18. Draw the hour hand and minute hand on the clock's face to show the given time. (4)



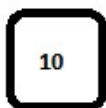
3:30



6:15

19. Draw side view of table. (2)

20. Show the following numbers using the given cards . (5)



a. 15:-

b. 25:-

c. 72 :-

d. 502:-

e. 101 -

Atomic Energy Education Society

Half Yearly Examination – 2022-23

Class : III

Time: 3 Hrs.

Subject : EVS

Marks : 80

To be filled by students

Student's Name : _____

Name of the School : _____

Class /Sec: _____ Roll No.: _____ Date of Examination : _____

To be filled by teacher

Invigilator's Sign: _____

Examiner's Sign : _____

Marks obtained: _____

A. Knowledge (35)

Q.1 Choose the correct answer and fill in the blanks. (1x10=10)

- a) Didi was sitting on the _____. (table /grass)
- b) At home , we get water from the _____. (river /tap)
- c) An ambulance is used to carry _____ people. (sick /healthy)
- d) A _____ eats dead animals.(vulture / peacock)
- e) A rainbow has _____ colours. (six/seven)
- f) _____ can imitate our voice. (parrot/ crow)
- g) A car has _____ wheels. (four/two)

h) Michael touched a _____ bush. (mehendi /cotton)

i) The activity _____ needs the most water.(brushing/ washing house)

j) The _____ has a sweet voice. (koel /crow)

Q.2 Write the name of any two animals which of them-

(2x5=10)

a) can fly _____

b) can crawl _____


c) can walk _____

d) have wings _____

e) have a tail _____

Q.3 Identify the picture and write their names.

(1x4=4)



Q.4 Who am I?

(1x4=4)

a) In trunk of trees holes I make. Hidden insects I intake.

b) Dead animals I do eat. Making places clean and neat.

c) I appear after rainfall. Have no feet so I crawl.

d) Croak, croak, croak is my sound. In water or land I am found.

Q.5 Write the name of any four trees.

(2)

Q.6 Look at the vehicles. Write their names and what they are used for.

(2 ½)





Q.7 How do you clean your house?

(2 ½)

B. Understanding (25)

Q.1 Circle the odd one.

(1x5=5)

- | | | | |
|-----------------|------------|-------|------------|
| a) car | bus | truck | boat |
| b) bullock cart | camel cart | cycle | horse |
| c) train | scooty | cycle | bike |
| d) pot | cooker | rice | frying pan |
| e) iron | rice | onion | tomato |

Q.2 Write true or false.

(1x5=5)

- a) A train can move anywhere. ()
- b) Deepali is the eldest children her family. ()

- c) A barber mends our shoes. ()
- d) Chhotu used the pipe as a house. ()
- e) Appu was an elephant. ()

Q.3 Match the following . (1x5=5)

Repair cars and scooter	Driven by human
Chhuk chhuk	Elephant
Boat	Mechanic
Heater	Train
Appu	Electricity

Q.4 Give two examples. (1x5=5)

1. Activities which you can do without water.

2. Activities which you cannot do without water.

3. Name any two rivers.

4. Sources of water.

5. Uninvited animals.

Q.5 Draw any two utensils that are used for cooking. (2 ½)

--	--

Q.6 Name the things with which you decorate your house. (2 ½)

C. Application (20 marks)

Q.1 Write five methods of cooking. (1x5=5)

Q.2 Match the following.

(1x5=5)

a)



1)



b)



2)



c)



3)




d)



4)



e)



5)



Q.3 Name the following statement in one word. (1x5=5)

a) One who cannot speak _____.

b) One who cannot hear _____.

c) On my head I have a crest _____.

d) I am your mother's brother _____.

e) I am your father's mother _____.

Q.4 Where do you throw the garbage of your house? (1)

Q.5 Write 4 food items that are prepared from the wheat. (4)

	Wheat	