

# ATOMIC ENERGY CENTRAL SCHOOL NO-2, RAWATBHATA

## Half Yearly Examination 2022-23

**Class: IV**

**Time: 3 Hrs**

**Subject: English**

**Marks: 80**

---

**Student's Name-** \_\_\_\_\_

**Sec:** \_\_\_\_\_ **Roll No-** \_\_\_\_\_ **Date: 19-9-2022**

---

**Invigilator's Sign-** \_\_\_\_\_

**Examiner's Sign-** \_\_\_\_\_

**Marks obtained-** \_\_\_\_\_

---

### KNOWLEDGE (35 MARKS)

**A.1-Choose the correct word and fill in the blanks. (1x5=5)**

- 1) The children ..... happy. (was/were)
- 2) Nasruddin was ..... with his friends. (playing/ chatting)
- 3) Alice followed the ..... (rat/rabbit)
- 4) Helen could not hear and ..... (speak/see)
- 5) 'Don't be afraid of the dark' is written by.....(Ruskin Bond/Fletcher)

**A.2-Write one word. (1x5=5)**

- 1) One who can't see- .....b.....
- 2) Protecting from attack- ...d.....
- 3) A person who plays magic tricks- .....m.....
- 4) The script for blind people- .....b.....
- 5) One who tends to ask many questions- ...c.....

**A.3-Who am I?**

**(1x3=3)**

- 1) I have needle like leaves- .....
- 2) Big / vast fields of grass- .....
- 3) I wake you up in the morning by making sound at a set time-  
.....

**A.4-Rearrange the letters to make meaningful words.**

**(1x3=3)**

- 1) ucortny- .....
- 2) skwhrsie- .....
- 3) otughth- .....

**A.5-Who said to whom?**

**(1x3=3)**

- 1) No one match my skill in archery.

Ans- .....

- 2) Relax! Today is Sunday!

Ans- .....

- 3) I would like to reward you.

Ans- .....

**A.6-Answer in one sentence.**

**(2x3=6)**

- 1) Do you like to play and run about?

Ans- .....

.....

- 2) What did Nasruddin boast about?

Ans- .....

.....

.

3) Who agreed to help Helen?

Ans- .....

.....

A.7-Frame 2 questions using 'Why'. (2x2=4)

1- .....

2- .....

**A.8-Answer in 3-5 sentences.**

**(3x2=6)**

1) What strange things did Alice see?

.....

.....

.....

.....

.....

.....

2) Write six sentences about Helen Keller.

.....

.....

.....

.....

.....

.....

## UNDERSTANDING (25 MARKS)

### B.1-Read the passage carefully and answer the questions.

Animals eat plants and other animals. Animals can be grouped under four categories depending on the kind of food habits. Animals that eat plants are called Herbivores. Cow, sheep, giraffe are some of them. Carnivores are animals that eat flesh of other animals such as lion, tiger etc. Some birds eat flesh of dead animals are called scavengers such as eagle, vulture and jackals. Animals that eat plants and meat both, are called omnivores. Bear, crow, cockroach are omnivores. Parasites are small insects or animals. Fleas, leeches and bugs are some parasites.

Tick the correct answer.

(1x4=4)

Q-1- Omnivores eat plants and .....

- a) Trees                      b) leaves                      c) meat                      d) eagle

Q-2- Animals can be grouped under ..... categories.

- a) Four                      b) five                      c) seven                      d) three

Q-3- ..... eat flesh of other animals.

- a) Carnivores                      b) parasites                      c) omnivores                      d) herbivores

Q-4- Which is not a scavenger?

- a) Vulture                      b) crow                      c) eagle                      d) jackal

Q-5- Write one example of a parasite. (1)

Ans- .....

Q-6- Define Herbivores. (2)

Ans.....

.....

Q-7- Write a title / heading for the passage. (1)

Ans- .....

**B.2-Read the poem carefully and answer the questions followed by that.**

Some people are like caterpillars,

Some people are like butterflies.

People who are insecure

People who think they are fat

People who think they are ugly.

People who are scared of their flaws.

Are the caterpillars.

People who have accepted that no matter how hard you  
try, you will never be perfect.

People who are positive, People who are dreamers

People who believe anything can happen as long as you try, Are the butterflies.

Tick the correct answer.

(1x4=4)

Q-1- What are people like?

- a) Lions                      b) tigers                      c) caterpillars                      d) birds

Q-2- People who are ..... are the butterflies.

- a) Positive                      b) fat                      c) ugly                      d) scared

Q-3- The opposite of beautiful is .....

- a) Bad                      b) rare                      c) ugly                      d) smart

Q-4- Caterpillar is the young one of a .....

- a) Bird                      b) rat                      c) cat                      d) butterfly

Q-5- Which kind of people do you like from the poem?

(2)

Ans.....  
.....

Q-6- Find a word from the passage that means- not safe

..... (1)

Q-7- Give a title to the above poem.

(1)

Ans- .....

**B.3-Write the story with given outline.**

**(½x10=5)**

The Fir tree had ..... like leaves. Magician granted  
..... wishes to the tree. The tree wanted .....leaves.  
..... ate the green leaves. The magician gave it  
..... leaves. A man stole the ..... leaves. The  
magician gave it glass leaves. The ..... broke the glass leaves.  
Finally it got it's ..... leaves again. The .....  
tree was ..... happy.

**B.4-Look at the picture given below and write four meaningful sentences about it.**  
**(1x4=4)**

.....

.....

.....

.....

.....

.....



### Application -20

C.1-Tick the correct answer.

(1x6=6)

- 1) I want to complete my work ..... I'm not feeling well.  
a) because      b) so      c) but      d) and
- 2) That question is ..... difficult to solve.  
a) To      b) too      c) two      d) none

- 3) The opposite of war is .....  
 a) piece                      b) far                      c) peace                      d) peas
- 4) The superlative degree of bad is .....  
 a) badder                      b) worse                      c) worst                      d) baddest
- 5) How ..... miles did she travel?  
 a) much                      b) few                      c) many                      d) little
- 6) II form of catch is .....  
 a) catched                      b) caught                      c) cot                      d) none

**C.2-Do as directed.**

- 1) Punctuate the following sentence. (1)  
 can raju read the time

Ans- .....

- 2) Match the following. (1x3=3)

- |                       |              |
|-----------------------|--------------|
| a) To walk fast       | disappear    |
| b) Move fast          | hurried away |
| c) To be seen nowhere | scamper      |

**C.3-Complete the sentence. (1)**

Although Helen could not hear or see, she .....

**C.4-Correct the sentence. (1)**

Shooting with a bow and arrow is called cricket.

Ans- .....

**C.5-Circle the odd one. (1)**

heavy                      pretty                      long                      window

**C.6-Make 4 sentences using the words given below. (1x4=4)**

Hockey, stick and ball, eleven, stadium



.....

.....

.....

.....

.....

.....

.....

**C.7-Make sentences.** **(1x3=3)**

- a) afraid- .....
- b) strict- .....
- c) pocket- .....

\*\*\*\*\*

\*\*\*\*\*

**परमाणु ऊर्जा केंद्रीय विद्यालय #2, रावतभाटा**  
**अर्द्धवार्षिक परीक्षा**

कक्षा - चार  
विषय - हिंदी

समय : 3 घंटे  
पूर्णांक : 80

विद्यार्थियों के द्वारा भरा जाएगा

नाम - \_\_\_\_\_

वर्ग - \_\_\_\_\_ अनुक्रमांक - \_\_\_\_\_ दिनांक - 16/09/2022

शिक्षकों के द्वारा भरा जाएगा

निरीक्षक के हस्ताक्षर - \_\_\_\_\_ परीक्षक के हस्ताक्षर - \_\_\_\_\_

जाँच-कर्ता के हस्ताक्षर - \_\_\_\_\_ प्राप्तांक: \_\_\_\_\_

प्र०1. निम्नलिखित अपठित गद्यांश को पढ़कर दिए गए प्रश्नों के उत्तर लिखिए। (10)

सोहन एक होता लड़का था। वह प्रतिदिन आम के पेड़ के नीचे बैठ कर अपना पाठ याद करता था। सोहन के पिता को एक परेशानी थी। आम के पेड़ पर भी फल लगते तो बच्चे पत्थर मारकर आम तोड़ने की कोशिश करते थे। रोज़-रोज़ की घटनाओं से तंग आकर सोहन के पिता जी ने पेड़ कटवाने का निश्चय कर लिया। एक दिन पेड़ काटने वाले कुल्हाड़ी लेकर आ गए। सोहन ने पेड़ काटने से मना कर दिया। उसने कहा मैं इस को नहीं काटने दूँगा। यह मेरा दोस्त है। पेड़ सारी ज़हरीली गैस लेकर हमें शुद्ध हवा देता है। पेड़ हमें ठंडी छाया और मीठे फल भी देते हैं।

क) सोहन कौन था ? (1)

ख) वह अपना पाठ कहाँ याद करता था ? (1)

---

ग) सोहन के पिताजी ने पेड़ कटवाने का फैसला क्यों किया ? (1)

---

घ) पेड़ काटने वाले क्या लेकर आए थे? (1)

---

ड.) पेड़ हमें क्या देते हैं ? (1)

---

च) निम्न शब्दों के समान अर्थ लिखो। (1×2=2)

दोस्त - \_\_\_\_\_ तंग - \_\_\_\_\_

छ) वचन बदलो। (1)

बच्चा - \_\_\_\_\_

ज) लिंग बदलकर लिखो। (1×2=2)

लड़का - \_\_\_\_\_ पिता - \_\_\_\_\_

प्र०2. निम्नलिखित पठित गद्यांश को पढ़कर नीचे लिखे प्रश्नों के उत्तर लिखिए। (10)

शुरू-शुरू में पापा चौकीदार बनना चाहते थे। उन्हें यह सोचना बहुत अच्छा लगता था कि जब सारा शहर सोता है, चौकीदार जागता है। उन्हें यह सोचना भी अच्छा लगता था कि जब हर कोई सोया हुआ हो, वह खूब शोर मचा सकते हैं। उन्हें पक्का यकीन था कि वह बड़े होकर चौकीदार ही बनेंगे। अगले दिन अपने चटकदार हरे ठेले को लिए आइसक्रीम वाला आ गया। भई वाह! पापा आइसक्रीम वाला बनेंगे। वह ठेले को लेकर भी घूम सकते हैं और जितना मन चाहे उतनी

आइसक्रीम भी खा सकते हैं। पापा ने सोचा, “मैं एक आइसक्रीम बेचूँगा तो एक खुद खाऊँगा”।  
छोटे बच्चों को तो मैं मुफ्त में आइसक्रीम दिया करूँगा।

क) शुरू – शुरू में पापा क्या बनना चाहते थे ? (1)

---

ख) पापा को क्या सोचना अच्छा लगता था ? (1)

---

---

ग) पापा को किस बात का पक्का यकीन था ? (1)

---

घ) अगले दिन कौन आया था ? (1)

---

ड.) आइसक्रीम वाले का ठेला किस रंग का था ? (1)

---

च) खाली जगह भरिए। (1)

छोटे बच्चों को तो मैं \_\_\_\_\_ आइसक्रीम दिया करूँगा।

छ) वचन बदलकर लिखो। (1)

ठेला - \_\_\_\_\_

ज) अर्थ लिखिए । (1+1=2)

यकीन - \_\_\_\_\_ चटकदार - \_\_\_\_\_

झ) निम्न वाक्य में से सर्वनाम शब्द चुनकर लिखो। (1)

वह बड़े होकर चौकीदार बनेंगे। \_\_\_\_\_

प्र०3. निम्न प्रश्नों के उत्तर एक शब्द या एक वाक्य में लिखिए। (1x5 = 5)

क) बहन भैया से क्या बनवाना चाहती थी ? (1)

\_\_\_\_\_

ख) दिनेश क्या खोज रहा था ? (1)

\_\_\_\_\_

ग) साल के किन महीनों में ज़्यादा बादल छाते हैं ? (1)

\_\_\_\_\_

घ) खाली जगह भरो।

बादशाह अकबर अपने मंत्री बीरबल को बहुत \_\_\_\_\_ करता था । (1)

(पसंद / नापसंद)

ड.) तुम बन ठन कर कहाँ – कहाँ जाते हो ? (1)

\_\_\_\_\_

प्र०4. (1x15=15)

क) निम्न शब्दों के समान अर्थ वाले शब्द लिखो। (2)

संसार - \_\_\_\_\_ विश्वास - \_\_\_\_\_

ख) बताओ इसे क्या कहेंगे ? (1)

जिस मकान में दो मंज़िलें हों - \_\_\_\_\_

ग) “मन के भोले -भाले बादल ” कविता के अनुसार अधूरे शब्दों को पूरा कीजिए। (2)

म - \_\_\_\_\_ जि - \_\_\_\_\_

घ) इन्हें तुम अपने घर में क्या कहकर बुलाओगे ? (2)

पापा के पापा - \_\_\_\_\_ माँ की माँ - \_\_\_\_\_

ड.) सरकंडे से बनने वाली किन्हीं दो चीज़ों के नाम लिखो। (2)

\_\_\_\_\_

च.) पानी बरसने की कोई दो आवाज़ें - (2)

\_\_\_\_\_

छ) उदाहरण के अनुसार करो। (4)

	कैसा	कौन
उदा०	सूरज-सी	चमकीली
	थाली	
	चंदा-सा	_____
	जोकर-सा	_____

प्र०5. निम्नलिखित प्रश्नों के उत्तर लिखिए। (2×5=10)

क) दीपक ने गेंद को अपना बताने के लिए कौन-कौन सी बातें बताईं? (2)

\_\_\_\_\_  
\_\_\_\_\_  
\_\_\_\_\_  
\_\_\_\_\_

ख) अगर तुम रेलगाड़ी से सफ़र करोगे तो तुम्हें प्लेटफॉर्म और रेलगाड़ी में कौन-कौन लोग नज़र आएँगे ? (2)

---

---

---

---

ग) राजसभा में सज्जन और विद्वान लोग क्यों नहीं जाते थे ? (2)

---

---

---

---

घ) तुम किन – किन चीज़ों में माहिर हो ? लिखो। (2)

---

---

---

---

ड.) तुम्हारे मोहल्ले और घर के आसपास बारिश आने पर क्या-क्या होता है ? (2)

---

---

---

---

प्र०7. मान लो तुम्हारा कोई खिलौना घर में ही कहीं खो गया है। तुमने अपने साथियों को घर पर बुलाया है ताकि सब मिलकर उसे खोज ले। तुम अपने खिलौने की पहचान के लिए अपने साथियों को कौन-कौन से बातें बताओगे ? (5)

---

---

---

---

---

---

---

---

प्र०8. समान आवाज़ वाले शब्द लिखो। (2)

खोलो \_\_\_\_\_ आया \_\_\_\_\_



प्र०9. चित्र को देखकर उसके बारे में पाँच वाक्य लिखो।

(5)



---

---

---

---

---

---

---

---

---

---

प्र०10. बीरबल के बारे में पाँच वाक्य लिखो।

या

जमाल साहब और नसीरुद्दीन के बारे में पाँच वाक्य लिखो। (5)

---

---

---

---

---

---

---

प्र०11. अशुद्ध शब्दों को शुद्ध करो। (2)

अभीनेता - \_\_\_\_\_ आशीरवाद - \_\_\_\_\_

प्र०12. निम्न वाक्यों को शुद्ध करके लिखो। (2)

मेरे को घर जाना है।

---

बन्दर छत में चढ़ गया।

---

प्र०13. वाक्य बनाओ। (2)

सचमुच - \_\_\_\_\_

जल - \_\_\_\_\_

प्र०14. मुहावरों का वाक्यों में प्रयोग करो। (2)

कलई खुलना - \_\_\_\_\_

\_\_\_\_\_

ऊँट के मुँह में जीरा - \_\_\_\_\_

\_\_\_\_\_

प्र०15. नीचे लिखे अनुच्छेद को सुन्दर लेख में लिखिए। (5)

माता-पिता का आदर करना सभी बच्चों का कर्तव्य होता है। क्योंकि वे स्वयं कष्ट सहकर हमें खुशियाँ प्रदान करते हैं। हमारी छोटी से छोटी ज़रूरत का भी ध्यान रखना अपना कर्तव्य समझते हैं। उन्हें अपने बच्चों से सदा यह उम्मीद रहती है कि वे आज्ञाकारी बनें और पढ़-लिखकर जीवन में सफलता हासिल करें। हमें सदा अपने माता-पिता को खुश रखना चाहिए।

\_\_\_\_\_

\_\_\_\_\_

\_\_\_\_\_

\_\_\_\_\_

\_\_\_\_\_

\_\_\_\_\_

\_\_\_\_\_

\_\_\_\_\_

---

ATOMIC ENERGY CENTRAL SCHOOL NO.2 RAWATBHATA

Half Yearly Examination (2022-23)

Class – IV

Time: 3 Hrs

Subject: Mathematics

Marks: 80

---

To be filled by the student

Student's Name: \_\_\_\_\_

Name of the School: \_\_\_\_\_

Class/Sec. : \_\_\_\_\_ Roll no. : \_\_\_\_\_ Date of Examination : 23-09-2022

---

To be filled by the Teacher

Invigilator's sign: \_\_\_\_\_

Examiner's sign: \_\_\_\_\_

Marks obtained : \_\_\_\_\_

---

Section A - Knowledge (20 Marks)

Q1. Tick the correct answer and fill in the blanks.

(6X1=6)

1) One metre = \_\_\_\_\_ centimetres

a) 1000

b) 10

c) 100

d) 101

2) The arch with a veil is also known as \_\_\_\_\_.

a) Ghoonghat waali deewar

b) Jaali

c) Ghoonghat waali mehraab

d) None of these

3) One hour = \_\_\_\_\_ minutes.

a) 30

b) 60

c) 350

d) 90

4) In a 24 hour clock, 4:00 pm is written as \_\_\_\_\_

- a) 15:00                      b) 16:00                      c) 16:10                      d) 15:59

5) \_\_\_\_\_ times 100 ml = 1 L

- a) 9                      b) 7                      c) 10                      d) 1

6) Full form of Mfg. Date is \_\_\_\_\_

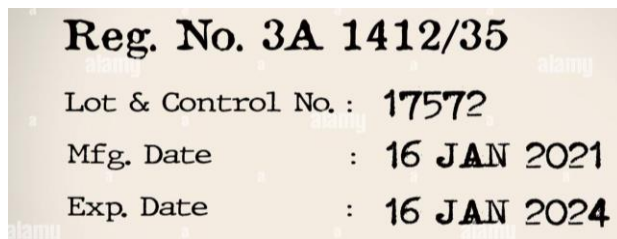
- a) Magnifying date                      b) Managing date
- c) Manufacturing date                  d) none of these

Q2. Do as directed. (5X2=10)

1) Express the following in am or pm.

- a) 12 noon = \_\_\_\_\_  
b) 5:30 in the evening = \_\_\_\_\_  
c) 12 midnight = \_\_\_\_\_  
d) 10 o'clock in the morning = \_\_\_\_\_

2) Look at the picture and answer the following questions.



a) On which date was the butter packed?

---

b) Can you eat it on 25th September 2024?

---

3) Name any two things that come with an expiry date.



---

---

4) Make four 3-digit numbers using 9, 4 and 7.

---

5) Draw the top view of the following pictures.



Q3. How long will it take the minute hand to move from?

(4X1=4)



\_\_\_\_\_



\_\_\_\_\_



\_\_\_\_\_



\_\_\_\_\_

Section B - Understanding (20 marks)

Q4. Choose the correct option and fill the gaps.

(6X1=6)

- a) A triangle has \_\_\_\_\_ sides. (5, 6, 3)
- b) Double of 66 is \_\_\_\_\_. (123, 142, 132)
- c) \_\_\_\_\_ is the greatest 3 digit number. (100, 999, 990)
- d) \_\_\_\_\_ + 6452 = 6452 (0, 6452, 1)
- e) Half litre = 1 X \_\_\_\_\_ ml. (1000, 500, 100)
- f) In a 3000 metres race people run \_\_\_\_\_ km. (30, 33, 3)

Q5. Do as directed.

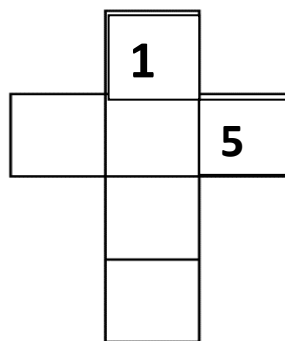
(5X2=10)

1) Write these dates in numbers.

26 January 2012 - \_\_\_\_\_

16 September 2009 - \_\_\_\_\_

2) Fill in the box with the correct numbers.



3) Draw the side view and the top view of a shoe.





4) Name any 2 activities in which more than 1 litre water is used.

---

---

5) Fill in the blanks.

a) The cup holds \_\_\_\_\_ water than a jug. (Less, more)

b) The pot holds \_\_\_\_\_ water than a bottle. (Less, more)

Q6. Multiply by box method.

(2X2=4)

a) 453 X 6

X			

\_\_\_\_\_ + \_\_\_\_\_ + \_\_\_\_\_ + \_\_\_\_\_ = \_\_\_\_\_

b) 63 X 14

X		

\_\_\_\_\_ + \_\_\_\_\_ + \_\_\_\_\_ + \_\_\_\_\_ = \_\_\_\_\_

Section C - Ability to Compute (20 marks)

Q7. Fill in the blanks

(6X1=6)

1.  $250 \text{ ml} + \underline{\hspace{2cm}} \text{ ml} + 260 \text{ ml} = 1 \text{ litre}$

2.  $5 \text{ m } 65 \text{ cm} + 3 \text{ m } 29 \text{ cm} = \underline{\hspace{4cm}}$

3.  $4 \text{ m} = 4 \times \underline{\hspace{2cm}} \text{ cm}$

4.  $49 \times 19 = \underline{\hspace{3cm}}$

5.  $345 + 230 + 652 = \underline{\hspace{3cm}}$

6. Number of days from 5th March to 16th July.

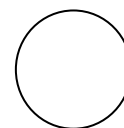
---

Q8. Read the problem and solve.

( 5X2=10)

- 1) Hardik takes round of a circular park. The boundary of the park is about 600 m long.  
How much distance will he cover in 4 rounds?

600 m



- 2) A milkman sold 26 L 200 ml of milk on 3 days of a week and 42 L 195 ml of milk in next 2 days. What quantity of milk did he sell in 5 days?

3) The cost of 1000 bricks is Rs 600 and Ranjan bought five thousand bricks. How much did he pay?

4) Yusuf runs a tea shop. For making a glass of tea he uses 30 ml of milk. Yesterday he made 110 glasses of tea. How much milk did he use?

5) Renu has 114 football cards. He kept 10 cards and share the rest of the cards evenly among his 8 friends. How many football cards did each friend get?

Q9. Complete the table.

(8X½=4)

S.NO.	ITEM	BOUGHT FOR	SOLD FOR	PROFIT OR LOSS	BY HOW MUCH?
1.	2 Kg Tomatoes	Rs 73	Rs 90		
2.	1 Kg Groundnuts	Rs 80	Rs 110		
3.	5 Pencils	Rs 25	Rs 50		
4.	50 Erasers	Rs 100	Rs 80		

Section D - Problem Solving Ability (20 marks)

Q10. Fill in the blanks with the correct option.

(6X1=6)

1. Milk and milk packet will be measured in \_\_\_\_\_ ( litre, mililitre, centimetre)
2. It takes \_\_\_\_\_ to boil 500 ml milk. (Seconds, minutes, hours)
3.  $145 + 163 + 274 =$  \_\_\_\_\_. (582, 572, 682)
4.  $350 \text{ m} +$  \_\_\_\_\_  $\text{m} + 150 \text{ m} = 1 \text{ km}$  (500, 450, 1000)
5. Half of one meter = \_\_\_\_\_ centimeter. (10, 100, 50)
6. \_\_\_\_\_ 50 rupees notes are needed to make Rs 450. (nine, eight ,seven)

Q11. Solve the following.

(5X2=10)

- 1) Vidhi was born on 12th March 2016.
  - a) What is the present age of Vidhi?

---

b) Vidhi started crawling after 8 months. Name the month in which she started crawling.

---

2) Shivani collected junk from the junk collector for and gave Rs 658 to him. She gave these notes to the junk collector.

3 notes of Rs 100

3 notes of Rs 50

10 notes of Rs 20

4 notes of Rs 10

a) What is the total amount she gave to the junk collector?

b) How much money did she get back?

3) Simran comes to school from very far. She first walks about 300 m to the pond. With slippers in her hands, she then walks 150 m through the pond. Next she runs across the 250 m wide potato field. Then she crosses 250 m long street. At last she crosses the 60 m wide road to reach her school.

a) How much does Simran walk every day to reach school?

b) Is it more than 1 km? If yes how much?

4) Look at the table given below and answer the following questions.

Name	Age
Pooja's Grandmother	81 years old
Mayank's Grandfather	75 years old
Chiku rat's Grandfather	2 years old

a) How much older is Pooja's grandmother than Mayank's grandfather?

b) How much younger is Chiku rat's grandfather than Pooja's grandmother?

5. Add the following.

$$\begin{array}{r} 6 \text{ litre } 752 \text{ mililitre} \\ + 3 \text{ litre } 403 \text{ mililitre} \\ \hline \end{array}$$

$$\begin{array}{r} 2 \text{ litre } 109 \text{ mililitre} \\ + 7 \text{ litre } 582 \text{ mililitre} \\ \hline \end{array}$$

Q12. Inter-state sports meet was organized in your school. Many students took part in different sports. Read the following data and answer the following questions. (4X1=4)

Sports	First Position	Second Position
High Jump (Boy)	Joy (3m 40cm)	Amit (3m 10 cm)
High Jump (Girl)	Deepti (2m 80cm)	Leela (2m 40cm)
Long Jump (Boy)	Punit (7m 40cm)	Ranu (7m 10cm)
Long Jump (Girl)	Sonia (5m 60cm)	Ritu (5m 20cm)

a) Whose long jump is close to 6m, among girls and boys?

---

b) What is the difference between the longest jump of boy and girl?

c) What is the difference between the longest jump and the highest jump of boy?

d) Whose high jump is close to 3m among boys?

---

**ATOMIC ENERGY EDUCATION SOCIETY**

**Half Yearly Examination -2022-23**

**Class :IV**

**Time :3:00hours**

**Subject : EVS**

**Marks: 80**

**To be filled by the student**

Student's Name : \_\_\_\_\_

Name of the School: \_\_\_\_\_

Class /Sec:\_\_\_\_\_ Roll No. \_\_\_\_\_ Date of Examination: 16-09-2022

**To be filled by the teacher**

Invigilator's Signature : \_\_\_\_\_

Examiner's Signature : \_\_\_\_\_

Marks Obtained : \_\_\_\_\_

**KNOWLEDGE( 35)**

**I.A (i) Choose the correct answer from the bracket and fill in the blanks.**

**( 1x5=5)**

a) Karnam Malleshwari was a \_\_\_\_\_ (Boxer /weight lifter)

b) \_\_\_\_\_ is an extinct animal . ( dinosaur / tiger )

c) Valley of flowers is in \_\_\_\_\_.(Uttarakhand /Jodhpur )



d) \_\_\_\_\_ is a pure extract of flowers . ( Itr / Perfume )

a) Valsad , Gadhidham ,Ahmedabad are in \_\_\_\_\_.

( Karnataka / Gujarat )

**I.A (ii) Match the following.**

**(1 x 5 =5)**

a) Udipi station

a) Gujarat

b) Madgaon

b) Haryana

c) Valsad

c) Maharashtra

d) Mumbai

d) Goa

e) Sohna Village

e) Karnataka

**I.B (i) Give two examples of each.**

**(1x5=5)**

a) Diseases caused by drinking contaminated (dirty ) water

\_\_\_\_\_

b) Any two flowers that are eaten

\_\_\_\_\_

c)Any two outdoor games .

\_\_\_\_\_

d) Two things that do not dissolve in water

\_\_\_\_\_

e) Insects that live in group .

\_\_\_\_\_

I.B (ii) Name the following . (5X1=5)

a) A person who checks the tickets of the passengers in the train

\_\_\_\_\_

b) Other name of Hu Tu Tu

\_\_\_\_\_

c) A way built through the mountains. It is very dark inside it. \_\_\_\_\_

d) A special means of transport used in Gujarat . Its front part looks like a motor bike - \_\_\_\_\_

e) Mother's elder sister in Malayalam- \_\_\_\_\_

**I .C (i) Answer the following in one two sentences. ( 1 x5=5)**

a) Write any two reasons for changes in the families?

Ans \_\_\_\_\_  
\_\_\_\_\_

b) Write any two uses of flowers.

Ans \_\_\_\_\_

c) Why couldn't Radha go for the trip with Omana ?

Ans \_\_\_\_\_

d) Where did Anita live ?

Ans \_\_\_\_\_

e) What all things did Chetandas and his family used to make house in Sohna village ?

Ans : \_\_\_\_\_

**I.C (ii) Give reasons .**

**(1x5=5)**

a) We cannot drink sea water.

\_\_\_\_\_

b) There was great excitement in Nimmi's family .

Ans \_\_\_\_\_

c) Elephants play in mud and water .

Ans \_\_\_\_\_

d) People did not like the idea of girl's playing games like Kabaddi.

Ans \_\_\_\_\_

e) Neem and keekar branches are used to put on the roof of the house.

Ans \_\_\_\_\_

**I.D (i) Write a short note about of the following . (2.5 )**

**Karnam Malleshwari**

---

---

---

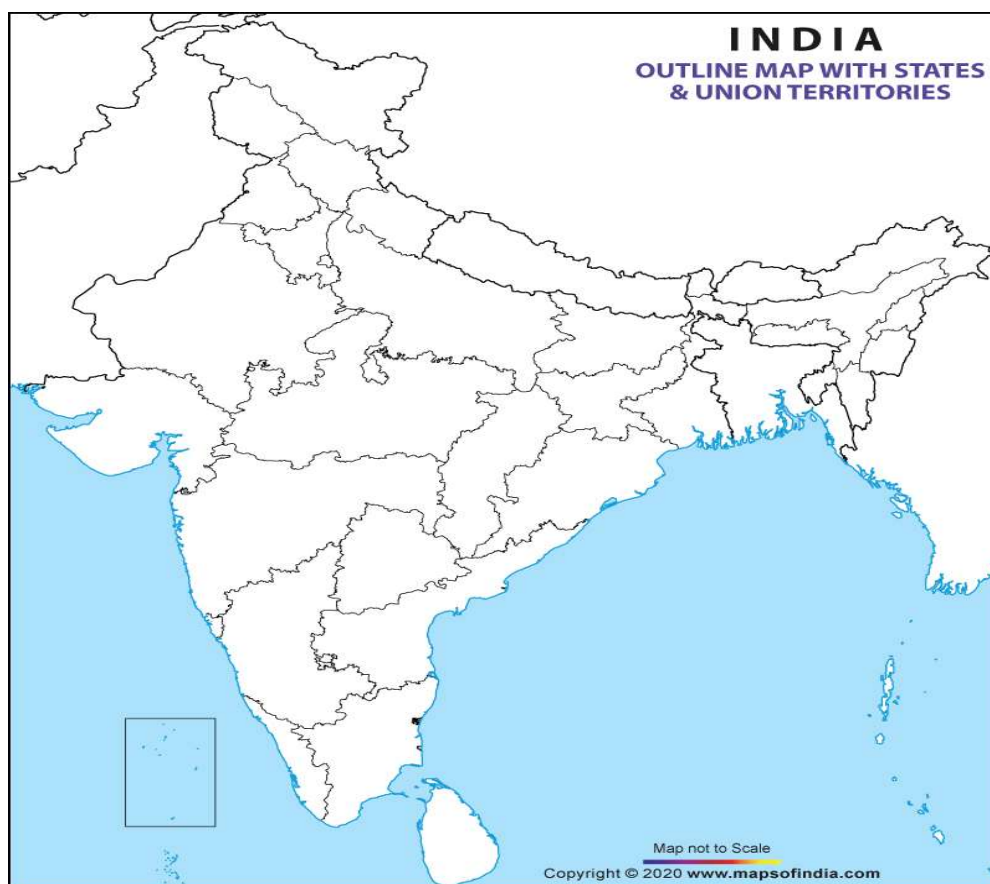
---

---

---

**I.D (ii) On the outline map of India mark the following states. (2.5 )**

1. Uttar Pradesh    2. Bihar    3 Kerala    4. Gujarat    5. Andhra Pradesh



## UNDERSTANDING ( 25)

### II.A (I) Fill in the blanks.

(1x5=5)

- i) Drinking contaminated water can make us \_\_\_\_\_ ( healthy /sick )
- ii) People of particular community of Khejadi village who take care of animals and plants are called \_\_\_\_\_. ( Bishnois / Khejadli )
- iii) \_\_\_\_\_ is a flower used as medicine . ( marigold / lotus )
- iv ) In Kerala , vegetable of \_\_\_\_\_ flower is made .  
( banana / hisbiscus )
- v) \_\_\_\_\_ is not soluble in water . ( flour /salt )

### II.A (ii) Circle the correct answer and fill in the blanks.

(5)

1. One who fits switches and bulbs in your house is a \_\_\_\_\_.

Electrician      carpenter      architect      plumber

2. People of Khejadi village gave their lives for saving \_\_\_\_\_.

tigers      trees      books      honeybees

3. A \_\_\_\_\_ is an open box made of wood attached with a rope.

Trolley      pulley      jugad      ferry

4. Animal that lay eggs \_\_\_\_\_.

crocodile

pig

dog

bat

6. Animal whose ear can be seen is \_\_\_\_\_.

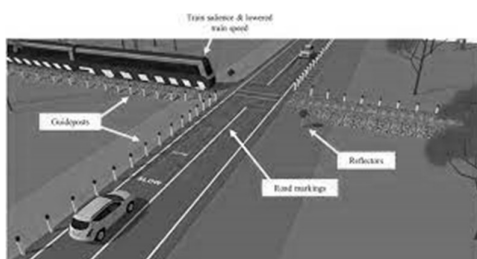
lizard

crocodile

rabbit

snake

**II.B (i) Identify the picture and write name using clues with the picture. (5)**



A place where railway line and road cross each other \_\_\_\_\_



A rough game \_\_\_\_\_



A folk art \_\_\_\_\_



Used in Assam \_\_\_\_\_



A person who carries luggage of passengers \_\_\_\_\_

**II.C (ii) Look at the railway ticket and answer. (5)**

शुभ यात्रा				HAPPY JOURNEY			
टी एच आर नं. PNR NO.	गाड़ी नं. TRAIN NO.	दिनांक DATE	कि.मी. K.M.	वयस्क ADULT	बच्चे CHILD	टिकट नं. TICKET NO.	
421-4476123	7229	05-02-2010	266	2	0	77807972	
JOURNEY CUM RESERVATION TICKET						PRS-HOLS अवकाश	
2वा क्लास कोट्टयम		कोयंबटूर जं.				197	
2A KOTTAYAM		COIMBATORE JN					
RESV. UP TO							
कोच COACH	सीट/बेड SEAT/BERTH	लिंग SEX	आयु AGE	यात्रा अधिकार पत्र T.AUTHORITY	रिफाइन CONC	आ.शु. R.FEE	
A1	32 UB	F	27	NDLS755	INDPAS		
A1	34 UB	M	37	NDLS756	INDPAS	Rs. ZERO ONLY	
SABARI EXPRESS BRD KOTTAYAM				SCH DEP 05-02 10:20 ARR 05-02 16:30			
197 28-01-2010 17:22 ITB 11							

Train number \_\_\_\_\_

PNR number \_\_\_\_\_

Coach number \_\_\_\_\_

Ticket number \_\_\_\_\_

Name of the train \_\_\_\_\_

**II.C (iii) Complete the sentences. (5)**

- i) Kabaddi is a rough game because \_\_\_\_\_  
\_\_\_\_\_.
- ii) There is lot of noise and smoke at the level crossing because \_\_\_\_\_  
\_\_\_\_\_.
- iii) Girl star is a project that tells us extra ordinary tales about ordinary girls who have changed their life by \_\_\_\_\_
- iv) Worker bee look after the hive and take care of \_\_\_\_\_
- v) The elders of Khejadli Village used to say that \_\_\_\_\_  
\_\_\_\_\_

**APPLICATION (20)**

**III.A (i) Choose the correct answer and fill in the blanks. (5)**

- b) We check our names in the \_\_\_\_\_ at the platform.  
( reservation chart / railway timetable )
- c) \_\_\_\_\_ floats on water . ( stone /oil )
- d) \_\_\_\_\_ makes the house strong . ( cement / mud )
- e) The wheels of the train \_\_\_\_\_ when it moves from the bridge. ( rippled / rattled )
- e) Our feet can \_\_\_\_\_ in the soft snow . ( slip /sink )



**III.A (ii) Write five sentences about the game of Kabaddi. (5)**

---

---

---

---

---

**III. B (i) Identify the picture of the sports personality. (2)**



**III B( ii) Answer the following questions in one or two sentences. (3)**

1. What is the full form of PNR?

Ans \_\_\_\_\_

2. Name the people who help in the construction of a house or a building .

Ans \_\_\_\_\_

3 What is RTE Act 2009

Ans \_\_\_\_\_  
\_\_\_\_\_  
\_\_\_\_\_

**III C (i) Draw and name the ways to clean water. (3)**

--	--

\_\_\_\_\_

**III C (ii) Draw a flower and label its two parts . (2)**

--