

Atomic Energy Education Society

Annual Examination -2021-22

Class: III

Time: 2 Hours

Subject: English

Marks: 50

To be filled by the Student

Student's Name : _____

Name of the School _____

Class/ Sec: _____ Roll No : _____ Date of Examination : _____

To be filled by the Teacher

Invigilator's Sign : _____

Examiner's Sign: _____

Marks Obtained : _____

General Instructions:

1. Marks are indicated against each question.
2. Read each question carefully and answer neatly.
3. Ensure that questions from each section are answered.
4. On completion of the exam, the student must hand over the answer sheet to the invigilator.
5. The student should ensure that the answer sheet is not damaged or folded.

Section A (Reading) - 20 Marks

A.1. Read the passage carefully and answer the questions.

As the sunshine danced through the trees, Meena climbed the hill slowly and steadily. Meena was happy. The boy was also happy.

A man in the group looked at Meena. He felt sorry for her. He asked her “My child, why are you carrying a boy on your back? Don't you feel his load? ”

Meena looked at him in wonder. She could not understand him. (Her brother was unable to walk). Meena asked, “Load? Of course not! He is my brother!”

i. Choose the correct answer and fill in the blanks.

(4 X 1 =4)

1) The boy was Meena's _____

- a) brother b) servant c) uncle

2) The man in the group felt _____ for Meena.

- a) happy b) sorry c) anxious

3) A word from the passage that means 'surprise' is _____

- a) load b) carrying c) wonder

4) The opposite of **fast** is _____

- a) slow b) fastly c) slower

ii) Why was Meena carrying her brother on her back ?

(1 X 1 =1)

A.2. Read the passage carefully and answer the questions.

One night the mother tiger was tired and closed her eyes. The tiger cub saw a tiny frog, hopping along the ground. The tiger cub pounced, but the frog hopped away. He chased the frog and caught it, and turned to show his mother. But she was not in sight. Instead he saw a tiger, bigger than his mother, near him in the jungle.

Q.1. Choose the correct answer and fill in the blanks : (2 X 1 = 2)

1. The tiger is a _____ animal.

- a) pet b) wild c) domestic

2. The mother tiger and her cub lived in a _____.

- a) river b) tree c) jungle

Q.2. Fill in the blanks: (3 X 1 = 3)

1. A word from the passage that means 'very small' is _____

2. The young one of a tiger is a _____.

3. The opposite of **far** is _____

A.3. Read the unseen passage and answer the questions.

Aarti is Anu's best friend. She is getting ready to go to Anu's birthday party in the evening. She buys a big book of stories as a birthday gift for Anu. Aarti wants to wrap it in red colour paper. She knows that red is Anu's favourite colour but she is not able to find any red paper. Aarti becomes sad. Looking at Aarti's sad face her mother tells her to wrap the gift in her red scarf. As soon as she hears this, she becomes delighted.

Q.1. Circle the correct answer :

(4 X 1 = 4)

1. Who was Anu's best friend?

- a) Aarti b) his mother c) Aarti's mother d) None of the above

2. What did Aarti buy for Anu's birthday?

- a) red paper b) red scarf c) cake d) big book of stories

3. Where was Aarti getting ready to go to in the evening?

- a) to buy red paper b) to buy red scarf
c) to go to Anu's birthday party d) to buy a big book

4. What did Aarti's mother suggest ?

- a) to wrap the gift in red paper b) to wrap the gift in red scarf
c) to wrap the gift in gift paper d) to buy cake as a birthday present

Q.2..Fill in the blanks:

(4 X 1 = 4)

1. The singular of **scarves** is _____.

2.. The opposite of **unwrap** is _____.

3. My favourite colour is _____.

4. Another word from the passage which means the same as ' **present**' _____

Q.3. Why was Aarti sad ?

(1 X 1 = 1)

Q.4. Write true or false

(1 X 1 = 1)

1. Anu's birthday party was in the morning. _____

Section B (Textual Questions) - 5 Marks

Q B.1 Answer the following questions:

(5 X 1 = 5)

1. Why did the child go with the puppy ?

2. Write any one thing that your parents won't let you do now.

3. Who mends our shoes?

4. Name any two domestic animals.

5. Write any one sound that you hear on the road in the morning.

Section-C (Creative Writing) 5 Marks

Write five sentences about camel using the words given below.

sand	hump	ship of the desert	store	water	leaves	padded
------	------	--------------------	-------	-------	--------	--------



Section-D Grammar (10 Marks)

1. Write plural for the following word.

leaf _____

2. Underline the silent letter in the following word and write it in the blank.

c a l m _____

3. Write the full form of :

Can't _____

4. Choose the correct option and fill in the blank:

My brother _____ an apple yesterday .(eat / ate)

5. **Complete the sentence:**

Example :A duck lives in a pond.

A rabbit _____.

6. Write the young one of :

sheep _____

7. Rearrange the words to make correct sentence.

patients / A nurse / after / looks

8. Make a sentence using the following word.

train-

9. Fill in the blanks with the opposite of the underlined word:

Monkeys have **long** tails but dogs have _____ tails.

10. Add '-ful' to the word given in the bracket.

These papers are _____. (use)

Section-E Vocabulary (5 Marks)

Q.1. Give one word:

to jump on one foot _____

Q.2. Write the antonym (opposite) of-

Thick _____

Q.3. Give another word for the following:

Mischievous _____

Q.4. Make a five-letter word using the letters from the given word -

Thousand _____

Q.5. I make the following sound, Who am I?

I neigh _____

Section F (Spellings) 5 Marks

Q.1. Encircle the correct spelling :

Interupting intreputting interruptting interrupting

Q.2. Make correct word from the jumbled letters :

R I E F D N _____

Q.3. Write the word that rhyme with :

hill _____

Q.4. Fill in the blanks to make a meaningful word

P ____ s s ____ n g e r s

Q.5. Correct the wrongly spelt word and write the correct word in the space given.

e n o g h _____

***** THE END *****

परमाणु ऊर्जा शिक्षण संस्था, मुंबई

वार्षिक परीक्षा (टर्म-2)-2021-22

कक्षा : तीसरी (3)

समय : 2 घंटे

विषय : हिंदी

पूर्णांक : 50

विद्यार्थी का नाम -----

विद्यालय का नाम -----

कक्षा /वर्ग ----- अनुक्रमांक -----

दिनांक -----

निरीक्षक के हस्ताक्षर -----

परीक्षक के हस्ताक्षर -----

प्राप्तांक -----

जाँचकर्ता के हस्ताक्षर -----

सामान्य निर्देश:

1. सभी प्रश्नों के उत्तर निर्देशानुसार लिखिए।
2. सभी प्रश्नों के अंक उनके समक्ष दिए गए हैं।
3. स्वच्छता एवं सुंदर लेख का विशेष ध्यान रखें।

पठित गद्यांश

प्र.1 पठित गद्यांश को पढ़कर दिए गए प्रश्नों के उत्तर लिखो ।

मीरा बहन का जन्म इंग्लैंड में हुआ था । गांधी जी के विचारों का उन पर इतना असर हुआ कि वे अपना घर और अपने माता-पिता को छोड़कर भारत आ गईं और गांधी जी के साथ काम करने लगीं ।

आज़ादी के पाँच साल बाद उन्होंने उत्तर प्रदेश के एक पहाड़ी गाँव, गेंवलीमें गोपाल आश्रम की स्थापना की । उस आश्रम में मीरा बहन का बहुत सारा समय पालतू पशुओं की देखभाल में बीतता था लेकिन गेंवली गाँव के आसपास के जंगलों में बाघ जैसे खतरनाक जानवर भी रहते थे ।

क)दिए गए प्रश्नों के उत्तर एक वाक्य में लिखो ।

1) मीरा बहन का जन्म कहाँ हुआ था? (1)

उ. _____

2) मीरा बहन भारत आकर किसके साथ काम करने लगीं ? (1)

उ. _____

ख)सही शब्द चुनकर खाली जगह भरो ।

1) मीरा बहन ने _____गाँव में आश्रम की स्थापना की ।(1)

क) आगरा ख) गैवली ग) कानपुर

2) मीरा बहन के आश्रम का नाम _____था । (1)

(क) राम ख) गोपाल (ग) राधा

3) गद्यांश में दिया गया खतरनाक जानवर है - _____ (1)

(क) हाथी (ख) बाघ (ग) जिराफ़

अपठित गद्यांश

प्र. 2 दिए गए अपठित गद्यांश को पढ़कर प्रश्नों के उत्तर लिखो ।

एक बकरी आराम से पहाड़ी पर उगी हुई घास खा रही थी ।अचानक एक शेर ने उसे देखा । वह बकरी को खाना चाहता था इसलिए वह पहाड़ी पर चढ़ने की कोशिश करने लगा । परन्तु फिसलन के कारण वह पहाड़ी पर चढ़ नहीं पा रहा था ।

उसने बकरी को नीचे बुलाने के लिए ऊँची आवाज़ में कहा, “ओ ! छोटी बहन पहाड़ी पर बहुत फिसलन है । तुम फिसलकर नीचे गिर जाओगी । मेरी बात मानो नीचे आ जाओ ।” बकरी शेर की चालाकी समझ गई । उसने पहाड़ी पर रहने में ही अपनी भलाई समझी ।

1) पहाड़ी पर उगी हुई घास कौन खा रहा था ? (1)

उ. _____

2) बकरी को कौन खाना चाहता था ? (1)

उ. _____

3) कहानी में आए हुए छ से शुरू होनेवाले कोई दो शब्द चुनकर लिखो ।(1)

उ. _____

4) लिंग बदलो । (1)

बकरा - _____

5) उल्टे अर्थ वाले शब्द लिखो । (1)

ऊपर x _____

पाठों और कविताओं पर आधारित प्रश्न

प्र.3 नीचे दिए गए प्रश्नोंके उत्तर एक वाक्य में लिखो ।

1) दोनों बिल्लियों के बीच झगड़े की जड़ क्या थी ? (1)

उ. _____

2) आफ़न्ती शहर की चारदीवारी के पास किसे ले गया ? (1)

उ. _____

3) नीचे दिए गए फलों में से बिना गुठली वाला फल चुनकर लिखो । (1)

(आम, बेर, केला, जामुन) _____

4) सोचो और वाक्य पूरा करो । (1)

दातुन से _____ साफ़ करते हैं इसलिए इसे दातुन कहते हैं।

प्र. 4 नीचे दिए गए प्रश्नों के उत्तर संक्षिप्त में लिखो ।

1) काबुलीवाले ने मिर्च को स्वादिष्ट फल क्यों समझ लिया ? (2)

उ. _____

2) कविता की वे पंक्तियाँ लिखो जिनसे पता चलता है कि - (2)

मिर्च बहुत तीखी थी ।

उ. _____

3) नारियल के खोल जैसी और कौन-सी चीज़ों में साँप छिप सकता था ? (2)

उ. _____

रचनात्मक प्रश्न

प्र. 5कल्पना व सामान्य जानकारी पर आधारित प्रश्नों के उत्तर लिखो। (5)

रोटी कैसे बनाएँगे ? नीचे दिए गए वाक्यों को सही क्रम में लिखो ।

-आग पर फुलाएँगे , चकले पर बेलेंगे , आटे को सानेंगे ,

तवे पर पकाएँगे, गेहूँ को पिसवाएँगे

1 _____
2 _____
3 _____
4 _____
5 _____

व्याकरण

प्र.6क)सही शब्द चुनकर मुहावरें पूरे करो । (2)

1) दीया तले _____। (अँधेरा , रोशनी)

2) हाथ कंगन को _____ क्या । (पायल , आरसी)

ख) नीचे दिए शब्दों से वाक्य बनाओं । (2)

1) धीरे-धीरे

2) पीछे-पीछे

ग) उदाहरण के अनुसार शब्द बनाओं । (2)

उदाहरण रंग - रंगाई

1)बुन - _____

2) चढ़ - _____

घ) वचन बदलो । (2)

1) सीढ़ी - _____

2) रोटी - _____

ड.) नीचे लिखे शब्दों के लिए दिए गए शब्दों में से सही अर्थ चुनो । (2)

(ऊँची , बुलंद , तारीफ़ , जरूर , जलन , सुखी)

1) प्रशंसा = _____

2) अवश्य = _____

शब्दावली

प्र.7 क) उदाहरण की तरह नीचे लिखे शब्दों का मतलब लिखो । (1)

उदाहरण- चवन्नी मतलब चार आना ।

अठन्नी मतलब _____ आना ।

ख) सही उत्तर चुनो । (1)

बकरी की आवाज़ को _____ कहते हैं ।

क) रँभाना ख) दहाड़ना ग) मिमियाना


ग) नीचे दिए गए शब्दों में से घर से संबंधित शब्दों पर घेरा लगाओ । (1)

कमल आँगन बरामदा सड़क

घ) नीचे के वाक्यमें छुपी हरी-भरी सब्ज़ी का नाम ढूँढ़कर लिखो । (1)

अब भागो भी , बारिश होने लगी है । _____

ड.) नीचे दी गई चीज़ किससे बनी है लिखो । (1)



रस्सी

वर्तनी

प्र. 8 क) नीचे दिया गया वाक्य शुद्ध करके लिखो । (1)

वह लड़का रो रही है ।

ख) शब्द सही करके लिखो । (1)

मंगलवार _____

ग) सही वर्तनी वाले शब्द पर गोला लगाओ । (3)

1) अंगले उगलि उँगली उंगली

2) नारियल नारीयाल नरलय नारीयल

3) आसरम आश्रम आशर्म आशरम

सुलेख

प्र.9 नीचे लिखे अनुच्छेद को सुंदर अक्षरों में लिखो । (5)

मोर भारत का राष्ट्रीय पक्षी है । यह बड़े-बड़े पेड़ों पर रहता है । कई जगहों जैसे बगीचों और वनों में बहुत से मोर एक साथ दिखाई देते हैं । मोर की पूँछ बहुत लंबी होती है, जिसे मोरपंख कहते हैं। मोर के सिर पर एक कलगी होती है जिसे शिखा कहते हैं ।

This image shows a single sheet of white paper with horizontal blue or grey ruling lines. The lines are evenly spaced and run across the width of the page. There are approximately 20 lines visible. The paper has a slight shadow on the right side, suggesting it's resting on a surface.

Total no. of pages printed: 08

Atomic Energy Education Society

Annual Examination 2021-22

Class : III

Time : 2 Hrs

Subject : Mathematics

Marks : 50

To be filled by the students

Name: _____

Name of the School: _____

Class / Sec.: _____ **Roll No. :** _____ **Date of Examination:** _____

To be filled by the teacher

Invigilator's Sign: _____

Examiner's Sign: _____

Marks Obtained: _____

General Instructions:

This paper consists of the following Sections:

Section A (12 Marks)

Section B (12 Marks)

Section C (13 Marks)

Section D (13 Marks)

All questions are compulsory.

Section A (12 Marks)

Q1. Choose the correct answer and fill in the blanks. (1 X 4 = 4)

1. Which unit will you generally use to measure the weight of a water-melon? _____ (**Kilogram , litre**)
2. The numbers that end with 1, 3, 5, 7 and 9 are called _____ numbers.(**even/odd**)
3. If we divide 24 mangoes equally into 3 baskets, then in each basket, there will be _____ mangoes. (**8/6**)
4. _____ x 9 = 63 (8/7)

Q2. Do as directed. (2 X 4 = 8)

a) Complete the pattern

1) Monday, _____, Wednesday, _____, Friday

2) 18 21 24 _____

b) Find the secret message

1) 2M2A2T2H2S 2I2S 2M2A2G2I2C2A2L

2) 7I7 7L7O7V7E7 7M7Y7 7C7O7U7N7T7R7Y7

c) Convert the following

1) 5000 ml = _____ l

2) 8 L 250 ml = _____ ml

d) Count the money and write the total.

1)



_____ rupees

2)



_____ rupees

Section B (12 Marks)

Q3. Choose the correct answer and write the correct option.

(1 X 4 = 4)

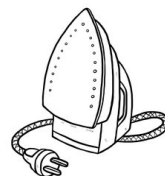
1. How many corners do 5 rectangles have? _____

A) 21

B) 24

C) 20

2. Choose the heaviest object. _____



3. How many 50 paise coins make 2 rupees? ()

A) 4

B) 3

C) 2

4. Choose the number that will complete the pattern.

36 33 _____ 27 24 21

A) 32

B) 30

C) 29

Q4. Answer the following.

(2 x 2 = 4)

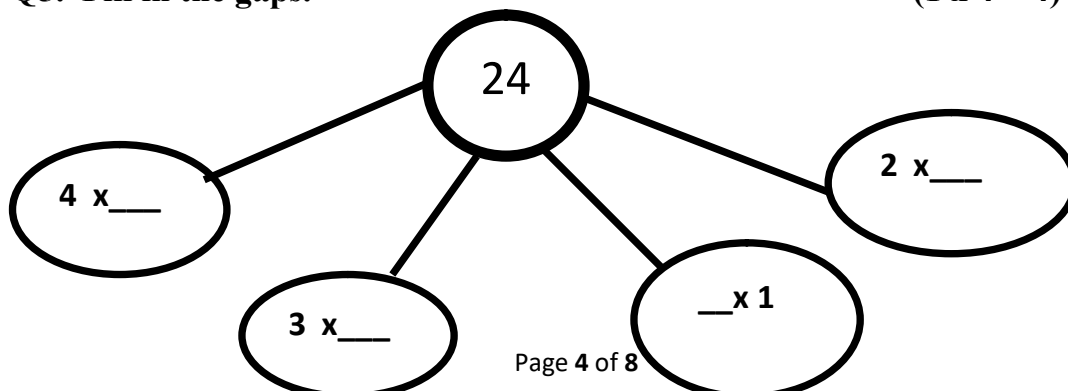
1. Write all the even numbers between 255 and 263.

2. There are three goats and one hen. How many feet are there altogether?

Ans : _____ feet are there altogether

Q5. Fill in the gaps.

(1 x 4 = 4)



SECTION C (13 MARKS)

Q6. State true or false.

(1 X 3= 3)

- 1) An eye drop bottle holds 1 litre of medicine. _____
- 2) $7+7+7 = 3$ times 7 is 21 _____
- 3) An elephant weighs more than 1000 kg. _____

Q7. Solve the following


(2 X 3 = 6)

1. Add the following

Rs.	Paise
24	50
(+) 12	60

2. A jug has a capacity of 5 litres. How many such jugs are needed to fill a 20 litre jar?

3. Raju has 12 candles. He wants to divide them into groups of 4. In the box below draw the number of candles in each group.



--

Q8. Multiply using box method.**(1 X 4 = 4)**

x	50	2
10		
9		18

TOTAL
52 X 19 =

SECTION D (13 MARKS)**Q9. Fill in the blanks****(1 x3 = 3)**

1. _____ = 4+4+4+4+4 = 5 times 4

2. $24 \div 6 =$ _____

3. Complete the pattern    _____, _____

Q10. Solve the following

(2 x 3=6)

- 1) The weight of a pumpkin is 3 Kg. The weight of a mango is 1 Kg. How many such mangoes can balance the pumpkin? (Draw the mangoes)



=

Ans = _____ mangoes can balance the pumpkin.

- 2) Ravi poured water 6 times with his water bottle to fill a can. Payal poured water 12 times with her water bottle to fill the can of the same size.

(i) Whose water bottle holds more water? _____

(ii) Ravi's water bottle holds _____ (twice/half/thrice) as much water as Payal's water bottle.

- 3) Bunny's mother prepared carrot sticks for the breakfast. If 36 carrot sticks are shared among 6 people, how many carrot sticks will each one get?

Q11. Fill in the blanks.

(4 marks)

A frog jumps 4 steps on its every jump.

A squirrel jumps 3 steps on its every jump.

A rabbit jumps 6 steps on its every jump.

All of them start their jumps from the head of the snake that is box no 0.



a. In how many jumps will the frog reach the box number 16 ?

$$16 \div 4 = \underline{\hspace{2cm}}$$

b. On which number box will the squirrel reach on its 4th jump?

c. How many jumps of the squirrel equals to 1 jump of the rabbit?

d. On which box will the three meet?

Atomic Energy Education Society

Annual Examination- 2021-22

Class : III
Subject : EVS

Time : 2 Hours
Marks : 50

To be filled by the student

Student's Name : _____

Name of the School: _____

Class / Sec: _____ Roll No.: _____ Date of examination: _____

To be filled by the teacher

Invigilator's Sign : _____

Examiner's Sign : _____

Marks Obtained : _____

General Instructions:

1. Marks are indicated against each question.
2. Read each question carefully and answer neatly.
3. Ensure that questions from each section are answered.
4. On completion of the exam, the answer sheet must be handed over to the school.
5. The student should ensure that the answer sheet is not damaged or folded.

Section A: Observation and reporting (18 marks)

Q1. Observe the picture and name them.

(1x3=3)

i)



ii)



iii)



2. Choose the correct option.

(4X1=4)

i) _____ helps to cure toothache.

a) Clove

b) Banana

c) Turmeric

d) Guava

ii) A _____ is used while playing 'Stappoo'.

a) Ball

b) Pen

c) Marker

d) Bat

iii) The sun rises in the _____ every morning.

a) west

b) north

c) east

d) south

iv) Thread work done on cloth is called _____.

a) Carving

b) Sculptor

c) Pottery

d) Embroidery

3. Answer the following.

(3X2=6)

i) How is a house boat different from other houses?

ii) What is a map?

iii) Why do we wear clothes?

4. List five different ways of saving water.

(5)

Section - B: Identification and Classification (16 Marks)

Q5. Name the relationship

(1 x 2 = 2)

a) Mother's mother - _____

b) Father's brother - _____

Q6. Answer the questions.

(2 x 2 = 4)

a) What game are the children playing?

Ans- _____


It is an _____ game.

(indoor / outdoor)



b) Name the script. What kind of people use this script?

Ans: _____



Q7. Name the following

(1 x 5 = 5)

a) A plant used as medicine when we get hurt - _____

b) A game associated with Sachin Tendulkar - _____

c) The place where the pots are baked - _____

d) Beautifully decorated boat in water used for rides in Dal lake - _____

e) A house made of cement, sand, bricks and water - _____

Q8. Answer the following questions.

(1 x 5 = 5)

a) Identify the open letter used for sending messages.

Ans _____

b) Who is the sender?

Ans _____

c) To whom has it been written?

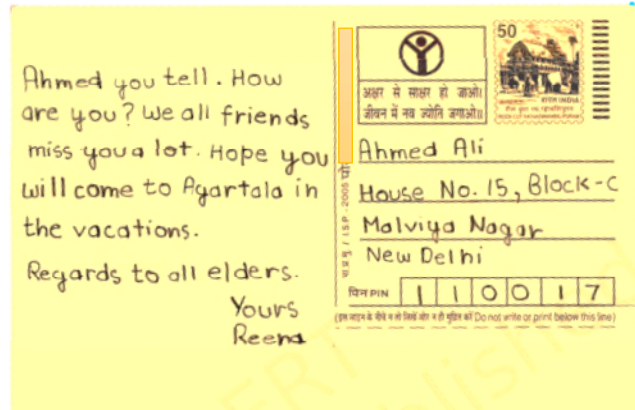
Ans _____

d) Write the PIN written on it.

Ans _____

e) Who brings it to your house?

Ans _____



Section - C : Discovery of Facts (16 Marks)

Q9. Match the following.

(4)

a) Sparrow

i. small family

b) Sitamma

ii. Grains and seeds

c) Kaveri

iii. Carry loads

d) Donkey

iv. joint family

Q10. Answer the following.

(2 x 3 = 6)

a) Write names of two leaves that we eat as food.

Ans- _____

b) What things does a potter need to make a pot?

Ans- _____

c) Where is Chameli's house? What are the houses made up of in her area?

Ans- _____

Q11 Draw two signs that you see in your neighbourhood? Write what do they indicate. *One example is given here.* (1 x 2 =2)



No parking



They indicate - _____

Q12. Complete the food chain using the following. (2)

Grass,	Snake,	Eagle,	Frog,	Grasshopper
--------	--------	--------	-------	-------------



Q13. Mark the following states in the map of India.

(1 x 2 = 2)

1) Rajasthan

2) Maharashtra

