

**Atomic Energy Education Society**

**Annual Examination: 2021-2022**

No of pages: 9

**Class: IV**

**Time: 2 hours**

**Subject: English**

**Marks: 50**

---

**To be filled by the Student**

Name of the student: \_\_\_\_\_

Name of the School: \_\_\_\_\_

Class & Sec: \_\_\_\_\_ Roll No: \_\_\_\_\_ Date of Examination: \_\_\_\_\_

---

**To be filled by the Teacher**

Invigilator's Sign: \_\_\_\_\_

Examiner's Sign: \_\_\_\_\_

Marks Obtained: \_\_\_\_\_

Checker's Sign: \_\_\_\_\_

---

**General Instructions:**

1. Answer all the questions.
2. Read each question carefully and answer neatly.
3. Marks are indicated against each question.
4. Answer sheet should not to be damaged or folded.
5. On completion of the examination, answer sheet has to be handed over to the invigilator.

### Section-A Reading (12Marks)

Leopards are big cats and have light-coloured fur that is covered in dark spots. They are known for being the strongest of the big cats. Sometimes they are mixed up with cheetahs, but they are not the same!

Leopards have dark spots that help them blend with their surroundings. This is good because leopards are hunters. Their spots help them hide while they search for prey.

The leopard's main food is meat. It hunts weaker animals in order to have food. Some of its favourite types of food include deer, pigs, and antelope. Its strong legs are a big help when it comes to hunting and climbing.

**A1. Read the passage and circle the correct answer. (6x1=6M)**

- 1) \_\_\_\_\_ are known for being the strongest of the big cats.  
a) Pigs                      b) Antelopes                      c) Leopards
- 2) They have light- coloured \_\_\_\_\_ on their body.  
a) fur                      b) skin                      c) spots
- 3) Leopards are not hunters.  
a) True                      b) False                      c) not known
- 4) Antonym of 'strong'.  
a) bold                      b) weak                      c) powerful
- 5) Main food of leopards. \_\_\_\_\_.  
a) meat                      b) meet                      c) meeat
- 6) Synonym of 'Favourite'.  
a) dislike                      b) hated                      c) most-liked

### Read the poem

The cold winter winds,  
Blowing harshly through the tree,  
Snow under my feet,  
Bothering my toes.  
And my nose which is in deep freeze.  
Snuggled under a warm quilt,  
Just cannot stay up late,  
And I have to get up again  
And go out in the cold tomorrow morning.....  
I ....feel.....so sleepy.....  
How wonderful.....If I could also.....  
Hibernate!

Glossary:

hibernate: to spend the winter sleeping, to become inactive

quilt: very thick blankets used to stay warm in winters

### A2. Read the poem and answer the following questions. (6x1=6M)

- 1) The winter wind blows \_\_\_\_\_.  
a) gently                      b) harshly                      c) silently
  
- 2) The snow under the poet's feet bothers his \_\_\_\_\_.  
a) toes                      b) fingers                      c) legs

3) What is the poet snuggled under? **(Circle the correct answer)**

a) warm quilt

b) cold quilt

c) None

4) The \_\_\_\_\_ season is described in the poem.

a) summer

b) rainy

c) winter

5) **Choose the correct answer.**

Which part of the poet's body is in deep freeze?

a) fingers

b) hands

c) nose

6) **Antonym of 'shallow'.**

a) deep

b) above

c) soft

### **Section B Textual Questions- 12 Marks**

**B1. Answer the following questions. (6x1=6M)**

1) Who once visited the court of Akbar?

\_\_\_\_\_.

2) Why did the child in the poem like looking at the pictures?

\_\_\_\_\_.

3) **Who was Hiawatha?**

\_\_\_\_\_  
\_\_\_\_\_.

4) Do birds have secrets?

\_\_\_\_\_.

5) What is the best time to water the plants?

\_\_\_\_\_  
\_\_\_\_\_.

6) Do you like to read books?

\_\_\_\_\_.

**B2. Short answer questions. (6x1=6M)**

1) What did the carpenter call his puppet?

\_\_\_\_\_  
\_\_\_\_\_.

2) What did the young man make with the trunk of the tree?

\_\_\_\_\_  
\_\_\_\_\_.

3)Where did the children go to buy books?

\_\_\_\_\_  
\_\_\_\_\_.

4)What did the carpenter buy?

\_\_\_\_\_.

5) What did the pundit challenge everybody in the court?

---

---

6) How do you feel when you help someone?

---

---

**Section C - Creative Writing- 10 Marks**

**C1. Using some of the following words, write five sentences about “Hiawatha”. (5M)**

|         |        |            |          |          |
|---------|--------|------------|----------|----------|
| Nokomis | wigwam | Red Indian | chickens | brothers |
|         | acorns | birds      | timid    |          |
| beavers | rabbit | squirrel   | swiftly  | reindeer |

---

---

---

---

---

---

---

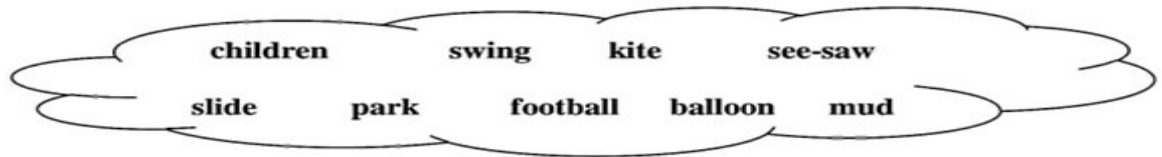
---

---

---

**C2. Look at the picture and write a paragraph using the clue words.**

**(5x1=5M)**



---

---

---

---

---

---

---

---

---

---

## Section D Grammar- 6Marks

### D. Do as directed

1) Write the plural word. (1x1=1M)

leaf - \_\_\_\_\_.

2) Circle the describing word. (1x1=1M) The  
peacock is a beautiful bird.

3) Add 'ing' to form a new word. (1x1=1M)

read - \_\_\_\_\_

4) Choose the correct answer. (1x1=1M)

This sum is \_\_\_\_\_. (write / right)

5) Circle the silent letter. (1x1=1M)

h o u r

6) Punctuate the sentence. (1 x1=1M)

are you going to the book shop

## Section E -Vocabulary- 5marks

### E. Do as directed.

1) Write the word that means 'mischievous' using the (1 x1=1M)  
given clue.

N \_\_\_\_\_

2) Choose the correct answer. (1 x1=1M)

The word 'galore' means \_\_\_\_\_.

- a) in few numbers      b) in large numbers      c) None



**3)Choose the correct answer. (1 x1=1M)**

**‘Thirsty feet’ means \_\_\_\_\_ . (roots / flowers)**

**4)Write the opposite word. (1 x1=1M)**

early- \_\_\_\_\_

**5) Fill in the blanks with an appropriate word. (1 x1=1M)**

The pundit could speak many languages \_\_\_\_\_ .

### **Section F- Spellings-5M**

**F.Do as directed.**

**1) Circle the wrong spelling. (1x1=1M)**

a) secrets                      b)wooden                      c) kichen

**2) Unjumble the letters and make a meaningful word. (1x1=1M)**

n w o d e r \_\_\_\_\_

**3) Fill in the missing letter. (1x1=1M)**

m e \_\_\_\_\_ y

**4) Choose the correct answer. (1x1=1M)**

The naughty boy lived in \_\_\_\_\_ .

**(Scotland /England)**

**5) Circle the correct spelling. (1x1=1M)**

a) hibiscus                      b) hiibiscusc                      ) hybiscus

\*\*\*\*\*

## परमाणु ऊर्जा शिक्षण संस्था, मुंबई

वार्षिक परीक्षा 2021- 22

कक्षा : चौथी

समय : 2 घंटे

विषय : हिंदी

पूर्णांक : 50

---

विद्यार्थी का नाम : \_\_\_\_\_

विद्यालय का नाम : \_\_\_\_\_

कक्षा/वर्ग : \_\_\_\_\_ अनुक्रमांक : \_\_\_\_\_ दिनांक: \_\_\_\_\_

---

निरीक्षक के हस्ताक्षर : \_\_\_\_\_

परीक्षक के हस्ताक्षर : \_\_\_\_\_

प्राप्तांक : \_\_\_\_\_

जाँचकर्ता के हस्ताक्षर : \_\_\_\_\_

---

### सामान्य निर्देश :-

1. सभी प्रश्नों के उत्तर दिए गए निर्देशानुसार लिखिए ।
2. सभी प्रश्नों के उत्तर लिखना अनिवार्य है ।
3. सभी प्रश्नों के अंक उनके समक्ष दिए गए हैं ।
4. स्वच्छता एवं सुंदर लेखन का विशेष ध्यान रखें ।

वाचन पर आधारित प्रश्न - 10 अंक

1. नीचे दिए गए पठित गद्यांश को पढ़कर प्रश्नों के उत्तर लिखिए ।

सुनीता को एक लड़का दिखा । उस बच्चे को बहुत सारे बच्चे “ छोटू - छोटू ” बुलाकर चिढ़ा रहे थे । उस लड़के का कद बाकी बच्चों से बहुत छोटा था । सुनीता को यह सब बिल्कुल अच्छा नहीं लगा । रास्ते में कई लोग सुनीता को देखकर मुस्कुराए, जबकि वह उन्हें जानती तक नहीं थी । पहले तो वह मन ही मन खुश हुई , परंतु फिर सोचने लगी , “ ये सब लोग मेरी तरफ़ भला इस तरह क्यों देख रहे हैं ? ”

खेल के मैदान वाली छोटी लड़की सुनीता को दोबारा कपड़ों की दुकान के सामने खड़ी मिली । उसकी माँ कुछ कपड़े देख रही थी ।

**सही उत्तर पर सही (✓) का निशान लगाइए ।**

क) एक बच्चे को अन्य सभी बच्चे क्या कहकर चिढ़ा रहे थे ? (1)

मोटू - मोटू  छोटू - छोटू  गोलू - गोलू

ख) रास्ते में सुनीता को देखकर लोग क्या किए ? (1)

मुस्कुराए  चिढ़ाए  रोए

ग) विलोम शब्द (उल्टे अर्थ) लिखो । (1)

उदास x \_\_\_\_\_

घ) वचन बदलो । (1)

रास्ता - \_\_\_\_\_

ड) लिंग बदलो । (1)

लड़का - \_\_\_\_\_

## 2. नीचे दिए गए अपठित गद्यांश को पढ़कर प्रश्नों के उत्तर लिखिए ।

जंगल में सुंदर - सुंदर हिरन रहा करते थे । उसमें एक सुरीली नाम की हिरनी थी । उसकी बेटी का नाम मृगनयनी था, जो अभी पाँच महीने की ही थी । मृगनयनी अपनी माँ के साथ जंगल में घूमा करती थी । एक दिन मृगनयनी अपने माँ के साथ जंगल में घूम रही थी, तभी दो गीदड़ आ गए । वह मृगनयनी को मार कर खाना चाहते थे । सुरीली दोनों गीदड़ को अपने सींग से मार - मार कर रोक रही थी । मगर गीदड़ वहाँ से नहीं जा रहे थे । वहाँ अचानक ढेर सारे हिरनों का झुंड आ गया । हिरनी गीदड़ के पीछे दौड़ने लगी ।

क) सुरीली किसका नाम था ? (1)

---

ख) मृगनयनी को कौन मारकर खाना चाहते थे ? (1)

---

ग) दिए गए शब्द के लिए समान अर्थ लिखिए । (1)

समूह - \_\_\_\_\_

घ) दिए गए शब्द के लिए विशेषण शब्द लिखो । (1)

\_\_\_\_\_ हिरन

ङ) दिए गए शब्द के लिए विलोम ( उल्टे ) शब्द लिखिए । (1)

आगे - \_\_\_\_\_

पाठ्य पुस्तक पर आधारित प्रश्न - 10 अंक

3. नीचे दिए गए प्रश्नों के उत्तर लिखिए ।

(क) धनी कौन था? आश्रम में उसका क्या कार्य था ? (2)

---

---

---

(ख) तुम्हारे घर से सामान ले जा कर कबाड़ी उसका क्या करते हैं ? (2)

---

---

---

(ग) नीना, चुन्नू और टिंकू से ही दाल क्यों बनवाना चाहती होगी ? तुम्हें क्या लगता है ? (2)

---

---

---

(घ) पढ़क्कू कौन - सा विषय पढ़ते थे ? (1)

---

---

---

(ङ.) चूहा रात- भर क्या - क्या करता है ? (1)

---

4. सही कथन के सामने सही ( ✓ ) और गलत कथन के सामने गलत ( x )  
का निशान लगाइए । (2)

(क) जब तक बैल के गर्दन की घंटी बजती रहती, मालिक चिंतित रहता था । ☐

(ख) ब्रिटिश राज में भारतीयों को नमक बनाने की मनाही थी । ☐

**रचनात्मक लेखन पर आधारित प्रश्न - 5 अंक**

5. किसी एक विषय पर पाँच वाक्य लिखिए । (लगभग 50 शब्दों में) (5)

हुदहुद पक्षी या भीखूभाई

---

---

---

---

---

---

---

---

---

---

---

---

व्याकरण पर आधारित प्रश्न - 10 अंक

6. (क) जिस शब्द के नीचे रेखा खिंची है उसका अर्थ लिखिए । (1)

रोज़ रात - भर जगता रहता

खुर -खुर इधर - उधर है धाता \_\_\_\_\_

(ख) नीचे लिखे शब्द में सही जगह पर अनुस्वार (ं) या चंद्रबिंदु (ँ) लगाइए। (1)

फूक - \_\_\_\_\_

(ग) नीचे लिखी चीज़ों की विशेषता बताने वाले शब्द लिखिए । (2)

उदा. - मीठा हलवा

i) \_\_\_\_\_ पेड़

ii) \_\_\_\_\_ पत्थर

(घ) दिए गए शब्द के अलग-अलग अर्थ लिखिए । (2)

उदा : मगर - परंतु

- मगरमच्छ

भैंस - \_\_\_\_\_

\_\_\_\_\_

(ङ) लिंग बदलो । (1)

नाना - \_\_\_\_\_

(च) दिए गए मुहावरे का वाक्य में प्रयोग करें | (1)

दिन-रात एक करना -

---

---

(छ) दिए गए वाक्य में से क्रिया शब्द चुनकर लिखें | (1)

सुनार आभूषण गढ़ता है | \_\_\_\_\_

(ज) नीचे लिखे वाक्य में सही सर्वनाम शब्द चुनकर लिखें | (1)

आओ , \_\_\_\_\_ सब खेल खेलें | (उस / हम)

**शब्द भण्डार पर आधारित प्रश्न - 5 अंक**

7. (क) उदाहरण को पढ़कर नीचे दी गई तालिका को आगे बढ़ाएँ | (2)

| भारत  | देश   |
|-------|-------|
| कबूतर | _____ |
| अनार  | _____ |

(ख) अनेक शब्दों के लिए एक शब्द लिखें | (2)

उदा. - बहुत बात करने वाला - बातुनी

(i) उड़ने वाला खटोला - \_\_\_\_\_

(ii) जहाँ खाना बनाया जाता है - \_\_\_\_\_



(ग) ऐसे रंगों के नाम लिखें जो किसी चीज़ के नाम पर पड़े हों । (1)

| चीज़ का नाम | रंग का नाम |
|-------------|------------|
|-------------|------------|

|               |        |
|---------------|--------|
| उदा - बादाम - | बादामी |
|---------------|--------|

|         |       |
|---------|-------|
| गुलाब - | _____ |
|---------|-------|

**वर्तनी पर आधारित प्रश्न - 5 अंक**

8 . (क) सही शब्द पर घेरा लगाओ । (2)

|       |         |          |
|-------|---------|----------|
| चौकनन | चौकन्ना | चौकान्ना |
|-------|---------|----------|

|         |       |        |
|---------|-------|--------|
| रंगामंच | रगमंच | रंगमंच |
|---------|-------|--------|

(ख) अक्षरों को सही क्रम में लिखकर शब्द बनाओ । (1)

उदा. - व ता चे नी - चेतावनी

न ह मे त - \_\_\_\_\_

(ग) शब्द शुद्ध (सही) करके लिखो । (1)

कोलहाल - \_\_\_\_\_

(घ) वाक्य शुद्ध (सही) करके लिखो । (1)

हमने यह काम ठीक से करना है ।

---

## सुलेख

9. सुलेख लिखो ।

(5)

पृथ्वी पर समय सबसे कीमती है । इसकी तुलना किसी से भी नहीं की जा सकती है । इस संसार में सब कुछ समय पर निर्भर करता है । समय से पहले कुछ भी नहीं होता है । हमें कठिन परिश्रम करने का आनंद लेना चाहिए और कभी भी अपने काम को बाद में करने के लिए टालना नहीं चाहिए । हमें समय के महत्व को समझ कर उसका अपने जीवन में सदुपयोग करना चाहिए ।

[illegible]

\* \* \* \* \*



**Atomic Energy Education Society**  
**Annual Examination(2021- 2022)**

**Class:IV**

**Time:2Hours**

**Subject:Mathematics**

**Marks:50**

---

**To be filled by the student**

Student's Name: \_\_\_\_\_

Name of the School: \_\_\_\_\_

Class /Sec. \_\_\_\_\_ Roll No. \_\_\_\_\_ Date of Examination: \_\_\_\_\_

---

**To be filled by the teacher**

Invigilators' Sign: \_\_\_\_\_

Examiner's Sign: \_\_\_\_\_

Marks Obtained: \_\_\_\_\_

---

**General Instructions:**

This paper consists of the following Sections:

Section-A(12Marks)

Section-B(12Marks)

Section-C(13Marks)

Section-D (13 Marks)

All questions are compulsory.

## **Section A (12 Marks)**

**I. Choose the correct answer from the options given and fill in the blanks.**

**(4 x1=4 Marks)**

- a. One quarter of 40 is \_\_\_\_\_. (**20 10 15**)
- b. Complete the pattern: 12,20,28, \_\_\_\_\_. (**34 38 36**)
- c. If the length of the boundary of a square is 32cm.Its side will be \_\_\_\_\_.  
(**8 cm 6 cm 7 cm**)
- d. A circle has only one \_\_\_\_\_. (**radius diameter centre**)

**II. Answer the following questions as directed.**

**(4x2=8 Marks)**

- i) Draw a circle of radius 3cm. Mark its centre as P and radius as PQ.

ii) Reeta needs stamps of Rs 25 for her parcel. She went to the post-office. Only stamps of Re 1, Rs 2, Rs 5 and Rs 10 were available at that time. Write down two different ways of getting Rs 25 with the help of the stamps available?

a) \_\_\_\_\_ = ₹ 25

b) \_\_\_\_\_ = ₹ 25

iii) Frame your question for the story problem given below:

There are 80 balls in a box.

Neha bought all the balls for Rs. 400

Your question: \_\_\_\_\_

iv) In a farmyard there were some goats and chickens.

a. Rani counted 42 legs of chicken. How many chickens were there in the farmyard?

**Ans:** \_\_\_\_\_

b. There were 28 goats. What would be the total number of legs of goats?

**Ans:** \_\_\_\_\_

### **Section B (12 Marks)**

**I. Choose the correct option and fill in the gaps. (4 x 1 = 4 Marks)**

1. If the code 12, 21, 3, 11 means LUCK, then 7, 15, 15, 4 means \_\_\_\_\_

a. GREAT      b. GOOD      c. BEST

2. If  = 4 children, then     = \_\_\_\_\_ children.

- a. 16                                  b. 12                                  c. 20

3.  $\frac{3}{4}$  of 2litre = \_\_\_\_\_ ml.

- a. 750                                  b. 1500                                  c. 150

4. If diameter of a circle is 18 cm. Then its radius will be \_\_\_\_\_.

- a. 6cm                  b. 12cm                  c. 9cm

## II. Do as directed.

(2 x 2 =4 Marks)

1. Use the SAME SUM RULE and complete the pattern.

21    22    23    24    25    26

$21 + 26 = \underline{\hspace{2cm}}$

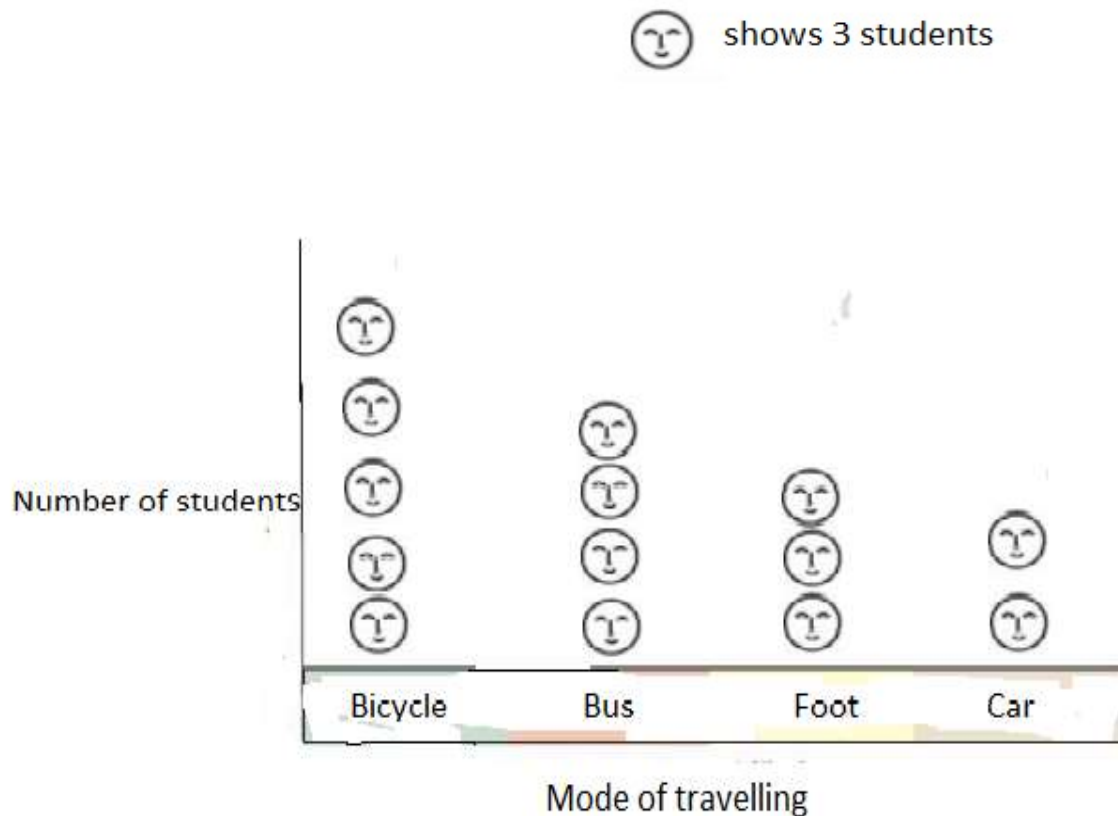
$\underline{\hspace{2cm}} + 25 = 47$

$\underline{\hspace{2cm}} + \underline{\hspace{2cm}} = 47$

2. Name any two things that we usually buy in kilograms.

\_\_\_\_\_, \_\_\_\_\_

**III.** The smart chart shows the number of students using different modes of transport to travel to school. Observe the smart chart and answer the following questions. **(1 x 4 =4 Marks)**



- How many students come to school by bicycle? \_\_\_\_\_
- 12 students come to school by \_\_\_\_\_.
- \_\_\_\_\_ number of students come to school on foot.
- The number of students who come to school by car is \_\_\_\_\_ (half/ twice) the number of students who come by bus.



### **Section - C (13 marks)**

**I.Fill in the blanks. Choose the correct answer from the options given.**

**(3 x 1=3 Marks)**

a. There are \_\_\_\_\_ quarters in a whole.      (2 3 4)

b.  $169 \div 13 =$  \_\_\_\_\_ (12 11 13 )

c. \_\_\_\_\_ divides the circle into two equal halves.

(Radius   Diameter   Centre)

**II. Do as directed.    (3 x 2=6)**

1. A field is 84metre50centimeter long and 45 metre wide. How much wireis needed to put a fence around it?

2. 18 pieces of burfi can be kept in a box. Shrikant wants to pack 252 pieces of burfi. How many such boxes does he need?

3. Farah has 72 marbles. She gave one-fourth of the marbles to her friend Rashmi. How many marbles did she give to Rashmi? How many marbles are left with her?

### **III.Solve**

**(1 x 4 =4)**

1) Bhaskar wants change for Rs200. How many notes will he get if he wants in return-

- a. all 50 rupee notes? \_\_\_\_\_ b. all 20 rupee notes? \_\_\_\_\_  
c. all 10 rupee notes? \_\_\_\_\_ d. all 5 rupee notes? \_\_\_\_\_

### **Section D (13 Marks)**

#### **I. Fill in the blanks.**

**(3 x 1=3)**


1. We can make the multiplication table of 14, if we know the table of 9 and \_\_\_\_\_.
2. Twenty-four bananas were equally shared among 6 children. How many bananas did each child get? \_\_\_\_\_
3.  $250\text{g} + 350\text{g} + \underline{\hspace{2cm}} = 1\text{ kg}$

**II. Solve the following.**

**(3x2=6)**

1.

a) Look at the balance and tick the pan of the balance which will go down? Also, find its total weight.



\_\_\_\_\_

b) How many squares of 1 cm can fill this rectangle?

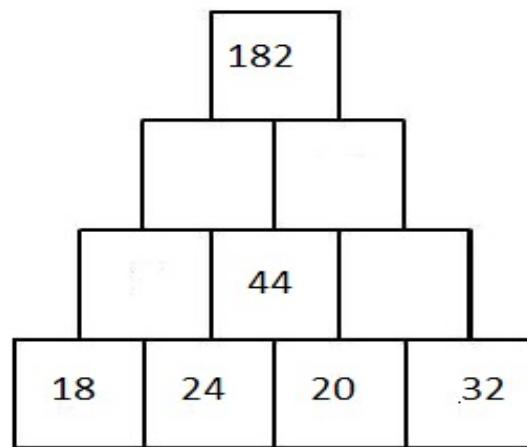
5cm

3 cm



Ans: \_\_\_\_\_

2. Complete the number tower.



3. Look at the postal rates given in the chart and answer the questions.

| Postal Items                  | Rate    |
|-------------------------------|---------|
| <u>Letter weighing</u>        |         |
| i) 20grams or less            | Rs.5.00 |
| ii) Foreveryadditional20grams | Rs.2.00 |
| <u>Parcel weighing</u>        |         |
| i) 50grams or less            | Rs.8.00 |
| ii) Foreveryadditional50grams | Rs.3.00 |

a) How much will you have to pay for stamps on a letter weighing 60 grams?

b) Vaishali wants to send a parcel of the story book to her friend Rajan in Mumbai. The book weighs 250 grams. Find the cost of posting the book.

**III.** Some children were asked which of the given sweets they like the most- Rasgulla, Jalebi, Laddoo? The data collected is given below. **(1x4=4)**

| SWEET    | Number of children |
|----------|--------------------|
| Rasgulla | 30                 |
| Jalebi   | 15                 |
| Laddoo   | 15                 |

i) Total number of children = \_\_\_\_\_

ii) Children who like Jalebi are \_\_\_\_\_  $\left(\frac{3}{4}, \frac{1}{4}\right)$  of the total number of children.

iii) Draw a chapatti chart and show the children's liking for Rasgulla, Jalebi, Laddoo.

**Atomic Energy Education Society**  
**Annual Examination- 2021-22**

**Class : IV**

**Time: 2 hours**

**Subject : EVS**

**Marks : 50**

---

**To be filled by the student**

Student's Name: \_\_\_\_\_

Name of the School: \_\_\_\_\_

Class / Sec. : \_\_\_\_\_ Roll No. : \_\_\_\_\_ Date of Examination: \_\_\_\_\_

---

**To be filled by the teacher**

Invigilator's Sign: \_\_\_\_\_

Examiner's Sign: \_\_\_\_\_

Marks Obtained: \_\_\_\_\_

---

**General Instructions:**

This paper consists of :

Section A: Observation and Reporting — 18 marks

Section B: Identification and Classification — 16 marks

Section C: Discovery of Facts — 16 marks

**All the questions are compulsory.**

**Section A: Observation and Reporting (18 marks)**

**Q.1 Observe the given pictures and fill in the blanks.**

**(1 × 5 = 5)**


a) \_\_\_\_\_ is added in curd and Jaljeera.

(Cumin, Turmeric, Cinnamon)




b) Hanging roots of \_\_\_\_\_ are like pillars which provide strong support to this tree.

(Mango tree, Banyan Tree, Peepal Tree)




c) The bird which sings sweetly and does not make its own nest is \_\_\_\_\_.

(Myna, Crow, Koel)



d) A special type of food eaten in \_\_\_\_\_ is called *langar*.

(Church, Temple, Gurudwara)



e) Mountains made up of sand are called \_\_\_\_\_

(Sand hills, Sand dunes, Desert hill)



**Q.2 Choose the correct answer.**

**(1 × 2 = 2)**

a) The vegetable that doesn't get spoilt quickly is \_\_\_\_\_.

(Palak / Onion)

b) \_\_\_\_\_ language is spoken in Abu Dhabi.

(Spanish / Arabic)

**Q.3 Answer the following questions.**

**(2 × 3 = 6)**

a) What is Mid-day meal ?

---

---

---

---

---

---

b) Write the names of two vegetables which do not have seeds.

---

---

c) What is Bihu?

---

---

---

---

---

---



**Q.4 Write a brief note on Bhima Sangh.**

**(5 × 1 = 5)**

---

---

---

---

---

---

---

---

---

---

---

---

---

**Section B: Identification and Classification (16 marks)**

**Q.5 Circle the odd one.**

**(1 × 5 = 5)**

- |              |        |          |        |
|--------------|--------|----------|--------|
| a) Cow       | Nest   | Egg      | Chick  |
| b) Khunti    | Illige | Forceps  | Kurige |
| c) Beak      | Wings  | Feathers | Tree   |
| d) Radish    | Carrot | Tomato   | Onion  |
| e) Air Force | Police | Army     | Navy   |

**Q.6 Identify - Who am I?**

**(1 × 2 = 2)**

a) I look like Zeera though green  
am I,  
To make your stomach  
healthy I always try,  
Eat me always after your meal  
I refresh your mouth, you  
surely feel,  
Think and tell me who am I?  
Tell me quickly, who am I?

---

b) I look like a nail but a bud am I,  
Chocolate brown colour and a  
strong smell have I.  
When your toothache  
makes you shout,  
I soothe the pain  
in your mouth.  
Think and tell me who am I?  
Tell me quickly, who am I?

---

**Q.7 Answer the following.**

**(2 × 2 = 4)**

a) Write the names of any two processes of cleaning the water.

---

---

---

---

---

---

b) What are the different things which birds use to make their nest?

---

---

---

---

---

**Q.8 Compare Abu Dhabi with Kerala on the basis of following points.**

**(1 × 5 = 5)**

| <b>Points</b>       | <b>Abu Dhabi</b> | <b>Kerala</b> |
|---------------------|------------------|---------------|
| Climate and weather |                  |               |
| Currency            |                  |               |
| Language            |                  |               |
| Trees and Plants    |                  |               |
| Rainfall            |                  |               |

**Section C: Discovery of Facts (16 marks)**

**Q.9 Write whether the following statements are ‘True’ or ‘False’. (1 × 5 = 5)**

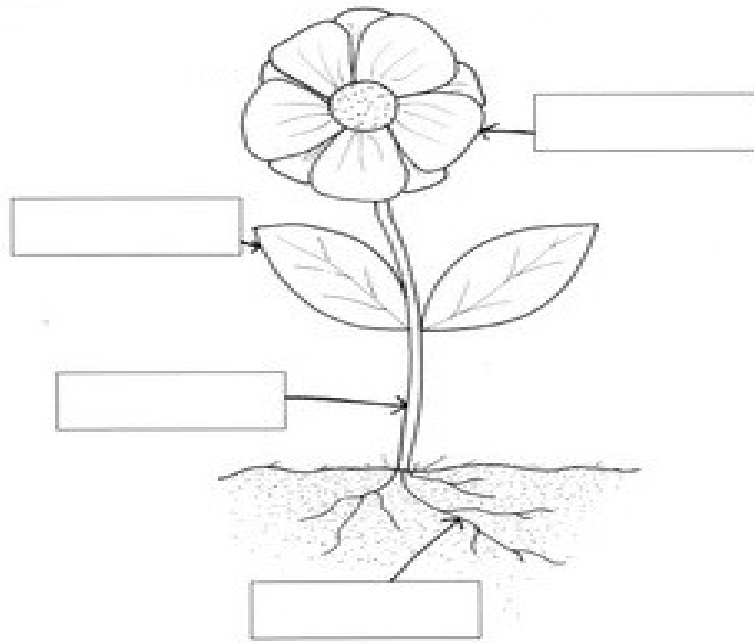
- a) The ‘Desert Oak tree’ is found in South Africa. \_\_\_\_\_
- b) Weeds grow in fields and gardens without being planted. \_\_\_\_\_
- c) Carrot is a root. \_\_\_\_\_
- d) Mostly the shortage of water occurs during the rainy season. \_\_\_\_\_
- e) Leaves are used by the plant for taking up water from the soil. \_\_\_\_\_

**Q.10 Write the names of the following. (1/2 × 4 = 2)**

- a) National Bird of India : \_\_\_\_\_
- b) Capital of India : \_\_\_\_\_
- c) National Animal of India : \_\_\_\_\_
- d) National Anthem of India : \_\_\_\_\_

**Q.11 Label the parts.**

**( $\frac{1}{2} \times 4 = 2$ )**



**Q.12 Write any two differences between Nandita's house in village and her Mama's house in Mumbai.**

**( $1 \times 2 = 2$ )**

|             | <b>Nandita's house in village</b> | <b>Her Mama's house in Mumbai</b> |
|-------------|-----------------------------------|-----------------------------------|
| <b>(i)</b>  | <hr/> <hr/> <hr/>                 | <hr/> <hr/> <hr/>                 |
| <b>(ii)</b> | <hr/> <hr/> <hr/>                 | <hr/> <hr/> <hr/>                 |

**Q.13 Show the following places in the given map.**

**(1 × 5 = 5)**

(i) Kerala    (ii) Maharashtra    (iii) Gujarat    (iv) Karnataka    (v) Assam

