

Atomic Energy Education Society
Annual Examination-2021-22

Class: V
Subject: English

Time : 2 hours
Marks : 50

To be filled by the Student

Student's Name: _____

Name of the School: _____

Class /Sec.: _____ Roll No.: _____ Date of Examination: _____

To be filled by the Teacher

Invigilator's Sign: _____

Examiner's Sign : _____

Checker's Sign: _____

Marks Obtained: _____

General Instructions:

1. Marks are indicated against each question.
2. Read each question carefully and write the answer neatly.
3. Ensure that questions from each section are answered.
4. On completion of the exam, the student must hand over the answer sheet to the invigilator.
5. The student should ensure that the answer sheet is not damaged or folded.

SECTION A: (Reading) (12 marks)

A1. Read the passage carefully.

The king of Iran had heard that Birbal was one of the wisest men in the East. He wanted to meet Birbal, so he sent him an invitation to visit his country. Soon Birbal reached Iran. When he entered the palace, he was puzzled to find not one, but six kings seated there. All of them were neatly dressed in kingly robes. Birbal began to think, 'Who is the real king?' The very next moment he got the answer. Confidently, he approached the king and bowed to him. "But how did you identify me?" The king asked.

Birbal smiled and explained: 'The false kings were all looking at you, while you looked straight ahead.'

The king was overjoyed with the response. He embraced Birbal and showered him with gifts.

A1.1 Choose the correct option.

($\frac{1}{2} \times 2 = 1$)

i) The king sent an invitation to visit Iran because

- a) Birbal was very rich
- b) Birbal was very wise
- c) Birbal was very brave

ii) When Birbal entered the palace, he was

- a) disappointed
- b) puzzled
- c) happy

A.1.2 Answer the following in your own words.

(1x1=1)

i) How did the king of Iran reward Birbal ?

A.1.3) Give one word from the passage for the following:

(1 x 2= 2)

a) a place where a king and a queen lives

b) very clever

A.1. 4) Write down two words from the passage that end with - ed

(1x2= 2)

1. _____ 2. _____

A2. Read the poem carefully.

THE SPRING

The cock is crowing

The stream is flowing

Small bird twitter,

The lake doth glitter.

The green field sleeps in the sun,

The oldest and the youngest,

Are at work with the strongest.

The cattle are grazing,

The heads never raising,

There are forty feeding like one !

A2.1 Answer the following in one line.

(1x2=2)

i) Which season is described by the poet in this poem ?

ii) Why are the cattle not raising their heads ?

A2.2) Add suitable adjectives to the following nouns from the poem.

($\frac{1}{2} \times 2 = 1$)

a) _____ field b) _____ birds

A 2. 3) Write any two pairs of rhyming words from the poem.

(1x 2=2)

a) _____ b) _____

A 2. 4) Give the opposites of the following words from the poem. ($\frac{1}{2} \times 2 = 1$)

a) old x _____ b) weak x _____

SECTION B: Textual Questions(12 Marks)

B1. Answer the following questions:

(1x6= 6)

i). Why was the Sultan in a hurry ?

ii) Why did the men rush back to the ship ?

iii) Why did all the children hate Hari ?

iv) Why did the people of Kangleipak love their king and queen ?

v) In the lesson, “Gulliver’s Travels” why did the giant carry a reaping hook ?

vi) Why did the Ningthou want to choose a future king ?

B 2. Answer the following questions.

(1x6=6)

i) What did Malu learn to do from her parents ?

ii) Who has written the poem “Class Discussion”?

iii) How do people walk in Topsy -turvy Land ?

iv) Why are the two children nobody’s friends ?

v)What was it that Malu’s parents wanted her to learn ?

vi) In the poem “Sing a song of people” what are the things that people carry with them, while moving around ?

SECTION C: Creative Writing (10 Marks)

C1. Write a detailed character sketch of Sanatombi with the help of the clues. (1x5= 5)

(daughter of Ningthou and Leima , five years old ,lovely child, soft and beautiful from inside, loved by all, kind hearted , felt the pain of others, made Tunggi Leima, future queen of Kangleipak)

C2. Look at the picture & write a paragraph on it in not more than 75-100 words.

(5)



SECTION D- GRAMMAR (6 Marks)

D1.Fill in the blanks with a,an or the in the following sentences. (½ x2=1)

a) Virat Kohli is ____ famous cricketer.

b) _____ Taj Mahal is in Agra.

D. 2) Use the appropriate collective noun from the box: (½ x4=2)

bunch, pack, litter, cluster

a) a _____ of kittens.

b) a _____ of keys

c) a _____ of cards

d) a _____ of stars.

D.3 Write a suitable describing word and fill in the blank. (1)

An apple is juicy.

An orange is juicier than an apple.

A sugarcane is the _____ of all.

D4. Write the full forms of the following. (½ x 2=1)

a) don't _____

b) shan't _____

D5. Punctuate the following. (1)

oh no i missed the bus

SECTION E -Vocabulary (5 Marks)

E1. Select one word from the box for the following: (½ x 4 =2)

apron, mane, barren , chatterer

- i) land with no vegetation - _____
- ii) a garment worn while cooking in the kitchen- _____
- iii) someone who talks a lot _____
- iv) long hair on the neck of some animals - _____

E 2. Write the opposites of the following using un, im, dis (½ x2 =1)

- a) perfect - _____ b) obedient - _____

E3. Give two pairs of rhyming words for the following: (½ x2 =1)

- a) lend _____
- b) ground - _____

E4. Make a meaningful sentence with the given word. (1)

excited : _____

SECTION F- Spelling (5 marks)

F1. Circle the correct spelling in the following series: (½ x4=2)

- F 1.1 a) conductur b) cundocter c) conductor
- F 1.2 a) impasinetli b) impatiently c) impasintly
- F 1.3 a) sandwiches b) sendvichis c) sandwhiches
- F 1.4 a) horase b) hoarse d) horase

F2. Rearrange the letters to make meaningful words. ($\frac{1}{2} \times 4 = 2$)

a) stmoern _____ b) bbaerr _____

c) dsciussnoi _____ d) ppoele _____

F3. Rewrite the misspelt words: ($\frac{1}{2} \times 2 = 1$)

a) trumpit _____ b) grampy - _____

_____XXXX_____

परमाणु ऊर्जा शिक्षण संस्था, मुंबई

वार्षिक परीक्षा - 2021-22

कक्षा – 5 (पाँचवीं)

समय – 2 घंटे

विषय – हिन्दी

पूर्णांक – 50 अंक

विद्यार्थी का नाम - _____

विद्यालय का नाम - _____

कक्षा / वर्ग - _____ अनुक्रमांक - _____ दिनांक - _____

निरीक्षक के हस्ताक्षर - _____

परीक्षक के हस्ताक्षर - _____

प्राप्तांक - _____

जाँचकर्ता के हस्ताक्षर - _____

सामान्य निर्देश :-

- 1) सभी प्रश्नों के उत्तर दिए गए निर्देशानुसार लिखिए ।
- 2) सभी प्रश्नों के उत्तर लिखना अनिवार्य है ।
- 3) सभी प्रश्नों के अंक उनके समक्ष दिए गए हैं ।

4) स्वच्छता एवम् सुन्दर लेखन का विशेष ध्यान रखे।

खंड (क) – वाचन, 10 अंक

प्रश्न 1 – निम्नलिखित गद्यांश को पढ़कर नीचे दिये गए प्रश्नों के उत्तर लिखो।

नीम का पेड़ एक ऐसा पेड़ है जो औषधीय गुणों से भरपूर होता है। नीम अधिक तेज़ी से उगने वाला पेड़ है। नीम का पेड़ स्वभाव में कड़वा होता है परंतु इसके गुण बड़े मीठे होते हैं। नीम का पेड़ संसार भर में पाया जाता है और यह पेड़ भारत में ज़्यादातर देखने को मिलता है। नीम के पेड़ की छोटी – छोटी हरी पत्तियाँ होती हैं जो हमारे स्वास्थ्य के लिए बड़ी लाभकारी होती हैं। इनसे कई प्रकार की दवाईयाँ तैयार की जाती हैं। नीम का पेड़ 15 से 20 मीटर तक ऊँचा होता है। इस पेड़ के तने काफ़ी मजबूत और काले-भूरे रंग के होते हैं। नीम का पेड़ हर प्रकार के मौसम में उग जाता है। इसे ज़्यादा पानी की भी ज़रूरत नहीं होती।

क) नीम का पेड़ स्वभाव में कैसा होता है ? (1)

ख) नीम का पेड़ किस मौसम में उग सकता है ?

(1)

ग) नीम के पेड़ की एक विशेषता लिखो |

(1)

घ) नीम का पेड़ कितना ऊँचा होता है ?

(1)

ङ) नीचे दिए गए शब्द का पर्यायवाची लिखो |

(1)

पेड़ - -----

प्रश्न2-दिए गए अपठित गद्यांश को पढ़कर पूछे गए प्रश्नों के उत्तर दो -

पाँच-छह साल का एक नन्हा बालक साथियों के साथ स्कूल से घर लौट रहा था। रास्ते में एक आम का बगीचा पड़ा। बच्चों का मन हुआ क्यों न उस बाग में जाकर फल तोड़कर खाएं। सब बच्चे राजी हो गए। नन्हा बालक भी साथियों के साथ आम के बगीचे में गया। सभी बच्चे माली की नजर बचाकर फल तोड़ने लगे। लेकिन नन्हा बालक चुपचाप एक कोने में खड़ा रहा। साथियों ने कहा “अरे बुत सा क्यों खड़ा है। नन्हे ,तू भी क्यों

नहीं तोड़ लेता दो चार आम ? लेकिन नन्हे के मन ने चोरी से आम तोड़ने की अनुमति नहीं दी | उसकी समझ में नहीं आया की वह क्या करे ?

क) बालक कहाँ से लौट रहा था ? (1)

उ- _____

ख) रास्ते में बच्चों ने क्या सोचा ? (1)

उ- _____

ग) बाग में बच्चों ने क्या किया ? (1)

उ- _____

घ) साथियों ने नन्हे बालक से क्या कहा ? (1)

उ- _____

इनन्हे बालक ने क्या किया ? (1)

उ- _____

खंड (ख)-पाठ्यपुस्तक के प्रश्न – 10 अंक

प्रश्न 3- अपने घर के नल के पाइप में मोटर लगवाना दूसरों का हक छीनने के बराबर है | लेखक ऐसा क्यों मानते हैं ? (2)

प्रश्न 4 - अब्बा ने क्या सोचकर बच्चों की बात मान ली ? (2)

प्रश्न 5- जवाहरलाल को अमरनाथ तक का सफ़र अधूरा क्यों छोड़ना पड़ा ? (2)

प्रश्न 6-बिशन घायल तीतर को क्यों बचाना चाहता था ? (1)

प्रश्न 7-“वो इधर से निकला , उधर चला गया” यह बात कौन किसे बता रहा होगा ?

(1)

प्रश्न 8- मैडल से चूड़ियाँ बनवा लेने पर दादी ने बुआ को महामूर्ख क्यों माना ?

(1)

प्रश्न 9- अंधेर नगरी की प्रजा राजा के मरने पर खुश क्यों हुई ?

(1)

खंड (ग) - रचनात्मक लेखन – 5 अंक

प्रश्न 10- दिए गए विषयों में से किसी एक पर 75 से 100 शब्दों का निबंध लिखो ।(5)

क) गणतन्त्र दिवस

ख) होली

खंड (घ) - व्याकरण – 10

प्रश्न 11- दिए गए वाक्यों में रेखांकित शब्दों को आजकल कैसे लिखते हैं ? रिक्त

स्थान में लिखो ।

(2x 1 =

2)

क) न ऐसी महुरत बनी बढ़िया जैसी ।

ख) ये गलती न मेरी , यह गलती बिरानी।

प्रश्न 12- जिन शब्दों के नीचे रेखा खींची है , उनका लिंग पहचानों और लिखो | (2x 1 = 2)

क) पुलिस की वर्दी - -----

ख) उस जैसा महामूर्ख - -----

प्रश्न 13- नीचे लिखे मुहावरों का वाक्यों में प्रयोग करो | (2 x 1 = 2)

क) आँखें भर आना - -----

ख) आँख मूँदना - -----

प्रश्न 14- दिए गए वाक्यों में सर्वनाम का ठीक रूप छाँटकर लिखो | (2x 1 = 2)

क) सेंटीला ----- घर नागालैंड के किस शहर में है ? (तुम)

ख) मोहन को समझ नहीं आ रहा था कि ----- क्या करना चाहिए | (वह)

प्रश्न 15- दिए गए शब्दों का वाक्यों में प्रयोग करो | (2x 1 = 2)

क) रूखा - -----

ख) खूँखार - -----

खंड (इ) – शब्दावली – 5 अंक

प्रश्न 16- निम्नलिखित देशों की मुद्रा लिखो । (3x 1 =

3)

क) जापान - -----

ख) इंग्लैंड - -----

ग) सऊदी अरब - -----

प्रश्न 17- दिए गए वाक्यों में चुनकर सही शब्द लिखो । (2x 1 = 2)

(चकाचक , फटाफट ,झकाझक, चटपट)

क) हंसा अपना सारा काम ----- कर लेती है ।

ख) उस भुक्खड़ ने ----- सारे लड्डू खा डाले ।

खंड (च) वर्तनी – 5 अंक

प्रश्न 18- दिए गए वर्णों को सही क्रम में लगाकर सार्थक शब्द बनाओ और लिखो ।

(3x 1 = 3)

क) मा , अ , ल , री - -----

ख) द , फू , न , ल - -----

ग) र , प , उ , चा - -----

प्रश्न 19- दिए गए शब्दों को शुद्ध करके लिखो ।

(2x 1 =

2)

क) परकृति - -----

ख) परथवी - -----

खंड (छ)- सुलेख – 5 अंक

प्रश्न 20 - नीचे दिए हुए गद्यांश को देखकर सुलेख लिखो -

(5)

[illegible]

Atomic Energy Education Society
Annual Examination – 2021-22

Class : V

Time : 2 Hours

Subject : Mathematics

Marks : 50

To be filled by the student

Student's Name : _____

Name of the School : _____

Class/Sec : _____ Roll No. : _____ Date of Examination : _____

To be filled by the teacher

Invigilator's Sign : _____

Examiner's Sign : _____

Marks Obtained : _____

General Instructions:

1. All questions are compulsory.
2. The question paper is divided into 4 sections A,B,C and D
3. The question paper consists of Very Short Answer Questions (Each one carries 1 Mark), Short Answer Questions (Each one carries 2 Marks) and long Answer Questions (Each one carries 4 marks).

Section A – Knowledge (12 Marks)

A-I Fill in the blanks with the correct answer.

(1 x 4 = 4)

1. The space occupied by an object is its _____

a) area b) perimeter c) volume

2. All the faces of a cube are _____

a) squares b) triangles c) rectangles

3. Area of a rectangle = _____

a) $2 \times (\text{length} + \text{breadth})$ b) $\text{length} + \text{breadth}$ c) $\text{length} \times \text{breadth}$

4. 2.05 is read as _____

a) Two point five b) Two point zero five c) Two and zero five

A-II Do as directed

(2 x 4 = 8)

1. i) Manish wants to go from Mumbai to Surat in Gujarat. He travels in the _____ direction.

ii) Distance from Mumbai to Bangalore is 800 km. The scale of the map is $1\text{cm} = 200\text{km}$. Find the distance between these two cities on the map.

2. Write in decimal.

85 mm = _____ cm

1905g = _____ kg

3. Draw a deep Drawing of a cube.

4. What should we look for to check if 100 rupee note is a real note or a fake note? (Write any 2 things)

i) _____

ii) _____

Section B – Understanding (12 Marks)

B-I Choose the correct option and fill in the blanks. (1 x 4 = 4)

i) 1.28 is same as _____

a) 1.028

b) 12.8

c) 1.280

ii) If each side of a rectangle doubles its perimeter becomes _____

a) 8 times

b) 2 times

c) 4 times

iii) if  represents 50 trees,  represent _____ trees.

a) 40

b) 200

c) 4

iv) The appropriate unit to measure area of your classroom is _____

a) square m

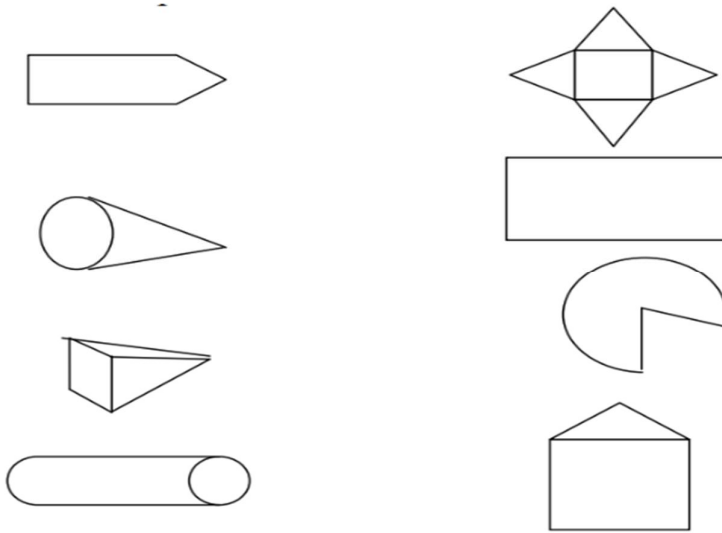
b) square cm

c) square km

B- II Do as directed.

(2 x 2 = 4)

1. Match the solids with their deep drawings.



2. Complete the pattern.

$$(0 \text{ X } 9) + 1 = 1$$

$$(1 \text{ X } 9) + 2 = 11$$

$$(12 \text{ X } 9) + 3 = 111$$

$$(123 \text{ X } 9) + \underline{\hspace{1cm}} = \underline{\hspace{1cm}}$$

$$(1234 \text{ X } 9) + 5 = \underline{\hspace{1cm}}$$

$$(12345 \text{ X } 9) + 6 = \underline{\hspace{1cm}}$$

B-III. The given bar chart shows the information about the breakfast items liked by class I students. (1 x 4 = 4)

Answer the following using the bar chart.



- 1) Toast and butter is liked by _____ students.
- 2) _____ more students like sandwiches than Parantha.
- 3) _____ and _____ is liked by equal number of students.
- 4) How many students are there in class I ? _____

Section C –Ability To Compute (13 Marks)

C.I Write True or False.

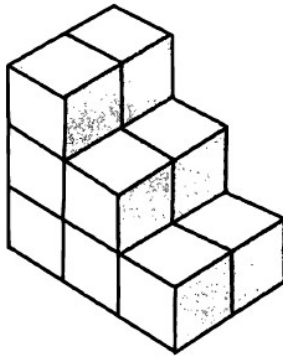
(1 x 3 = 3)

- a) one tenth part of a rupee is 10 paise _____
- b) the perimeter of a rectangle with length
9 cm and breadth 5 cm is 45 cm _____
- c)The sum of 32.6 and 2.34 is 34.94 _____

C-II Do as directed.

(2 x 3 = 6)

1. Look at the model and count the number of cubes used to make this model.

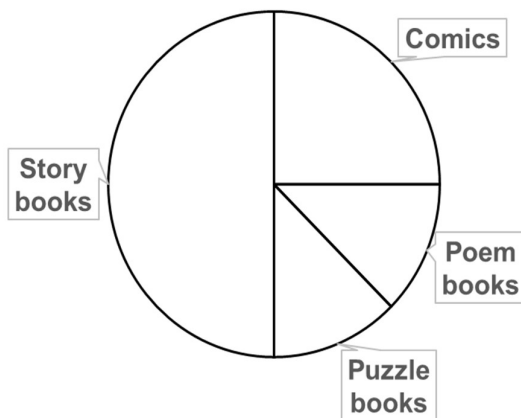


No. of cubes = _____

If each cube is of side 1cm ,What is the volume of this model?

Answer : _____

2. Information about the most favourite type of book of the students in a class is recorded in the given Pie Chart (chapati chart)



If 80 students like to read story books

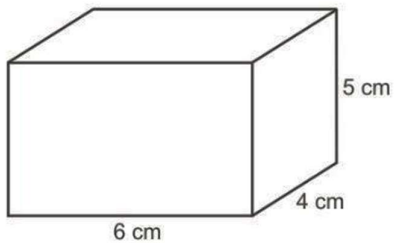
- a) How many students are there in the class ?

Ans:

- b) Number of students who like comics is _____ of the total number of students.

i) $\frac{1}{8}$ ii) $\frac{1}{2}$ iii) $\frac{1}{4}$

3. Find the volume of the cuboid given below.



C.III Given below are the currencies of various countries and its value in Indian Rupees. (1 + 1 + 2)

Country	Currency	Exchange rate in Indian Rupees (Rs)
Nepal	Rupee	0.63
South Korea	Won	0.06
Hong Kong	HK Dollar	9.60
Germany	Euro	84.50
UAE	Dirham	20.40
England	Pound	101.50

- a) The currency of _____ costs the most in Indian Rupees.
- b) The currency of _____ costs the least in Indian Rupees.
- c) How many HK dollars can we exchange for Rs.1000?

Section D – Problem solving Ability (13 marks)

D-I Do as directed.

(1 x 3 = 3)

a) The fencing of a square garden is 28 cm. Its each side is _____(Fill in the blank)

b) Choose the correct question which makes the best story problem. (put \checkmark)

The cost of one shirt is Rs 230. Ram bought 4 shirts.

i) How much money did he have?

ii) How much more money did he need?

iii) How much money did he pay?

c) Sanjay drinks 9 glasses of water everyday. How many glasses of water does hedrink in a week?

D-II Solve.

(2 x 3 = 6)

1. A wire of length 36cm is bent into a square. What is the area of the square formed?

2. A sack contains 5 rupee coins. The sack weighs 2 kg 250 g. if each 5 rupee coin weighs 9 g, how many 5 rupee coins are there in the sack?

3. Divide 638 by 15 and verify your answer.

D-III Solve the following. (1+1+2) = 4 marks)

Salary of farm workers of different states is given in the table.
Look at the table and answer the following.

State	Salary for one day
Haryana	₹ 450
Rajasthan	₹ 390
Odisha	₹ 415
Karnataka	₹ 480
Madhya Pradesh	₹ 440
Tamil Nadu	₹ 400

- i) For farm workers which state has fixed the highest salary? Which state has fixed the lowest?

- ii) In a day how much more will a farm worker in Haryana get than a worker in Tamil Nadu?

- iii) How much more will a farm worker in Madhya Pradesh get than a worker in Odisha after working for a week?

Atomic Energy Education Society

Annual Examination-2021-22

Class : V

Time : 2 hours

Subject : EVS

Marks : 50

To be filled by the student

Student's Name: _____

Name of the School: _____

Class /Sec.: _____ Roll No.: _____ Date of Examination: _____

To be filled by the teacher

Invigilator's Sign: _____

Examiner's Sign : _____

Marks Obtained: _____

General Instructions:

This paper consists of:

Section A: Observation and Reporting- 18 marks

Section B: Identification and Classification-16 marks

Section C: Discovery of Facts-16 marks

All the questions are compulsory

SECTION –A
OBSERVATION AND REPORTING (18 MARKS)

1. Tick(✓) the correct answer.

(1x5=5)

- a) Petroleum is sent to a _____ to clean and separate the things mixed in it.
i) refinery ii) mines iii) petrol iv) well
- b) Beautiful carving on the ceiling of houseboats and some big houses which Look like a jigsaw puzzle is called _____.
i) dab ii) mehraab iii) rangoli iv) khatamband
- c) Our heart beats _____ times in a minute.
i) 12-14 ii) 40-50 iii) 70-80 iv) 100 - 120
- d) The constitution of India was prepared under the leadership of _____.
i) Gandhiji ii) Dr.B.R.Ambedkar iii) Narayan iv) Dr. Rajendra Prasad
- e) There are _____ players in a team of basketball game.
i) eleven ii) seven iii) twelve iv) five

2. Identify and name the following pictures.

(1x2=2)

a)



b)



3. Answer the following questions in 2-3 sentences.

(2x3=6)

a) Write any two ways to save oil.

b) What should you do in case there is an earthquake?

c) What is Lekha ?

4. Look at the pictures that show the journey of bajra seeds from field to plate .Few steps are written below, rewrite them in the correct sequence, from 1 to 5. (1x5=5)



- Dough is made from bajra atta by putting some water in it.
- The bajra crop is cut from the field.
- Bajra seeds are separated from the cobs using mortar and pestle.
- Bajra roti is made using hands and baked on tawa.
- Grinding of bajra grains is done in the grinder.

1. _____
2. _____
3. _____
4. _____
5. _____

SECTION- B

IDENTIFICATION AND CLASSIFICATION (16MARKS)

1) Givean example for each of the following. (1x4=4)

a) Musical instrument

b) Women player in India

c) Petroleum product

d) Natural fertilizer

2)Give one word for the following. (1x3=3)

a) A strong wall built across a river _____

b) Head of village council (Panchayat) _____

c) Centre opened by Suryamani _____

3)Answer the following.

(1x2=2)

a) Write any two differences between Sinduri and Jatrya's dream village.

Jatrya's dream village	Sinduri

4)Give reason.(1x2=2)

For the Changpas , their goats are their only treasures.

5) Write a short note(75-100 words) on any one of the following.

(5)

“Jhoom farming” OR “Pashmina Shawl”.

SECTION - C
DISCOVERY OF FACTS (16MARKS)

1. Match the following.

(1x4=4)

A		B	
i)	Undhiya	a)	Sweet rotis made from jaggery and gram
ii)	Puranpoli	b)	Experiments with peas.
iii)	Gregor Mendel	c)	Fought against untouchability
iv)	Gandhiji	d)	A kind of stew

i) _____ ii) _____ iii) _____ iv) _____

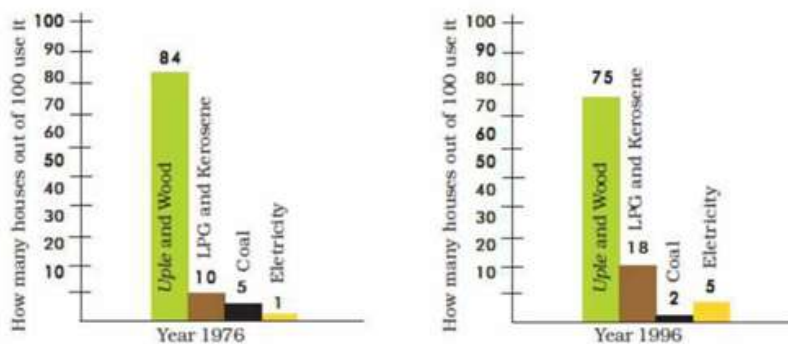
2. Fill in the blanks by choosing the correct option.

(1x3=3)

- a) _____ leaves protect seeds from insects. (Neem/ Banana)
- b) Two babies born to a single mother in one birth are called _____.(Twins/ Foetus)
- c) _____ is the coach of NBA basketball team.
(NoorKhan/ Mustafa Khan)

3. Read the bar chart given below and answer the following.

(1X2=2)



a) Which fuel was used the least in 1976? _____

b) In 1996, use of LPG and kerosene was _____ (more/less) than in 1976.

4. Answer the following.

(1x2=2)

Write the full form of

a) CNG- _____

b) NBA- _____

5. Identify and write the names of the states/union territory in the boxes given below near the map of India.

(1x5=5)

