



## परमाणु ऊर्जा शिक्षण संस्था

Atomic Energy Education Society  
वार्षिक परीक्षा / Annual Examination 2024-25

कक्षा/Class : IV

अवधि / Duration : 3 Hours

विषय/Subject : English

अधिकतम अंक/Maximum Marks : 80

---

### विद्यार्थी द्वारा भरा जाए /To be filled by the Student

अद्वितीय परीक्षा क्रमांक /Unique Examination No: \_\_\_\_\_

कक्षा / अनुभाग Class /Sec.: \_\_\_\_\_ दिनांक / Date: \_\_\_\_\_

परीक्षा का दिन /Day of Examination: \_\_\_\_\_

विद्यालय का नाम/Name of the School: \_\_\_\_\_

हस्ताक्षर निरीक्षक (दिनांक सहित) /Invigilator's Sign.(With date): \_\_\_\_\_

---

### अध्यापकों द्वारा भरा जाए / To be filled by the Teachers

प्राप्तांक / Marks Obtained  पूर्णांक/Total Marks

हस्ताक्षर परीक्षक (दिनांक सहित) / Examiner's Sign.(With date): \_\_\_\_\_

हस्ताक्षर जाँचकर्ता (दिनांक सहित) / Cross Checker's Sign.(With date): \_\_\_\_\_

हस्ताक्षर परीक्षा प्रभारी (दिनांक सहित) / Exam I/C Sign.(With date): \_\_\_\_\_

---

### सामान्य निर्देश /General Instructions:

- Answer all the questions.
- Read each question carefully and answer neatly.
- Marks are indicated against each question.
- Answer sheet should not to be damaged or folded.
- On completion of the examination, answer sheet must be handed over to the invigilator.

## **SECTION - A READING (20MARKS)**

### **A1. Read the following passage and answer the questions given. (5 Marks)**

Helen liked Miss Sullivan. She was strict but kind. She spelt a lot of words for Helen, on her hand, day and night, to make Helen understand. One day, her teacher made Helen put her hand into running water. Then, she spelt W\_A\_T\_E\_R. Suddenly Helen understood that W\_A\_T\_E\_R meant something wet, running over her hand. She understood that words were the most important things in the world.

1. How did Helen feel about Miss Sullivan? (1)

---

---

2. 'Running water' as used in the passage means \_\_\_\_\_ (1)

(a) flowing water

(b) stagnant water

(c) fresh water

(d) dirty water

3. What were two characteristics of Miss Sullivan? (1)

---

---

4. What did Helen Keller's teacher spell into her hand? (1)

---

---

5) What did Helen understand about the word W-A-T-E-R? (1)

---

---

**A2. Read the following poem and answer the questions given. (5 Marks)**

There was a naughty boy,  
And a naughty boy was he.  
He ran away to Scotland,  
the people there to see –  
Then he found  
That the ground  
Was as hard,  
That a yard  
Was as long,  
That a song  
Was as merry

1. What kind of a boy was he? (1)

---

2. Where did he run away to? (1)

---

3. What did the naughty boy find about the ground? (1)

(a) It was soft

(b) It was wet

(c) It was hard

(d) It was muddy

4. Which word rhymes with 'long'? (1)

(a) fog

(b) song

(c) frog

(d) dog

5. The boy ran away to England. (True/ False) (1)

---

**A3. Read the following passage and answer the questions given below.**

**(10 Marks)**

Once upon a time, in a small pond, there lived a brave little turtle named Timmy. Timmy loved exploring the pond and making new friends. One day, he found a shiny pebble and decided to show it to his friends. They were amazed by Timmy's discovery and praised his bravery. From that day on, Timmy became known as the bravest turtle in the pond.

1. Where did Timmy live? (1)

---

2. What does the word "brave" mean in the context of the passage?

(Tick the correct answer) (1)

(a) fear

(b) courage

(c) lazy

(d) shy

3. What did Timmy find one day? (1)

---

4. Write the present tense of given words: (1x2=2)

i) Found - \_\_\_\_\_

ii) Became - \_\_\_\_\_

5. Pick out two describing words from the passage. (1x2=2)

i) \_\_\_\_\_

ii) \_\_\_\_\_

6. What did Timmy love to do? (1)

---

---

7. What kind of turtle was Timmy? (1)

---

---

8. What did Timmy decide to do with the pebble? (1)

---

---

**SECTION-B TEXTUAL QUESTIONS (10 MARKS)**

**Poetry (5 Marks)**

**I) Answer each question in a complete sentence.**

1. From where did the naughty boy come? (1)

---

---

2. Which part of the plant should be watered? (2)

---

---

3. How did Hiawatha call the birds and animals? (2)

---

---

**Prose (5 Marks)**

**II) Answer each question in a complete sentence.**

1. What did the carpenter buy? (1)

---

---

2. Who said to whom? (2)

(i) "Why don't you go to school?"

---

---

(ii) "Go and buy books"

---

---

3. How did the Pundit challenge everybody? (2)


---

---

**SECTION-C: CREATIVE WRITING (10 MARKS)**

**C1. Describe the given picture in a paragraph of 5-6 sentences using the clues given below. (5)**

blackboard, cleaning, classroom, curtains, window, broom, wiping, arranging



---

---

---

---

---

---

---

---

---

---

**C.2 Rearrange the following sentences in the correct order. Also, choose the right word from the box and add it before each sentence. (5)**

First,	Then,	After that,	Finally
--------	-------	-------------	---------

1. It gave him its branches to make a house.
2. It asked him to sit on the stump.
3. It gave him its trunk to make a boat.
4. The tree gave its apples to the boy.
5. Once there was a tree and it loved a little boy.

---

---

---

---

---

---

---

---

**SECTION-D: GRAMMAR (15 MARKS)**

**Do as directed.**

**1. Add dis/in to make the opposite of the words. (1x2=2)**

i) own- \_\_\_\_\_ ii) efficient - \_\_\_\_\_

**2. Underline the describing word. (1x2=2)**

i) A glass of milk makes your teeth strong.

ii) The yard is long.

**3. Use 'and' or 'or' to complete the sentence: (1)**

Do you want a story book \_\_\_\_\_ a book of poems? (or/and)

**4. Use the correct word to complete the sentence:**

**( $\frac{1}{2} \times 2 = 1$ )**

A tree has one \_\_\_\_\_ (trunk/trunks) and many \_\_\_\_\_  
(branch/branches)

**5. Add -ly to the word to complete the sentence:**

**(1)**

Do your work \_\_\_\_\_. (neat)

**6. Use 'a' or 'an' to complete the sentence:**

**(1x2=2)**

i) Neha has \_\_\_\_\_ alarm clock. (a/an)

ii) I have \_\_\_\_\_ raincoat. (a/an)

**7. Make new word by adding '-er' or '-r'.**

**(1x2=2)**

i) fight - \_\_\_\_\_

ii) ride - \_\_\_\_\_

**8. Write the past tense of these words:**

**(1x2=2)**

i) see - \_\_\_\_\_

ii) pluck - \_\_\_\_\_

**9. Add -ing to form a new word.**

**(1x2=2)**

i) cook - \_\_\_\_\_

ii) dance - \_\_\_\_\_

### **SECTION – E VOCABULARY -10 MARKS**

**1. Give one word or another word for.**

**(1x3=3)**

i) a dome- shaped hut - \_\_\_\_\_

ii) one who drives a vehicle - \_\_\_\_\_

iii) a place where books are kept - \_\_\_\_\_

**2. Write two words that you can make from 'CARPENTER'**

**(1x2=2)**

i) \_\_\_\_\_

ii) \_\_\_\_\_



**3. Write the meaning of:** (1)

delicious - \_\_\_\_\_

**4. Write the opposite word.** (1)

skinny x \_\_\_\_\_

**5. Write two words that ends with the 'ail'. For example: mail** ( $\frac{1}{2} \times 2 = 1$ )

i) \_\_\_\_\_

ii) \_\_\_\_\_

**6. Write the rhyming words.** (1×2=2)

i) cook - \_\_\_\_\_

ii) walk - \_\_\_\_\_

### **SECTION -F SPELLING (10 MARKS)**

**Do as directed.**

**1. Circle the correct spelling.** (1×3=3)

i) tongue

tangue

tounge

ii) rekognize

recognise

recogniise

iii) tomorow

tommorrow

tomorrow

**2. Rearrange the jumbled letters to make meaningful words.** (1×2=2)

i) l o r e g a - \_\_\_\_\_

ii) t l o u s - \_\_\_\_\_

**3. Fill in the blanks with the correct words** (1×2=2)

i) The squirrel has a long \_\_\_\_\_. (tale / tail)

ii) The king sits on the \_\_\_\_\_. (throne / thrown)

**4. Fill in the missing letters to complete the words.** (1×3=3)

i) Pu \_\_\_\_ et

ii) B \_\_\_\_ k s \_\_\_\_ op

iii) La \_\_\_\_ g \_\_\_\_ a ge

### **SECTION G-HANDWRITING (5 MARKS)**

**Write the paragraph given below in neat cursive handwriting.**

Children have a wide range of storybooks to enjoy. There are fairy tales with magical creatures and brave heroes. Fables teach important lessons through the actions of animals. Mystery stories make kids think and solve puzzles.

Adventure stories take them on exciting journeys. Science fiction opens their minds to futuristic possibilities and imaginative worlds. Some popular books include Sherlock Holmes, The Adventures of Tom Sawyer, The Room on the Roof, The Clever Tailor, Aliens for Breakfast and so on.

This image shows a single sheet of white paper with horizontal blue ruling lines. The lines are evenly spaced and run across the width of the page. There are no margins, text, or other markings on the paper.

This image shows a single sheet of white paper with horizontal ruling lines. The lines are evenly spaced and run across the width of the page. There are no margins, text, or other markings on the paper.



परमाणु ऊर्जा शिक्षण संस्था

Atomic Energy Education Society

वार्षिक परीक्षा / Annual Examination 2024-25

कक्षा / Class : चौथी (4)

अवधि / Duration: 3 घंटे

विषय / Subject : हिंदी

अधिकतम अंक / Maximum Marks: 80

विद्यार्थी द्वारा भरा जाए / To be filled by the Student

अद्वितीय परीक्षा क्रमांक/Unique Examination No: -----

वर्ग /Sec. : ----- परीक्षा की तिथि /Date of Examination : -----

विद्यालय का नाम / Name of the School :-----

हस्ताक्षर निरीक्षक / Invigilator's Sign : -----

अध्यापकों द्वारा भरा जाए / To be filled by the Teacher

प्राप्तांक / Marks Obtained - ----- पूर्णांक / Total Mark - -----

हस्ताक्षर परीक्षक / Examiner's Sign : -----

हस्ताक्षर जाँचकर्ता / Cross Checker's Sign.:-----

हस्ताक्षर परीक्षा प्रभारी / Exam I/C Sign.:-----

सामान्य निर्देश / General Instructions:

1. सभी प्रश्नों के उत्तर दिए गए निर्देशानुसार लिखिए ।
2. सभी प्रश्नों के अंक उनके समक्ष दिए गए हैं ।
3. स्वच्छता एवं सुंदर लेख का विशेष ध्यान रखे ।

( पठन पर आधारित प्रश्न - 20 अंक )

**प्र.1 - नीचे दिए गए पठित गद्यांश को पढ़कर पूछे गए प्रश्नों के उत्तर लिखिए ।**

एक दिन भीखूभाई का मन नारियल खाने का हुआ। ताज़ा-मुलायम, कसा हुआ, शक्कर के साथ। म्म्मम्म ! उसके बारे में सोचते ही भीखूभाई ने अपने होठों को चटकारा, “वाह क्या मीठा-मीठा सा स्वाद होगा!”

लेकिन एक छोटी-सी समस्या थी। घर में तो एक भी नारियल नहीं था।

“ओहो! अब मुझे बाज़ार जाना पड़ेगा,” उन्होंने अपनी पत्नी लाभुबेन

से कहा। लाभुबेन अपने कंधे उचकाकर बोलीं, “खाना है तो जाना है। ”

एक समस्या और थी। भीखूभाई ने कहा, “पैसे खर्च करने पड़ेंगे,

लाभुबेन बोली, “हाँ। पैसे तो खर्च करने पड़ेंगे।”

अब तक तो तुम्हें पता लग गया होगा कि भीखूभाई ज़रा कंजूस थे।

वे सीधे खेत में बूढ़े बरगद के नीचे जा कर बैठ गए और सोचने लगे, “क्या करूँ?

में क्या करूँ?”

1) भीखूभाई का क्या खाने का मन हुआ ? (1)

---

---

2) भीखूभाई कहाँ जा कर बैठ गए ? (1)

---

---

3) विलोम शब्द लिखो । (1)

मीठा - -----

4) लिंग बदलो । (1)

पत्नी - -----

5) खाली स्थान भरो । (1)

घर में तो एक भी ----- नहीं था।

## प्र.2 - नीचे दिए गए पठित गद्यांश को पढ़कर पूछे गए प्रश्नों के उत्तर लिखिए ।

हुदहुद एक बहुत ही सुंदर पक्षी है। इसके शरीर का सबसे सुंदर भाग इसके सिर की कलगी होती है। वैसे तो यह इसे समेटे रहता है। पर जैसे ही किसी तरह की आवाज़ होती है, यह चौकन्ना होकर परों को फैला लेता है। तब यह कलगी देखने में हू-ब-हू किसी सुंदर पंखी जैसी लगने लगती है।

हुदहुद का सारा शरीर रंग-बिरंगा और चटकीला होता है। पंख काले-काले होते हैं जिन पर मोटी सफ़ेद धारियाँ बनी होती हैं। गर्दन का अगला हिस्सा बादामी रंग का होता है। चोटी भी बादामी रंग की होती है, मगर उसके सिरे काले और सफ़ेद होते हैं। दुम का भीतरी हिस्सा सफ़ेद और बाहरी हिस्सा काले रंग का होता है। चोंच पतली, लंबी तथा तीखी होती है। इस चोंच से यह आसानी से ज़मीन के भीतर छिपे हुए कीड़े मकोड़ों को ढूँढ़ निकालता है।

1) हुदहुद कैसा पक्षी है ?

(1)

---

---

2) हुदहुद की कलगी देखने में कैसी लगती है। (1)

---

---

3) समान अर्थ लिखो | (1)

आवाज़ - -----

4) विलोम शब्द लिखो | (1)

ज़मीन - -----

5) खाली स्थान भरो | (1)

हुदहुद का सारा शरीर ----- और ----- होता है।

**प्र.3 - नीचे दिए गए अपठित गद्यांश को पढ़कर नीचे लिखे प्रश्नों के उत्तर लिखो ।**

गाँव में लता के दादाजी का एक छोटा सा बगीचा है | बगीचे में तरह - तरह के पेड़ -पौधे हैं | दादाजी पेड़ पौधों का पूरा ध्यान रखते हैं | वे रोज़ पौधों में पानी देते हैं | समय - समय पर उनमें खाद देते हैं | उनके पौधों पर रंग -बिरंगे फूल खिले हैं। दादाजी ने सब्ज़ियाँ भी उगाई है | उन्होंने गाजर, मूली, टमाटर, पालक,



गोभी, धनिया आदि अनेक सब्जियाँ उगाई है । दादाजी कहते हैं कि ताज़ा सब्जियाँ खाना सेहत के लिए अच्छी होती हैं। पेड़ - पौधे हमारे मित्र हैं ।

1) बगीचा किसका है ? (1)

-----

2) बगीचे में क्या - क्या हैं ? (1)

-----

3) पेड़ पौधों का ध्यान कौन रखते हैं ? (1)

-----

4) बगीचे में कौन - कौन सी सब्जियाँ उगाई गई हैं ? (1)

-----

5) पेड़ - पौधे हमारे क्या है ? (1)

-----

6) अनुच्छेद के लिए उचित शीर्षक दीजिए । (1)

-----

7) अनुच्छेद से ढूँढकर शब्दों का अर्थ लिखो । (1)

वक्त - ----- उपवन - -----

8) अनुच्छेद से इनके बहुवचन ढूँढकर लिखो । (1)

सब्जी - ----- पौधा - -----

9) अनुच्छेद से ढूँढकर दो नाम वाले शब्द लिखो । (1)

-----

10) अनुच्छेद से ढूँढकर दो विशेषण शब्द लिखो । (1)

-----

**(पाठ्य पुस्तक आधारित प्रश्न - 10 अंक )**

**प्र.4 - नीचे लिखे प्रश्नों के उत्तर लिखो ।**

(1) पढ़कू का नाम पढ़कू क्यों पड़ा होगा ? (1)

उत्तर - -----

-----

(2) कबाड़ी क्या क्या सामान खरीदते हैं ? (1)

उत्तर - -----

-----

(3)धनी यात्रा पर जाने के लिए उत्सुक क्यों था? (2)

उत्तर - -----

-----

(4)चुन्नू ने दाल को पहले खट्टा फिर मीठा क्यों बताया? (2)

उत्तर - -----

-----

(5)सुनीता को सब लोग गौर से क्यों देख रहे थे? (2)

उत्तर - -----

-----

(6) हर जगह नारियल के दाम में फर्क क्यों था? (2)

उत्तर - -----

-----

**( रचनात्मक लेखन पर आधारित प्रश्न -10 अंक )**

प्र.5 (क) गांधी जी के बारे में पाँच वाक्य लिखो। (5)

-----

---

---

---

---

---

---

(ख) दिए गए चित्र के बारे में पाँच वाक्य लिखो।

(5)



---

---

---

---

---

---

( व्याकरण पर आधारित प्रश्न - 15 अंक )

प्र. 6(i) ये लोग क्या गढ़ते हैं ? (2)

सुनार- ----- लुहार- -----

(ii) शब्दों के अर्थ लिखो। (2)

खलीता - ----- छन्ने - -----

(iii) नीचे लिखी चीज़ों की विशेषता बताने वाले शब्द लिखो । (2)

----- पेड़ ----- पत्थर

(iv) एक - एक चीज़ का नाम बताओ जिसे- (2)

कुतरा जा सकता है - -----

काटा जा सकता है - -----

(v) इनमें कौन-कौन से ईंधन का इस्तेमाल किया जाता है? (2)

मिट्टी के चूल्हे में - -----

गैस स्टोव - -----

(vi) लिंग बदलो । (2)

मटका - ----- दर्जी - -----

vii) ऐसे रंगों के नाम लिखो जो किसी चीज़ के नाम पर पड़े हैं । (2)

उदाहरण : आसमान - आसमानी

-----  
-----

(viii) दिए गए मुहावरे का वाक्य में प्रयोग करो । (1)

क) दिन रात एक करना

-----  
-----

(शब्द भंडार पर आधारित प्रश्न - 10 अंक )

प्र. 7 (i) विलोम शब्द लिखो । (2)

सवाल \_\_\_\_\_ कंजूस \_\_\_\_\_

(ii) समान तुक वाले शब्द लिखो । (2)

पन्ने - \_\_\_\_\_ सोने - \_\_\_\_\_

(iii) एक - एक चीज का नाम बताओ जिन्हें- (2)

बिलोते - \_\_\_\_\_ घोलते हैं - \_\_\_\_\_

(iv) उदाहरण को पढ़कर नीचे दी गई तालिका को आगे बढ़ाओ । (2)

उदाहरण : लाल - रंग

आलू - \_\_\_\_\_

भारत - \_\_\_\_\_

(v) नीचे लिखे वाक्यांशों के लिए एक - एक शब्द लिखो । (2)

जो बहुत पढ़ता है - \_\_\_\_\_

जो बहुत अच्छा खेलता है - \_\_\_\_\_

(वर्तनी पर आधारित प्रश्न - 10 अंक )

प्र. 8 (i) वाक्य शुद्ध (सही) करके लिखो । (2)

क) स्कूल का बस आ रहा है ।

-----

ख) मेरे को बाज़ार जाना है ।

-----

(ii) दिए गए शब्दों के छूटे हुए अक्षर लिखकर शब्दों को पूरा करो। (3)

(क) बि ---- ली (ख) आश्र ---- (ग) क ----- डी

(iii) अक्षरों को सही क्रम में लिखकर शब्द बनाओ । (2)

क) का र त री - -----

ख) ख र बा अ - -----

(iv) शुद्ध शब्दों पर गोला लगाओ । (3)

नरियल

नारियल

नारीयल

बिल्कुल

बिलकुल

बिल्कूल

आभिनय

अभीनय

अभिनय



( सुलेख- 5 अंक)

प्र. 9 नीचे लिखे अनुच्छेद को सुंदर लेख में लिखिए ।

स्वस्थ शरीर में ही स्वस्थ मन निवास करता है। निरोगी काया सबसे बड़ा सुख है । संसार में किसी भी अच्छे कार्य को यदि करना है तो स्वास्थ्य का ठीक होना आवश्यक है । इसलिए कहा गया है, "एक तंदुरुस्ती हजार नियामत"। हमें शरीर को स्वस्थ रखने के लिए नियमित रूप से योग करना चाहिए । योग शरीर को सुंदर, सुगठित और सुदृढ़ बनाता है ।

---

---

---

---

---

---

---

---



परमाणु ऊर्जा शिक्षण संस्था  
Atomic Energy Education Society

वार्षिक परीक्षा / Annual Examination 2024-25

कक्षा / Class : IV

अवधि / Duration : 3 Hours

विषय / Subject : Mathematics

अधिकतम अंक / Maximum Marks : 80

---

**विद्यार्थी द्वारा भरा जाए / To be filled by the Student**

अद्वितीय परीक्षा क्रमांक/Unique Examination No: \_\_\_\_\_

कक्षा / अनुभाग Class / Sec.: \_\_\_\_\_ दिनांक / Date: \_\_\_\_\_

परीक्षा का दिन / Day of Examination: \_\_\_\_\_

विद्यालय का नाम / Name of the School: \_\_\_\_\_

हस्ताक्षर निरीक्षक (दिनांक सहित) / Invigilator's Sign. (With date): \_\_\_\_\_

---

**अध्यापकों द्वारा भरा जाए / To be filled by the Teachers**

प्राप्त अंक / Marks Obtained  पूर्णांक / Total Marks

हस्ताक्षर परीक्षक (दिनांक सहित) / Examiner's Sign. (With date): \_\_\_\_\_

हस्ताक्षर जाँचकर्ता (दिनांक सहित) / Cross Checker's Sign. (With date): \_\_\_\_\_

हस्ताक्षर परीक्षा प्रभारी (दिनांक सहित) / Exam I/C Sign. (With date): \_\_\_\_\_

---

**सामान्य निर्देश / General Instructions:**

**This paper consists of the following section**

**Section A : Knowledge (20 marks)**

**Section B : Understanding (20 marks)**

**Section C : Ability to compute (20 marks)**

**Section D : Problem solving (20 marks)**

**All questions are compulsory.**

### **SECTION A : KNOWLEDGE (20 MARKS)**

**I. Choose the correct option and fill in the blanks.**

**(1x6=6)**

1) The tables of 6 and \_\_\_\_\_ are used for writing the table of 9.

- a) 5                      b) 3                      c) 4

2) The weight of a guava will be \_\_\_\_\_ approximately.

- a) 3kg                      b) 5 kg                      c) 500g

3) If a number is multiplied by 0 and 2 is added to the product gives the result \_\_\_\_\_.

- a) 2                                      b) 6                                      c) 0

4) A circle has \_\_\_\_\_ centre.

- a) two                      b) one                      c) three

5) 12 notes of 200 rupees = \_\_\_\_\_ rupees.

- a) 2400                      b) 2000                      c) 1200

6) If ☾ stands for 15 moons then ☾ ☾ ☾ show \_\_\_\_\_ moons.

- a) 60                                      b) 30                                      c) 45

## II. Do as directed.

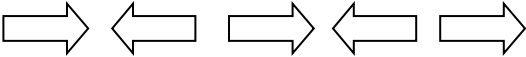

**(2x5=10)**

1) What different things do people go to post office for? Write any two.

2) Fill in the boxes.

Radius	Diameter
6 cm	
	20 cm


3) What should come next?

- a.  \_\_\_\_\_
- b.  \_\_\_\_\_

4) Shade the given figure according to the fraction.

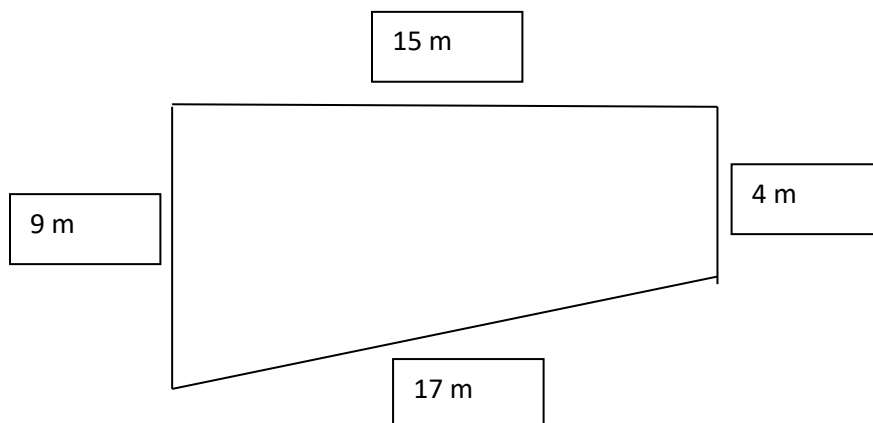


a.  $\frac{2}{3}$



b.  $\frac{4}{10}$

5) Calculate the length of the boundary of the given field.



Boundary = \_\_\_\_ m

**III. Summer brings icy drinks with it. So, answer the questions on the basis of the following pictograph which shows the number of drinks sold in these week days.**

**(1x4=4)**



1) Which day had the minimum sale of drinks?

---

2) Which day had the maximum sale of drinks?

---

3) Which day had more sale than Thursday?

---






4) Which day had less sale than Wednesday?

---

## **SECTION B : UNDERSTANDING (20 MARKS)**

### **I. Fill in the blanks.**

**(1x6=6)**

- 1) 12 legs mean 3 cats. 16 legs means \_\_\_\_\_ cats.
- 2) Number of days in 7 weeks = \_\_\_\_\_.
- 3) The total length of the boundary of any figure is called \_\_\_\_\_.
- 4) The longest chord of the circle is the \_\_\_\_\_.
- 5) If  shows 3 buses, then     shows \_\_\_\_\_ buses.
- 6) Division is repeated \_\_\_\_\_.

### **II. Do as directed.**

**(2x5=10)**

1) Fill in the blanks using grams or kilograms:

- a. A spoon of pepper weighs 10 \_\_\_\_\_.
- b. A sack of rice weighs 75 \_\_\_\_\_.
- c. A pencil weighs 10 \_\_\_\_\_.
- d. A packet of sugar weighs 500 \_\_\_\_\_.

2) Divide the rectangles into four equal parts in two different ways.



3) Match the following:

a) 4 quarters

i) liquid items

b) multiplication

ii) 48 legs

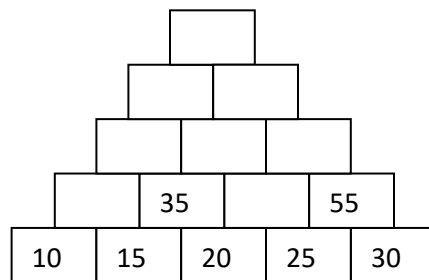
c) 12 dogs

iii) whole

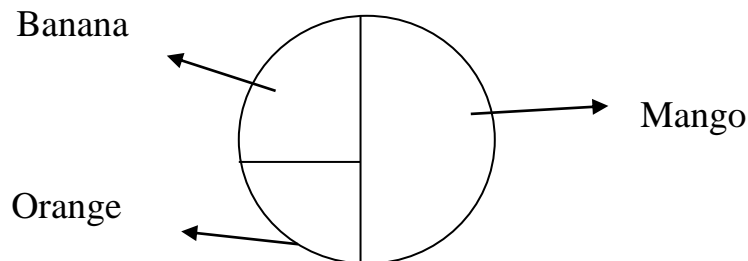
d) litres

iv) repetitive addition

4) Complete the number tower.



5) Nisha made a chapati chart after asking her 60 friends about the fruit they like to eat.



Observe the above chapati chart and answer the given questions.

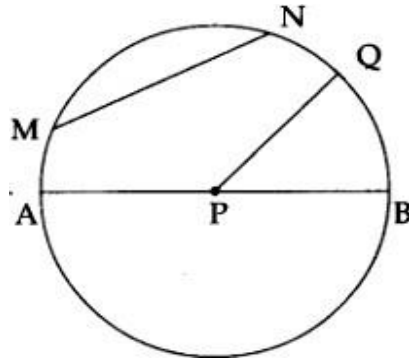
a. How many children like to eat mango? \_\_\_\_\_

b. Children who like to eat orange are  $\frac{1}{4}$  or  $\frac{1}{2}$  of the total children.

\_\_\_\_\_

**III. Look at the following figure and fill in the blanks.**

**(1x4=4)**



- 1) \_\_\_\_\_ is the chord of the circle.
- 2) \_\_\_\_\_ is the centre of the circle.
- 3) \_\_\_\_\_ is the radius of the circle.
- 4) \_\_\_\_\_ is the diameter of the circle.

**SECTION C : ABILITY TO COMPUTE (20 MARKS)**

**I. Choose the correct answer and fill in the blanks.**

**(1x4=4)**

1) Three and half litres = \_\_\_\_\_ mL.

a. 3500 mL

b. 3800 mL

c. 3000 mL

2) \_\_\_\_\_ is the longest chord of a circle.

a. radius

b. diameter

c. centre



3)  $\frac{1}{2}$  kg + 750g +  $\frac{3}{4}$  kg = \_\_\_\_\_ g

a. 1200g

b. 1500g

c. 2000g

4)  $77 \times$  \_\_\_\_\_ = 7700

a. 1000

b. 100

c. 110

**II. Solve the following.**

**(2x6=12)**

1) Meera made 245 candles to sell in the market. She makes packets of 5. How many packets will she make?

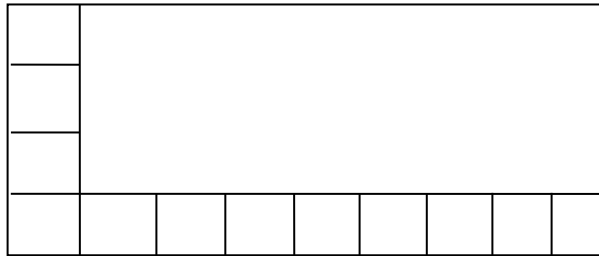
2) There are 46 children.  $\frac{1}{2}$  of them are girls. How many children are boys?

3) Divide 460 by 8 and write the

Remainder : \_\_\_\_\_

Quotient : \_\_\_\_\_

4) How many squares of one centimetre can fill the whole rectangle?



5) Complete the magic square using numbers 1-9 (without repeating the numbers)

**Rule: The numbers on each line add up to 15.**

	5	

6) Draw circles of radius 3 cm and 4 cm with a common centre. Mark the common centre 'O'.

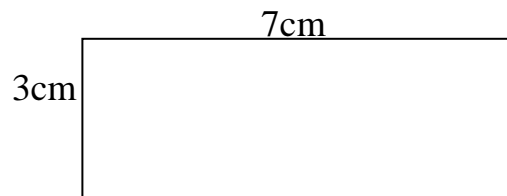
**III. Sohail wants change for 1000 rupees. How many notes will he get if he wants in return -----** **(1x4=4)**

- 1) All 100 rupee notes? \_\_\_\_\_
- 2) All 50 rupee notes? \_\_\_\_\_
- 3) All 200 rupee notes? \_\_\_\_\_
- 4) All 500 rupee notes? \_\_\_\_\_

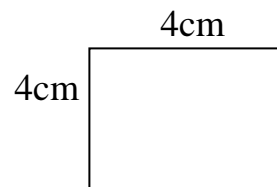
**SECTION D : PROBLEM SOLVING ABILITY (20 MARKS)**

**I. Write true and false for the given statement.** **(1x4=4)**

- 1) Field A and field B have the same boundary. \_\_\_\_\_



Field A



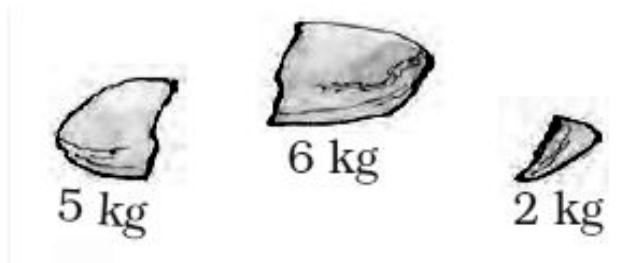
Field B

- 2) 4 parts out of 7, can be written as  $\frac{4}{7}$ . \_\_\_\_\_
- 3) If  $A=1$ ,  $B=2$ ,  $C=3$  and so on. Then 7, 12, 15, 23 means GLOW. \_\_\_\_\_
- 4) The weight of your body is measured in litres. \_\_\_\_\_

**II. Do as directed.** **(2x6=12)**

- 1) Arrange 12 balls in two different ways.

2) How will you balance the given weights of firewood by using stones of 5 kg, 6 kg and 2 kg.



a. Firewood of 3 kg



b. Firewood of 7 kg



3. Mohit brought 11 storybooks to his class. Today 33 students are present. How many children will need to share one book?

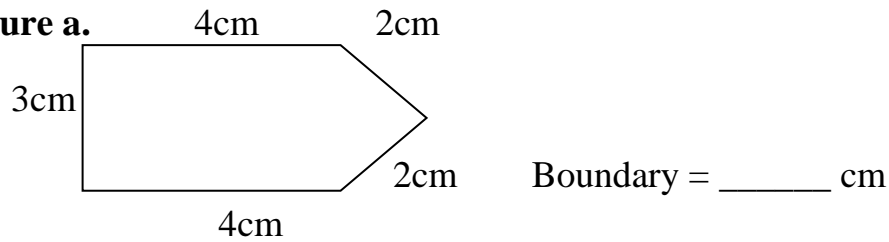
4. Complete the given patterns:

(i) 112, 114, 116, \_\_\_\_\_

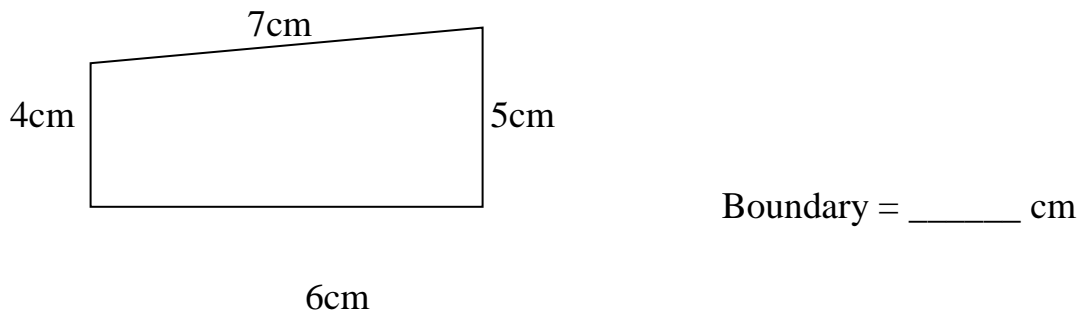
(ii) 7, 21, 35, \_\_\_\_\_

5. Pictures of two shapes are given below. Find out which one has the shortest boundary.

**Picture a.**



**Picture b.**



Picture \_\_\_\_\_ has the shortest boundary.













6) Madhu has not gone to school for 14 days. For how many weeks was she away from school?

### III. See the smart chart and answer the questions given below:

Class IV - Favourite co-curricular activity.

(1x4=4)

Note:  = 5 children.

Dancing	  
Singing	   
Art	 
Woodcraft	  

a) How many children like dancing?

---

b) How many children like singing?

---

c) Which 2 extra curricular activities are liked by same number of children?

\_\_\_\_\_ and \_\_\_\_\_

d) Which activity is the least popular activity?

---

**SPACE FOR ROUGH WORK**



## परमाणु ऊर्जा शिक्षण संस्था

**Atomic Energy Education Society**  
**वार्षिक परीक्षा / Annual Examination 2024-25**

**कक्षा / Class : IV**

**अवधि / Duration : 3 Hours**

**विषय/ Subject :EVS**

**अधिकतम अंक / Maximum Marks : 80**

**विद्यार्थी द्वारा भरा जाए / To be filled by the Student**

अद्वितीय परीक्षा क्रमांक / Unique Examination No: \_\_\_\_\_

कक्षा / अनुभाग Class /Sec.: \_\_\_\_\_ दिनांक / Date: \_\_\_\_\_

परीक्षा का दिन / Day of Examination: \_\_\_\_\_

विद्यालय का नाम / Name of the School: \_\_\_\_\_

हस्ताक्षर निरीक्षक (दिनांक सहित) / Invigilator's Sign. (With date): \_\_\_\_\_

**अध्यापकों द्वारा भरा जाए / To be filled by the Teachers**

प्राप्तांक / Marks Obtained

पूर्णांक / Total Marks

हस्ताक्षर परीक्षक (दिनांक सहित) / Examiner's Sign. (With date): \_\_\_\_\_

हस्ताक्षर जाँचकर्ता (दिनांक सहित)/Cross Checker's Sign. (With date): \_\_\_\_\_

हस्ताक्षर परीक्षा प्रभारी (दिनांक सहित) / Exam I/C Sign. (With date): \_\_\_\_\_

**सामान्य निर्देश / General Instructions:**

**There are three sections:**

**Section A (Observation and Reporting) carries 30 marks**

**Section B (Identification and Classification) carries 25 marks**

**Section C (Discovery of Facts) carries 25 marks**

**1. All questions are compulsory.**



**Section A : Observation and Reporting ( 30 marks)**

**Q1. Observe the given pictures and fill in the blanks.**

**( 1 x 6 =6 marks)**

a) The fire lighted during celebration of Bihu is called \_\_\_\_\_.( cheva    mezi    pitha)




b) \_\_\_\_\_ gives yellow colour to the food and heals wounds.

(Ginger      Clove      Turmeric)



c)The prayer done in the Gurudwara is called \_\_\_\_\_ .  
(ardaas      pooja      namaz)



d) \_\_\_\_\_ is an instrument used to see far things nearer.

(Lens      Peep hole      Binoculars)



e) \_\_\_\_\_ trees are common in Skitpo Pul village.    ( Poplar      Banyan      Neem)



f) The immediate medical care given to an injured person is called \_\_\_\_\_ .

(first help      first aid      medical help)



**Q2. Identify and name the following.**

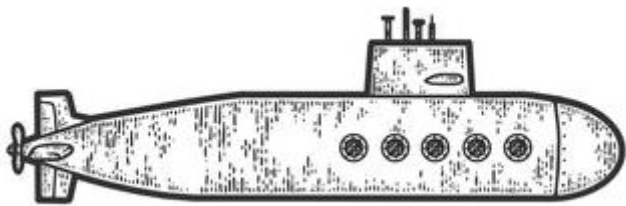
**(1 x 5 = 5 marks)**



a) \_\_\_\_\_




b) \_\_\_\_\_



c) \_\_\_\_\_



d) \_\_\_\_\_



e) \_\_\_\_\_

**Q3. Choose and tick (✓) the correct answer.**

**(1 x 4 = 4 marks)**

- a) Plants like wheat, rice and onion have (tap / fibrous) roots.
- b) A tomato has (smooth / rough) surface.
- c) Pilloo aunty paid the money for seven kulfis. This shows her ( friendliness / honesty).
- d) Wahida prism is from (Thannamandi/ Mukhtapur) village.

**Q4. Answer the following questions in 2 to 3 sentences.**

**(2 x 5 =10 marks)**

- a) What did Raziya read in the newspaper?

---

---

---

---

- b) What do you think about Dhondu's decision to buy a chakki? Why?

---

---

---

---

- c) What are sand dunes? Where is it found?

---

---

---

---

d) What is Khunti and what is it used for?

---

---

---

---

e) Why do birds make nest?

---

---

---

---

**Q5) Many steps needed to grow crops. Look at the picture and mark them in correct order. (5 x 1 = 5 marks)**



dig the soil, loosen it

☐

sow the seeds

☐

harvesting

☐

fill them in a gunny bag

☐

removing weeds

☐

**Identification and Classification. (25)**

**Q6. Give any two examples for each.**

**(1 x 4 =4 marks)**

a) Harvest festivals in India.

\_\_\_\_\_

\_\_\_\_\_

b) Enemies of birds.

\_\_\_\_\_

\_\_\_\_\_

c) Two roots that we eat.

\_\_\_\_\_

\_\_\_\_\_

d) Vegetables that spoil quickly.

\_\_\_\_\_

\_\_\_\_\_

**Q7. Circle the one which does not belong to the group.**

**(1 x 4 = 4 marks)**

- |            |        |             |          |
|------------|--------|-------------|----------|
| a) lame    | dumb   | naughty     | blind    |
| b) thread  | looms  | needle      | cardamom |
| c) chilli  | salt   | water       | sugar    |
| d) brinjal | tomato | cauliflower | gourd    |

**Q8. Identify- Who am I ? Write the answer in the given box.**

**(1 x 2 =2 marks)**

a) I can be powdered fine

To make food hot and spicy,

If too much of me is added I make you gasp – shheee... shheee,

Your eyes and nose begin to water

And you cry!

b) I look like a nail but a bud am I,

Chocolate brown colour and a strong smell have I.


When your toothache

makes you shout,

I soothe the pain in your mouth.

**Q9. Label the parts.**

**(2 marks)**



wings

beak

legs

feathers

fly

**Q10. Answer the following Questions.**

**(2 x 2 = 4 marks)**

a) Write about any two ways in which a bird uses its beak?

---

---

---

---

b) Write any two duties of a doctor in a Naval Ship.

---

---

---

---

**Q11. Classify the following in the correct column.**

**(2 marks)**

CARROT

TOMATO

CUCUMBER

SPINACH

Vegetables with seeds	Vegetables without seeds

**Q12. Write any two differences between Abu Dhabi and Kerala.**

**(2 marks)**

Abu Dhabi	Kerala

**Q13. Write five sentences on Pochampalli Saree.**

**(1 x 5 =5marks)**

**Or**

**Write the steps to make spicy potato chaat.**

---

---

---

---

---

---

---

**Discovery of Facts (25 marks)**

**Q14. Match the following.**

**(1 x 5 =5marks)**

a) Pochampalli

1) Ladakh

b) Skitpo pul

2) Andhra Pradesh

c) Belvanika

3) Gujarat

d) Bhavnagar

4) Karnataka

e) Nallamada

5) Telangana



**Q15. Name the following.**

**(1x 3 =3 marks)**

- a) A bird that lays eggs in crow's nest. \_\_\_\_\_
- b) Loss of excess water and salts from our body. \_\_\_\_\_
- c) The Children's Panchayat in Holgundi. \_\_\_\_\_

**Q16. True or False.**

**(1 x 4 = 4 marks)**

- a) Snakes chew their food with their teeth. ( )
- b) Nandita came to Mumbai for her mother's treatment. ( )
- c) The water park had no water to play and enjoy. ( )
- d) Full form of ORS is "Oral Rehydration Solution". ( )

**Q17.) Write a short note on Mid- day Meal.**

**(2 marks)**

---

---

---

---

---

**Q18. Give reasons.**

**(2 x 3 = 6 marks)**

a) People wear loose cotton clothes and cover their heads in Abu Dhabi.

---

---

---

---

b) Nandita felt like vomiting when she first used the toilet where mama live.

---

---

---

---

c) Chuskit couldn't go to school.

---

---

---

---

**Q19. On the outline map of India mark the following states. (1 x 5 = 5 marks.)**

**a) Kerala b) Maharashtra c) Gujarat d) Telangana e) Karnataka**

